

BUTERE MUMIAS EVALUATION PAPER

GRADE 3 TERM I-2019

MATHEMATICS



Name _____


School _____


Date _____

Circle the greater number

1. 16, 12
2. 32, 33
3. 21, 27

Count and write

4.  _____

5.  = _____

Add by breaking apart

6. $900 + 50 = 800 + \underline{\quad} + \underline{\quad}$
7. $600 + 300 = 400 + \underline{\quad} + \underline{\quad}$
8. $390 + 10 = 200 + \underline{\quad} + \underline{\quad}$

Arrange the following numbers from the least to the greatest

9. 208, 187, 710, 29, 125, 98

10. 305, 87, 315, 110, 92, 101, 78, 123, 132

11. 2, 4, 12, 8, 16, 20, 18

Work out

12. Obado wants to buy 27 books. He has bought 14 books. How many more books must he buy?

13. Nafula was collecting bottles she had 6 bottles on Monday and 8 bottles on Tuesday. She had 10 bottles on Wednesday and 12 bottles on Thursday. How many bottles did Nafula have on Friday? _____

Write the following numbers in words or figures

14. 210 _____
15. 88 _____
16. Nine hundred and ninety two

17. Seven hundred and seven

Subtract

18. $62 - 2 = \underline{\quad}$
19. $853 - 322 = \underline{\quad}$
20.
$$\begin{array}{r} 974 \\ - 850 \\ \hline \end{array}$$

21. $15 - 5 = \underline{\quad}$

What is the next number in the pattern?

22. 11, 15, 20, _____, 33, 41
23. 6, 11, 17, _____, 32, 41
24. 10, 13, 17, 22, 28, _____

Complete the number family

25. $7 + 5 = \underline{\quad}$ $5 + 7 = \underline{\quad}$

26. $12 - 5 = \underline{\quad}$ $12 - 7 = \underline{\quad}$

Which number comes before and after

27. $\underline{\quad}$, 648, $\underline{\quad}$

28. $\underline{\quad}$, 101, $\underline{\quad}$

29. $\underline{\quad}$, 885, $\underline{\quad}$

30. $\underline{\quad}$, 200, $\underline{\quad}$

Add

31.
$$\begin{array}{r} 575 \\ + 316 \\ \hline \end{array}$$

32.
$$\begin{array}{r} 336 \\ + 336 \\ \hline \end{array}$$

33. $78 + 17 = \underline{\quad}$

34.
$$\begin{array}{r} 809 \\ + 146 \\ \hline \end{array}$$

35. $28 + 20 = \square + 23$

36. $\square + 34 = 18 + 41$

37. $32 + 16 = 26 + \square$

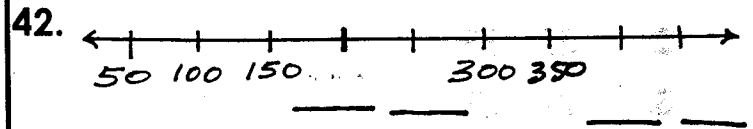
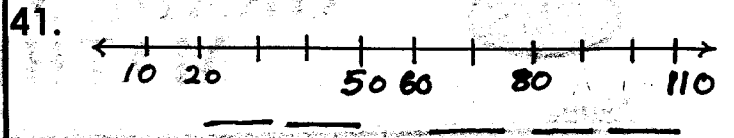
Write the number

38. $\begin{array}{c} \text{||||} \\ \hline \end{array}$ $\underline{\quad}$

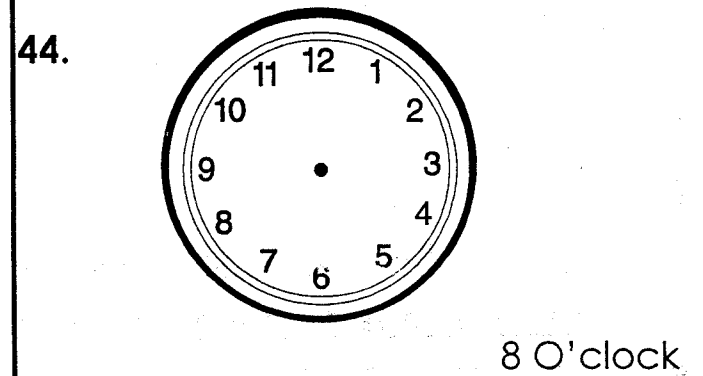
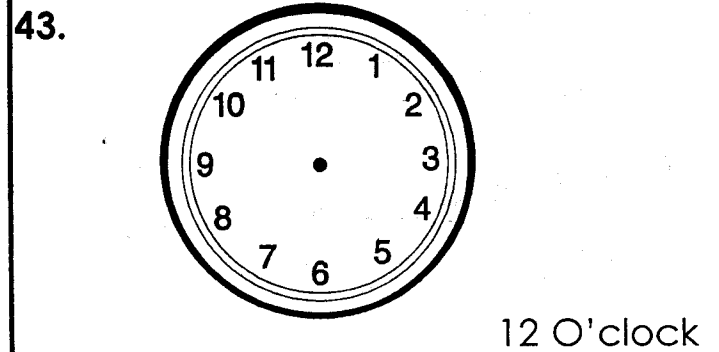
39. $\begin{array}{c} \text{||||} \\ \hline \end{array}$ $\underline{\quad}$

40. $\begin{array}{c} \text{||||} \quad \text{||||} \\ \hline \end{array}$ $\underline{\quad}$

Fill in the missing number



Draw hands on the clockface to show the time given



45. Subtract 8 from 36 = $\underline{\quad}$

46. Take away 6 from 94 = $\underline{\quad}$

Multiply

47. $8 \times 7 = \underline{\quad}$

48.
$$\begin{array}{r} 10 \\ \times 4 \\ \hline \end{array}$$

49. Share 15 sweets among 3 boys each boy will get $\underline{\quad}$ sweets.

50. What is a half of 20? $\underline{\quad}$