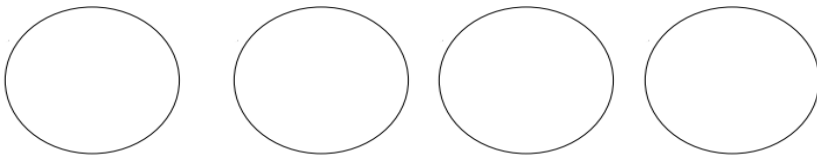


MATHEMATICAL ACTIVITIES - CBC PP1 END TERM 3 EXAMS

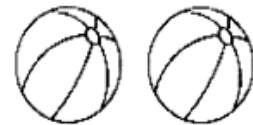
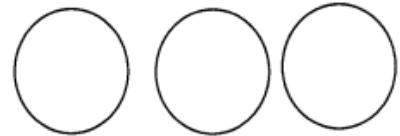
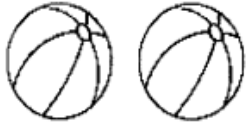
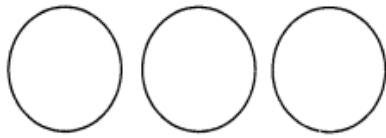
Name the numbers

1 2 3 4 5

Count



Match the pictures



ADD

