

TARGETER EXAMS SERIES 7

KPSEA SEVENTH TRIAL-22

Class of KPSEA 2024

The PDF Comprises of assessment Questions Meant to prepare the learners to prepare for the KPSEA National Exams set for October 2024.

For Marking Schemes:

Order online at: www.kenyaeducators.co.ke

Or

Contact Kenya Educators Consultancy

0724333200

0795491185

0768321553

Visit our Website kenyaeducators.co.ke or Contact us on 0724333200 for CBC (pp1-grade 6), JSS (Grades 7 and 8) and Highschool levels (Forms 1-4) Exams, Lesson Notes and Schemes of Work, CBC report card books, lesson plans, Curriculum Designs and Official CBC Training Materials.

KENYA EDUCATORS CONSULTANCY

Compiled and distributed by Kenya Educators Consultancy- 0724333200

Website: www.kenyaeducators.co.ke

TARGETER WINGS
KENYA PRIMARY SCHOOL EDUCATION ASSESSMENT
GRADE 6 - YEAR 2022
CREATIVE ARTS AND SOCIAL STUDIES



Wings
007

TIME: 1 Hour 40 Minutes

INSTRUCTIONS TO CANDIDATES (Please read these instructions carefully)

1. You have been given this question booklet and a separate answer sheet. The question booklet contains 50 questions.
2. When you have chosen your answer, mark it on the **ANSWER SHEET** not in this question booklet.

HOW TO USE THE ANSWER SHEET

3. Use an ordinary pencil.
4. Confirm that the answer sheet provided with has the following:
YOUR ASSESSMENT NUMBER
YOUR NAME
NAME OF YOUR SCHOOL
NAME OF SUBJECT
5. Do not make any marks outside the boxes.
6. Keep the sheet as clean as possible and do not fold it.
7. For each of the questions 1-50, four choices are given. The choices are lettered A, B, C and D. In each case, only **ONE** of the four choices is correct. Choose the **correct** answer from the choices.
8. On the answer sheet, the correct answer is to be shown by drawing a dark line inside the box in which the letter you have chosen is written.

Example

In the Question Booklet:

16. Solo folk songs are performed by

- A. a group of people B. children only
C. one person D. people who are mourning

The correct answer is C.
On the answer sheet.

In the set of boxes numbered 16, draw a **dark line** inside the box with the letter C printed in it as indicated below.

15. [A] [B] [C] [D] 16. [A] [B] [C] [D] 17. [A] [B] [C] [D] 18. [A] [B] [C] [D]

9. Your dark line **MUST** be within the box.
10. For each question, **ONLY ONE** box is to be marked in each set of four boxes.

This question paper consists of 8 printed pages

**CREATIVE ARTS & SOCIAL STUDIES ASSESSMENT
GRADE 6**

TW - 007

ART AND CRAFT

1. Look at the picture below keenly. How was rhythm and movement achieved while drawing it?




- A. Progression B. Repetition
C. Alteration D. Overlapping
2. Which of the following is **not** a method of decorating clay items by creating impressions or marks on the clay items?
- A. Embedding B. Incising
C. Scratching D. Stamping
3. A grade 5 learner was taking pictures for the art painting lesson. The student was focused on making the image have sharp details. Which element of photography was the student focusing on?
- A. View point B. Centre of interest
C. Lighting D. Focus
4. While decorating a wristband, which method can you use to attach the beads on the leather.
- A. Stapling B. Sticking
C. Punching D. Embedding
5. A series of pages which are drawn and arranged in a sequence for flipping to create an illusion of movement are called
- A. flip-book B. frame rate
C. frames D. frequency time

6. Drawing forms that one has not seen or interacted with before is known as
- A. imaginative composition.
B. drawing from memory.
C. drawing from observation.
D. smudging.
7. Which one is **not** a technique used for making marionettes?
- A. Carving
B. Assemblage
C. Construction
D. Texturing
8. A grade 6 learner was making a collage using the following steps.
- i) *Arrange the materials on the surface according to your sketch.*
ii) *Stick and paste the materials on the background.*
iii) *Select a surface on which to stick the materials.*
- Arrange the steps **correctly** from the first to the third.
- A. ii, iii, i
B. i, ii, iii
C. iii, i, ii
D. ii, i, iii
9. What is a single unit of a design that is repeated to make a pattern?
- A. Viewpoint
B. Motif
C. Stencil
D. Centre of interest
10. A grade 6 learner was exhibiting her art work. She made sure that her exhibiting space was well lit to ensure visibility. Which element of exhibition was she taking into consideration?
- A. Display surface
B. Use of space
C. Lighting
D. Decoration of surfaces

MUSIC

11. In which verse does the Kenya national anthem begin with the words “Amkeni ndugu zetu”?
- A. Verse 1 B. Chorus
C. Verse 3 D. Verse 2

12. This Kenyan stringed music instrument comes from the Luo community. What is its name?



- A. Shiriri B. Orutu
C. Ukelele D. Wandindi

13. The French rhythm name given to a semibreve is _____

- A. Ta-te B. Taa-aa
C. Taa - aa-aa-aa D. Taa-te-ta

14. Pitch in music means the loudness or softness of sound. True or false?

- A. False B. True
C. We can't tell D. It is tone

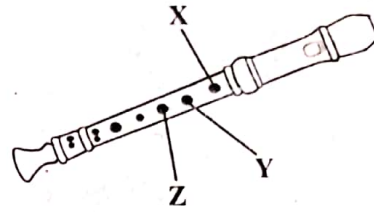
15. The part of drum which is hit to produce sound is commonly referred to as the _____

- A. tuning laces B. membrane
C. resonator D. leather

16. A grade 6 boy sung the following song. “Ni kwa neema yake Mungu, Ni kwa uwezo wake Bwana.....” What type of song is this likely to be?

- A. Sacred song
B. Story song
C. Lullaby song
D. Patriotic song

17. Which two holes must be covered on the recorder in order to play note A?



- A. X and Z
B. Y and Z
C. X and W
D. X and Y

18. Which of the following is **not** an element of a folk song?

- A. Climax
B. Reflection
C. Vocal ornamentation
D. Tone

19. The lead singer in a folk song is commonly called a _____

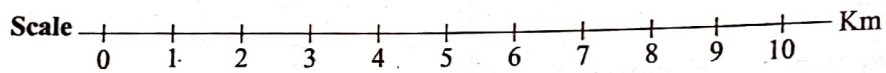
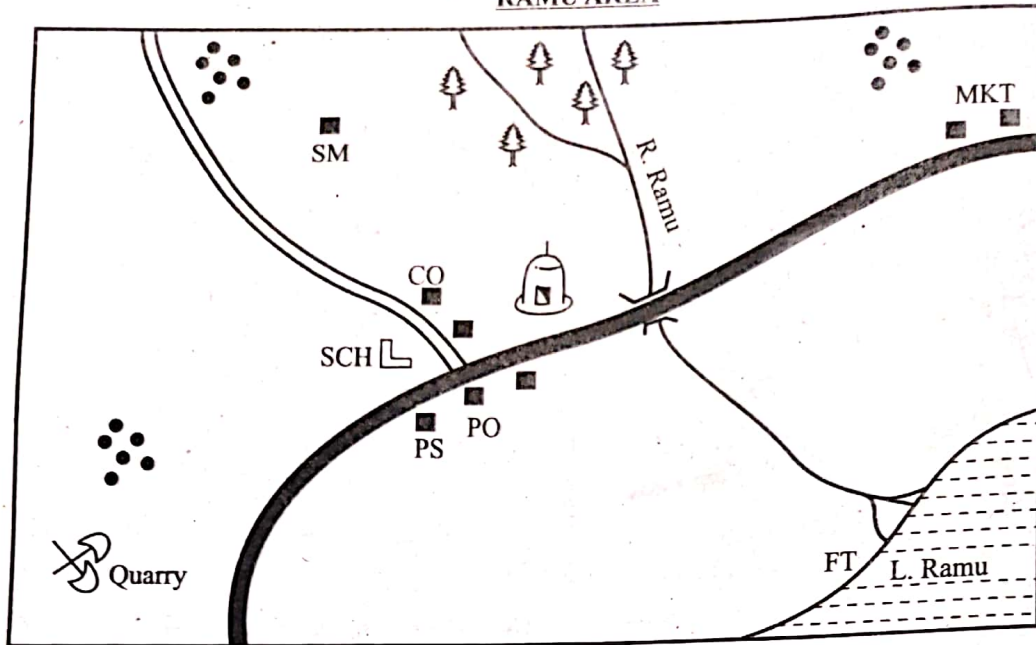
- A. soloist
B. hype-man
C. solo performer
D. dancer

20. Directions given in a piece of music that guide someone on how to perform the song are known as

- A. orders
B. performance cues
C. clues
D. verses

SOCIAL STUDIES

RAMU AREA



KEY

	Forest		Permanent buildings	P.O.	Post Office
	River and Bridge		Murrum road	PS	Police Station
	Tarmac road		Settlements	FT	Fish Trap
	Mosque	SCH	School	CO	County Offices
		SM	Saw mill	MKT	Market

Study the map of Ramu area and answer questions

21 - 24.

21. Teacher Lutta at Sunrise Academy took his pupils for an educational trip at Ramu area. The pupils learnt the following economic activities **except**

- A. fishing B. crop farming
C. lumbering D. mining

22. The population distribution pattern in Ramu area can be described as

- A. linear B. sparse
C. clustered D. dense

23. The climate to the Northern part of Ramu area can be described as

- A. cool and wet B. cool and dry
C. hot and dry D. hot and wet

24. Residents in Ramu area are **mainly**

- A. Muslims B. Christians
C. Traditionalists D. Hindus

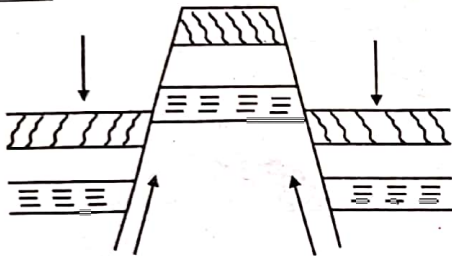
25. Which country borders Sudan to the West?

- A. Chad B. Egypt
C. Uganda D. D.R. Congo

26. The Luo community found in Kenya are likely to have originated from
- Congo forest
 - Southern Arabia
 - Horn of Africa
 - Bar al Ghazel


27. The following are positive effects of high population **except**
- increased market for products.
 - land fragmentation.
 - attracts investment.
 - increased tax collected by government.

Use the diagram below to answer questions 28 and 29.



28. The above diagram shows the formation of
- horst mountain
 - fold mountain
 - volcanic mountain
 - residual mountain
29. Three of the following are examples of the above mountain **except**
- Ruwenzori mountains
 - Danakil Alps
 - Pare mountains
 - Mount Longonot
30. The following are factors that influence beef farming in Eastern Africa. Which **one** does not?
- Availability of large pieces of land.
 - Demand for beef products.
 - Capital availability.
 - Presence of fertile soil.

31. The fishing method described below is likely to be



- long lining
 - trawling
 - net drifting
 - purse seining
32. The Agiriama leader that led her community against the British was called
- Mekatilili wa Menza
 - Masaku
 - Chief Kivoi
 - Koitalel Arap Samoei
33. The following are functions of a certain school official.
- He makes the master timetable.
 - He is incharge of discipline.
 - He supervises class attendance.
- The school official described above is likely to be
- senior teacher
 - class teacher
 - headteacher
 - deputy headteacher
34. The capital city of Rwanda is located at
- Kampala
 - Bujumbura
 - Kigali
 - Addis Ababa
35. The **main** tourist attraction in Eastern Africa is
- warm temperature
 - wildlife
 - pre-historic sites
 - sandy beaches

SECTION A:**CHRISTIAN RELIGIOUS EDUCATION**

36. Jesus taught His disciples the Lord's prayer. Which of the following statement has been extracted from the prayer?
 A. The father almighty.
 B. Creator of heaven and earth.
 C. Holy Mary mother of God.
 D. Our father who art in heaven.
37. Peter the disciple of Jesus was also referred to as
 A. The Foundation B. The Rock
 C. The Fisherman D. The Betrayer
38. You are on your way home from school. A stranger offers to buy you sweets in order to touch and hug you. What is the **best** action to take?
 A. Accept the offer.
 B. Run away as you call for help.
 C. Scream for help as you stand with the stranger.
 D. Tell him or her that it is wrong to talk to strangers.
39. Praise and Mwiaki are grade six learners. They are cousins. From the choices below, select one that is another member of the extended family.
 A. Nephew B. Father
 C. Mother D. Brother
40. The following pairs consists of the disciples of Jesus. Which pair is made of the sons of Zebedee?
 A. Simon and Andrew B. Simon and James
 C. James and John D. Levi and Peter
41. "On no sir, I do not deserve to have you come into my house. Just give the order, and my servant will be healed." This statement was said by the Roman Officer to Jesus. It shows that
 A. the Roman Officer was afraid of Jesus.
 B. the Roman Officer hated visitors.
 C. the Roman Officer was sinful.
 D. the Roman Officer had faith in Jesus.
42. Which statement **correctly** defines patriotism?
 A. Love for your country.
 B. Love for God.
 C. Having many friends.
 D. Being responsible.
43. What is a parable?
 A. Stories narrated by Jesus.
 B. A simple story used to teach a moral lesson.
 C. A rare worthy stone.
 D. Something of great worth and value.
44. Pick an activity that you should engage in as a responsible citizen.
 A. Asking for bribes from those you serve.
 B. Cutting down trees.
 C. Cleaning the environment.
 D. Poaching.
45. Why do you think the Bible is different from other books?
 A. It has many books.
 B. It was written by authors inspired by the Holy Spirit.
 C. It has small writings.
 D. It is made up of many stories.
46. The following are ways using leisure. Which one is an inappropriate way?
 A. Watching the television.
 B. Playing football.
 C. Gossiping.
 D. Reading a story book.
47. Which pair contains Old Testament books of the Bible only?
 A. Jude, Psalms B. Mark, Luke
 C. Ruth, Judges D. Genesis, Titus
48. In which town did Jesus raise a widow's son?
 A. Nazareth B. Nain
 C. Jerusalem D. Cana

49. The following are values learnt from the ten commandments **except**
A. purity
C. respect

B. contentment
D. pride

50. On which day did God create the sun, moon and stars?

A. Fourth
C. Sixth

B. Third
D. First

SECTION A:

ISLAMIC RELIGIOUS EDUCATION

36. Which surah of the Qur'an talks about the clear evidence?

A. Zilzalah
C. Maun

B. Bayyinah
D. Asr

37. Maryam a grade six learner has developed a habit of coming to school late. Which surah would you advise her to read?

A. Fatiha
C. Asr

B. Kauthar
D. Humaza

38. The habit of backbiting is discouraged in surah

A. Humaza
C. Adiyat

B. Falaq
D. Naas

39. Which surahs must be recited in every swalat?

A. Falaq
C. Ikhlas

B. Naas
D. Fatiha

40. How many times should a Muslim pray in a day?

A. Five
C. Seventeen

B. Ten
D. Six

41. Complete the following hadith of the prophet, "Say the truth even though it is _____."

A. good
C. bitter

B. bad
D. strong

42. Janaan, a grade three learner has the following characteristics.

i) *She is a liar.*

ii) *She does not fulfil her promises.*

iii) *She always betrays trust.*

These are signs of a

A. Muslim
C. muhsiniin

B. munafiq
D. mutaqaen

43. While performing a certain fardh salat, Marjan was seen performing only three rakaat. Which prayer was he **likely** to be performing?

A. Dhuh
C. Isha

B. Asr
D. Maghrib

44. Who among the following people is **not** a recipient of zakat?

A. Debtors
C. Needy

B. Poor
D. Orphan

45. During which month do Muslims fast?

A. Rabiul - Awwal
C. Rajab

B. Ramadhan
D. Dhul-hijjah

46. Radhia a grade six learner was asked to name the angel of Allah who controls rainfall. Which answer was she **likely** to give?

A. Jibril
C. Mikail

B. Izrail
D. Malik

47. The meat of the following animals is haram for a Muslim. Which animal is it?

A. Cow
C. Sheep

B. Pig
D. Camel

48. Which one of the following is the first month of the Islamic calendar?

A. Muharram
C. Ramadhan

B. Dhul-Qaadah
D. Shaban

49. Who was the first man to be created by Allah (S.W.T.)?

A. Muhammad
C. Adam

B. Nuh
D. Hawa

50. Rahmatullah a grade seven learner wanted to break her fast in the evening. Which of the following would be the **best** thing for her to use according to the teachings of the prophet (S.A.W)?

A. Dates
C. Samosa

B. Water
D. Juice

TARGETER WINGS
KENYA PRIMARY SCHOOL EDUCATION ASSESSMENT
GRADE 6 - YEAR 2022
MATHEMATICS



TIME: 1 hour 20 minutes

INSTRUCTIONS TO CANDIDATES (Please read these instructions carefully)

1. You have been given this question booklet and a separate answer sheet. The question booklet contains 30 questions.
2. Do any necessary rough work in this booklet.
3. When you have chosen your answer, mark it on the **ANSWER SHEET**, not in this question booklet.

HOW TO USE THE ANSWER SHEET

4. Use an ordinary pencil.
5. Confirm that the answer sheet that you have been provided with has the following:
YOUR ASSESSMENT NUMBER
YOUR NAME
NAME OF YOUR SCHOOL
NAME OF SUBJECT
6. Do not make any marks outside the boxes.
7. Keep the sheet as clean as possible and do not fold it.
8. For each of the questions 1 - 30, four choices are given. The choices are lettered **A, B, C** and **D**. In each case, only **ONE** of the four choices is correct. Choose the **correct** answer from the choices.
9. On the answer sheet, the correct answer is to be shown by drawing a **dark line** inside the box in which the letter you have chosen is written.

Example

In the Question Booklet:

11. Work out: $12^2 - \sqrt{169}$

A. 127

B. 25

C. 131

D. 121

The correct answer is **C**.

On the Answer Sheet:

In the set of boxes numbered 11, draw a **dark line** inside the box with the letter **C** printed in it as indicated below.

11. [A] [B] [C] [D]

12. [A] [B] [C] [D]

13. [A] [B] [C] [D]

14. [A] [B] [C] [D]

10. Your **dark line** **MUST** be within the box.
11. For each question, **ONLY ONE** box is to be marked in each set of four boxes.

This question paper consists of 8 printed page

1. In a certain constituency there were ninety thousand, nine hundred and nine registered voters. Write the number of these voters in symbols.
- A. 90909
 - B. 99909
 - C. 99999
 - D. 909009

2. Grade 6 pupils of Riara school had five number cards with the following digits.



They re-arranged the cards to form the largest and the smallest five digit numbers.

What is the sum of the numbers formed?

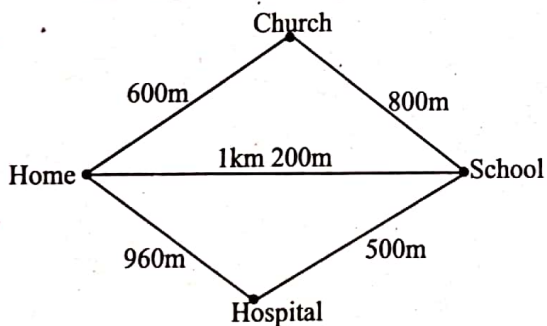
- A. 55962
 - B. 90098
 - C. 117098
 - D. 86530
3. The area of a plot of land is 1024m^2 . What is the length of one side of the plot?
- A. 36m
 - B. 512m
 - C. 256m
 - D. 32m
4. A fruit vendor packed 364 apples in a carton. If she had 25 such cartons, how many apples did she have altogether?
- A. 2548
 - B. 9100
 - C. 9000
 - D. 389

Working space

5. The government issued 5876 books to be shared by 24 schools. By rounding off the number of books issued to each school to the nearest 10, estimate the number of books issued to each school.
- A. 244
B. 280
C. 245
D. 290
6. Mambo had a cake. He gave $\frac{1}{3}$ of the cake to Joy and $\frac{1}{4}$ to Joseph. What fraction of the cake remained?
- A. $\frac{5}{12}$
B. $\frac{7}{12}$
C. $\frac{1}{12}$
D. $\frac{1}{2}$
7. Mugambo got 20 out of 25 marks in a Mathematics assessment. What was the score as a percentage?
- A. 0.20%
B. 80%
C. 75%
D. 20%
8. During a presidential election one of the contestants got 0.0085 percent of votes cast. What is the decimal rounded off to 2 decimal places?
- A. 0.00
B. 0.009
C. 0.01
D. 0.85

Working space

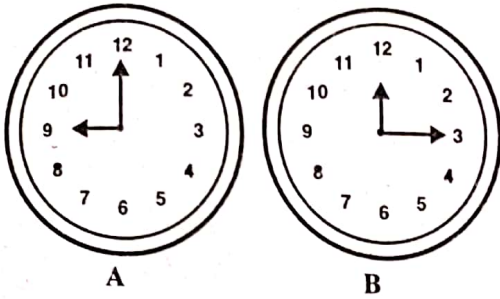
9. Solomon had a wire that was 4 metres long. He cut 1.98m from the wire. What is the length of the wire that remained?
- A. 2.02m
B. 3.98m
C. 5.98m
D. 1.94m
10. The length of a book is 28cm 4mm. What is the length of the book in millimetres?
- A. 28.4mm
B. 284mm
C. 2840mm
D. 28400mm
11. A section of a road is $2\frac{3}{4}$ km long. What is the length of the road in metres?
- A. 275m B. 2km 750m
C. 27500m D. 2750m
12. The diagram below shows position of different places on a map.



John left home for school but passed through the hospital as he had an appointment with the doctor. In the evening he went straight home without passing through either church or hospital. What distance did he cover in total?

- A. 1km 460m B. 2km 860m
C. 2km 660m D. 2km 600m

13. A teachers' meeting started at the time shown on clock face A and ended at the time shown on clock face B.



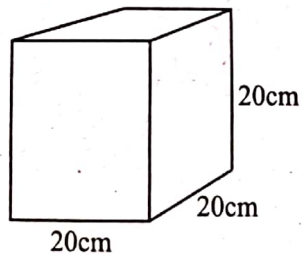
- How long did the meeting take?
- A. 6.00hrs B. 12.05hrs
C. 3hrs 15mins D. 9.00hrs

14. The following is a price list in a shop.

Item	Price
1 packet of yoghurt	shs. 90.00
A loaf of bread	shs. 65.00
1kg of rice	shs. 200.00
1kg of sugar	shs. 170.00
1 packet of tea leaves	shs. 110.00

Neema bought 2kg of sugar, a loaf of bread, 3 packets of yoghurt and 1 packet of tea leaves. She gave the shopkeeper a shs. 1000 note. How much money did she receive as balance?

15. Meja filled the container below with water. How many litres of water were there?



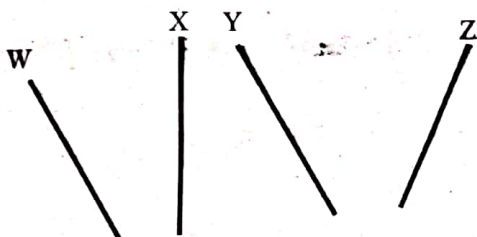
- A. 20L B. 8L
C. 6000L D. 8000L

Working space

16. A lorry brought 1 tonne of sand. A bucket was used by a fundi to carry 50kg of sand in each trip. How many trips did the fundi make to transport all the sand brought by the lorry?

- A. 20
- B. 50
- C. 1000
- D. 200

17. Jeshi placed 4 wires on her desk as shown below.



Which two wires are parallel?

- A. W and X
- B. X and Y
- C. Y and Z
- D. W and Y

18. A grade 5 boy drew a certain angle on his book. The angle was more than 180° but less than 360° . What name is given to the angle drawn by the boy?

- A. Acute
- B. Right
- C. Obtuse
- D. Reflex

19. Grade 6 learners were given a project of making a 3D object. They were told to cut two similar circles and a rectangular cutout before joining. Which 3D object did they obtain after joining?

- A. Pyramid
- B. Cube
- C. Circle
- D. Cylinder

20. There are four classes in a primary school. The data below represents the tally of the number of boys per class.

Class	Tally
6 East	
6 West	
6 North	
6 South	

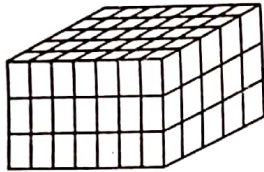
Which class has the highest number of boys?

- A. 6 East . B. 6 South
C. 6 West . D. 6 North
21. A farmer had x cows in his farm. During a drought 20 of the cows died. How many animals remained in the farm?
A. $x - 20$ B. $20x$
C. $x + 20$ D. $20 - x$
22. Moses has a bicycle that has a wheel with a radius of 35cm. What is the circumference of the wheel?
A. 220cm B. 110cm
C. 70cm D. 35cm
23. Amani slept at 9.00 o'clock in the evening. What time did she sleep written in 24-clock system?
A. 0900h B. 9.00a.m.
C. 2100h D. 9.00p.m.
24. Grade 6 pupils were asked by their teacher to multiply a certain number by itself. They got a result of 1296. Which number was it?
A. 34 B. 648
C. 324 D. 36

25. A milk vendor had 13 litres of milk. She sold the milk to customers using $\frac{1}{2}$ litre bottles. If each customer bought one bottle, how many customers bought the milk?

A. 13 B. $6\frac{1}{2}$
 C. $13\frac{1}{2}$ D. 26

26. Grade 6 learners made a stack using blocks as shown below. How many blocks were used to make the stack?



A. 140
 B. 105
 C. 71
 D. 45

27. Grade 6 pupils formed a certain pattern of numbers as shown below.

196, 169, 144, 121, 100, _____

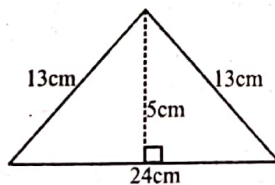
Which was the next number in the pattern?

A. 64 B. 84
 C. 81 D. 40

28. Grade 6 boy got 80% in Mathematics assessment. What was his mark as a fraction in the simplest form?

A. $\frac{4}{5}$ B. $\frac{80}{1000}$
 C. 0.8 D. $\frac{80}{100}$

29. Grade 6 boy made a cutout from a paper. The cutout was in the shape shown below. What is the area of the cutout.



A. 120cm^2
 B. 60cm^2
 C. 50cm^2
 D. 55cm^2

30. Grade 6 teacher wrote a combined operation on a card as shown below.

$$64 \div 4 \times 5 + 10 - 50$$

Work out the operation.

A. 140 B. 40
 C. 16 D. 30

Read the following dialogue and answer questions 1 - 5.

- Jane** : There are very many leaves lying on the compound today.
- Mother** : Yes. Today you have a lot of sweeping to do.
- Jane** : Why is today quite different from the other days?
- Mother** : There was strong wind throughout the night. It even uprooted one of the mango trees.
- Jane** : We shall use the leaves to make compost manure.
- Mother** : That's a great idea. Your brother will prepare the pit.

1. Which activity was Jane doing that day?
A. Washing
B. Lying
C. Sweeping
D. Resting
2. What is the true about the other days?
A. Too many leaves scattered on the compound.
B. Few leaves scattered on the compound.
C. No leaves scattered on the compound.
D. A strong wind blew throughout the night.
3. What shows that the wind was very strong that night?
A. The compound had been blown away.
B. Rooftops has been blown away.
C. A mango tree had been uprooted.
D. It had dug a deep hole.
4. Who was to prepare a compost pit?
A. Jane
B. Jane's mother
C. Jane's sister
D. Jane's brother
5. At what time do you think Jane was speaking to her mother?
A. At night
B. In the morning
C. Afternoon
D. In the evening

Read the following passage and answer questions 6 - 9.

One hot afternoon, the fox went out to look for water. The long drought had made it difficult to get water easily. He walked for many miles looking for a well and finally he found one that had some water. However, it was very deep.

The fox did not think twice but jumped right into the well. The water was cool and fresh. He drank to his fill then found that he could not get out.

He cried loud and long until a goat which was passing by heard. She got closer and saw how desperate fox was. She tried all she could but she was unable to help poor fox.

"My friend," began the fox, "since you are much bigger and longer than me, you can make a good ladder, then it will be my turn to help you."

The foolish goat agreed and jumped into the well. She placed her front feet on the wall and fox managed to climb out. When he was out and safe he laughed and walked away leaving goat alone.

6. Why was water not easily available?
 - A. There were no rivers with clean water.
 - B. One had to walk many miles.
 - C. There was a long drought.
 - D. There was only one well left in the area.

7. Although the fox drank enough water _____
 - A. it was too cold for drinking.
 - B. he was unable to get out.
 - C. he was too tired to jump out of the well.
 - D. he knew someone would finally show up to help.

8. From the passage, we can tell that the goat was
 - A. foolish
 - B. generous
 - C. selfish
 - D. cunning

9. Which one of the following is the best title for the story?
 - A. How the goat helped the fox.
 - B. How the fox tricked the goat.
 - C. The long drought.
 - D. The goat who died in a well.

Read the following passage and answer questions 10 - 12.

Taking complete care of our mouth is called oral hygiene. Apart from eating healthy foods, we should take care of our teeth by brushing them at least twice every day. This will ensure that germs will not grow in our teeth which eventually cause teeth problems ranging from cavities, tooth decay, bleeding gums and bad breath.

The habit of brushing our teeth should begin from a very young age. Children should be taught the importance of brushing their teeth. They should also be discouraged from eating sugary foods. It is believed that a person should grow old with all the four types of teeth without losing any. However, many adults have their several teeth missing due to poor oral hygiene.

10. Why should everyone brush their teeth at least two times a day?
- A. To discourage growth of germs.
 - B. To be able to taste sweet food.
 - C. To prevent the teeth from falling out.
 - D. To develop a bad habit.
11. Which one of the following has not been mentioned as a problem related to teeth?
- A. Bleeding gums
 - B. Tooth decay
 - C. Bad breath
 - D. Toothache
12. Which one of the following is true according to the passage?
- A. All old people should have their several teeth missing.
 - B. Oral hygiene should be observed by all.
 - C. Delicious foods are not good for our teeth.
 - D. Grown-up human beings have 32 types of teeth.

Read the passage below and then answer questions 13 to 15.

Kasamu went to visit his uncle who was a famous farmer in the whole county. He reared dairy cows which made him the biggest milk supplier in the area.

That Saturday, Kasamu helped his uncle feed the cows, the heifers and the calves. The cows were milked by machines twice a day. The milk was packaged in containers ready to be transported to a local dairy factory. Some of the milk was sold to the neighbours and a little was used to make some thick but tasty tea for the family.

Kasamu spent the whole weekend there and went home happy and informed.

13. What had made Kasamu's uncle famous?
- A. He was the only farmer.
 - B. He was the biggest milk buyer.
 - C. He owned many dairy cows.
 - D. He was known in the whole county.
14. Kasamu's uncle made use of technology by
- A. rearing modern dairy cows
 - B. advertising his dairy cows
 - C. selling milk to a local dairy
 - D. using milking machines
15. How did Kasamu benefit from his visit?
- A. He drank thick but tasty tea.
 - B. He was delighted and informed.
 - C. He learnt how to feed the cows.
 - D. He was taught how to use milking machines.

TARGETER WINGS

KENYA PRIMARY SCHOOL EDUCATION ASSESSMENT



GRADE 6 - YEAR 2022



ENGLISH : COMPOSITION

TIME: 40 mins

YOUR NAME	
NAME OF YOUR SCHOOL	

READ THESE INSTRUCTIONS CAREFULLY

1. In the spaces provided above, Write your name and name of your school
2. Now open the page, read the instructions of the composition carefully and write your composition on the the lines provided.

This Question Paper consists of 4 printed pages.

Published and printed by Targeter Educational Publishers Ltd.
Email: info@targeterpublishers.co.ke

TURN OVER

You have 40 minutes to write your composition.

Write an interesting composition about the heading below:

HOW I SPENT MY HOLIDAY



TARGETER WINGS
KENYA PRIMARY SCHOOL EDUCATION ASSESSMENT
GREDI YA 6 - MWAKA WA 2022



SEHEMU B:
KISWAHILI : INSHA

MUDA: Dakika 40

JINALAKO	
JINALA SHULE YAKO	

SOMA MAAGIZO HAYA KWA MAKINI

1. Kwenye nafasi zilizoachwa hapo juu andika jina lako na jina la shule yako.
2. Sasa fungua karatasi hii, soma kichwa cha insha kwa makini na uandike insha yako kwenye nafasi uliyoachiwa.

Kijitabu hiki kina kurasa 4 zilizopigwa chapa.

© Hutungwa na kuchapishwa na Targeter Educational Publishers Ltd. Email: info@targeterpublishers.co.ke

FUNGUA KURASA

TARGETER WINGS
KENYA PRIMARY SCHOOL EDUCATION ASSESSMENT
GREDI YA 6 - MWAKA WA 2022
SEHEMU A:
KISWAHILI LUGHA



Muda: Saa 1

MAAGIZO KWA WATAHINIWA (Soma maagizo yafuatayo kwa makini)

1. Umepewa kijitabu hiki cha Kiswahili na karatasi ya kujibia. Kijitabu hiki kina maswali 30.
2. Ukiisha kuchagua jibu lako, lionyeshe katika **KARATASI YA MAJIBU** na wala sio katika kijitabu hiki cha maswali.

JINSI YA KUTUMIA KARATASI YA MAJIBU

3. Tumia penseli ya kawaida.
4. Hakikisha ya kwamba karatasi ya majibu uliyopewa imejumuisha yafuatayo:
NAMBA YAKO YA TATHMINI
JINA LAKO
JINA LA SHULE YAKO
JINA LA SOMO
5. Usitie alama zozote nje ya visanduku.
6. Iweke safi karatasi yako ya majibu na usiikunje.
7. Kwa kila swali 1 - 30 umepewa majibu manne. Majibu hayo yameonyeshwa kwa herufi A, B, C, D. Ni jibu MOJA tu kati ya hayo manne ambalo ni sahihi. Chagua jibu sahihi.
8. Kwenye karatasi ya majibu, jibu sahihi lionyeshwe kwa kuchora kistari katika kisanduku chenye herufi uliyochagua kuwa ndilo jibu.

Mfano

Katika kijitabu cha maswali:

29. Jina jingine la msichana ni _____

- A. mvuli
- B. barobaro
- C. banati
- D. ghulamu

Jibu sahihi ni C.

Katika karatasi ya majibu:

29. [A] [B] [C] [D] 30. [A] [B] [C] [D] 31. [A] [B] [C] [D] 32. [A] [B] [C] [D]

9. Chora kistari chako vizuri. Kistari chako kiwe cheusi na kisijitokeze nje ya kisanduku.
10. Kwa kila swali, chora kistari katika kisanduku kimoja tu kati ya visanduku vinne ulivyopewa.

Kijitabu hiki cha maswali kina kurasa 7 zilizopigwa chapa

Swali la 1 hadi la 5

Soma makala yafuatayo kisha ujibu maswali.



- Maya** : Shikamoo mama!
- Mama** : Marahaba mwanangu. Umeshindaje shuleni?
- Maya** : Vyema. (*Akitabasamu*) Nawe kazi yako ya uuguzi ikoje?
- Mama** : Mambo yote ni shwari mwanangu ila leo katika zahanati kumekuwa na wagonjwa wengi. Yaonekana kuna mkurupuko wa kipindupindu.
- Maya** : (*Akishika tama*) Kipindupindu? Kwani watu hawazingatii usafi?
- Mama** : Yaonekana hivyo Maya. Waba husambaa sana kwa sababu ya watu kukosa kuzingatia usafi.
- Maya** : Ni kweli mama. Hebu kwanza ninawe mikono yangu kwa maji na sabuni kabla sijala matunda..
- Mama** : (*Akitikisa kichwa*) Binti yangu, naona siku hizi unawajibika. Hatua unayoichukua inaonyesha kuwa unajali afya yako.
- Maya** : Naam mama. Kila mara mwalimu wetu hutusisitizia umuhimu wa kutunza usafi wetu. Hii ndiyo njia muhimu sana ya kujikinga na maradhi kama kipindupindu na taifodi.
- Mama** : Je, unajua dalili za ugonjwa huu?
- Maya** : (*Akijikuna kichwa*) Nafikiria kuendesha na kutapika.
- Mama** : (*kwa furaha*) Vizuri sana mwanangu. Ninaona u makini kabisa shuleni mnapofunzwa na kujifunza.
- Maya** : Aidha ninajua kuwa mtu akiwa na dalili hizi anafaa kunywa maji mengi na kwenda hospitalini haraka ili asiage dunia.
- Mama** : Naam. Ugonjwa huu unaweza kumuua mtu haraka kwa kupoteza maji mengi mwilini.
- Maya** : Sasa kwa sababu kuna mkurupuko wa ugonjwa wa waba nitawahimiza marafiki zangu kujikinga kwani kinga ni bora kuliko tiba.
- Mama** : Kweli kabisa. Anayekosa kujikinga hujuta. Kumbuka majuto ni mjukuu.
- Maya** : Nitazingatia kanuni zote za afya ili niwe salama.
- Mama** : Sasa unaweza kumalizia kula matunda yako kisha ufanye shughuli ya nyumbani uliyopewa.
- Maya** : Ndio mama. Asante kwa muda wako.
- Mama** : Hewala!

1. Kwa kutumia salamu 'Shikamoo!' Maya anadhihirisha maadili gani?
 - A. Heshima
 - B. Ukarimu
 - C. Bidii
 - D. Uzembe

2. Neno jingine lenye maana sawa na zahanati ni gani?
 - A. Majeruhi
 - B. Wodi
 - C. Kliniki
 - D. Dispensari

3. Ni nini kinachoonyesha kuwa Maya anazingatia usafi?
 - A. Anamsalimu mama yake kwa heshima.
 - B. Anajua dalili za ugonjwa wa waba.
 - C. Ananawa mikono kwa maji na sabuni kabla hajala matunda.
 - D. Anajibu maswali vizuri.

4. Ni magonjwa mangapi yaliyotajwa katika mazungumzo haya?
 - A. Mmoja
 - B. Manne
 - C. Matatu
 - D. Mawili

5. Mazungumzo haya yanahusu nini?
 - A. Ugonjwa wa kipindupindu
 - B. Ugonjwa wa taifodi
 - C. Ugonjwa wa malaria
 - D. Ugonjwa wa kutapika

Swali la 6 hadi la 9

Soma kifungu kifuatacho kisha ujibu maswali.



Siku moja mimi na sahibu wangu Baraka tulikuwa tukipalilia mimea kwenye mradi wetu shuleni.

Tulipiga sogu huku **tukiipinda migongo** yetu. Ghaffla kama mauti sahibu yangu **alipiga mayowe**. Alikuwa amejikata muundi kwa jembe baada ya kugonga jiwe. Bila kupoteza wakati, **nilienda shoti** hadi kwenye ofisi ya mwalimu wa zamu na kumuarifu kilichokuwa kimetokea.

Bi Sara, aliyekuwa mwalimu wa zamu **alichukua hatua** mara moja. Aliwaita maskauti wapatao wanne tukaandamana nao. Tulipofika alipokuwa ameketi Baraka, Bi Sara aliwaelekeza maskauti jinsi ya kumpatia **majeruhi** huduma ya kwanza. Walichukua kitambaa safi na kufunga jeraha. Damu iliposita kutoka waliosha lile eneo kwa maji safi yaliyotiwa chumvi. Kisha walifunga kidonda bandeji na kumpeleka kwenye zahanati iliyokuwa karibu. Tangu siku hiyo niliamua kujiunga na chama cha maskauti.

6. Nini maana ya tukiipinda migongo?
 - A. Tukifanya kazi kwa bidii.
 - B. Tukiegemea
 - C. Tukifanya uzembe
 - D. Tukicheza
7. Je, ni nini hakionyeshi kwamba Bi Sara anawajibika?
 - A. Alikuwa zamu
 - B. Alichukua hatua mara moja.
 - C. Aliwaelekeza maskauti kumpa Baraka huduma ya kwanza.
 - D. Alikuwa ofisini
8. Tulipiga sogu, tukiipinda migongo, alipiga mayowe, nilienda shoti na alichukua hatua ni tamathali ya lugha inayoitwa:
 - A. Methali
 - B. Misemo
 - C. Tashbihi
 - D. Nahau
9. Je, majeruhi ni nani ?
 - A. Jeraha
 - B. Mtu au watu waliojeruhiwa
 - C. Maumivu
 - D. Mwanafunzi

Swali la 10 hadi la 13

Soma kifungu kifuatacho kisha ujibu maswali.



Tausi ni ndege wa kuvutia sana. Rangi za manyoya yake huwa tofauti tofauti. Wapo tausi wenye rangi moja tu. Si ajabu kumwona tausi mweupe pepepe akitanua mabawa yake. Wapo pia tausi wenye manyoya ya rangi mseto. Tausi wengine wamejaliwa rangi nyingi mwilini. Ukiwaona utadhani kuwa unatazama upinde wa mvua. Maajabu ya maumbile!

Tausi hufikiriwa kuwa ndege mwenye maringo. Yeye hutanua mabawa yake mazuri na kuyapepeta kama njia ya kuwatumbuiza watu. Kwa kufanya hivyo, watu husema kuwa anaranga. Je, wewe unafikiri kuwa tausi ana maringo au ni hali ya maumbile tu?

Ukweli ni kuwa tausi anapendeza. Ni ndege mpole na anayetumiwa kupambia mazingira. Chakula chake ni cha ndege wa kawaida tu. Anapenda kula nafaka na wadudu. Wafugaji wengine wa tausi huwapa ndege wao chakula spesheli. Chakula hiki huwawezesha kuwa na afya. Huwafanya ndege hao kuweza kuzaana kwa wingi pia. Mimi ninampenda na kumthamini tausi. Je, wewe?

10. Kisawe cha ndege ni:
 - A. Tembo
 - B. Kinda
 - C. Nyani
 - D. Nyuni
11. Maana ya rangi mseto ni:
 - A. Rangi moja pekee
 - B. Rangi nyeupe pepepe
 - C. Rangi nyingi pamoja
 - D. Rangi nyeusi tititi
12. Gani kati ya hizi si sifa ya tausi?
 - A. Ana maringo
 - B. Wote wana rangi sawa
 - C. Ni ndege wa kufugwa
 - D. Wana rangi tofauti
13. Kwa nini tausi hupewa chakula spesheli?
 - A. Ili wawe na afya na kuzaana kwa haraka
 - B. Wawe wa kuvutia
 - C. Waweze kutumbuiza
 - D. Waongeze maringo

Swali la 14 na la 15

Soma shairi lifuatalo kisha ujibu maswali

Amani ni kitu adhimu, Mola ametutunuku
Letu sote jukumu, kuitunza kila siku
Hasimu ni mahuluku, mpenda mtafaruku
Mikono na tushikane, amani tuidumishe

14. Vina vya kati ni gani?
A. Adhimu, jukumu, mahuluku, tushikane
B. Mu, mu, ku, ne
C. Ametutunuku, siku, mtafaruku, tuidumishe
D. Ku, ku, ku, she
15. Ujumbe wa shairi hili ni gani?
A. Kito adhimu
B. Jukumu letu
C. Umoja
D. Amani

Swali la 16 hadi la 20

Soma kifungu kifuatacho. Kwa kila swali umepewa majibu manne. Chagua jibu lifaalo zaidi kati ya yale uliyopewa.

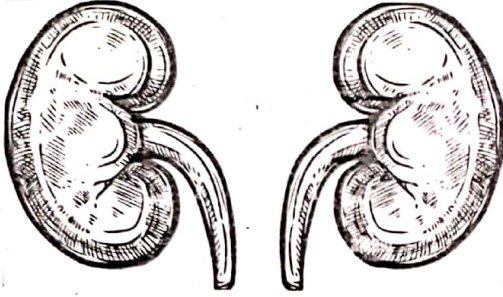
Uhifadhi _____ 16 _____ mazingira ni jambo ambalo lazima lizingatiwe na watu wote. Mazingira ni uhai na hatuwezi kamwe kupuuza wito wa _____ 17 _____. Hata hivyo katika mitaa yetu kumejaa _____ 18 _____ takataka za kila aina. Isitoshe watu hukata miti kiholela ili kupata mbao za kujengea nyumba na kutengeneza _____ 19 _____. Tukiendelea na hali hii nchi yetu itakuwa _____ 20 _____.

- | | | | | |
|-----|-------------|----------------|-------------|-------------|
| 16. | A.la | B.wa | C.ya | D.cha |
| 17. | A.kuitunza | B.kuzitunza | C.kuwatunza | D.kuyatunza |
| 18. | A.mabiwi ya | B.milolongo ya | C.umati wa | D.bunda la |
| 19. | A.zamani | B.thamani | C.samani | D.amani |
| 20. | A.jangwa | B.ziwa | C.bahari | D.mito |

Swali la 21 hadi la 30

Chagua jibu sahihi.

21. Hii ni picha ya kiungo cha mwili. Hufanya kazi gani?



- A. Kusafisha hewa
B. Kusukuma damu mwilini
C. Kuhifadhi mkojo
D. Kutakasa damu
22. Ni sentensi gani kati ya hizi imetumia kivumishi kimilikishi?
A. Mtoto huyu anatembea.
B. Nyuzi zangu zimekatika.
C. Kikombe safi kinavutia.
D. Mtoto yeyote atakuja.
23. Maneno haya yanafuatana vipi katika kamusi?
i. sali ii. saa iii. saza iv. saka
A. (iv), (i), (iii), (ii)
B. (ii), (iv), (i) (iii)
C. (iv), (iii), (ii), (i)
D. (ii), (i), (iv), (iii)
24. Yafuatayo ni majina ya vifaa vinavyopatikana shuleni. Ni yapi yaliyo katika ngeli moja?
A. Rula, chati, bendera,
B. Kalamu, uwanja, kabati,
C. Ubao, rafu, mlingoti,
D. Wino, dawati, penseli
25. Chagua jibu ambalo ni wingi wa sentensi: Mkebe wa mwanafunzi una chakula.
A. Mikebe ya mwanafunzi ina chakula.
B. Mikebe ya wanafunzi ina vyakula.
C. Mikebe ya wanafunzi ina chakula.
D. Mikebe ya mwanafunzi ina vyakula.

26. Chagua jibu ambalo lina maneno ambayo ni visawe.
- A. Kinyonga – lumbwi
 - B. Rafiki– adui
 - C. Tajiri – maskini
 - D. Mwamu – wafi
27. Chagua jibu linalounganisha sentensi hizi kwa usahihi.
- i) Tirisita alimwandikia Leo barua.
 - ii) Leo alimwandikia Tirisita barua.
- A. Leo aliandikiwa barua kwa Tirisita.
 - B. Tirisita aliandikia barua kwa Leo.
 - C. Tirisita na Leo waliandikiana barua.
 - D. Leo na Tirisita waliandikiwa barua.
28. Chagua sentensi ambayo ni ukanusho wa: Wachezaji wameimba wimbo wa taifa.
- A. Wachezaji hawakuimba wimbo wa taifa.
 - B. Wachezaji hawangeimba wimbo wa taifa.
 - C. Wachezaji hawajaimba wimbo wa taifa.
 - D. Wachezaji hawataimba wimbo wa taifa
29. Ni sentensi ipi iliyo katika hali ya udogo?
- A. Kijitu hicho kina kijishati safi.
 - B. Kitabu cha mtoto wake kimeraruka.
 - C. Kiti kimenunuliwa na baba.
 - D. Kisu cha mpishi kinavutia.
30. Ni jibu lipi ambalo limeambatanishwa na aina ya shairi na idadi ya mishororo sawasawa?
- A. Tathnia- 6
 - B. Tathlitha-4
 - C. Tarbia-3
 - D. Takhmisa-5

TARGETER WINGS
KENYA PRIMARY SCHOOL EDUCATION ASSESSMENT
GRADE 6 - YEAR 2022
INTEGRATED SCIENCE



TIME: 1hr 40mins

INSTRUCTIONS TO CANDIDATES (Please read these instructions carefully)

1. You have been given this question booklet and a separate answer sheet. The question booklet contains 80 questions.
2. Do any necessary rough work in this booklet.
3. When you have chosen your answer, mark it on the **ANSWER SHEET**, not in this question booklet.

HOW TO USE THE ANSWER SHEET

4. Use an ordinary pencil.
5. Confirm that the answer sheet that you have been provided with the following:
YOUR ASSESSMENT NUMBER
YOUR NAME
NAME OF YOUR SCHOOL
NAME OF SUBJECT
6. Do not make any marks outside the boxes.
7. Keep the sheet as clean as possible and do not fold it.
8. For each of the questions 1 - 80, four choices are given. The choices are lettered A, B, C and D. In each case, only **ONE** of the four choices is correct. Choose the correct answer from the choices.
9. On the answer sheet, the correct answer is to be shown by drawing a **dark line** inside the box in which the letter you have chosen is written.

Example

In the Question Booklet:

17. Which component of air occupies 78%?
A. Oxygen
B. Nitrogen
C. Inert gases
D. Carbon dioxide

The correct answer is B.

On the Answer Sheet:

In the set of boxes numbered 17, draw a **dark line** inside the box with the letter **B** printed in it as indicated below.

14. [A] [B] [C] [D] 15. [A] [B] [C] [D] 16. [A] [B] [C] [D] 17. [A] [B] [C] [D]

10. Your dark-line **MUST** be within the box.
11. For each question, **ONLY ONE** box is to be marked in each set of four boxes.

This question paper consists of 8 printed page

SCIENCE AND TECHNOLOGY (15marks)

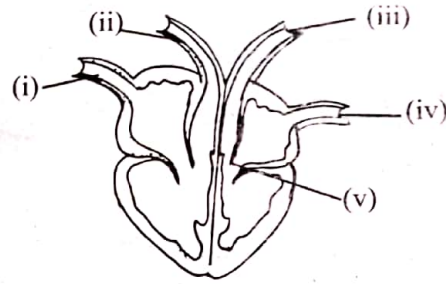
1. The following are functions of different types of teeth. Which among them is a function of the tooth drawn below?



- A. Tearing and chewing
 B. Biting and grinding
 C. Tearing and grinding
 D. Chewing and grinding
2. Which one of the following is a function of the roots in the plant?
 A. Absorption of mineral salts
 B. Support upper parts of a plant
 C. Make food for the plant
 D. Is the reproductive part of a plant
3. Three of the following are uses of a spreadsheet in everyday life. Which one is **not**?
 A. Used by shopkeepers to keep records
 B. Downloading games
 C. Storing learners performance records by teachers
 D. Preparing shopping list
4. During a visit to a railway station, grade six learners from a certain school noticed gaps were left between railway lines. Why are gaps left in between railway lines? To
 A. prevent bending in hot weather
 B. prevent contraction
 C. decrease noise
 D. save use of metals
5. Three of the following statements are **not** true about the treads on tyres. Which among them is true?
 A. Make them attractive
 B. To reduce friction between the car and the road surface
 C. To make them different from other tyres
 D. To increase friction between the car and the road surface


Use the diagram below to answer questions

6 and 7



6. Name the part labelled (iii) in the diagram above
 A. Vena cava
 B. Aorta
 C. Pulmonary artery
 D. Pulmonary vein
7. What is the function of the part labelled (v)?
 A. Prevent the backflow of blood
 B. Receives oxygenated blood
 C. Receives deoxygenated blood
 D. Pumps blood from the heart
8. During a science lesson in grade six, learners were asked to discuss about different characteristics of snails and slugs. Learners gave the following characteristics:
 i) Brian- Have no legs
 ii) Ouma- Have moist skin
 iii) Naomi - Move by gliding
 iv) Kerubo- Have a soft body
 Which learner gave a wrong characteristic?
 A. Brian B. Naomi
 C. Ouma D. Kerubo
9. The following are methods used to manage solid waste. Which one is not?
 A. Burning B. Reusing waste
 C. Reducing waste D. Recycling
10. Below are different features of a microsoft word window matched **correctly** to its functions. Which one is wrongly matched?
 A. Cursor -shows where to type
 B. Title bar - minimises, maximises and closes document
 C. Working space- white space where letters, numbers and symbols are typed
 D. Quick access toolbar- contains commands that are commonly used

11. Mama chapati heated solid cooking fat that changed to oil. After some time the cooked oil again changed to solid. The process through which the cooking fat changed back to solid state is called
- A. sublimation B. condensation
C. freezing D. melting
12. Three of the following are the importance of fungi to human beings. Which one is **not**?
- A. Makes the environment beautiful
B. Source of income
C. Improving soil fertility
D. Manufacture of medicine
13. Grade six learners were asked to classify vertebrates into their groups. They classified the animals as follows
- Makena - crocodile, snakes, chameleon
Adam - frog, snake, salamander
Shaniah - whale, rat, dog
Mark - shark, Nile, trout
- Who among them did not give a correct answer?
- A. Makena B. Mark
C. Shaniah D. Adam
14. Below are functions of the of the skeletal muscles. Which one among them is **not** a function for the skeletal muscles?
- A. Involved in stretching and folding of the hand
B. Helps in bending
C. Makes the body strong
D. Hold the head upright
15. Grade 6 learners did an experiment as illustrated below.



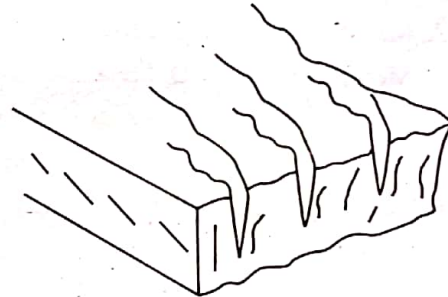
What were they investigating?

- A. Refraction
B. Irregular reflection
C. Direction of light
D. Regular reflection

AGRICULTURE (10marks)

16. Grade 6 learners were discussing agents of soil erosion. They gave the following responses.
- John : Trees
Teresa : Grass
Moses : Water
Abdi : Cover crops
- Who gave the **correct** answer?
- A. Moses
B. Abdi
C. Teresa
D. John

17. The diagram below shows a type of soil erosion.



The best way to control this type of soil erosion is by

- A. planting trees
B. mulching
C. building gabions
D. planting cover crops

18. The growing of crops by farmer where they do not use agro-chemical is known as _____ farming.

- A. inorganic
B. agro-chemical
C. sub-organic
D. organic

19. Mr. Gichuhi is a farmer. One of the goats got injured on its leg as it was feeding. What is the **best** action to be taken?

- A. Pray for the goat.
- B. Take it to a vet.
- C. Take it to the nearest chemist.
- D. Slaughter it.


20. For pupils were asked to name ways of conserving the moisture. They gave the answers as follows:

- | | | |
|---------|---|--------------|
| Meja | : | Weeding |
| Michael | : | Sunken beds |
| Kigen | : | Shallow pits |
| Mercy | : | Mulching |

Who gave the **wrong** answer?

- | | |
|------------|----------|
| A. Michael | B. Kigen |
| C. Mercy | D. Meja |

21. A certain farmer was using the tool shown below to turn farmyard manure. What is the name of the tool?



- | | |
|---------------|---------------|
| A. Rake | B. Fork |
| C. Pitch Fork | D. Fork Jembe |

22. Which of the following ways of controlling small wild animals in the farm is **not** appropriate?

- A. Use of safe traps.
- B. Use of bows and arrows.
- C. Using innovative lights.
- D. Use of deflectors.

23. The process of removing unwanted plants from the farm is called

- A. thinning
- B. weeding
- C. pruning
- D. mulching

24. Grade 5 learners planted cabbages in a nursery bed. Which was the **best** method of weed control?

- A. Uprooting
- B. Digging them out
- C. Use of chemicals
- D. Slashing

25. Grade 6 learners used the tool below to carry out a certain activity in the farm.



Name the farm tool.

- A. Jar
- B. Can
- C. Jerrycan
- D. Watering can

HOMESCIENCE (10marks)

26. Which one of the following changes in adolescence takes place in boys only?
A. Hips broaden
B. Increase in height
C. Shoulders broaden
D. Hair grows in armpits
27. Grade 4 learners were told by their teacher to name the fragile utensils found at home. They gave their answers as follows.
Muthoni - clay pot
Kamene - cooking stick
Ryan - glass
David - thermos flask
Who gave a **wrong** answer?
A. Ryan
B. Kamene
C. David
D. Muthoni
28. Choose the one that is **not** a good grooming habit.
A. Taking a bath everyday
B. Blowing our nose using our hands
C. Changing clothes regularly
D. Participating in exercises
29. Below were meals prepared by grade 5 learners for Calverry Academy. Who among them followed a balanced diet?
A. Mutiso- Chapati, potato stew and spinach
B. Jane - Rice, beans and beef
C. Alan - Green bananas, beef stew and steamed cabbage
D. Atieno - Ugali, chicken, milk
30. Identify the fuel that is used in the item below.

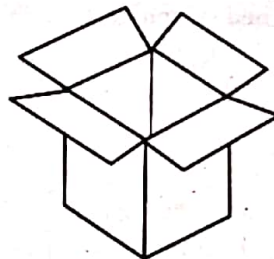


- A. Kerosene B. Charcoal
C. Gas D. Firewood

31. All the following food can be prepared through baking **except**
A. bread
B. chapati
C. biscuit
D. cake
32. Which is the best method of storing needlework tool shown below?



- A. Putting on the shelf
B. Putting in the cushion
C. Putting in the pocket
D. Putting in the needlework box
33. Mulamwa was told by her mother to help identify a permanent stitch that she could use to join her two fabrics. Which one of the stitches below was correct?
A. Back stitch
B. Satin stitch
C. Chain stitch
D. Stem stitch
34. Nutritional deficiency disorders include all the following **except**
A. rickets
B. malaria
C. anaemia
D. scurvy
35. Grade 4 learners were told by their teacher to collect materials that they would use to improvise cleaning materials. Elsie brought the item below. Which item would she improvise?



- A. Broom
B. Floor duster
C. Mop
D. Dustbin

PHYSICAL AND HEALTH EDUCATION

(15marks)

36. A grade six teacher ticked guided learners in performing the following activities

- i) Crab walk
- ii) Hand walk
- iii) Head stand


Which component of physical fitness was developed?

- A. Reaction time
- B. Speed
- C. Balance
- D. Strength

37. The following are techniques used in finishing races. Which one is **not**?

- A. Chest front finish
- B. Run through technique
- C. Shoulder shrug technique
- D. Drop finish technique

38. The image below shows a technique performed by an athlete during high jump. Identify the stage.



- A. Approach
- B. Hurdle clearance
- C. Landing
- D. Take off

39. The following signs and symptoms describe a sport injury

- (i) Pain
- (ii) Swelling
- (iii) Discolouration

Which sport injury is described above?

- A. Bruise
- B. Burn
- C. Blister
- D. Cut

40. Relay race is an example of _____ races.

- A. middle distance
- B. short distance
- C. long distance
- D. none of the above

41. Which one of the following is the **best** way of calling runners to get set?

- A. Into your mark
- B. On your mark
- C. Get ready
- D. Go

42. The following are all found in the first aid kit **except**

- A. gloves
- B. safety pins
- C. bandage
- D. handkerchief

43. The following equipment are used by football players. Which one is **not**?

- A. Jersey
- B. Ball
- C. Net
- D. Whistle

44. Grade six teacher asked pupils to say the importance of physical and health activities. Four learners gave the following answers

- A. Dellilah - You become strong and tired
 - B. Peter - You become weak and healthy
 - C. Trizah - You became weak and old
 - D. Eliana - You become strong and healthy
- Who gave the correct answer?


- A. Dellilah
- B. Peter
- C. Trizah
- D. Eliana

45. The following lists contain games played in physical and health education. Which list is made up of ball games only?
- A. Netball, football, volleyball, softball
 - B. Skipping rope, hand ball, softball
 - C. Tug of war, basketball, softball
 - D. Rugby, swimming, rounders

46. The activities below can be used as a form of physical exercises **except**
- A. rugby
 - B. fighting
 - C. tug of war
 - D. dance

47. Butterfly is a swimming stroke. It is also referred to as
- A. side stroke
 - B. front crawl
 - C. dolphin kick
 - D. breast stroke

48. Name the equipment drawn below



- It is known as
- A. relay baton
 - B. post
 - C. bat
 - D. hurdle

49. Swimmers are advised to learn the side stroke of swimming. What is the **main** importance?
- A. Requires less energy
 - B. It is more enjoyable
 - C. Helps in saving lives
 - D. It is the easiest

50. How many officials are there to officiate the game of Kabaddi?
- A. 12
 - B. 5
 - C. 7
 - D. 6

TARGETER WINGS
KENYA PRIMARY SCHOOL EDUCATION ASSESSMENT
GRADE 6 - YEAR 2022



SECTION A:
ENGLISH LANGUAGE

TIME: 1 Hour

INSTRUCTIONS TO CANDIDATES (Please read these instructions carefully)

1. You have been given this question booklet and a separate answer sheet. The question booklet contains 30 questions.
2. When you have chosen your answer, mark it on the **ANSWER SHEET** not in this question booklet.

HOW TO USE THE ANSWER SHEET

3. Use an ordinary pencil.
4. Confirm that the answer sheet provided with has the following:
YOUR ASSESSMENT NUMBER
YOUR NAME
NAME OF YOUR SCHOOL
NAME OF SUBJECT
5. Do not make any marks outside the boxes.
6. Keep the sheet as clean as possible and do not fold it.
7. For each of the questions 1 – 30, four choices are given. The choices are lettered A, B, C and D. In each case, only **ONE** of the four choices is correct. Choose the **correct** answer from the choices.
8. On the answer sheet, the correct answer is to be shown by drawing a dark line inside the box in which the letter you have chosen is written.

Example

In the Question booklet:

16. **Complete the sentence below:**

The bus didn't come, so we set _____ on foot.

- A. up B. in
C. off D. on

The correct answer is C.

On the answer sheet.

In the set of boxes numbered 16, draw a **dark line** inside the box with the letter C printed in it as indicated below.

15. [A] [B] [C] [D] 16. [A] [B] [~~C~~] [D] 17. [A] [B] [C] [D] 18. [A] [B] [C] [D]

9. Your dark line **MUST** be within the box.
10. For each question, **ONLY ONE** box is to be marked in each set of four boxes.

This question paper consists of 7 printed pages

Read the following dialogue and answer questions 1 - 5.

- Jane** : There are very many leaves lying on the compound today.
- Mother** : Yes. Today you have a lot of sweeping to do.
- Jane** : Why is today quite different from the other days?
- Mother** : There was strong wind throughout the night. It even uprooted one of the mango trees.
- Jane** : We shall use the leaves to make compost manure.
- Mother** : That's a great idea. Your brother will prepare the pit.

1. Which activity was Jane doing that day?
A. Washing
B. Lying
C. Sweeping
D. Resting

2. What is the true about the other days?
A. Too many leaves scattered on the compound.
B. Few leaves scattered on the compound.
C. No leaves scattered on the compound.
D. A strong wind blew throughout the night.

3. What shows that the wind was very strong that night?
A. The compound had been blown away.
B. Rooftops has been blown away.
C. A mango tree had been uprooted.
D. It had dug a deep hole.

4. Who was to prepare a compost pit?
A. Jane
B. Jane's mother
C. Jane's sister
D. Jane's brother

5. At what time do you think Jane was speaking to her mother?
A. At night
B. In the morning
C. Afternoon
D. In the evening

Read the following passage and answer questions 6 - 9.

One hot afternoon, the fox went out to look for water. The long drought had made it difficult to get water easily. He walked for many miles looking for a well and finally he found one that had some water. However, it was very deep.

The fox did not think twice but jumped right into the well. The water was cool and fresh. He drank to his fill then found that he could not get out.

He cried loud and long until a goat which was passing by heard. She got closer and saw how desperate fox was. She tried all she could but she was unable to help poor fox.

"My friend," began the fox, "since you are much bigger and longer than me, you can make a good ladder, then it will be my turn to help you."

The foolish goat agreed and jumped into the well. She placed her front feet on the wall and fox managed to climb out. When he was out and safe he laughed and walked away leaving goat alone.

6. Why was water not easily available?
 - A. There were no rivers with clean water.
 - B. One had to walk many miles.
 - C. There was a long drought.
 - D. There was only one well left in the area.

7. Although the fox drank enough water _____
 - A. it was too cold for drinking.
 - B. he was unable to get out.
 - C. he was too tired to jump out of the well.
 - D. he knew someone would finally show up to help.

8. From the passage, we can tell that the goat was
 - A. foolish
 - B. generous
 - C. selfish
 - D. cunning

9. Which one of the following is the best title for the story?
 - A. How the goat helped the fox.
 - B. How the fox tricked the goat.
 - C. The long drought.
 - D. The goat who died in a well.

Read the following passage and answer questions 10 - 12.

Taking complete care of our mouth is called oral hygiene. Apart from eating healthy foods, we should take care of our teeth by brushing them at least twice every day. This will ensure that germs will not grow in our teeth which eventually cause teeth problems ranging from cavities, tooth decay, bleeding gums and bad breath.

The habit of brushing our teeth should begin from a very young age. Children should be taught the importance of brushing their teeth. They should also be discouraged from eating sugary foods. It is believed that a person should grow old with all the four types of teeth without losing any. However, many adults have their several teeth missing due to poor oral hygiene.

10. Why should everyone brush their teeth at least two times a day?
- A. To discourage growth of germs.
 - B. To be able to taste sweet food.
 - C. To prevent the teeth from falling out.
 - D. To develop a bad habit.
11. Which one of the following has not been mentioned as a problem related to teeth?
- A. Bleeding gums
 - B. Tooth decay
 - C. Bad breath
 - D. Toothache
12. Which one of the following is true according to the passage?
- A. All old people should have their several teeth missing.
 - B. Oral hygiene should be observed by all.
 - C. Delicious foods are not good for our teeth.
 - D. Grown-up human beings have 32 types of teeth.

Read the passage below and then answer questions 13 to 15.

Kasamu went to visit his uncle who was a famous farmer in the whole county. He reared dairy cows which made him the biggest milk supplier in the area.

That Saturday, Kasamu helped his uncle feed the cows, the heifers and the calves. The cows were milked by machines twice a day. The milk was packaged in containers ready to be transported to a local dairy factory. Some of the milk was sold to the neighbours and a little was used to make some thick but tasty tea for the family.

Kasamu spent the whole weekend there and went home happy and informed.

13. What had made Kasamu's uncle famous?
- A. He was the only farmer.
 - B. He was the biggest milk buyer.
 - C. He owned many dairy cows.
 - D. He was known in the whole county.
14. Kasamu's uncle made use of technology by
- A. rearing modern dairy cows
 - B. advertising his dairy cows
 - C. selling milk to a local dairy
 - D. using milking machines
15. How did Kasamu benefit from his visit?
- A. He drank thick but tasty tea.
 - B. He was delighted and informed.
 - C. He learnt how to feed the cows.
 - D. He was taught how to use milking machines.

Fill in the blank spaces 16 - 20 using the most appropriate word from the choices given.

The 16 was attended by many people. They 17 friends and relatives of Carol and Charles, who were the 18 and the bridegroom of the day. It was a 19 wedding. Women and men were well dressed and ready for the 20.

16. A. ceremonies B. wedding C. funeral D. match
17. A. were B. are C. was D. is
18. A. flower girl B. husband C. bride D. best man
19. A. tradition B. modernise C. custom D. traditional
20. A. occassion B. ocassion C. occasion D. occasion

For questions 21 to 28, fill in the blank spaces with the correct alternatives from the choices given.

21. The cat had _____ all the milk in the bowl.
A. drank B. drunk
C. drink D. drinking
22. Nanjala was absent from school _____ three days.
A. by B. with
C. since D. for
23. She held her child _____ across the road.
A. careful B. carefully
C. careless D. caring
24. The door was kept open _____ the goat got in and ate all the food.
A. so B. but
C. or D. and

25. Mwakazi saw the boy _____ stole his new ball.
A. whose B. which
C. who D. whom
26. He was asked to choose _____ an apple or an orange.
A. neither B. both
C. either D. just
27. There isn't _____ playing in the field.
A. anybody B. nobody
C. none D. nothing
28. Ostriches are much _____ than any other bird.
A. fast B. faster
C. fastest D. quick

For questions 29 and 30, choose the alternative that means the opposite of the underlined word.

29. He was wearing a sad face that day.
A. funny B. comic
C. gloomy D. happy
30. Mr. Edward is a very humble driver.
A. timid B. proud
C. boring D. active

TARGETER WINGS
KENYA PRIMARY SCHOOL EDUCATION ASSESSMENT
GRADE 6 - YEAR 2022
INTEGRATED SCIENCE



TIME: 1hr 40mins

INSTRUCTIONS TO CANDIDATES (Please read these instructions carefully)

1. You have been given this question booklet and a separate answer sheet. The question booklet contains 80 questions.
2. Do any necessary rough work in this booklet.
3. When you have chosen your answer, mark it on the **ANSWER SHEET**, not in this question booklet.

HOW TO USE THE ANSWER SHEET

4. Use an ordinary pencil.
5. Confirm that the answer sheet that you have been provided with the following:
YOUR ASSESSMENT NUMBER
YOUR NAME
NAME OF YOUR SCHOOL
NAME OF SUBJECT
6. Do not make any marks outside the boxes.
7. Keep the sheet as clean as possible and do not fold it.
8. For each of the questions 1 - 80, four choices are given. The choices are lettered A, B, C and D. In each case, only **ONE** of the four choices is correct. Choose the correct answer from the choices.
9. On the answer sheet, the correct answer is to be shown by drawing a **dark line** inside the box in which the letter you have chosen is written.

Example

In the Question Booklet:

17. Which component of air occupies 78%?
A. Oxygen
B. Nitrogen
C. Inert gases
D. Carbon dioxide

The correct answer is B.

On the Answer Sheet:

In the set of boxes numbered 17, draw a **dark line** inside the box with the letter **B** printed in it as indicated below.

14. [A] [B] [C] [D] 15. [A] [B] [C] [D] 16. [A] [B] [C] [D] 17. [A] [B] [C] [D]

10. Your dark-line **MUST** be within the box.
11. For each question, **ONLY ONE** box is to be marked in each set of four boxes.

This question paper consists of 8 printed page

SCIENCE AND TECHNOLOGY (15marks)

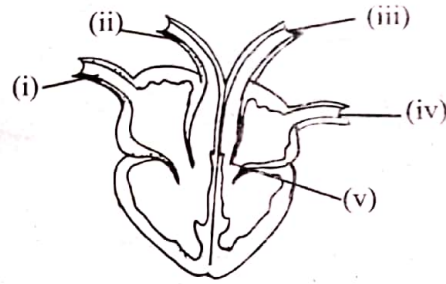
1. The following are functions of different types of teeth. Which among them is a function of the tooth drawn below?



- A. Tearing and chewing
 B. Biting and grinding
 C. Tearing and grinding
 D. Chewing and grinding
2. Which one of the following is a function of the roots in the plant?
 A. Absorption of mineral salts
 B. Support upper parts of a plant
 C. Make food for the plant
 D. Is the reproductive part of a plant
3. Three of the following are uses of a spreadsheet in everyday life. Which one is **not**?
 A. Used by shopkeepers to keep records
 B. Downloading games
 C. Storing learners performance records by teachers
 D. Preparing shopping list
4. During a visit to a railway station, grade six learners from a certain school noticed gaps were left between railway lines. Why are gaps left in between railway lines? To
 A. prevent bending in hot weather
 B. prevent contraction
 C. decrease noise
 D. save use of metals
5. Three of the following statements are **not** true about the treads on tyres. Which among them is true?
 A. Make them attractive
 B. To reduce friction between the car and the road surface
 C. To make them different from other tyres
 D. To increase friction between the car and the road surface


Use the diagram below to answer questions

6 and 7



6. Name the part labelled (iii) in the diagram above
 A. Vena cava
 B. Aorta
 C. Pulmonary artery
 D. Pulmonary vein
7. What is the function of the part labelled (v)?
 A. Prevent the backflow of blood
 B. Receives oxygenated blood
 C. Receives deoxygenated blood
 D. Pumps blood from the heart
8. During a science lesson in grade six, learners were asked to discuss about different characteristics of snails and slugs. Learners gave the following characteristics:
 i) Brian- Have no legs
 ii) Ouma- Have moist skin
 iii) Naomi - Move by gliding
 iv) Kerubo- Have a soft body
 Which learner gave a wrong characteristic?
 A. Brian B. Naomi
 C. Ouma D. Kerubo
9. The following are methods used to manage solid waste. Which one is not?
 A. Burning B. Reusing waste
 C. Reducing waste D. Recycling
10. Below are different features of a microsoft word window matched **correctly** to its functions. Which one is wrongly matched?
 A. Cursor -shows where to type
 B. Title bar - minimises, maximises and closes document
 C. Working space- white space where letters, numbers and symbols are typed
 D. Quick access toolbar- contains commands that are commonly used

11. Mama chapati heated solid cooking fat that changed to oil. After some time the cooked oil again changed to solid. The process through which the cooking fat changed back to solid state is called
 A. sublimation B. condensation
 C. freezing D. melting
12. Three of the following are the importance of fungi to human beings. Which one is **not**?
 A. Makes the environment beautiful
 B. Source of income
 C. Improving soil fertility
 D. Manufacture of medicine
13. Grade six learners were asked to classify vertebrates into their groups. They classified the animals as follows
 Makena - crocodile, snakes, chameleon
 Adam - frog, snake, salamander
 Shaniah - whale, rat, dog
 Mark - shark, Nile, trout
 Who among them did not give a correct answer?
 A. Makena B. Mark
 C. Shaniah D. Adam
14. Below are functions of the of the skeletal muscles. Which one among them is **not** a function for the skeletal muscles?
 A. Involved in stretching and folding of the hand
 B. Helps in bending
 C. Makes the body strong
 D. Hold the head upright
15. Grade 6 learners did an experiment as illustrated below.



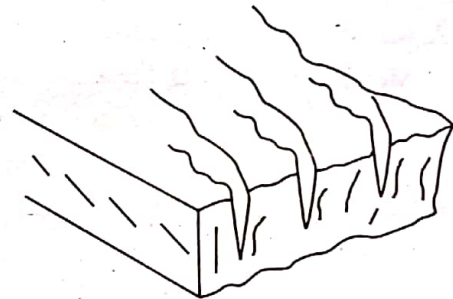
What were they investigating?

- A. Refraction
 B. Irregular reflection
 C. Direction of light
 D. Regular reflection

AGRICULTURE (10marks)

16. Grade 6 learners were discussing agents of soil erosion. They gave the following responses.
 John : Trees
 Teresa : Grass
 Moses : Water
 Abdi : Cover crops
 Who gave the **correct** answer?
 A. Moses
 B. Abdi
 C. Teresa
 D. John

17. The diagram below shows a type of soil erosion.



The best way to control this type of soil erosion is by

- A. planting trees
 B. mulching
 C. building gabions
 D. planting cover crops

18. The growing of crops by farmer where they do not use agro-chemical is known as _____ farming.

- A. inorganic
 B. agro-chemical
 C. sub-organic
 D. organic

19. Mr. Gichuhi is a farmer. One of the goats got injured on its leg as it was feeding. What is the **best** action to be taken?

- A. Pray for the goat.
- B. Take it to a vet.
- C. Take it to the nearest chemist.
- D. Slaughter it.


20. For pupils were asked to name ways of conserving the moisture. They gave the answers as follows:

- | | | |
|---------|---|--------------|
| Meja | : | Weeding |
| Michael | : | Sunken beds |
| Kigen | : | Shallow pits |
| Mercy | : | Mulching |

Who gave the **wrong** answer?

- | | |
|------------|----------|
| A. Michael | B. Kigen |
| C. Mercy | D. Meja |

21. A certain farmer was using the tool shown below to turn farmyard manure. What is the name of the tool?



- | | |
|---------------|---------------|
| A. Rake | B. Fork |
| C. Pitch Fork | D. Fork Jembe |

22. Which of the following ways of controlling small wild animals in the farm is **not** appropriate?

- A. Use of safe traps.
- B. Use of bows and arrows.
- C. Using innovative lights.
- D. Use of deflectors.

23. The process of removing unwanted plants from the farm is called

- A. thinning
- B. weeding
- C. pruning
- D. mulching

24. Grade 5 learners planted cabbages in a nursery bed. Which was the **best** method of weed control?

- A. Uprooting
- B. Digging them out
- C. Use of chemicals
- D. Slashing

25. Grade 6 learners used the tool below to carry out a certain activity in the farm.



Name the farm tool.

- A. Jar
- B. Can
- C. Jerrycan
- D. Watering can

HOMESCIENCE (10marks)

26. Which one of the following changes in adolescence takes place in boys only?
A. Hips broaden
B. Increase in height
C. Shoulders broaden
D. Hair grows in armpits
27. Grade 4 learners were told by their teacher to name the fragile utensils found at home. They gave their answers as follows.
Muthoni - clay pot
Kamene - cooking stick
Ryan - glass
David - thermos flask
Who gave a **wrong** answer?
A. Ryan
B. Kamene
C. David
D. Muthoni
28. Choose the one that is **not** a good grooming habit.
A. Taking a bath everyday
B. Blowing our nose using our hands
C. Changing clothes regularly
D. Participating in exercises
29. Below were meals prepared by grade 5 learners for Calverry Academy. Who among them followed a balanced diet?
A. Mutiso- Chapati, potato stew and spinach
B. Jane - Rice, beans and beef
C. Alan - Green bananas, beef stew and steamed cabbage
D. Atieno - Ugali, chicken, milk
30. Identify the fuel that is used in the item below.

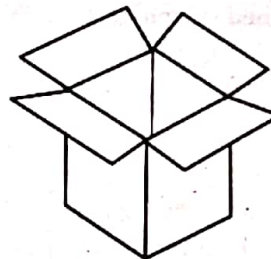


- A. Kerosene B. Charcoal
C. Gas D. Firewood

31. All the following food can be prepared through baking **except**
A. bread
B. chapati
C. biscuit
D. cake
32. Which is the best method of storing needlework tool shown below?



- A. Putting on the shelf
B. Putting in the cushion
C. Putting in the pocket
D. Putting in the needlework box
33. Mulamwa was told by her mother to help identify a permanent stitch that she could use to join her two fabrics. Which one of the stitches below was correct?
A. Back stitch
B. Satin stitch
C. Chain stitch
D. Stem stitch
34. Nutritional deficiency disorders include all the following **except**
A. rickets
B. malaria
C. anaemia
D. scurvy
35. Grade 4 learners were told by their teacher to collect materials that they would use to improvise cleaning materials. Elsie brought the item below. Which item would she improvise?



- A. Broom
B. Floor duster
C. Mop
D. Dustbin

PHYSICAL AND HEALTH EDUCATION

(15marks)

36. A grade six teacher ticked guided learners in performing the following activities

- i) Crab walk
- ii) Hand walk
- iii) Head stand


Which component of physical fitness was developed?

- A. Reaction time
- B. Speed
- C. Balance
- D. Strength

37. The following are techniques used in finishing races. Which one is **not**?

- A. Chest front finish
- B. Run through technique
- C. Shoulder shrug technique
- D. Drop finish technique

38. The image below shows a technique performed by an athlete during high jump. Identify the stage.



- A. Approach
- B. Hurdle clearance
- C. Landing
- D. Take off

39. The following signs and symptoms describe a sport injury

- (i) Pain
- (ii) Swelling
- (iii) Discolouration

Which sport injury is described above?

- A. Bruise
- B. Burn
- C. Blister
- D. Cut

40. Relay race is an example of _____ races.

- A. middle distance
- B. short distance
- C. long distance
- D. none of the above

41. Which one of the following is the **best** way of calling runners to get set?

- A. Into your mark
- B. On your mark
- C. Get ready
- D. Go

42. The following are all found in the first aid kit **except**

- A. gloves
- B. safety pins
- C. bandage
- D. handkerchief

43. The following equipment are used by football players. Which one is **not**?

- A. Jersey
- B. Ball
- C. Net
- D. Whistle

44. Grade six teacher asked pupils to say the importance of physical and health activities. Four learners gave the following answers

- A. Dellilah - You become strong and tired
 - B. Peter - You become weak and healthy
 - C. Trizah - You became weak and old
 - D. Eliana - You become strong and healthy
- Who gave the correct answer?

- A. Dellilah
- B. Peter
- C. Trizah
- D. Eliana

45. The following lists contain games played in physical and health education. Which list is made up of ball games only?
- A. Netball, football, volleyball, softball
 - B. Skipping rope, hand ball, softball
 - C. Tug of war, basketball, softball
 - D. Rugby, swimming, rounders

46. The activities below can be used as a form of physical exercises **except**
- A. rugby
 - B. fighting
 - C. tug of war
 - D. dance

47. Butterfly is a swimming stroke. It is also referred to as
- A. side stroke
 - B. front crawl
 - C. dolphin kick
 - D. breast stroke

48. Name the equipment drawn below



- It is known as
- A. relay baton
 - B. post
 - C. bat
 - D. hurdle

49. Swimmers are advised to learn the side stroke of swimming. What is the **main** importance?
- A. Requires less energy
 - B. It is more enjoyable
 - C. Helps in saving lives
 - D. It is the easiest

50. How many officials are there to officiate the game of Kabaddi?
- A. 12
 - B. 5
 - C. 7
 - D. 6

TARGETER WINGS
KENYA PRIMARY SCHOOL EDUCATION ASSESSMENT
GREDI YA 6 - MWAKA WA 2022



SEHEMU A:
KISWAHILI LUGHA

Muda: Saa 1

MAAGIZO KWA WATAHINIWA (Soma maagizo yafuatayo kwa makini)

1. Umepewa kijitabu hiki cha Kiswahili na karatasi ya kujibia. Kijitabu hiki kina maswali 30.
2. Ukiisha kuchagua jibu lako, lionyeshe katika **KARATASI YA MAJIBU** na wala sio katika kijitabu hiki cha maswali.

JINSI YA KUTUMIA KARATASI YA MAJIBU

3. Tumia penseli ya kawaida.
4. Hakikisha ya kwamba karatasi ya majibu uliyopewa imejumuisha yafuatayo:
NAMBA YAKO YA TATHMINI
JINA LAKO
JINA LA SHULE YAKO
JINA LA SOMO
5. Usitie alama zozote nje ya visanduku.
6. Iweke safi karatasi yako ya majibu na usiikunje.
7. Kwa kila swali 1 - 30 umepewa majibu manne. Majibu hayo yameonyeshwa kwa herufi A, B, C, D. Ni jibu MOJA tu kati ya hayo manne ambalo ni sahihi. Chagua jibu sahihi.
8. Kwenye karatasi ya majibu, jibu sahihi lionyeshe kwa kuchora kistari katika kisanduku chenye herufi uliyochagua kuwa ndilo jibu.

Mfano

Katika kijitabu cha maswali:

29. Jina jingine la msichana ni _____

- A. mvuli
- B. barobaro
- C. banati
- D. ghulamu

Jibu sahihi ni C.

Katika karatasi ya majibu:


29. [A] [B] [C] [D] 30. [A] [B] [C] [D] 31. [A] [B] [C] [D] 32. [A] [B] [C] [D]

9. Chora kistari chako vizuri. Kistari chako kiwe cheusi na kisijitokeze nje ya kisanduku.
10. Kwa kila swali, chora kistari katika kisanduku kimoja tu kati ya visanduku vinne ulivyopewa.

Kijitabu hiki cha maswali kina kurasa 7 zilizopigwa chapa

Swali la 1 hadi la 5

Soma makala yafuatayo kisha ujibu maswali.



- Maya** : Shikamoo mama!
- Mama** : Marahaba mwanangu. Umeshindaje shuleni?
- Maya** : Vyema. (*Akitabasamu*) Nawe kazi yako ya uuguzi ikoje?
- Mama** : Mambo yote ni shwari mwanangu ila leo katika zahanati kumekuwa na wagonjwa wengi. Yaonekana kuna mkurupuko wa kipindupindu.
- Maya** : (*Akishika tama*) Kipindupindu? Kwani watu hawazingatii usafi?
- Mama** : Yaonekana hivyo Maya. Waba husambaa sana kwa sababu ya watu kukosa kuzingatia usafi.
- Maya** : Ni kweli mama. Hebu kwanza ninawe mikono yangu kwa maji na sabuni kabla sijala matunda..
- Mama** : (*Akitikisa kichwa*) Binti yangu, naona siku hizi unawajibika. Hatua unayoichukua inaonyesha kuwa unajali afya yako.
- Maya** : Naam mama. Kila mara mwalimu wetu hutusisitizia umuhimu wa kutunza usafi wetu. Hii ndiyo njia muhimu sana ya kujikinga na maradhi kama kipindupindu na taifodi.
- Mama** : Je, unajua dalili za ugonjwa huu?
- Maya** : (*Akijikuna kichwa*) Nafikiria kuendesha na kutapika.
- Mama** : (*kwa furaha*) Vizuri sana mwanangu. Ninaona u makini kabisa shuleni mnapofunzwa na kujifunza.
- Maya** : Aidha ninajua kuwa mtu akiwa na dalili hizi anafaa kunywa maji mengi na kwenda hospitalini haraka ili asiage dunia.
- Mama** : Naam. Ugonjwa huu unaweza kumuua mtu haraka kwa kupoteza maji mengi mwilini.
- Maya** : Sasa kwa sababu kuna mkurupuko wa ugonjwa wa waba nitawahimiza marafiki zangu kujikinga kwani kinga ni bora kuliko tiba.
- Mama** : Kweli kabisa. Anayekosa kujikinga hujuta. Kumbuka majuto ni mjukuu.
- Maya** : Nitazingatia kanuni zote za afya ili niwe salama.
- Mama** : Sasa unaweza kumalizia kula matunda yako kisha ufanye shughuli ya nyumbani uliyopewa.
- Maya** : Ndio mama. Asante kwa muda wako.
- Mama** : Hewala!

1. Kwa kutumia salamu 'Shikamoo!' Maya anadhihirisha maadili gani?
 - A. Heshima
 - B. Ukarimu
 - C. Bidii
 - D. Uzembe

2. Neno jingine lenye maana sawa na zahanati ni gani?
 - A. Majeruhi
 - B. Wodi
 - C. Kliniki
 - D. Dispensari

3. Ni nini kinachoonyesha kuwa Maya anazingatia usafi?
 - A. Anamsalimu mama yake kwa heshima.
 - B. Anajua dalili za ugonjwa wa waba.
 - C. Ananawa mikono kwa maji na sabuni kabla hajala matunda.
 - D. Anajibu maswali vizuri.

4. Ni magonjwa mangapi yaliyotajwa katika mazungumzo haya?
 - A. Mmoja
 - B. Manne
 - C. Matatu
 - D. Mawili

5. Mazungumzo haya yanahusu nini?
 - A. Ugonjwa wa kipindupindu
 - B. Ugonjwa wa taifodi
 - C. Ugonjwa wa malaria
 - D. Ugonjwa wa kutapika

Swali la 6 hadi la 9

Soma kifungu kifuatacho kisha ujibu maswali.



Siku moja mimi na sahibu wangu Baraka tulikuwa tukipalilia mimea kwenye mradi wetu shuleni.

Tulipiga soga huku **tukiipinda migongo** yetu. Ghaffla kama mauti sahibu yangu **alipiga mayowe**. Alikuwa amejikata muundi kwa jembe baada ya kugonga jiwe. Bila kupoteza wakati, **nilienda shoti** hadi kwenye ofisi ya mwalimu wa zamu na kumuarifu kilichokuwa kimetokea.

Bi Sara, aliyekuwa mwalimu wa zamu **alichukua hatua** mara moja. Aliwaita maskauti wapatao wanne tukaandamana nao. Tulipofika alipokuwa ameketi Baraka, Bi Sara aliwaelekeza maskauti jinsi ya kumpatia **majeruhi** huduma ya kwanza. Walichukua kitambaa safi na kufunga jeraha. Damu iliposita kutoka waliosha lile eneo kwa maji safi yaliyotiwa chumvi. Kisha walifunga kidonda bandeji na kumpeleka kwenye zahanati iliyokuwa karibu. Tangu siku hiyo niliamua kujiunga na chama cha maskauti.

6. Nini maana ya tukiipinda migongo?
 - A. Tukifanya kazi kwa bidii.
 - B. Tukiegemea
 - C. Tukifanya uzembe
 - D. Tukicheza
7. Je, ni nini hakionyeshi kwamba Bi Sara anawajibika?
 - A. Alikuwa zamu
 - B. Alichukua hatua mara moja.
 - C. Aliwaelekeza maskauti kumpa Baraka huduma ya kwanza.
 - D. Alikuwa ofisini
8. Tulipiga sog, tukiipinda migongo, alipiga mayowe, nilienda shoti na alichukua hatua ni tamathali ya lugha inayoitwa:
 - A. Methali
 - B. Misemo
 - C. Tashbihi
 - D. Nahau
9. Je, majeruhi ni nani ?
 - A. Jeraha
 - B. Mtu au watu waliojeruhiwa
 - C. Maumivu
 - D. Mwanafunzi

Swali la 10 hadi la 13

Soma kifungu kifuatacho kisha ujibu maswali.



Tausi ni ndege wa kuvutia sana. Rangi za manyoya yake huwa tofauti tofauti. Wapo tausi wenye rangi moja tu. Si ajabu kumwona tausi mweupe pepepe akitanua mabawa yake. Wapo pia tausi wenye manyoya ya rangi mseto. Tausi wengine wamejaliwa rangi nyingi mwilini. Ukiwaona utadhani kuwa unatazama upinde wa mvua. Maajabu ya maumbile!

Tausi hufikiriwa kuwa ndege mwenye maringo. Yeye hutanua mabawa yake mazuri na kuyapepeta kama njia ya kuwatumbuiza watu. Kwa kufanya hivyo, watu husema kuwa anaranga. Je, wewe unafikiri kuwa tausi ana maringo au ni hali ya maumbile tu?

Ukweli ni kuwa tausi anapendeza. Ni ndege mpole na anayetumiwa kupambia mazingira. Chakula chake ni cha ndege wa kawaida tu. Anapenda kula nafaka na wadudu. Wafugaji wengine wa tausi huwapa ndege wao chakula spesheli. Chakula hiki huwawezesha kuwa na afya. Huwafanya ndege hao kuweza kuzaana kwa wingi pia. Mimi ninampenda na kumthamini tausi. Je, wewe?

10. Kisawe cha ndege ni:
 - A. Tembo
 - B. Kinda
 - C. Nyani
 - D. Nyuni
11. Maana ya rangi mseto ni:
 - A. Rangi moja pekee
 - B. Rangi nyeupe pepepe
 - C. Rangi nyingi pamoja
 - D. Rangi nyeusi tititi
12. Gani kati ya hizi si sifa ya tausi?
 - A. Ana maringo
 - B. Wote wana rangi sawa
 - C. Ni ndege wa kufugwa
 - D. Wana rangi tofauti
13. Kwa nini tausi hupewa chakula spesheli?
 - A. Ili wawe na afya na kuzaana kwa haraka
 - B. Wawe wa kuvutia
 - C. Waweze kutumbuiza
 - D. Waongeze maringo

Swali la 14 na la 15

Soma shairi lifuatalo kisha ujibu maswali

Amani ni kitu adhimu, Mola ametutunuku
Letu sote jukumu, kuitunza kila siku
Hasimu ni mahuluku, mpenda mtafaruku
Mikono na tushikane, amani tuidumishe

14. Vina vya kati ni gani?
A. Adhimu, jukumu, mahuluku, tushikane
B. Mu, mu, ku, ne
C. Ametutunuku, siku, mtafaruku, tuidumishe
D. Ku, ku, ku, she
15. Ujumbe wa shairi hili ni gani?
A. Kito adhimu
B. Jukumu letu
C. Umoja
D. Amani

Swali la 16 hadi la 20

Soma kifungu kifuatacho. Kwa kila swali umepewa majibu manne. Chagua jibu lifaalo zaidi kati ya yale uliyopewa.

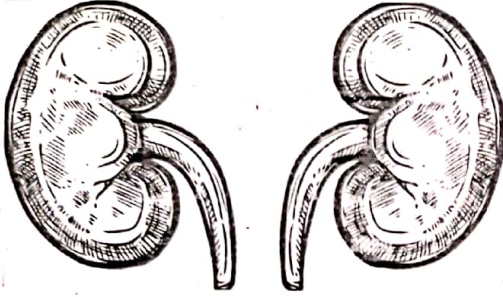
Uhifadhi _____ 16 _____ mazingira ni jambo ambalo lazima lizingatiwe na watu wote. Mazingira ni uhai na hatuwezi kamwe kupuuza wito wa _____ 17 _____. Hata hivyo katika mitaa yetu kumejaa _____ 18 _____ takataka za kila aina. Isitoshe watu hukata miti kiholela ili kupata mbao za kujengea nyumba na kutengeneza _____ 19 _____. Tukiendelea na hali hii nchi yetu itakuwa _____ 20 _____.

- | | | | | |
|-----|-------------|----------------|-------------|-------------|
| 16. | A.la | B.wa | C.ya | D.cha |
| 17. | A.kuitunza | B.kuzitunza | C.kuwatunza | D.kuyatunza |
| 18. | A.mabiwi ya | B.milolongo ya | C.umati wa | D.bunda la |
| 19. | A.zamani | B.thamani | C.samani | D.amani |
| 20. | A.jangwa | B.ziwa | C.bahari | D.mito |

Swali la 21 hadi la 30

Chagua jibu sahihi.

21. Hii ni picha ya kiungo cha mwili. Hufanya kazi gani?



- A. Kusafisha hewa
B. Kusukuma damu mwilini
C. Kuhifadhi mkojo
D. Kutakasa damu
22. Ni sentensi gani kati ya hizi imetumia kivumishi kimilikishi?
A. Mtoto huyu anatembea.
B. Nyuzi zangu zimekatika.
C. Kikombe safi kinavutia.
D. Mtoto yeyote atakuja.
23. Maneno haya yanafuatana vipi katika kamusi?
i. sali ii. saa iii. saza iv. saka
A. (iv), (i), (iii), (ii)
B. (ii), (iv), (i) (iii)
C. (iv), (iii), (ii), (i)
D. (ii), (i), (iv), (iii)
24. Yafuatayo ni majina ya vifaa vinavyopatikana shuleni. Ni yapi yaliyo katika ngeli moja?
A. Rula, chati, bendera,
B. Kalamu, uwanja, kabati,
C. Ubao, rafu, mlingoti,
D. Wino, dawati, penseli
25. Chagua jibu ambalo ni wingi wa sentensi: Mkebe wa mwanafunzi una chakula.
A. Mikebe ya mwanafunzi ina chakula.
B. Mikebe ya wanafunzi ina vyakula.
C. Mikebe ya wanafunzi ina chakula.
D. Mikebe ya mwanafunzi ina vyakula.

26. Chagua jibu ambalo lina maneno ambayo ni visawe.
- A. Kinyonga – lumbwi
 - B. Rafiki – adui
 - C. Tajiri – maskini
 - D. Mwamu – wafi
27. Chagua jibu linalounganisha sentensi hizi kwa usahihi.
- i) Tirisita alimwandikia Leo barua.
 - ii) Leo alimwandikia Tirisita barua.
- A. Leo aliandikiwa barua kwa Tirisita.
 - B. Tirisita aliandikia barua kwa Leo.
 - C. Tirisita na Leo waliandikiana barua.
 - D. Leo na Tirisita waliandikiwa barua.
28. Chagua sentensi ambayo ni ukanusho wa: Wachezaji wameimba wimbo wa taifa.
- A. Wachezaji hawakuimba wimbo wa taifa.
 - B. Wachezaji hawangeimba wimbo wa taifa.
 - C. Wachezaji hawajaimba wimbo wa taifa.
 - D. Wachezaji hawataimba wimbo wa taifa
29. Ni sentensi ipi iliyo katika hali ya udogo?
- A. Kijitu hicho kina kijishati safi.
 - B. Kitabu cha mtoto wake kimeraruka.
 - C. Kiti kimenunuliwa na baba.
 - D. Kisu cha mpishi kinavutia.
30. Ni jibu lipi ambalo limeambatanishwa na aina ya shairi na idadi ya mishororo sawasawa?
- A. Tathnia-6
 - B. Tathlitha-4
 - C. Tarbia-3
 - D. Takhmisa-5

TARGETER WINGS
KENYA PRIMARY SCHOOL EDUCATION ASSESSMENT
GRADE 6 - YEAR 2022
MATHEMATICS



TIME: 1 hour 20 minutes

INSTRUCTIONS TO CANDIDATES (Please read these instructions carefully)

1. You have been given this question booklet and a separate answer sheet. The question booklet contains 30 questions.
2. Do any necessary rough work in this booklet.
3. When you have chosen your answer, mark it on the **ANSWER SHEET**, not in this question booklet.

HOW TO USE THE ANSWER SHEET

4. Use an ordinary pencil.
5. Confirm that the answer sheet that you have been provided with has the following:
YOUR ASSESSMENT NUMBER
YOUR NAME
NAME OF YOUR SCHOOL
NAME OF SUBJECT
6. Do not make any marks outside the boxes.
7. Keep the sheet as clean as possible and do not fold it.
8. For each of the questions 1 - 30, four choices are given. The choices are lettered **A, B, C** and **D**. In each case, only **ONE** of the four choices is correct. Choose the **correct** answer from the choices.
9. On the answer sheet, the correct answer is to be shown by drawing a **dark line** inside the box in which the letter you have chosen is written.

Example

In the Question Booklet:

11. Work out: $12^2 - \sqrt{169}$

A. 127

B. 25

C. 131

D. 121

The correct answer is **C**.

On the Answer Sheet:

In the set of boxes numbered 11, draw a **dark line** inside the box with the letter **C** printed in it as indicated below.

11. [A] [B] [C] [D]

12. [A] [B] [C] [D]

13. [A] [B] [C] [D]

14. [A] [B] [C] [D]

10. Your **dark line** **MUST** be within the box.
11. For each question, **ONLY ONE** box is to be marked in each set of four boxes.

This question paper consists of 8 printed page

1. In a certain constituency there were ninety thousand, nine hundred and nine registered voters. Write the number of these voters in symbols.
- A. 90909
 - B. 99909
 - C. 99999
 - D. 909009

2. Grade 6 pupils of Riara school had five number cards with the following digits.



They re-arranged the cards to form the largest and the smallest five digit numbers.

What is the sum of the numbers formed?

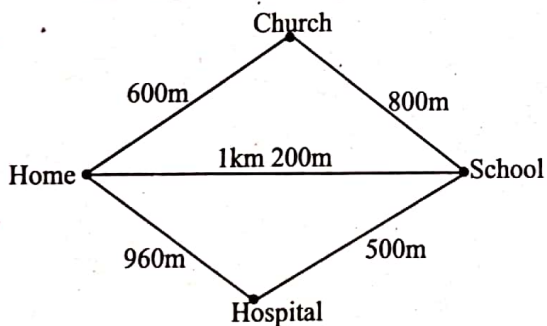
- A. 55962
 - B. 90098
 - C. 117098
 - D. 86530
3. The area of a plot of land is 1024m^2 . What is the length of one side of the plot?
- A. 36m
 - B. 512m
 - C. 256m
 - D. 32m
4. A fruit vendor packed 364 apples in a carton. If she had 25 such cartons, how many apples did she have altogether?
- A. 2548
 - B. 9100
 - C. 9000
 - D. 389

Working space

5. The government issued 5876 books to be shared by 24 schools. By rounding off the number of books issued to each school to the nearest 10, estimate the number of books issued to each school.
- A. 244
B. 280
C. 245
D. 290
6. Mambo had a cake. He gave $\frac{1}{3}$ of the cake to Joy and $\frac{1}{4}$ to Joseph. What fraction of the cake remained?
- A. $\frac{5}{12}$
B. $\frac{7}{12}$
C. $\frac{1}{12}$
D. $\frac{1}{2}$
7. Mugambo got 20 out of 25 marks in a Mathematics assessment. What was the score as a percentage?
- A. 0.20%
B. 80%
C. 75%
D. 20%
8. During a presidential election one of the contestants got 0.0085 percent of votes cast. What is the decimal rounded off to 2 decimal places?
- A. 0.00
B. 0.009
C. 0.01
D. 0.85

Working space

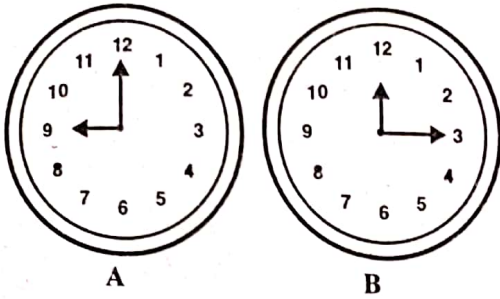
9. Solomon had a wire that was 4 metres long. He cut 1.98m from the wire. What is the length of the wire that remained?
- A. 2.02m
B. 3.98m
C. 5.98m
D. 1.94m
10. The length of a book is 28cm 4mm. What is the length of the book in millimetres?
- A. 28.4mm
B. 284mm
C. 2840mm
D. 28400mm
11. A section of a road is $2\frac{3}{4}$ km long. What is the length of the road in metres?
- A. 275m B. 2km 750m
C. 27500m D. 2750m
12. The diagram below shows position of different places on a map.



John left home for school but passed through the hospital as he had an appointment with the doctor. In the evening he went straight home without passing through either church or hospital. What distance did he cover in total?

- A. 1km 460m B. 2km 860m
C. 2km 660m D. 2km 600m

13. A teachers' meeting started at the time shown on clock face A and ended at the time shown on clock face B.



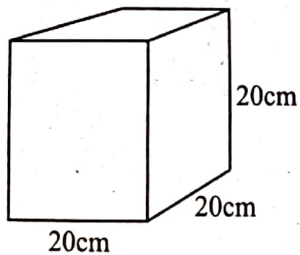
- How long did the meeting take?
- A. 6.00hrs B. 12.05hrs
 C. 3hrs 15mins D. 9.00hrs

14. The following is a price list in a shop.

Item	Price
1 packet of yoghurt	shs. 90.00
A loaf of bread	shs. 65.00
1kg of rice	shs. 200.00
1kg of sugar	shs. 170.00
1 packet of tea leaves	shs. 110.00

Neema bought 2kg of sugar, a loaf of bread, 3 packets of yoghurt and 1 packet of tea leaves. She gave the shopkeeper a shs. 1000 note. How much money did she receive as balance?

15. Meja filled the container below with water. How many litres of water were there?



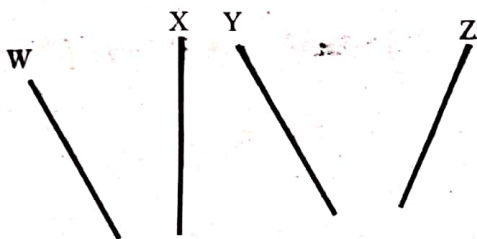
- A. 20L B. 8L
 C. 6000L D. 8000L

Working space

16. A lorry brought 1 tonne of sand. A bucket was used by a fundi to carry 50kg of sand in each trip. How many trips did the fundi make to transport all the sand brought by the lorry?

- A. 20
- B. 50
- C. 1000
- D. 200

17. Jeshi placed 4 wires on her desk as shown below.



Which two wires are parallel?

- A. W and X
- B. X and Y
- C. Y and Z
- D. W and Y

18. A grade 5 boy drew a certain angle on his book. The angle was more than 180° but less than 360° . What name is given to the angle drawn by the boy?

- A. Acute
- B. Right
- C. Obtuse
- D. Reflex

19. Grade 6 learners were given a project of making a 3D object. They were told to cut two similar circles and a rectangular cutout before joining. Which 3D object did they obtain after joining?

- A. Pyramid
- B. Cube
- C. Circle
- D. Cylinder

20. There are four classes in a primary school. The data below represents the tally of the number of boys per class.

Class	Tally
6 East	
6 West	
6 North	
6 South	

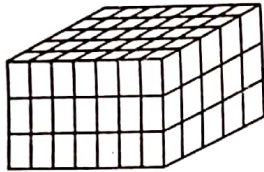
Which class has the highest number of boys?

- A. 6 East . B. 6 South
C. 6 West . D. 6 North
21. A farmer had x cows in his farm. During a drought 20 of the cows died. How many animals remained in the farm?
A. $x - 20$ B. $20x$
C. $x + 20$ D. $20 - x$
22. Moses has a bicycle that has a wheel with a radius of 35cm. What is the circumference of the wheel?
A. 220cm B. 110cm
C. 70cm D. 35cm
23. Amani slept at 9.00 o'clock in the evening. What time did she sleep written in 24-clock system?
A. 0900h B. 9.00a.m.
C. 2100h D. 9.00p.m.
24. Grade 6 pupils were asked by their teacher to multiply a certain number by itself. They got a result of 1296. Which number was it?
A. 34 B. 648
C. 324 D. 36

25. A milk vendor had 13 litres of milk. She sold the milk to customers using $\frac{1}{2}$ litre bottles. If each customer bought one bottle, how many customers bought the milk?

A. 13 B. $6\frac{1}{2}$
 C. $13\frac{1}{2}$ D. 26

26. Grade 6 learners made a stack using blocks as shown below. How many blocks were used to make the stack?



A. 140
 B. 105
 C. 71
 D. 45

27. Grade 6 pupils formed a certain pattern of numbers as shown below.

196, 169, 144, 121, 100, _____

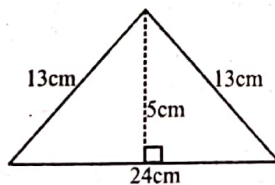
Which was the next number in the pattern?

A. 64 B. 84
 C. 81 D. 40

28. Grade 6 boy got 80% in Mathematics assessment. What was his mark as a fraction in the simplest form?

A. $\frac{4}{5}$ B. $\frac{80}{1000}$
 C. 0.8 D. $\frac{80}{100}$

29. Grade 6 boy made a cutout from a paper. The cutout was in the shape shown below. What is the area of the cutout.



A. 120cm^2
 B. 60cm^2
 C. 50cm^2
 D. 55cm^2

30. Grade 6 teacher wrote a combined operation on a card as shown below.

$$64 \div 4 \times 5 + 10 - 50$$

Work out the operation.

A. 140 B. 40
 C. 16 D. 30

TARGETER WINGS

KENYA PRIMARY SCHOOL EDUCATION ASSESSMENT



GRADE 6 - YEAR 2022



ENGLISH : COMPOSITION

TIME: 40 mins

YOUR NAME	
NAME OF YOUR SCHOOL	

READ THESE INSTRUCTIONS CAREFULLY

1. In the spaces provided above, Write your name and name of your school
2. Now open the page, read the instructions of the composition carefully and write your composition on the the lines provided.

This Question Paper consists of 4 printed pages.

Published and printed by Targeter Educational Publishers Ltd.
Email: info@targeterpublishers.co.ke

TURN OVER

TARGETER WINGS
KENYA PRIMARY SCHOOL EDUCATION ASSESSMENT
GREDI YA 6 - MWAKA WA 2022



SEHEMU B:
KISWAHILI : INSHA

MUDA: Dakika 40

JINALAKO	
JINALA SHULE YAKO	

SOMA MAAGIZO HAYA KWA MAKINI

1. Kwenye nafasi zilizoachwa hapo juu andika jina lako na jina la shule yako.
2. Sasa fungua karatasi hii, soma kichwa cha insha kwa makini na uandike insha yako kwenye nafasi uliyoachiwa.

Kijitabu hiki kina kurasa 4 zilizopigwa chapa.

© Hutungwa na kuchapishwa na Targeter Educational Publishers Ltd. Email: info@targeterpublishers.co.ke

FUNGUA KURASA

Umepewa dakika 40 kuandika insha yako

Mwandikie mwalimu wako barua ukimwomba ruhusa ya kuhudhuria arusi ya shangazi yako.

Lined writing area consisting of 20 horizontal lines.