

SCHOOL BASED SERIES 1

KPSEA FIRST TRIAL-22

Class of KPSEA 2024

The PDF Comprises of assessment Questions Meant to prepare the learners to prepare for the KPSEA National Exams set for October 2024.

For Marking Schemes:

Order online at: www.kenyaeducators.co.ke

Or

Contact Kenya Educators Consultancy

0724333200

0795491185

0768321553

Visit our Website kenyaeducators.co.ke or Contact us on 0724333200 for CBC (pp1-grade 6), JSS (Grades 7 and 8) and Highschool levels (Forms 1-4) Exams, Lesson Notes and Schemes of Work, CBC report card books, lesson plans, Curriculum Designs and Official CBC Training Materials.

KENYA EDUCATORS CONSULTANCY

Compiled and distributed by Kenya Educators Consultancy- 0724333200

Website: www.kenyaeducators.co.ke

SCHOOL BASED EVALUATION TEST

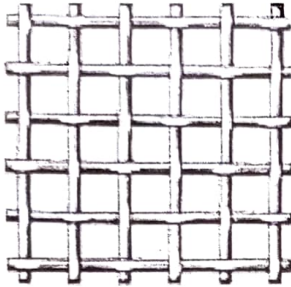
Kenya Primary School Education Assessment

CREATIVE ARTS AND SOCIAL STUDIES

Grade 6

1 hour 40 minutes

1. Name the following techniques of weaving shown below.




- A. twining technique
B. plaining technique
C. stripping technique
D. coiling technique
2. Which one of the following statements is **not** correct?
A. Stripping technique is using dots in shading.
B. Smudging technique is smearing colour onto a surface.
C. Cross-hatching technique is using lines that cross each other in shading.
D. Still life is drawing of an arrangement of moving objects.
3. State three factors to consider when drawing forms.
A. texture, balance and space
B. space, rhythm and texture
C. balance, proportion and space
D. space, value and proportion
4. The darkness and lightness of the colour of an object is known as _____.
A. shading
B. tonal value
C. rubbing
D. overlapping
5. The picture below was drawn from observation.



Choose two elements used in the picture.

- A. Texture and line
B. Space and value
C. Balance and line
D. Colour and shape

6. The picture below shows a value gradation strip. Arrange the gradation in correct order from dark to light.



- i ii iii iv
- A. iv, i, iii, ii B. iii, iv, i, ii
C. ii, iii, iv, i D. i, iv, iii, ii
7. The following are steps to follow when drawing a still life composition. The steps are not arranged in their order:
i. Set up the arrangement.
ii. Shade the drawing you have made.
iii. Correct interesting objects from your immediate environment.
iv. Look at the objects and draw them the way they are arranged.


Arrange the following steps in their correct order.

- A. ii, iv, i, iii B. iii, ii, i, iv
C. i, iii, iv, ii D. iii, i, iv, ii

8. Which colour will you get when you mix a primary and a secondary colour?

- A. red – orange
B. primary secondary colour
C. tertiary colour
D. secondary colour

9. The method of joining pieces of leather shown below is known as _____.



- A. beading B. thonging
C. incising D. tanning

10. Your class is to present a play using a rod puppet which of the following is **not** the correct way of moving a puppet during a presentation?
A. Move the rod puppet up and down while talking.
B. Talk and smile while moving the rod puppet.
C. Move the rod puppet sideways while talking.
D. Put the rod puppet on the side while talking.

11. What is the solfa syllables for the following hand signs?



- A. mi B. re
C. doh D. late

2. The following are steps to follow when making a shaker.

- i. Pull the wire through the holes at the ends of the stick and tie it firmly.
- ii. Flatten the bottle tops.
- iii. Pierce a hole through the two opposite sides of the stick.
- iv. Burn the bottle tops to remove the rubbers.
- v. Using a nail, punch holes through the bottle tops.
- vi. Pull the wire through the bottle tops to arrange them on it.

- A. iii, iv, ii, v, vi, i
B. i, ii, iii, iv, v, vi
C. ii, iv, v, i, iii, iv
D. iii, iv, ii, vi, i, v

13. Why is the East African Community (EAC) anthem performed?

- A. To promote cultures in the region.
B. To bring unity among the people in the region.
C. To address issues affecting the region.
D. For entertainment in the region.

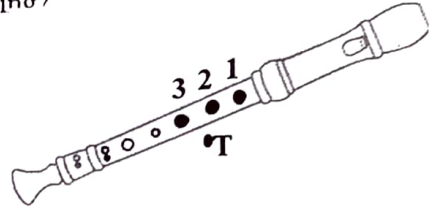
14. Write French rhythm for the following note symbols.

	Taa	tate		taa - aa
A.			B.	
C.			D.	

15. _____ describe how words are pronounced while singing and dancing.

- A. Mood B. Climax
C. Structure D. Diction

16. A Grade 5 learner played the note shown on the recorder. Which note was he playing?



- A. B B. C
C. A D. G

17. In folk dances, the participants decorate their bodies using paint to make patterns. This is known as _____.

- A. ornament B. costumes
C. decoration D. body adornment


18. Grade 6 learners from Tetu primary school clapped the first line of 'Twinkle twinkle little star'. Which French rhythm did they clap?

- A. Taa taa taa taa Taa taa Taa taa
B. Taa taa Taa - aa Tate Taaaa
C. Taaaa Taa taa Tate Taaaa
D. Tate Taa taa Taa taa Taaaa

19. _____ are songs that are liked and easily remembered by a large number of people in the country.

- A. Folk songs B. Popular songs
C. Actions songs D. Topical songs

20. The music instruments shown below is known as *Uta wa wathi*. It is from which community.



- A. Kuria B. Kamba
C. Meru D. Luo

21. When facing the rising sun, your right hand side will point to which direction?

- A. West B. North
C. South D. East

22. Which one of the following statement is **NOT** true about longitudes?
- They run from North to South.
 - The main longitude is prime meridian.
 - They are used to locate places on a map.
 - They are parallel to each other.
23. _____ is the highest block mountain in Eastern Africa.
- Ruwenzori
 - Usambara
 - Pare
 - Danakil Alps
24. Which one of the following mountain **does not** have a crater?
- Mt. Ngorongoro
 - Mt. Meru
 - Mt. Pare
 - Mt. Longonot
25. Which one of the following features is shared by most countries in Eastern Africa?
- Lake Victoria
 - The Great Rift valley
 - The Indian ocean
 - Mt. Elgon
26. What do we call the type of pattern of population distribution shown below?
-
- Linear
 - Scattered
 - Clustered
 - Unevenly
27. Which of the following countries of Eastern Africa are crossed by the equator?
- Tanzania, Somalia and Sudan
 - Kenya, Uganda and Somalia
 - Ethiopia, Kenya and Uganda
 - Sudan, Uganda and Somalia
28. Which one of the following communities is the **odd one out**?
- Maasai
 - Borana
 - Teso
 - Turkana
29. Three of the following mountains were formed as a result of volcanicity. Which one is **not**?
- Mt. Kenya
 - Mt. Ruwenzori
 - Mt. Longonot
 - Mt. Elgon
30. Which one of the following statements does not give a positive influence of mountain on human activities?
- leeward sides promote ranching
 - they are water catchment areas.
 - Some are used to make boundaries.
 - Steep slopes hinders road constructions
31. Which of the following language groups originated from the horn of Africa?
- Bantus
 - Nilotes
 - Semites
 - Cushites
32. Where is fluorspar in Kenya mined?
- Kariandusi
 - Kinwarer
 - Athi River
 - Lake Magadi
33. The following are problems facing tourism. Which one is **NOT**?
- Poaching
 - Poor transport
 - Insecurity
 - Political stability
34. Which of the following countries are found in the Northern hemisphere?
- Sudan and Eritrea
 - Djibouti and Somali
 - Uganda and Tanzania
 - Ethiopia and Kenya
35. A _____ is a low lying large area of flat land.
- swamp
 - Plateau
 - Plain
 - Desert
36. Which one of the following statement is **true**?
- God is the creator of everything.
 - Everything was created in the likeness and image of God.
 - Man was created on the fifth day.
 - It took seven days for the universe to be created
37. Give the reason why human beings are considered special from the Biblical story of creation?
- were fearfully and wonderfully made.
 - were created in the image and likeness of God.
 - were given clothes by God made from skin.
 - named all the animals that were created by God

38. Which of the following are gifts of the Holy Spirit?
 A. Joy and wisdom
 B. Kindness and faith
 C. Goodness and preaching
 D. Wisdom and knowledge
39. Which of the following group contains **only** books of the Old testament?
 A. Matthew, Mark and Luke
 B. Leviticus, Ezra and Acts
 C. Joshua, Psalms and Proverbs
 D. Romans, Galatians and Titus
40. The first four books of the new testament are known as gospel. Arrange them from the first one?
 A. Matthew, Mark, Luke, John
 B. Matthew, Luke, Mark, John
 C. John, Luke, Mark, Matthew
 D. Matthew, John, Luke, Mark
41. Who among were **not** present while Peter and John were preaching?
 A. Magistrate
 B. Sadducees
 C. Priest
 D. Three wise men
42. Identify and write the value you learn from the story of Peter and John?
 A. Faith and courage
 B. Humility and faith
 C. Wisdom and courage
 D. Knowledge and faith
43. Arrange the following events in their correct order.
 i. God called Moses
 ii. Moses was taking care of his father – in – laws sheep and goats.
 iii. God told Moses to remove his sandals.
 A. ii, i, iii
 B. i, ii, iii
 C. ii, iii, i
 D. i, iii, ii
44. _____ guides us in making good choices.
 A. The Holy spirit
 B. Knowledge
 C. The Bible
 D. A leader
45. When Adam woke up he said, the _____ of my bone and the flesh of my flesh.
 A. fresh
 B. bone
 C. flesh
 D. muscle
46. The ability to use talent and abilities to perform our duties well is called _____.
 A. self esteem
 B. responsibility
 C. creativity
 D. commitment
47. Which one of the following is **not** a cause of child labour?
 A. Free education
 B. Careless parent hood
 C. Poverty in the family
 D. Death of parents
48. From the story of Nicodemus encounter with Jesus, the requirement that one has to follow in order to enter into the kingdom of God is to _____.
 A. give offering to God
 B. give up everything and follow Jesus
 C. visit religious leaders
 D. be born again
49. Social media can be put to good use by using it in the following way **except**.
 A. sharing disturbing videos and images
 B. sharing bible verses
 C. using them in preaching
 D. using them in teaching
50. From the story of Moses rescue we learn that it is good to _____.
 A. to go swimming often
 B. take care of the vulnerable
 C. to ignore people's children
 D. we should take children in the river

SCHOOL BASED EVALUATION TEST

Kenya Primary School Education Assessment ENGLISH LANGUAGE

Grade 6

1 hour

Question 1 to 5

Read the following play and answer the questions that follow.

- Lady:** Doctor please help! Hurry, please. He could be dead!
- Doctor :** (Coming over) He needs some fresh air. Remove the cover (boy pulls the sheet away) yes, like that. He's so pale . What happened ? A road accident?
- School boy:** It was raining and there was blood, I saw it.
- Doctor:** Now calm down and tell me what happened to the boy.
- Lady :** My son here heard something fall on the roof of our house. He ran out to check, then I heard him scream."Blood! It's raining blood!" When I went out to check I couldn't believe my eyes.I saw blood pouring from the roof of our house.
- Doctor :** Let me examine him then. Do you know his name?
- School boy:** Huduma
- Lady:** He's been working as my neighbour's house help for several months. He's very responsible.
- Doctor:** Thank you. Would you mind walking outside until I've finished.
- Doctor:** (Later) I have observed the patient. Although he's lost a lot of blood, he's stable condition we need to call in the police because it is evident that the boy has suffered several physical attacks in the past.

- Where are the people at the beginning of the play?
 - At home
 - In the hospital
 - In the police station
 - In the hospital
- Why did the school boy pulled the sheet from the patient?
 - For the doctor to examine him
 - The patient needed fresh air
 - The patient was pale
 - He was bleeding so much.
- What was the name of the sick person?
 - Patient
 - Stretcher
 - School boy
 - Huduma
- Which of the following would be the best heading of the play above?
 - The doctor
 - A road accident
 - The rescue
 - Patient at ward

5. "He ran out to check, then I heard him scream! Blood!! It's raining blood." Who was this screaming?
- A. The lady
 - B. The school boy
 - C. The doctor

Read the passage below and answer questions 6 to 10.

Mary and her brother Peter were spending Christmas with their grandparents at the village. Grandmother always reminded them to say their prayers before they went to bed.

One evening a few days before Christmas the children knelt down beside their beds and started praying. Peter prayed in a very loud voice, "I pray for a bicycle" His sister Mary leaned over him and whispered. "Why are you shouting your prayer? God is not deaf." 'I know,' Peter whispered back but grandfather is'

6. What did grandmother remind Mary and Peter to do before going to bed?
- A. To sing
 - B. To eat
 - C. To brush their teeth
 - D. To play
7. The **title** best suits this passage.
- A. Peter's prayer
 - B. The grandmother
 - C. The children
 - D. Mary pray
8. Where did the children kneel down to pray?
- A. Near the grandmother
 - B. In the church
 - C. Besides their beds
 - D. On their beds
9. Who prayed in a loud voice ?
- A. Grandmother
 - B. Peter
 - C. Mary
 - D. Both children
10. Who leaned over to Peter when he was praying?
- A. Grandfather
 - B. Grandmother
 - C. Mary
 - D. We are not told

Read the passage below and answer questions 11 to 15.

Listening is one of the four language skills taught at any level of learning. The skills are listening, speaking, reading and writing. Listening is the basic skill in any language learning. This is a big difference between hearing and listening. Hearing is the physical ability of the ears to receive sounds and then to transmit them to the brain. Listening is a skill that allows for comprehension of these sounds. It requires concentration. If this skill is not imparted to the learners well, then all the other skills will not be properly acquired. A teacher of language can use the following methods to teach listening skills: giving oral instructions, dictation, recitation and storytelling. The effectiveness of the listening skill is tested through the ability to follow instructions given orally.

11. The following are skills of language learning. Which is the correct order in which the skills are taught?
- Speaking, listening, reading and writing
 - Listening, speaking, reading and writing
 - Writing, reading, listening and speaking
 - Listening, reading, speaking and writing
12. The most basic skill in any language learning is _____.
- reading
 - talking
 - writing
 - listening
13. _____ is the physical ability of the ears to receive sound and then transmit them into the brain.
- speaking
 - listening
 - reading
 - hearing
14. The word “**comprehension**” has been used in the passage. It means
- understanding
 - hearing
 - listening
 - transmitting
15. A language teacher can use all the following to teach the listening skill **except**.
- giving oral instructions
 - reciting poems
 - story telling
 - giving written exercises

Questions 16 to 20.

Read the passage below. It contains blank space, select the best alternative from the choices given.

One afternoon Moses was returning home. He was _____ 16. _____ after spending most of the day swimming. He liked the _____ 17. _____ where he and his friends had _____ 18. _____ bathed and had fun. As he walked along the path, he _____ 19. _____ stopped, stamped his feet and trumpeted like an elephant. He became worried his two allies were not answering his phone call. He _____ 20. _____ something wrong had happened to them.

- | | | | |
|-----------------|-------------|-----------------|-----------------|
| 16. A. tried | B. tireless | C. tried | D. tried |
| 17. A. pools | B. pulled | C. pool | D. path |
| 18. A. drunk | B. drank | C. drank | D. drink |
| 19. A. occasion | B. occasion | C. occasionally | D. occasionally |
| 20. A. believed | B. believed | C. believed | D. belived |

Choose the best alternative for question 21 and 22.

21. Mary cannot write well. _____?
A. can she
B. will she
C. she can't
D. can't she
22. You are a pilot, _____?
A. is it
B. are you
C. aren't you
D. were you

For questions 23 and 24, choose the alternative that is the **opposite** of the underlined word.

23. It is compulsory to wear a tie in our school.
A. reckless
B. voluntary
C. good
D. important
24. People in our village are polite to strangers.
A. mean
B. unfair
C. hostile
D. rude

Choose the best alternative to complete the sentences in question 25 and 26.

25. The teacher told us to be quiet, but some pupil _____ to talk.
A. continue
B. continued
C. continuous
D. continues

26. Bibles are _____ to have very little hair on their heads when they are born.
A. certain
B. luckily
C. likely
D. unlikely

Use the best alternative to answer questions 27 and 30.

27. I saw _____ hippo this morning.
A. the
B. a
C. an
D. on
28. The kids greeted _____ old woman.
A. a
B. an
C. in
D. the
29. Choose the **alternative** that is grammatically correct sentence.
A. We go to school in bus.
B. He does it yesterday.
C. Neither of them is late.
D. He is the shortest of the two.
30. I am tired _____ getting poor grades.
A. by
B. of
C. from
D. and

SCHOOL BASED EVALUATION TEST

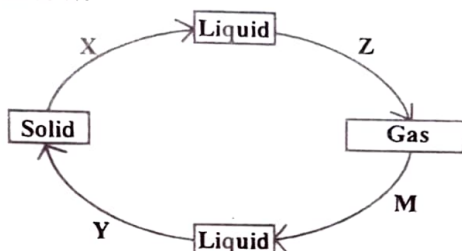
Kenya Primary School Education Assessment

INTEGRATED SCIENCE

Grade 6

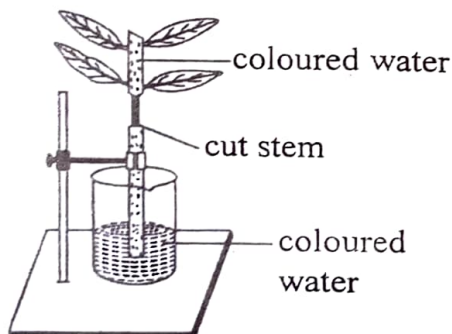
1 hour 40 minutes

1. Study the diagram on the change of state below.



The processes Y and Z are

- A. melting and evaporation
 B. freezing and evaporation
 C. freezing and evaporation
 D. freezing and melting
2. Which one of the following plants have fibrous roots?
 A. Maize B. Beans
 C. Black jack D. Green grams
3. The diagram below shows an experiment on plants.

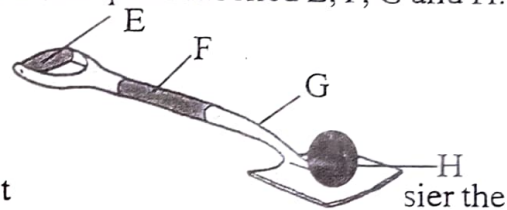


Which one of the following was being investigated?

- A. Manufacture of food by the leaf.
 B. Transportation of manufactured food
 C. Absorption of water by the roots
 D. Transportation of water by the stem.
4. Which of the following statement about tick is not true?
 A. They have one pair of antennae
 B. They have two body parts

- C. They have four pairs of legs.
 D. They do not have wings.

5. The diagram below represents a spade in use with parts labelled E, F, G and H.



For t

effort should be applied at point.

- A. E B. F C. G D. H
6. Learners placed a bottle top in water and it floated. When they crushed it and placed in the same water it sunk. Which one of the following factors affected the floating or sinking of the bottle top?
 A. Size of the bottle top.
 B. Type of material of the bottle top.
 C. Mass of the bottle top.
 D. Shape of the bottle top.
7. The process that occurs at X below is called

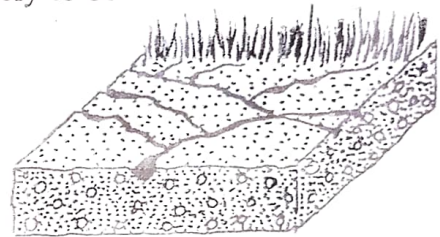


- A. solidification B. evaporation
 C. condensation D. melting
8. Which one of the following plants does not have fibrous roots?
 A. Grass B. Millet
 C. Sorghum D. Peas
9. Which one of the following is not part of the alimentary canal?
 A. Nose B. Stomach
 C. Duodenum D. Rectum

10. Which one of the following is not true about litmus paper?
- Blue litmus paper turns red when dipped into baking soda solution.
 - Red litmus paper turns blue when dipped into soap solution.
 - Blue litmus paper turns red when dipped into sour milk.
 - Red litmus paper turns blue when dipped into wood ash solution.
11. Digestion of food ends in the
- duodenum
 - stomach
 - mouth
 - colon
12. Which one of the following is not correctly matched with its use?
- Mouse - moves on flat surface and gives an instruction when clicked.
 - Monitor - controls and processes programs.
 - Cables - connects device to its hardware
 - Key board - types into the computer
13. Which one of the following is not true about liquids?
- Takes shape of the container they are put in.
 - Do not have a fixed shape
 - Have a fixed volume
 - They have a fixed shape.
14. Which one of the following materials can be used as insulators?
- Wood, copper, silver
 - Rubber, wood, plastic
 - Metal, spoon, rubber
 - Wood, metal, plastic
15. The clouds that are white and puffy are known for
- having flat base
 - bring rainfall
 - being dark grey
 - lying low in the sky
16. Grade 5 learners toured the school compound and identified a place full of soil deposited by flowing rain water.

How best can the learners recover the deposited soil and make good use of it?

- Collect and use it for modelling
 - Plant crops on the deposited soil
 - Connect soil and place it in the agriculture section
 - Collect and use it for growing crops.
17. Which one of the following are agents of soil erosion?
- Water and sunlight
 - Water and warmth
 - Warmth and sunlight
 - Wind and water
18. The type of soil erosion shown below is likely to be



- Rill erosion
 - Gully erosion
 - Sheet erosion
 - Splash erosion
19. Grade 5 learners from Wendo primary school intends to establish a nursery bed for a tree tomato plants using container gardens as shown below.



Which one of the following planting materials should they use to establish the nursery bed?

- Seeds
 - Suckers
 - Splits
 - Stem cutting
21. How best can the learners encourage the community members to grow the tree tomato crop?
- Advertise tree tomato fruits
 - Give the free tree tomato fruits
 - Sell them tree tomato fruits
 - Sell them tree tomato seedlings

22. Learners planted tomato fruit trees and were asked to take care of them. Which is the most appropriate method of watering they can use during dry season? Using
- A. buckets B. watering can
C. drip bottle D. furrows
23. Which one of the following is not a safety measure to under take when preparing and setting up the nursery bed?
- A. Wear gloves and gumboots
B. Use the locally available tools and equipment.
C. Clean tools and equipment after use.
D. Wash your hands with water and soap after working.
24. The following are legume crops except
- A. green grams B. groundnuts
C. beans D. wheat
25. The following are managing practices undertaken in a vegetable nursery bed. Which one is NOT?
- A. Watering of the seeds
B. Mulching
C. Weeding
D. Prunning of the unwatered branches
26. The following are some of the factors to consider when choosing foods from a general grocery except.
- A. Type of materials the packaging is made of.
B. Weight of the item that has been packed.
C. Price of the item that has been packed.
D. The type of the weather of the day.
27. Which one of the following is **not** a Nutritional deficiency?
- A. Marasmus B. Kwashiorkor
C. Rickets D. Chicken pox
28. The following are reasons why buttons are used on clothes and house hold articles **except** to.
- A. cross an opening B. fasten the clothing
C. decorate clothes D. fix joints

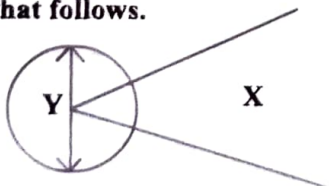
29. Feelings and behaviours during adolescence are caused by _____.
- A. change of state B. emotional changes
C. monthly changes D. physical changes
30. Which one of the following are examples of joining stitches?
- A. Backstitch and over sewing stitch
B. Hemming stitch and loop stitch
C. Satin stitch and chain stitch
D. Stem stitch and back stitch
- Use the diagram below to answer questions 31 and 32.



31. What has been embroidered on the cloth above?
- A. Book cover B. Stool cloth
C. Window curtain D. Blanket
32. What stitches have been used to embroider the above cloth?
- A. Stem stitch, chain stitch, satin stitch
B. Backstitch, stem stitch, hemming stitch
C. Loop stitches, overcasting stitches, hemming
D. Back stitch, chain stitches, hemming
33. Which one of the following is used to hold pieces of fabric together before they are sewn together?
- A. Needle B. Tape measure
C. Pine D. Scissor
34. Which of the following materials are **not** used when cleaning leather shoes?
- A. Shoes polish, brushes, old newspaper
B. Mob, Sot brush, soap and water
C. Scrubbing cloth, soft brush, old newspapers
D. Old newspaper, shoe polish, soft brush
35. The following are importance of a shopping list **except**? It
- A. saves money
B. enables one to know the amount of money
C. saves time wastage
D. help one to know usage of the item
36. Which one of the following shows the correct number of players in the following games in each team.
- | Games | Number of player |
|-----------------|------------------|
| A. Kabadii game | seven players |
| B. Volleyball | nine players |
| C. Softball | six players |
| D. Rounder | ten players |

37. Which part of the body is used when finishing a race using the drop finish technique?
 A. hands B. shoulder
 C. Chest D. Head
38. The following are some of the safety measures to observe when doing a bunch start in athletics **except**.
 A. use your lane and stick to it
 B. wear appropriate PHE attire
 C. avoid teachers instruction
 D. warm up adequately before participating in an activity
39. The following are drills used when practicing the shoulder shrug technique **except**?
 A. outgoing stance
 B. shoulder shrug drill
 C. Stationary bend
 D. Right and left bends
40. The following are human beings organs. Which one is used to pump blood during a warm up activity?
 A. Lungs B. Kidney
 C. Heart D. Liver
41. Ben a Grade 5 learner was participating in a race after two minutes he started complaining of severe pain in his ankle. Which of the following could be the cause of the pain?
 A. He did not drink enough water before the game.
 B. He had eaten a lot of food before getting into the game.
 C. He did not have his shoes on during the game.
 D. He had not warmed up before getting into the game.
42. _____ is the use of same drugs in order to improve sport performance.
 A. Doping B. Prescription
 C. Drug abuse D. Drug taking

Use the facility below to answer questions that follows.



43. Name the sections labeled X and Y.
- | | |
|--------------------|-----------------|
| X | Y |
| A. landing pit | throwing sector |
| B. throwing sector | landing pit |
| C. landing area | throwing sector |
| D. Throwing sector | landing area |
44. Which field event takes place in the facility above?
 A. Long jump
 B. Standing discus
 C. High Jump
 D. Standing javelin
45. Which other equipments are found in the facility above?
 A. Score cards and rake
 B. Measuring tape and rake
 C. Rake and marking pegs
 D. Morning key and measuring tape
46. The following are stages or phases when performing standing discus technique. Which shows the correct order?
 A. Stance, grip, swig, release and recovery
 B. Grip, stance, swig, release and recovery
 C. Release and recovery, swig, release and recovery
 D. Stance, swig, grip, release and recovery
47. In softball which of the following are basic catcher's equipments?
 A. helmet, chest protector, mitts, leg guards
 B. Fielding gloves, sliding shorts, helmet
 C. Chest protector, catchers, mitts, fielding gloves
 D. Leg guards, mitts, fielding gloves, sliding shorts
48. Who are the main types of players in game of softball?
 A. Infield and base field
 B. Catcher and pitcher
 C. Outfield and infield
 D. Short step and base fielder
49. Which of the following is a symptom of nose bleeding?
 A. Pain in the nose
 B. Pain in the joints
 C. Headache
 D. Bleeding
50. Which are the three basic skills required in volleyball?
 A. Catching, throwing, dig
 B. Underarm serve, dig and volley
 C. Volley, batting and fielding
 D. Throwing underarm serve, dig

SCHOOL BASED EVALUATION TEST

Kenya Primary School Education Assessment

KISWAHILI LUGHA

Gredi la 6

Saa 1

Swali la 1 hadi 5.

Soma mazungumzo yafuatayo kisha ujibu maswali.

(Mazungumzo kati ya mwalimu na Rehema)

Rehema: Salaam aleikum mwalimu?

Mwalimu: Aleikum salaam Rehema waambaje ?

Rehema : Sina la kuamba mwalimu ila uambalo.

Mwalimu: Unaendeleaje masomoni?

Rehema: Ninaendelea salama mwalimu. Ninatia bidii za mchwa kila siku.

Mwalimu: Vizuri sana! Endelea kutia bidii kuwa mtaka cha mvunguni sharti ainame.

Rehema : (Akionyesha furaha) Nina shukuru mwalimu. Nitazingatia ushauri wako.

Mwalimu: Haya, kila la heri uwe na mchana mwema.

Rehema : Nawe pia mwalimu. Asante !

Mwalimu: Kwaheri!

Mwema : (Wakiagana) Kwaheri ya kuonana.

- | | |
|--|---|
| 1. Maamkizi "Salaam aleikum" hutumika wakati upi wa siku?
A. usiku
B. asubuhi
C. wakati wowote
D. jioni | C. Endelea kutia bidii
D. Ninatia bidii za mchwa |
| 2. Ni maneno gani ya adabu aliyotumia Rehema katika mazungumzo haya?
A. Salaam aleikum, asante
B. Unaendeleaje, Ninashukuru
C. Ninashukuru, asante
D. Kila la heri, kwaheri | 4. Je, ungeyasikiliza mazungumzo ya mwalimu na Rehema, ungejifunza nini?
A. Mtaka cha mvunguni sharti ainame
B. Kufikiria kuhusu masomo kunapunguza matatizo
C. Kufahamu aina ya maakuzi na maagano
D. Bidii za mchwa ni muhimu maishani. |
| 3. Kati ya sentensi zifuatazo zilizo tumika katika mazungumzo haya, ni ipi inayoonyesha kuwa Rehema anaendelea vyema masomoni?
A. Mtaka cha mvunguni sharti ainame
B. Nitazingatia ushauri | 4. Jibu _____.
A. vyema!
B. kwaheri ya kuagana
C. kwaheri ya kuonana
D. Nawe pia |

Swali la 6 hadi 10.

Soma kifungu kifuatacho kisha ujibu maswali.

Jambo usilolijua ni usiku wa giza. Huenda watu wanalijua lile ambalo lingetokea katika dakika moja. Itakayofuata, dunia mzima ingejawa na vilio kwa wengine na vicheko vya furaha kwa wengine Alhamdulillah! Ni mungu ajuaye tu.

Kwa jinsi hiyo, hapo kale Mungu aliwapasha watu wake habari kupitia kwa wale aliowateua. Hata hivyo kuna baadhi ya watu wa Mungu leo wanaodai na kuisitiza kuwa wamepokes ujumbe kutoka kwa Mungu. Hawa hupandwa na jadhba na kurogonya katika lugha zisiso tambulika. Baadaye watatafsiri yale maneno kwa watu wakisema, "Mungu amesema

Moyo wa mwanadamu ni mdanganyifu, mtamanifu na unaojitakia makuu. Kwa hivyo kuna wanaotumia jina la Mungu kwa manufaa yao wenyewe wengine hutoa habari za kutisha, kutamausha na kutia hofu mioyoni mwa watu na nchi nzima. Watu wakishatishika na kuingiwa na hofu huuliza swali moja tu. "Mtumishi, Mungu anataka tufanye nini."

6. "Jambo usilolijua ni usiku wa giza. Methali hii ina maana kuwa ____.
A. si rahisi kufahamu mambo ya usiku
B. giza likiingia watu hawajuani
C. usipolifahamu jambo utadanganywa
D. hakuna anayejua linakotoka giza.
7. Maana ya mwandishi katika aya ya kwanza ni kuwa ____.
A. Ni heri kutojua linalokuja.
B. Tufurahi kwa kujua linalokuja
C. Tulie kwa sababu ya linalokuja
D. Mungu atatuonyesha lijalo
8. Tofauti ya kale na leo katika taarifa hii ni lipi.
A. Leo Mungu amewasahau.
B. Manabii waliwapasha watu ujumbe wa Mungu.
C. Zamani watu hawakuwa na matatizo.
D. Watumishi wa Mungu leo wanawaponya watu.
9. "Hawa hupandwa na jadhba na kurongonya kwa lugha zisizotambulika. "Huku ni kufanya nini?
A. Kupanda jukwaani na kumwambia Mungu.
B. Kubadilisha mavazi ya kuwaida na kuvaa kanzu.
C. Kunene kwandimi tofauti tofauti.
D. Kunena yale ambayo Mungu anawaambia.
10. Aya ya tatu inadhihirisha kuwa ____.
A. mwanadamu ana ubinafsi mkubwa
B. mwanadamu anafanana na Mungu
C. Mwanadamu anawafaa wengine.
D. Mwanadamu anafanya mambo na Mungu.

Swali la 11 hadi 15.

Soma shairi hili kwa makini kisha ujibu maswali.

Adabu ni kama mali, hutumiwa maishani,
Muhimu kila mahali, majumbani na shuleni,
Uwe naye kila hali, ndipo wennde masomoni,
Mwanafunzi wa shuleni, onyesha adabu yako.

Usiwe mwana jeuri, kwa ndugu na majirani,
Yafaa uwe hodari, ufurahishe machoni,
Ufanye mambo mazuri, si aibu hadharani,
Mwanafunzi wa shuleni, onyesha adabu yako

Waheshimu wazazi, nao walimu shuleni,
Sidharau wanafunzi, wasomao darasani,
Pamoja muwe wapenzi, kama wana watumboni,
Mwanafunzi wa shuleni, onyesha adabu yako.

Beti hizo nawachia, kalamu naweka chini,
Nadhani umesikia, utu bora maishani,
Pamoja muwe wapenzi, kama wana watumboni,
Mwanafunzi wa shuleni, onyesha adabu yako.

11. Shairi hili ulilolisoma ni la aina gani?

- A. Takhmisa
- B. Tasdisa
- C. Tathlitha
- D. Tarbia

12. Ni jamno gani msomaji analokanywa kufanya katika ubeti wa pili?

- A. Kukuza akili
- B. Kusikiza maovu
- C. Kuwa mtu bora
- D. Kuwa hodari

13. Shairi hili lina beti ngapi?

- A. 8
- B. 16
- C. 14
- D. 4

14. Kichwa mwafaka cha shairi hili ni _____.

- A. Adabu
- B. Mwanafunzi
- C. Wazazi
- D. Walimu

15. Ni nini maana ya “kama wana wa tumboni”Kulingana na shairi hili?

- A. Watu wa rika moja.
- B. Watu wa jamii moja.
- C. Ndugu na dada.
- D. Watu wa cheo moja.

Swali la 16 hadi 20.

Soma kifungu kifuatacho kwa kila swali umepewa majibu manne. Chagua jibu lifaalo zaidi kati ya yale uliyopewa.

Mchezo wa _____ 16. _____ ni mchezo _____ 17. _____ na watu wengi _____ 18. _____ duniani. Kwa kawaid mchezo huo hukua na wa kumi _____ 19. _____. Husimamiwa na refa _____ 20. _____ ndiye mwamuzi wa mchezo huu.

- | | | | |
|-----------------|-----------------|---------------|---------------|
| 16. A. Kandanda | B. Kandanda | C. Kadada | D. Kandada |
| 17. A. hupendwa | B. utakaopendwa | C. uliopendwa | D. unaopendwa |
| 18. A. pale | B. kule | C. kote | D. hawa |
| 19. A. na mmoja | B. na moja | C. moja wapo | D. na wamoja |
| 20. A. ambao | B. ambayo | C. ambalo | D. ambapo |

Swali la 21 hadi 30.

Chagua jibu sahihi.

21. Jibu maamkizi: Buriani!
A. Dawa B. Buriani dawa
C. Alamsiki D. Binuru
22. Chagua umoja wa :
Nyuzi nyingine walizo zileta ni zao.
A. Uzi mwingine aliouleta ni wako.
B. Uzi mwingine aliouleta ni wake.
C. Uzi nyingine aliyoileta ni yako.
D. Uzi nyingine aliyoileta ni yake.
23. Chagua sentensi yenye kivumishi kimilikishi.
A. Ng'ombe hao wana pembe kali.
B. Mwalimu mwenyewe ana nyumba kubwa.
C. Mtoto wao ana tabia nzuri.
D. Mwanafunzi huyu ana vitabu vitatu.
24. Nomino "utete" imo katika ngeli gani?
A. YA – YA B. U – YA
C. U – ZI D. LI – YA
25. Chagua neno litalo orodheshwa mwisho katika kamusi.
A. chunguza B. chungu
C. chungwa D. chungua
26. "Mwanahewa, Mwananchi, Domokaya" yote ni _____
A. nomino za jamii
B. nomino za pekee
C. nomino ambata
D. nomino jina
27. Tumia kivumishi mwafaka kujazia pengo.
Mabatamzinga _____
wameuzwa.
A. watatu B. matatu
C. tatu D. mitatu
28. Vipeopeo _____
hupendeza ni hawa
A. ambavyo B. ambao
C. ambazo D. ambayo
29. "Masalkheri" ni maakizi ya wakati gani?
A. asubuhi B. jioni
C. alfajiri D. usiku
30. Chagua sentensi iliyo katika wakati timilifu.
A. Mashanda aliwasili mapema.
B. Kitabu hiki kitapendwa na watu wengi.
C. Uji hunyewa na mtoto.
D. Nyama zimeliwa zote.

SCHOOL BASED EVALUATION TEST

Kenya Primary School Education Assessment

MATHEMATICS

Grade 6

1 hour 20 minutes

INSTRUCTIONS TO CANDIDATES (Please read these instruments carefully)

1. You have been given this question booklet and a separate answer sheet. The question booklet contains 30 questions.
2. Do any necessary rough work in this booklet.
3. When you have chosen your answer, mark it on the **ANSWER SHEET**, not in the question paper.

HOW TO USE THE ANSWER SHEET

4. Use an ordinary pencil only.
5. Confirm that the answer sheet that you have been provided with has the following:

YOUR ASSESSMENT NUMBER
YOUR NAME
NAME OF YOUR SCHOOL
NAME OF SUBJECT

6. Do not make any marks outside the boxes.
7. Keep the sheet as clean as possible and do not fold it.
8. For each of the Questions 1 – 30 four answers are given. The answers are lettered A, B, C, D. In each case only **ONE** of the four answers is correct. Choose the **correct** answer.
9. On the answer sheet show the correct answer by drawing a **dark line** inside the box in which the letter you have chosen is written.

Example

In the Question Booklet:

11. Work out: $8 + 3 \times 12 - 6$

- A. 17
- B. 66
- C. 38
- D. 6

The correct answer is C

On the Answer Sheet:

In the set of boxes numbered 11, draw a **dark line** inside the box with the C printed in the indicated below.

11. [A] [B] [C] [D]

10. Your dark line **MUST BE** within the box.
11. For each question **ONLY ONE** box is to be marked in each set of four boxes.
This question paper consists of 4 printed pages.

1. Use digits 2, 4, 6, 1 and 5 to form five digit numbers. Write the largest possible number in words.

- A. Sixty five thousand four hundred and twenty one
- B. Twelve thousand four hundred and fifty six
- C. Fourteen thousand two hundred and sixty five
- D. Fifty six thousand four hundred and twenty one

2. Work out the following:-

$$626 + 356 - 326 =$$

- A. 596
- B. 56
- C. 656
- D. 799

3. In Maungu county there are 1976 primary schools. Each school was supplied with 53 litres of hand sanitizer. Estimate the amount of hand sanitizer supplied to the schools?

- A. 104728
- B. 50000
- C. 100000
- D. 150000

4. What is the square root of $\sqrt{16}$?

- A. 4
- B. 16
- C. 8
- D. 2

5. A square flower plot has an area of 784m^2 . What is the perimeter of the flower plot in metres?

- A. 28m
- B. 112m
- C. 221m
- D. 96m

6. The chart below shows the number of learners in a certain counties.

County X	453694
County Y	534964
County Z	435694
County V	543469

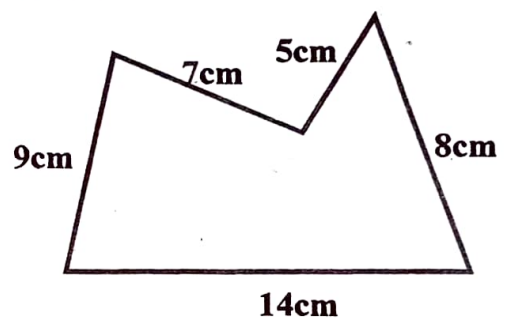
Arrange the learners population in an ascending order.

- A. 435694, 543469, 534964, 453694
- B. 435694, 534964, 453694, 543464
- C. 435694, 453694, 534964, 543469
- D. 543469, 534964, 453694, 435694

7. What is the shortest possible length of a wire from which equal pieces of wire measuring 24cm, 20cm and 25cm can be cut?

- A. 600cm
- B. 900cm
- C. 360cm
- D. 10cm

8. Find the perimeter of the shape shown below.



- A. 43
- B. 56
- C. 33
- D. 68

9. The following are properties of some shapes:

- i. There are four lines of symmetry.
- ii. All four angles are equal.
- iii. Each angle is a right angle which shape is represented by the above properties.

- A. Square
- B. Triangle
- C. Equilateral
- D. Rectangle

10. The following is the price list for Maina's shop.

Item	Price	
	Sh	cts
1 kg rice	146	00
1 loaf of bread	55	00
A packet of yoghurt	95	00
2 kg wheat flour	217	00

Tom bought 2 kg wheat flour, two packet of yoghurt and one loaf of bread. He gave the shopkeeper a sh 1000 note. What was his balance?

- A. sh 679 B. sh 697
C. sh 421 D. sh 321

11. What is the place value of digit 4 in the number 236.3846?

- A. thousandths
B. 0.004
C. four thousandths
D. 0.04

12. In a village there are 28692 adults. Out of these 19208 are women. How many men are there ?

- A. 9484 B. 17484
C. 47900 D. 33028

13. What is the total value of digit 2 in the number 529876?

- A. tens of thousands
B. twenty thousand
C. 200 000
D. 200

14. Ten boys went to the shop five times one day. Each time one of them bought 8 sweets. How many sweets did they buy altogether?

- A. 23 B. 40
C. 520 D. 400

15. Work out

Kg	g
320	302
x	5

- A. 1610kg 1510g
B. 1610kg 10g
C. 1601 kg 510g
D. 1625kg 10g

16. Baby Fame slept at 10.45 am and woke up $3\frac{3}{4}$ hours later. At what time did he wake up?

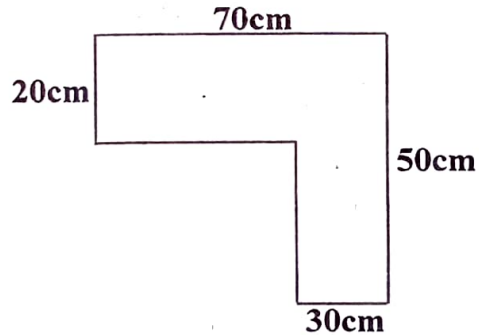
- A. 7.00 am B. 1.30 pm
C. 14.30am D. 2.30 pm

17. Arrange the following fraction from the smallest to the largest.

$$\frac{2}{3}, \frac{3}{5}, \frac{3}{4}, \frac{1}{2}$$

- A. $\frac{2}{3}, \frac{3}{4}, \frac{3}{5}, \frac{1}{2}$ B. $\frac{2}{3}, \frac{3}{4}, \frac{1}{2}, \frac{3}{5}$
C. $\frac{1}{2}, \frac{3}{5}, \frac{2}{3}, \frac{3}{4}$ D. $\frac{3}{5}, \frac{2}{3}, \frac{1}{2}, \frac{3}{4}$

18. Find the perimeter of the following figure.



- A. 2400cm B. 224cm
C. 240cm D. 170cm

19. Work out: $38 \overline{)72030}$

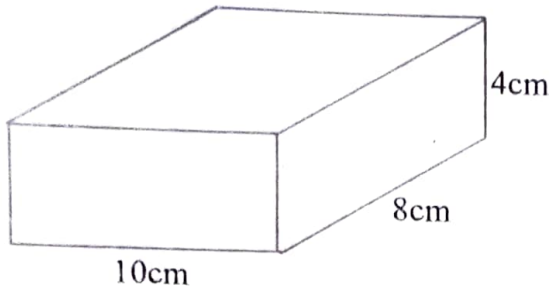
- A. 2000 rem 32 B. 1995 rem 22
C. 1895 rem 20 D. 1895

20. Work out :

Km	m	cm
11	154	73
- 1	425	86

- A. 11km 738m 97cm
B. 9km 728m 87cm
C. 11km 728m 159cm
D. 10 km 738m 159cm

21. Find the volume of the following figure.



- A. 320cm^3 B. 230cm^2
 C. 320cm^2 D. 120cm^3

22. Work out

$$4 \overline{) 17\text{hrs } 23\text{ mins } 20\text{ sec}}$$

- A. 4 hrs 30 mins 20 sec
 B. 4 hrs 6 mins 12 sec
 C. 4 hrs 20 mins 50 sec
 D. 4 hrs 20 mins

23. On a map 1cm rep 40m. How many centimetres represent 560m?

- A. 12 cm B. 40 cm
 C. 14 cm D. 28 cm

24. A square plot has an area of 144m^2 . What is the perimeter of the plot?

- A. 12m B. 72m
 C. 48m D. 24m

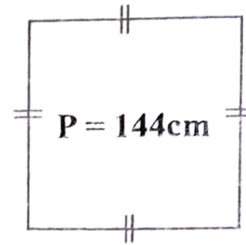
25. Find the sum of all even number from 20 to 30.

- A. 250 B. 100
 C. 150 D. 120

26. Change $7\frac{2}{3}$ as an improper fraction.

- A. $\frac{23}{3}$ B. $\frac{17}{3}$
 C. $\frac{12}{3}$ D. $\frac{3}{4}$

27. The perimeter of the figure shown is 144cm. What is its area?



- A. 1296cm^2
 B. 136cm^2
 C. 48cm^2
 D. 1048 cm

28. What is the value of:
 $60 - 125.82 + 80.16?$

- A. 14.24
 B. 145.98
 C. 105.16
 D. 14.34

29. What is the reciprocal of the square of 5?

- A. 25
 B. $\frac{1}{25}$
 C. $\frac{1}{5}$
 D. $\frac{2}{5}$

30. Which is the smallest number that can divide 18 and 30 without a remainder?

- A. 180
 B. 6
 C. 90
 D. 540