

KPSEA SUPER REVEALED

KPSEA FIRST TRIAL-22

Class of KPSEA 2024

The PDF Comprises of assessment Questions Meant to prepare the learners to prepare for the KPSEA National Exams set for October 2024.

For Marking Schemes:

Order online at: www.kenyaeducators.co.ke

Or

Contact Kenya Educators Consultancy

0724333200

0795491185

0768321553

Visit our Website kenyaeducators.co.ke or Contact us on 0724333200 for CBC (pp1-grade 6), JSS (Grades 7 and 8) and Highschool levels (Forms 1-4) Exams, Lesson Notes and Schemes of Work, CBC report card books, lesson plans, Curriculum Designs and Official CBC Training Materials.

KENYA EDUCATORS CONSULTANCY

Compiled and distributed by Kenya Educators Consultancy- 0724333200

Website: www.kenyaeducators.co.ke



Pinpoint Publishers
Always to the point

KPSEA REVEALED

SUPER PREDICTION

209503

GRADE 6

KENYA PRIMARY SCHOOL EDUCATION ASSESSMENT

INTERGRATED SCIENCE — 2022

1hr 40mins

INSTRUCTIONS TO CANDIDATES (Please read these instructions carefully)

1. You have been given this question booklet and a separate answer sheet. The question booklet contains 50 questions
2. Do any necessary rough work in this booklet.
3. When you have chosen your answer, mark it on the ANSWER SHEET, not in this question booklet.

HOW TO USE THE ANSWER SHEET

4. Use an ordinary pencil.
5. Confirm that the answer sheet provided with has the following:
YOUR ASSESSMENT NUMBER
YOUR NAME
NAME OF YOUR SCHOOL
NAME OF SUBJECT
6. Do not make any marks outside the boxes.
7. Keep the answer sheet as clean as possible and do not fold it.
8. For each of the questions 1 - 50, four choices are given. The answers are lettered A, B, C and D. In each case, only ONE of the four choices is correct. Choose the correct answer from the choices.
9. On the answer sheet, the correct answer is to shown by drawing a dark line inside the box in which the letter you have chosen is written.

Example

In the Question booklet

11. Identify the female parts of the reproductive system.

- A. Testis
- B. Oviduct
- C. Spermduct
- D. Penis.

The correct answer is B
On the answer sheet.

In the set of boxes numbered 11, draw a dark line inside the box with the letter B printed in it as indicated below.



[A] [B] [C] [D]

10. Your dark line MUST be within the box.
11. For each question, ONLY ONE box is to be marked in each set of four boxes.



Pinpoint Publishers
Always to the point

This question paper consists of 7 printed pages

Email: info@pinpointpublishers.co.ke

TURN OVER

Wanjala a grade 4 learner shed one of his teeth shown below.



When he was asked by his Science teacher to tell the function of the tooth but he could not. The teacher asked anyone in a class who could tell the function

- (i) Ochieng: *crushing and biting*
- (ii) Kamau: *cutting and tearing*
- (iii) Jibril: *tearing and holding*
- (iv) Muli: *crushing and grinding*

Who among the boys was right?

- A. Muli
- B. Jibril
- C. Kamau
- D. Ochieng

2. Which one of the following is **not** a function of one of parts of the skeleton called spine?

- A. Production of white and red blood cells
- B. Keeps human being upright
- C. Allows body movement
- D. Keeps us upright and generate heat

3. Grade 6 learners were discussing the functions of leaves of a plant found in the environment. Their teacher gave them the following functions **except** one. Which one was it?

- A. Transport water and mineral salts
- B. Make food for the plant
- C. Remove excess water from the plant
- D. Store food for some plants

4. During a nature walk, grade 6 learners went around the school compound and uprooted a certain plant which had the type of root shown below.



Which one of the following plants does not have the same type of the root system?

- A. Tomato
- B. Beans
- C. Millet
- D. Carrot

5. The diagram below shows an invertebrate called snail.



The part marked X are called

- A. eyes
- B. tentacle
- C. antennae
- D. head.

6. Which one of the following is **not** a safety precaution to be observed when handling animals when they go to Nakuru National Park during Educational trip?

- A. Wear gloves and overcoats
- B. Touch young ones only when their mothers are not there
- C. Do not run when around animals
- D. Avoid dangerous animals

7. Nairobi School invited a clinical officer to their school to explain to grade 5 learners what they should do to avoid getting cholera. Which one of the following practices he did **not** tell the learners?

- A. Spraying the house and the toilet with an insecticide to kill flies
- B. Washing foods that are eaten raw and vegetables before cooking
- C. Practising proper sanitation and hygiene
- D. Boiling milk before drinking it

8. The diagram shows a word puzzle. Which of the following words can you identify from the puzzle below?

| | | | |
|---|---|---|---|
| L | G | A | A |
| M | I | U | B |
| C | O | C | P |
| A | C | U | E |
| I | E | D | N |

- A. DRIVER
- B. LICE
- C. MENTOR
- D. EYES

9. Mr. Matatu used old vehicles tyre to plant his flowers. Which method of waste management was he applying?

- A. Reusing
- B. Reducing
- C. Gardening
- D. Recycling

10. The diagram below shows a digital device.



The part marked **O** is known as

- A. Keyboard
- B. Mouse
- C. Monitor
- D. CPU

11. Given below are uses of acids **except**

- A. used in battery to produce electricity
- B. antacid tablets are used to relieve heartburn
- C. fruit are used to enhance taste in drinks
- D. Lemons are used to add flavour in food

12. During a Science lesson the teacher mentioned the following before the learners;

(i) a screw

(ii) a wedge

(iii) a road winding up a hill

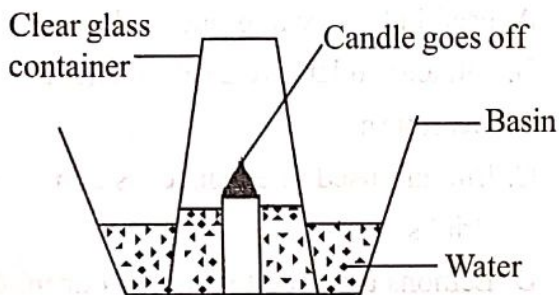
These are examples of

- A. levers
- B. slope
- C. pulleys
- D. ramp.

13. Which name is given to the phase of the moon shown below?



- A. Waxing gibbons
B. New moon
C. Waning crescent
D. Waxing crescent.
14. Grade 6 learners carried out an experiment as shown below. They wanted to investigate one of the uses of air in the atmosphere.

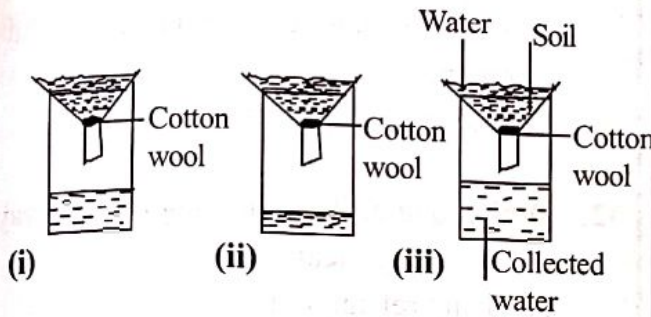


- Which of the following was **not** observed by the learners?
- A. The candle went off immediately
B. Level of water in the basin dropped
C. Level of water in the glass rose by 20%
D. The candle went off when oxygen had been used
15. Which one of the following is **not** an advantage of friction?
- A. Writing on blackboard in a class
B. Lighting matches in the kitchen
C. Swimming in a swimming pool
D. Skating on the road

16. Which one of the following is not important of mulching?
- A. Conserves moisture
B. Controls weeds
C. Controls pests
D. Controls soil erosion
17. For fast decomposition of compost manure, it has to be turned. What is the main reason for turning the compost manure?
- A. To allow free circulation of air
B. To add bacteria
C. To add nutrients
D. To keep it moist
18. Grade four learners planted seeds in a container. After germination they added water that flooded the containers. They later placed the container outside the classroom. They noted that the seedlings died after a few days. What is the main reason why the seedlings died?

- A. The sun made water very hot that killed seedlings
B. They did not make the draining holes at the bottom of the containers
C. They added a lot of water that made seedlings to die
D. They would have used drip irrigation

19. A group of learners set up an experiment in which they added equal amount of water to soil samples. (i), (ii) and (iii). Their result were as shown below.



From the results above, soil samples (i), (ii) and (iii) are **most** likely to be

| | (i) | (ii) | (iii) |
|----|------|------|-------|
| A. | Clay | loam | sand |
| B. | Loam | clay | sand |
| C. | Sand | clay | loam |
| D. | Loam | sand | clay |

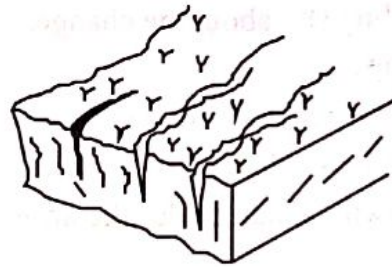
20. Given below are crops that produce unpleasant smell used to repel small wild animals which damage our crops in the farm except one. Which one is it?

- A. Euphorbia
- B. Mole plant
- C. Kiwi
- D. Daffodils

21. Which one of the following pairs of climbers are grown from seeds?

- A. Berries and passion
- B. Passion and gooseberry
- C. Grape and kiwi
- D. Kiwi and passion

22. The type of soil erosion shown below can be **best** controlled by

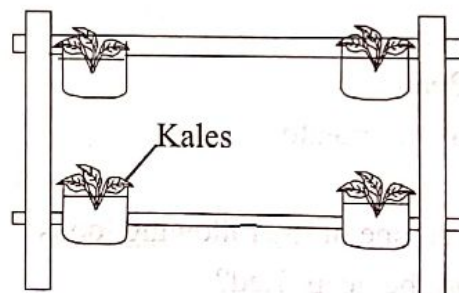


- A. cover cropping
- B. constructing gabions
- C. mulching
- D. contour farming.

23. Which one of the following is **not** an indigenous vegetable crop?

- A. Yam leaves
- B. Spider weed
- C. Black nightshade
- D. Pumpkin


24. The diagram below shows



- A. an innovative ornamental gardening
- B. a horizontal innovative garden
- C. a moisture bed gardening
- D. a vertical innovative garden.

25. Given below are gardening practices that can be used to conserve water in places which receive little rainfall except one. Which one is it?

- A. Flat bed
- B. Sunken bed
- C. Shallow pit
- D. Moisture bed gardening

26. Which one of the following is **not** a physical change in pre-adolescent boy?
- Feeling shy about the changes in their bodies.
 - Increase in weight and height
 - Chest and shoulders broaden
 - Growth of hair under the arms
27. A good advertisement should have the following **except**
- attractive pictures and colours
 - shopping list for all items
 - price of items
 - location where the items can be found.
28. Carbohydrates are energy giving foods. They give us energy to work and play. Which one of the following is not a source of carbohydrates?
- Maize
 - Rice
 - Beans
 - Sweet potato
29. Which one of the following foods cannot be deep fried?
- Termites
 - Bacon
 - Chicken
 - Fish
30. The care labelled symbol below means that
- 
- use a hot iron
 - do not iron
 - use a warm iron
 - use a cool iron
31. The following are causes of non-communicable diseases and disorders **except** one. Which one is it?
- Excess intake of salt
 - Lack of regular physical exercise
 - Use of cosmetics containing harmful chemicals
 - Eating enough balanced diet
32. Which one of the following is **not** a way of preserving meal?
- Using refrigerators
 - Sun drying
 - Using sugar
 - Smoking
33. Which one of the following is a common communicable disease?
- Malaria
 - Cholera
 - HIV and AIDS
 - Sleeping sickness
34. Girls who are undergoing adolescence stage should eat foods rich in iron because
- they are growing very fast
 - they undergo menstruation
 - of physical changes
 - of emotionl change
35. Grade 6 learners carried packed food for their lunch as shown below;
- Njoroge:** Githeri and porridge
- Anyango:** sausage and orange
- Wafula:** chips, banana and beans
- Hassan:** matoke, porridge and beans
- Who among the four pupils carried balanced diet?
- Anyango
 - Wafula
 - Hassan
 - Njoroge

36. The following statements related to health related fitness skills. Which one of the following statements explains the meaning of agility

- A. The ability to distribute weight evenly to enable a person to walk or carry something steadily.
- B. It is ability to move all or some parts of the body quickly.
- C. It is the ability to quickly change position and direction of the body while in control.
- D. It is the time that one takes to respond to a given command.

37. A type of rope skipping skills where one skips a rope with the toe touching and heels apart is called

- A. straddle and straddle cross
- B. heel taps
- C. swing kicks
- D. wounded duck.

38. Grade six teacher asked pupils to say the importance of physical and health activities. Four learners gave the following answers.

- (i) **Delilah:** *You become strong and tired*
- (ii) **Samuel:** *You become weak and healthy*
- (iii) **Trishana:** *You become weak and old*
- (iv) **Spencer:** *You become strong and healthy*

Who gave the **correct** answer?

- A. Delilah
- B. Samuel
- C. Trishana
- D. Spencer

39. The following are techniques used in finishing a race. Which one is **not**?

- A. Chest front finish
- B. Run through technique
- C. Shoulder shrug technique
- D. Drop finish technique

40. Which one of the following is the **best** way of calling runners to get set?

- A. Into your mark!
- B. On your mark!
- C. Get ready!
- D. Go!

41. A grade six teacher guided learner in performing the following activities

- (i) *crab walk*
- (ii) *hand walk*
- (iii) *head stand*

Which component of physical fitness was developed

- A. reaction time
- B. speed
- C. balance
- D. strength.

42. Swimmers are advised to learn the side stroke of swimming. What is the **main** importance?

- A. Require less energy
- B. It is more enjoyable
- C. Help in saving lives
- D. It is the easiest

43. The following signs and symptoms describe a sport injury;

- i) *pain*
- ii) *swelling*
- iii) *discolouration*

Which sport injury is described above

- A. bruise
- B. burn
- C. blister
- D. cut.

44. Winnie was rope-jumping and landing with her toes and knees turned inwards. This method is called

- A. face to face technique
- B. wounded duck technique
- C. side and side technique
- D. swing kick technique.

45. The following are steps during scissors technique but not in their correct order.

- i) *take off*
- ii) *landing*
- iii) *run*
- iv) *flight*

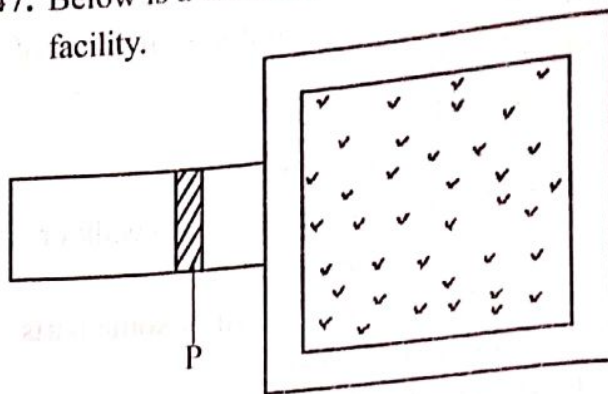
Which of the following show the correct order?

- A. iii, i, iv, ii
- B. iii, iv, i, ii
- C. ii, iv, i, iii
- D. ii, i, iv, iii

46. The following are all methods of preserving food in our communities **except**

- A. salting
- B. canning
- C. warming
- D. smoking.

47. Below is a drawing of a long jump facility.



Name the part labelled P

- A. take off board
- B. landing pit
- C. run way
- D. lane.

48. When do you score a full rounder in a game of rounders?

- A. Baller reaches 4th post in one hit
- B. Baller reaches 3rd post in one hit
- C. Baller reaches 2nd post in one hit
- D. Baller reaches 4th post in two hits

49. A softball player was seen sliding during softball game. The following are reasons for sliding **except**

- A. get to the base quickly to avoid tag
- B. to get tagged
- C. to make diversion
- D. prevent injury.

50. Kelvin is defending in the game of kabaddi. He can use any of the following skills **except**

- A. quick run
- B. ankle catch
- C. wrist catch
- D. ankle hold.



Pinpoint Publishers
Always to the point
GRADE 6

KPSEA REVEALED

SUPER PREDICTION

209503

KENYA PRIMARY SCHOOL EDUCATION ASSESSMENT

— MATHEMATICS — 2022

1hr 20minutes

READ THESE INSTRUCTIONS CAREFULLY

1. You have been given this question booklet and a separate answer sheet. The question paper contains 30 questions.
2. Do any necessary rough work in this paper.
3. When you have chosen your answer, mark it on the **ANSWER SHEET**, not in this question paper.

HOW TO USE THE ANSWER SHEET

4. Use an ordinary pencil only.
5. Confirm that the answersheet you have been provided with has the following:

YOUR ASSESSMENT NUMBER
YOUR NAME
NAME OF YOUR SCHOOL
NAME OF SUBJECT

6. Do not make any marks outside the boxes.
7. Keep the sheet as clean as possible and do not fold it.
8. For each Questions 1 - 30, four choices are given. The choices are lettered A, B, C and D in each case only **ONE** of the four answers is correct. Choose the **correct** answer from the choice.
9. On the answer sheet, the correct answer is to be shown by drawing a dark line inside the box in which the letter you have chosen is written.

Example

In the question booklet:

19. What is the value of 492?
 A. 7
 B. 2.401
 C. 2101
 D. 98.

The correct answer is C (2401).

On the Answer Sheet:

19. [A] [B] [C] [D]

In the set of boxes numbered 19, draw a **dark line** inside the box in which the letter you have chosen is written

10. Your **dark line** **MUST** be within the box.
11. For each question, **ONLY ONE** box is to be marked in each set of four boxes.

This question paper consists of 8 printed pages



Pinpoint Publishers
Always to the point

TURN OVER

Email: info@pinpointpublishers.co.ke

Super prediction 2022

Mathematics Grade 6

209503

503

- Which one of the following number is 2346802 in words?
 - A. Two million three hundred and forty six thousand eight hundred and two
 - B. Two million three hundred and six thousand eight hundred and twenty
 - C. Twenty three and forty six thousand eight hundred and two.
 - D. Two hundred and thirty four thousand six hundred and eighty and two.

- 2. What is the least number that can be divided by 6, 8 and 12 without a remainder?
 - A. 2
 - B. 36
 - C. 24
 - D. 12

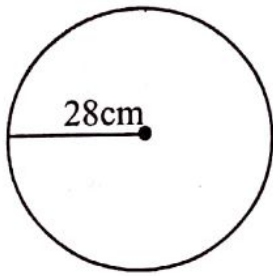
- 3. A farmer harvested 36428bags of maize and 24815 bags of beans. By rounding off the number of bags of both beans and maize to the nearest thousands how many bags did he harvest?
 - A. 61243
 - B. 11613
 - C. 36000
 - D. 61000

- 4. What is the value of $36 + 18 \div 3 - 2 \times 4$?
 - A. 34
 - B. 10
 - C. 64
 - D. 36

5. A company employed 75 workers. Each worker is paid sh 350 per day. How much money does the company spend on paying workers daily?
 A. Sh. 435 B. Sh. 275
 C. Sh. 26250 D. Sh. 26150
6. What is the square root of $1\frac{9}{16}$?
 A. $1\frac{3}{4}$
 B. $2\frac{113}{256}$
 C. $1\frac{1}{4}$
 D. $\frac{25}{16}$
7. Kaimo bought 12.5kg of meat. He gave his mother 3.125kg of meat. What was the mass of the meat he was left with?
 A. 9.425kg
 B. 8.425kg
 C. 9.375kg
 D. 8.375kg
8. What is the value of $4\frac{2}{3} + 2\frac{1}{4}$?
 A. $6\frac{11}{12}$ B. $6\frac{3}{7}$
 C. $2\frac{3}{12}$ D. $6\frac{3}{12}$
9. In a park there were 48763 antelopes. During a drought season 5946 died. How many antelopes were left in the farm?
 A. 42817
 B. 54709
 C. 54609
 D. 43223
10. Arrange the following decimals from the smallest to the largest
 0.6, 1.35, 0.27, 0.17, 1.4
 A. 0.27, 0.6, 0.71, 1.35, 1.4
 B. 0.6, 0.27, 0.71, 1.35, 1.4
 C. 1.4, 1.35, 0.71, 0.6, 0.27
 D. 0.27, 0.71, 0.6, 1.35, 1.4
11. Express $\frac{1}{4}$ as a percentage
 A. 40%
 B. 50%
 C. $\frac{1}{4}\%$
 D. 25%



12. A bicycle wheel has a radius of 28cm. What is the circumference of the bicycle?

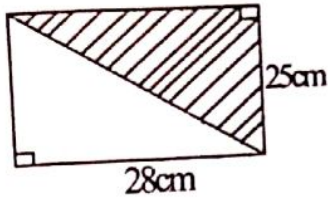


- A. 88cm
 B. 176cm
 C. 56cm
 D. 308cm
13. A lorry carried 2t 485kg of maize on the first trip and 1t 750g of beans on the second trip. What was the total mass carried by the lorry?
- A. 3t 1235kg
 B. 4t 1235kg
 C. 4t 235kg
 D. 16t 35kg
14. Sikio left Kivo at 8: 30am. He arrived at Meta after 2 hours. At what time did he arrive in 24hour clock system?
- A. 10:30am
 B. 1030hrs
 C. 2230hrs
 D. 0630hrs
15. Onyiso bought a rabbit at sh 1200. He later sold it at sh 1500. What was his profit?
- A. Sh. 2700
 B. Sh. 1200
 C. Sh. 800
 D. Sh. 300

WORKING SPACE

(Faint, mostly illegible text from the reverse side of the page is visible through the paper.)

16. What is the area of the shaded part in the figure below?



- A. 350cm
B. 700cm²
C. 700cm
D. 350cm²
17. A tank when full had 125L 450ml. A family used 65L 128ml. How much water was left in the tank?
A. 190L 678ml
B. 60L 322ml
C. 60L 332ml
D. 59L 322ml
18. Kawira walks from home to school a distance of 3km. What distance does she cover in a day?
A. 300m
B. 600m
C. 30m
D. 60m
19. Round off 72.5897 to two decimal places.
A. 72.5900
B. 72.6
C. 72.00
D. 72.59
20. Achieng earns a salary of sh. 32000. After the tax deductions, she was left with sh. 28000. How much tax does she pay?
A. Sh. 60000
B. Sh. 8000
C. Sh. 4000
D. Sh. 14000

WORKING SPACE



21. What is the value of y in the equation $2y - 4 = 10$?


A. 7
B. 24
C. 12
D. 8

22. The table below shows travelling time from Nairobi to Mombasa.

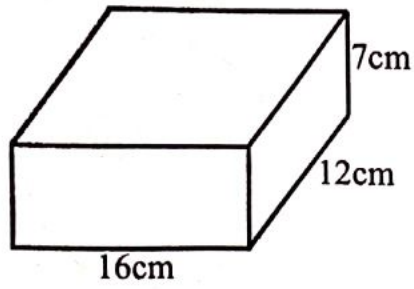
| Station | Arrival | Departure |
|----------|---------|-----------|
| Nairobi | 08:00 | 08:30 |
| Machakos | 12:00 | 12:30 |
| Arba | 13:20 | 13:50 |
| Mombasa | 15:20 | 15:50 |

23. How long did the bus take to travel from Machakos to Mombasa?
A. 6 hrs
B. 9hrs 15min
C. 18hrs
D. 9hrs 15min

WORKING SPACE



21. What is the volume of the figure below in cubic centimetres?



- A. 1344cm^2
- B. 1344cm^3
- C. 1344Cm
- D. 35cm

22. What is the value of y in the equation $2y \div 6 = 4$?

- A. 6
- B. 24
- C. 12
- D. 8

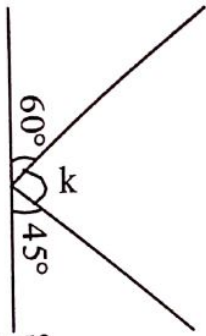
23. The table below shows traveling time table from Nairobi to Mombasa.

| Station | Arrival | Departure |
|----------|---------|-----------|
| Nairobi | _____ | 0600h |
| Machakos | 0830h | 0900h |
| Mtito | 1200h | 1215h |
| Andei | _____ | _____ |
| Mombasa | 1515h | _____ |

How long did the bus take to travel from Machakos to Mtito Andei??

- A. 6 hrs
- B. 9hrs 15min
- C. 18hrs
- D. 6hrs 15min

24. What is the value of the angle marked k ? -7-



- A. 75°
- B. 105°
- C. 45°
- D. 60

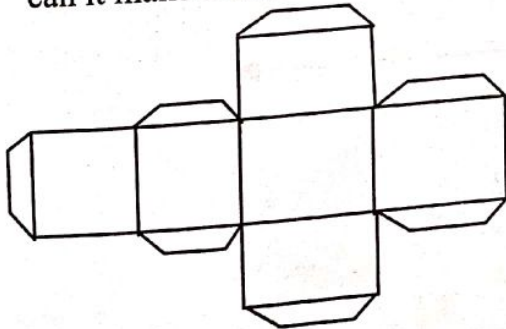
25. A school had 425 pupil. Each pupil was given a 200ml packet of milk. How many litres of milk was used by the school?

- A. 8500L
- B. 850L
- C. 85L
- D. 8.5L

26. What is the product of the faces and vertices of a closed cuboid?

- A. 48
- B. 72
- C. 14
- D. 18

27. The figure below is a net. Which figure can it make when folded?

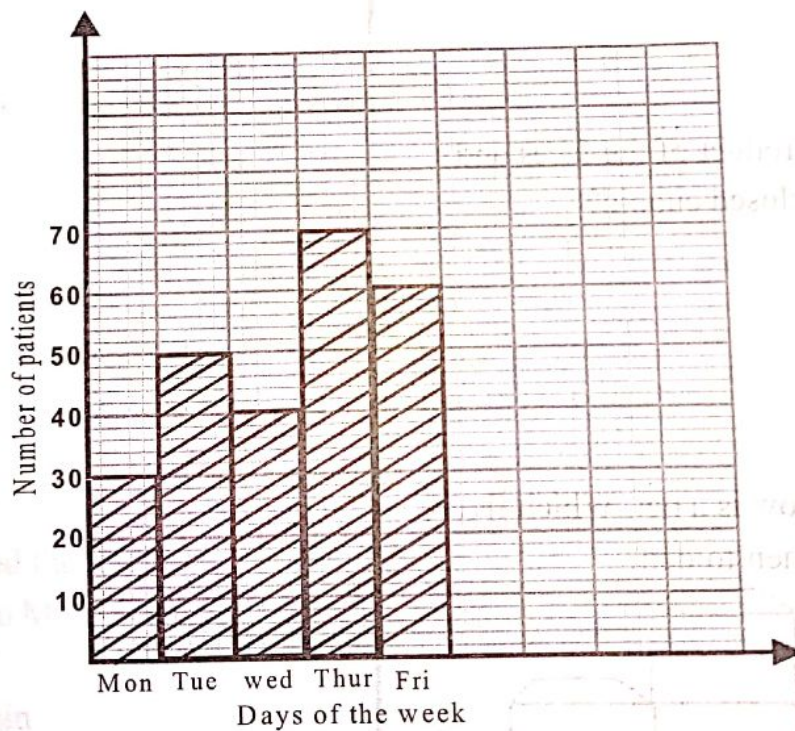


- A. closed cuboid
- B. triangular prism
- C. triangular based pyramid
- D. open cube.

WORKING SPACE

28. Mutua had sh. 1000. He wanted to buy a packet of maize flour, 1kg of sugar, a toy car and 1litre of cooking oil. The money was not enough. What would you advise him not to buy?
- A. Maize flour
 - B. Toy car
 - C. Sugar
 - D. Cooking oil
29. Alicia had 358 mangoes. She shared them equally among her eight friends. How many mangoes was she left with?
- A. 59
 - B. 4
 - C. 350
 - D. None.

30. The graph below show the number of patients who attended a hospital in one week.



How many people visited the hospital that week?

- A. 70
- B. 300
- C. 250
- D. 150



Pinpoint Publishers
Always to the point

KPSEA REVEALED

SUPER PREDICTION

Gredi ya 6 KENYA PRIMARY SCHOOL EDUCATION ASSESSMENT **209504**

— KISWAHILI LUGHA — 2022

Muda: Saa 1

MAAGIZO KWA WATAHANIWA (Soma maagizo yafuatayo kwa makini)

1. Umepewa kijitabu hiki cha kiswahili na karatasi ya kujibia. Kijitabu hiki kina maswali 30.
2. Ukiisha chagua jibu lako, lionyeshe katika **KARATASI YA MAJIBU** na wala sio katika kijitabu hiki cha maswali.
JINSI YA KUTUMIA KARATASI YA MAJIBU
3. Tumia penseli ya kawaida.
4. Hakikisha ya kwamba karatasi ya majibu uliyopewa imejumuisha yafuatayo:
**NAMBAYAKO YATATHMINI
JINA LAKO
JINASHULE YAKO
JINLA SOMO**
5. Usitie alama zozote nje ya visanduku.
6. Iweke safi karatasi yako ya majibu na usiikunje.
7. Kwa kila swali 1 - 30 umepewa majibu manne. Majibu hayo yameonyeshwa kwa herufi A, B, C, D. Ni jibu MOJA tu kati ya hayo manne ambalo ni sahihi. Chagua jibu sahihi.
8. Kwenye karatasi ya majibu, jibu sahihi lionyeshwe kwa kuchora kistari katika kisanduku chenye herufi uliyochagua kuwa ndilo jibu.

Mfano

Katika kijitabu cha maswali

28. Kanusha
Mzigo uliotea una vitabu.
A. Mzigo uliotea una vitabu.
B. Mzigo uliotea hauna vitabu.
C. Mzigo uliotea hujakuwa na vitabu.
D. Mzigo uliotea hauna vitabu.

Jibu sahihi ni D

Katika karatasi ya majibu:

28 [A] [B] [C] [D]

9. Chora kistari chako vizuri. Kistari chako kiwecheusi na kisijitokeze nje ya kisanduku.
10. Kwa kila swali, chora kistari katika kisanduku kimoja tu kati ya visanduku vinne ulivy

Kijitabu hiki cha maswali kina kurasa 8 zilizopigwa chapa.

Email: info@pinpointpublishers.co.ke



Pinpoint Publishers
Always to the point

Soma mazungumzo yafuatayo kisha ujibu maswali yafuatayo.

Munda: Habari za aduhuri Kalume?

Kalume: Njema sana rafiki yangu.

Muunda: umesikia habari za hivi punde kweli?

Kalume: (huku akionekana kushangaa) zipi?

Nini kimetendeka mwenzangu?

Muunda: Magaidi wamevamia duka kuu la

Malibuni na kulipua bomu.

Kalume: Maskini! Kuna manusura kweli?

Muunda: Inasemekana kuwa takribani watu mia moja walikuwa kwenye jengo hilo. Idadi kamili ya waathiriwa haijatangazwa, japo inahofiwa huenda wengi wao walikata kamba.

Kalume: Mola atusitiri na balaa hizi.

Muunda: Vikosi vya kupambana na ugaidi vinachunguza kisa hicho na nina imani kitasaidia kutegua kitendawili hicho na kuwatia mbaroni maadui hao.



1. Yaelekea vijana hawa wawili walikutana saa ngapi?

- A. Saa moja asubuhi B. Saa sita mchana
C. Saa kumi jioni D. Saa tatu usiku

2. Ni kweli kusema kuwa Kalume

- A. hakuamini maneno ya Muunda
B. alikasirishwa na maneno ya Muunda
C. Aliogopa maneno ya Muunda
D. Alishangazwa na habari alizopata

3. Ni watu wangapi wanaofikiriwa kuhusika katika mkasa huo?

- A. Karibu mia moja
B. Watu mia moja
C. Zaidi ya mia moja
D Chini ya mia moja

4. Ni nini maana ya nahau "kata kamba" kama ilivyotumika katika mazungumzo haya?

- A. Kulipuliwa
B. Kujeruhiwa
C. Kuvamiwa
D. Kufariki

5. Vijana hawa wanazungumza kuhusu mkasa wa

- A. moto
B. maporomoko
C. Ugaidi
D. mafuriko.

(3)
Swali la 6 hadi la 8

oma kifungu kisha ujibu maswali.



Wakati wa likizo ya muhula watatu niliwatembelea babu na nyanya kijijini kwetu. Kulikuwa na sherehe nyingi za kufunga mwaka. Babu alituchinja jogoo mkubwa tukamla kwa chapati na maziwa yaliyoganda. Nilimsaidia babu kuwapeleka ng'ombe malishoni na kuwapa maji.

Dada yangu Nekesa alimsaidia nyanya kuosha nyumba na kuvuna mtama na mahindi shambani. Kwakuwa kulikuwa na mvua nyepesi, usiku kulikuwa na baridi shadidi. Babu alituchomea mahindi kwenye moto nasi tukisikiliza hadhithi zake tamu tamu kama asali. Baada ya likizo tulirudi mjini huku tukiwa na furaha na kumwahidi nyanya kuwa tungerudi baadaye.

6. Kwa mujibu wa aya ya kwanza, ni kweli kusema kuwa

- A. msimulizi aliwatembelea babu na nyanya mwezi wa Disemba
- B. msimulizi aliwatembelea babu na nyanya shule zikiwa katika mapumziko mafupi
- C. msimulizi aliwatembelea babu na nyanya
- D. msimulizi alichinjiwa jogoo pekee.

7. Kifungu kinaonyesha kuwa katika msimu huo ambapo msimulizi aliwatembelea babu na nyanya

- A. kulikuwa na watoto wengi mashambani
- B. kulikuwa na mvua nyingi
- C. kulikuwa na sherehe nyingi
- D. kulikuwa na kazi nyingi sana

8. Kauli, tamu kama asali ni

- A. methali
- B. nahau
- C. tashbihi
- D. isitiara

Swali la 9 hadi la 12.

Soma mazungumzo yafuatayo kisha ujibu maswali.

- Shamsa:** Edwado umewahi kusikia kuhusu afya ya akili?
- Edwado:** Naam nimewahi kusikia baba yangu akitaja kuwa ni tatizo kubwa hasa siku za hivi karibuni
- Shamsa:** Unafikiria kiini chake huwa ni nini?
- Edwado:** Kukosa pesa.
- Shamsa:** (huku akicheka hadi machozi yakimtoka) Pesa sio kila kitu.
- Edwado:** Kwani ni nini na waswahili wanasema pesa ni sabuni ya roho?
- Shamsa:** Kuna sababu nyingine kama vile matatizo ya kinyumbani, unyanyasaji na hata mahitaji ya kijamii.
- Edwado:** Naona umekuwa mtaalam siku hizi.
- Shamsa:** Naam, lazima nijue mambo haya. Ushikwapo ... Ni vyema pia ujue mbinu za kuboresha afya ya akili la sivyo utajuta.

9. Kwa maoni yako, vijana hawa wawili wangeanza maongezi yao kwa

- A. Sababu zinazosababisha afya ya akili kuzorota
- B. Salamu na maakizi
- C. Maagano
- D. Kuulizana kuhusu kazi zao za shuleni

10. Tatizo la afya ya akili

- A. limewashinda madaktari
- B. limekuwa tatizo sugu tangu zamani
- C. limekuwa tatizo sugu hasa siku za hivi punde
- D. halijulikani sana na watu wengi.

11. Ni neno lipi halina maana sawa na neno "kiini" kama lilivyotumika kwenye kifungu?

- A. sababu
- B. kusudi
- C. chanzo
- D. kikwazo

12. Kamilisha methali, ushikwapo

- A. toroka
- B. washike pia
- C. shika shika
- D. shikamana.

Soma kifungu kisha ujibu maswali.



Mwalimu wetu wa Kiswahili Bi. Tamima alikuwa mwalimu mcheshi sana. Kila siku alipoingia darasani alitutegea vitendawili nasi tukavitegua. Vile vile, alitughania mashairi ya beti tano ama nne nne. Siku moja alituhadithia kisa cha kushangaza kuhusu sungura na fisi. Sungura alikuwa mjanja kiasi cha kumdanganya fisi akamuiza mama yake.

Mwalimu wetu alipenda sana kutufunza jinsi ya kuhifadhi mazingira. Alithamini usafi wa mwili na mazingira. Alitushauri pia kula lishe bora ili tuwe na afya njema na kujikinga dhidi ya magonjwa hatari kama kipindupindu na homa ya tumbo.

Mbali na hayo, alitufunza kuwa na heshima ya juu kwa wakubwa na wadogo. Alituisitizia kuwaamkua wakubwa kwa shikamoo daima dawamu tunapokutana nao. Hakupenda wanafunzi wayaharibu mazingira yao kwa kuwa aliamini kuwa mazingira yalikuwa muhimu si kwetu tu bali kwa kizazi hiki na kile cha siku za mbeleni.

13. Kulingana na aya ya kwanza ni kweli kusema kuwa

- A. Bi. Tamima alikuwa mwalimu mkali
- B. Bi. Tamima alikuwa mwalimu mchangamfu
- C. Bi. Tamima alikuwa mwalimu mnyamavu
- D. Bi. Tamima alikuwa mwalimu mpole

14. Bi. Tamima alisisitiza ulaji wa lishe bora ili

- A. kuzidi kuyathamini mazingira
- B. kuweza kukariri mashairi ya beti tano au nne
- C. kuweza kusimulia hadithi za wanyama
- D. kuwa na afya nzuri na kujikinga na maradhi

15. Shikamoo ni salamu za

- A. wazee kwa wazee
- B. vijana kwa watu wenye umri mkubwa
- C. wanafunzi kwa walimu
- D. wavulana kwa wasichana.

(6)

Swali la 16 hadi la 20

Soma kifungu kifuatacho. Kwa kila swali umepewa majibu manne. Chagua jibu lifaale zaidi kati ya yale uliyopewa.

Mwalimu 16 alituambia tukae kwenye makundi. Aliagiza kundi moja 17 kitabu cha mashairi na kuwaelekeza kukariri shairi huku wanafunzi wa makundi 18 wakitega masikio yao 19. Baadaye aliwataka wasichana wasome ubeti mmoja na wavulana wasome mwingine. Alitueleza kuwa shairi kama hilo la majibizano huitwa 20.

- | | | | |
|-----------------|--------------|-------------|-------------|
| 16. A. yetu | B. wetu | C. letu | D. wenu |
| 17. A. ichukue | B. yachukue | C. wachukue | D. lichukue |
| 18. A. nyingine | B. mengine | C. zingine | D. yengine |
| 19. A. jii | B. fyu | C. ndi | D. zii |
| 20. A. ngonjera | B. tathlitha | C. tarbia | D. takhmisa |

Swali la 21 hadi la 30. Chagua jibu sahihi.

21. Kanusha.

Bata wa jirani ameharibu mboga na matunda yetu.

- A. mabata wa majirani wameharibu mboga na matunda yetu
- B. bata wa jirani hajaharibu mboga na matunda yetu.
- C. bata wa jirani hakuharibu mboga na matunda yetu.
- D. bata wa jirani ataharibu mboga na matunda yetu.

22. Kitenzi "jenga" katika hali ya kutendana ni

- A. jengana
- B. jengesha
- C. jengea
- D. jengeana.

23. Andika wingi wa sentensi.

Mnazi wa baba umekatwa na mvuvi.

- A. minazi wa baba umekatwa na mvuvi
- B. mnazi ya baba imekatwa na wavuvi
- C. wanazi wa baba wamekatwa na wavuvi
- D. minazi ya kina baba imekatwa na wavuvi

24. Chagua kundi lenye vitenzi pekee.

- A. pika, imba, ruka.
- B. cheza, safi, lakini
- C. mwenyewe, zuri, kando ya
- D. huyu, changu, hodari

Maneno yapi yanayopatikana katika ngeli ya U-U pekee?

- A. ukuta, ukuni, uteo
- B. ufagio, uso, upanga
- C. ugali, ujanja, urafiki
- D. ukucha, umbu, ujanja

6. Msimu wa mvua nyingi huitwaje?

- A. Kipupwe
- B. Masika
- C. Kiangazi
- D. Kusi

27. Tegua kitendawili kifuatacho. Nikitabasamu naye anatabasamu

- A. Mwangwi
- B. Kivuli
- C. Kioo
- D. Maji

(7)

28. Taja kivumishi kimilikishi katika sentensi hii.

Ukuta wa nyumba yetu umebomoka.

- A. ukuta
- B. nyumba
- C. umebomoka
- D. wetu

29. Jibu la "masalkheri" ni

- A. binuru
- B. aheri
- C. nawe pia
- D. marahaba

30. Ni nini maana ya nahau "kula kalenda"?

- A. Kushikwa na polisi
- B. Kutoroka jela
- C. Kutaabika
- D. Kufungwa jela



KPSEA REVEALED

Pinpoint Publishers
Always to the point

SUPER PREDICTION

209501

GRADE SIX

KENYA PRIMARY SCHOOL EDUCATION ASSESSMENT

ENGLISH LANGUAGE — 2022

1 hour

READ THESE INSTRUCTIONS CAREFULLY

You have been given this question booklet and a separate answer sheet. The question booklet contains 30 questions

When you have chosen your answer, mark it on the ANSWER SHEET, not in this question booklet.

HOW TO USE THE ANSWER SHEET

Use an ordinary pencil only.

Confirm that the answer sheet provided with has the following:

YOUR ASSESSMENT NUMBER

YOUR NAME

NAME OF YOUR SCHOOL

NAME OF SUBJECT

Do not make any marks outside the boxes.

Keep your answer sheet as clean as possible and do not fold it.

For each of the questions 1 - 30, four choices are given. The answers are lettered A, B, C and D in each case. only ONE of the four choices is correct. Choose the correct answer.

On the answer sheet, the correct answer is to shown by drawing a dark line inside the box in which the letter you have chosen is written.

Example

In the Question booklet

15. Choose the alternative that best completes the sentence.

A huge _____ sat in the church waiting for the sermon to start.

A. crowd

B. group

C. committee

D. congregation

The correct answer is C

On the answer sheet.

In the set of boxes numbered 15, draw a dark line inside the box with the letter C printed in it as indicated below.

15

[A]

[B]

[C]

[D]

Your dark line MUST BE within the box.

For each question, ONLY ONE box is to be marked in each set of four boxes.

This question paper consists of 7 printed pages



Pinpoint Publishers
Always to the point

TURN OVER

Email: info@pinpointpublishers.co.ke

Super prediction 2022

501

English Grade 6

Read the dialogue below and answer question 1 to 5.

-2-



Dentist: Good morning Reuben.
Reuben: I am in great pain
Dentist: What is the problem
Reuben: I've got a tooth ache. I think it's in this tooth.
Dentist: Right, let me look at it. Open your mouth wide.
Reuben: It is really painful
Dentist: Does it hurt when I touch it?
Reuben: Ooh! Yes! It's very painful.
Dentist: You have some cavity in there. I'm going to have to fill that tooth. You must have been eating a lot of sweets.

Reuben: Okay. Can you do it now.
Dentist: No. You'll need to book an appointment with the receptionist on the way out. You should do it as soon as possible.
Reuben: Excuse me doctor Achieng. Can you have it pulled out instead?
Dentist: There is no need because, the bigger part of the tooth is fine
Reuben: Alright, let me book the appointment right away.
Dentist: And remember to clean your teeth atleast twice everyday.
Reuben: I threw away my tooth brush.
Dentist: (*Shocked*) You will have to buy a new one soonest possible
Reuben: I will. Thank you
Dentist: Welcome
Reuben: Good bye. Doctor Achieng.
Dentist: Good bye. Have a nice day.


- How was Reuben supposed to respond after being greeted?
A. Good aftrenoon too
B. Good morning too
C. Hello
D. I am fine too.
- What problem had made Reuben to seek service at the dentist?
A. His tooth was aching
B. His eyes were aching
C. He had broken his hand
D. His gum was aching.
- What did the dentist forget to say after Reuben explained his problem?
A. Sorry
B. Pardon
C. Thank you
D. Lucky you.
- What led to Reuben's tooth aching?
A. The tooth was too big
B. Reuben brushed twice a day
C. Reuben had thrown away his tooth brush
D. The dentist shook the tooth.
- What could have the dentist told Reuben as he was leaving?
A. See you soon
B. The pain will be over
C. Next time brush
D. Wish you quick recovery.

Read the passage below and answer questions 6 to 9.

Kageni was a thirteen year old girl from Siloi Village. She was not a talkative girl as she had the problem of stammering. There was a naughty boy named Bunny in her class who never used to leave a chance of making fun of her.

The school teachers were trying to get her out of her shell by trying to make her more interactive.

Though Bunny kept quiet in front of teachers, once they were gone, he immediately teased Kageni.



Kageni would be very **upset** and started crying.

Later one day, she even asked her mother if she could stop going to school. Her mother was deeply hurt since this was the scene for 3 to 4 days every week. As usual she consoled her, promising that the next day would be fine and that nothing wrong would happen.

It was a bright sunny morning when the Mathematics lesson was going on. Bunny was creating a lot of disturbance even after a couple of warnings. He wasn't paying attention to the teacher. The teacher got irritated and called him to solve a question on the board. Bunny hardly knew the way to solve it. The teacher humiliated him and sent him out of the class.

Kageni took that opportunity to talk to Bunny after class. Bunny seeing Kageni coming towards him, bent his head down in shame. Kageni asked, "want to learn multiplication?". Bunny was shocked, "Yes, but why do you want to help me?" Sensing the hopelessness, Kageni said "because I too need help from you. We can solve Mathematics questions together and you shall start treating me as your friend and not tease me in front of others. It is a win - win for both of us."

Bunny happily agreed and apologized for his earlier behaviour. From then on, Bunny never teased Kageni and they remained friends for a long time. Bunny's problem-solving skills improved after working with Kageni and he too was appreciated for his better performance in the monthly exams by his teachers.

6. What made Kageni to be a less talkative girl?

- A. She was a very young girl
- B. She was a stammerer
- C. She feared Bunny
- D. She never liked school.

7. What punishment was Bunny given for causing disturbance in class?

- A. He was sent home
- B. He was canned
- C. He was to solve a problem
- D. He was sent outside the class

8. From the below words, which one can be used in place of **upset**?

- A. Disturb
- B. Dismay
- C. Excited
- D. Bothered.

9. What shows that Bunny really needed help?

- A. He was sent out of class
- B. He had mocked Kageni
- C. He was helpless
- D. He improved in Mathematics.

Read the passage below and answer questions 10 to 12.

Timothy liked to dress up in his father's clothes. One day, when he was wearing his father's shoes and his father's tie, a man came to the door.

"May I speak to Mister Kipkoech?" the man asked

"I am Mister Kipkoech," Timothy answered him in his best deepest most grown-up voice.

"Good afternoon Mister Kipkoech," the man said

"I am here to collect the rent."

"What is rent?" Timothy asked.

"That is the money that you pay to live here every month," the man answered.

"What if I don't have money?" asked Timothy.

"Then you and your family will have to move out," the man told him wearing a serious face.

A bit shaken and in a low voice Timothy said, "Oh! Then I had better go get my father! This doesn't look good."



10. Which two things did Timothy like wearing from his father?

- A. Jacket and shoes
- B. Gumboots and cap
- C. Shoes and tie
- D. Sweater and sandals


11. What was the visitor looking for from Timothy's father?

- A. To borrow his car
- B. To ask for rent
- C. To ask for help
- D. To collect his debt

12. Choose the best title for the passage

- A. A Confused Boy
- B. Payment Demands
- C. A very Close Shave
- D. Really Big Shoes to Fill

Read the passage below and answer questions 13 to 15.



Nairobi, Kenya's capital city produces tons of solid waste with plastic making to be the most. Poor waste management coupled with rising urban pressure has worsened environmental protection of the waste generated by the city dwellers. Some of it is recycled, reused or

transformed into a form which can bring economical gain. The city dwellers have made conscious effort to keep with the Nairobi County Government in managing the waste produced. They have partnered with various companies to help in waste management. A different company which uses plastics to develop alternative and more affordable building materials has offered to issue many lorries which will collect garbage from one estate to another. It has also trained many youths in technical skills which has offered employment at their sites.

The county government has been able to cut down the cost of constructing pavements by using recycled plastics which are found to be pocket friendly besides their beauty and durability.

Raw materials for the construction of pavements is sourced from post-industrial process, plastic waste from hotels and offices. Schools have never been left behind in provision of waste as a raw material.

Different partnerships have been put in place to join hands to keep the environment clean and mitigate climate change. Everyone has a proactive approach that calls for designing products to reduce waste, using products and materials for as long as possible and recycling end-of-life products back into the economy.

- 13. What kind of waste is majorly produced in Nairobi?
 - A. Dangerous waste
 - B. Electronic waste
 - C. Solid waste
 - D. Biodegradable waste

- 14. Which of the below in **not** a way of waste management?
 - A. Garbage collection
 - B. Re - using
 - C. Transformation
 - D. Recycling

- 15. How useful has plastic waste been to the Nairobi County Government?
 - A. Making building materials
 - B. Making school materials
 - C. Making industrial products
 - D. Making pavement materials.

Fill in the broken passage below to answer questions 16 to 20.

If you are the 16 one who feels uncomfortable while speaking in front of the entire class, then you 17 start by practising alone at home. Take out a random book and start reading aloud. It is best if you do so 18 of a mirror.

This is because you will be able to see your own expressions clearly. This allows one to make them 19. If one knows what will be taught in the next class, then take out that piece of 20 and start reading loud before, so that you can become perfect at it.

- 16. A. courageous B. shy C. lucky D. confused
- 17. A. can B. will C. shall D. must
- 18. A. in front B. in front C. behind D. next to
- 19. A. good B. better C. worse D. relevant
- 20. A. write B. writing C. written D. writing

For questions 21 and 22, choose the alternative that means the opposite to the underlined word.

- 21. The workers took time to construct a wide bridge.
 - A. big
 - B. aged
 - C. narrow
 - D. petite
- 22. My mother threw away the fresh bunch of kales.
 - A. stale
 - B. rotten
 - C. brand new
 - D. latest

Complete the below blank space with the correct collective noun

- 23. A _____ of ships docked at the Mombasa port yesternight.
 - A. flock
 - B. swarm
 - C. company
 - D. fleet
- 24. The rich man bought a _____ of puppies.
 - A. bouquet
 - B. herd
 - C. litter
 - D. gaggle

In questions 25 and 26, complete the sentences with the correct words.

25. Have you seen the new _____ in our town?
- A. musical
 - B. musician
 - C. music
 - D. musicality

26. During his _____, my grandfather was gifted a big pick-up truck.
- A. retiring
 - B. retiree
 - C. retire
 - D. retirement

For question 27, fill the blank space with the correct word.

27. We all agreed that we _____ visit the orphanage over the weekend.
- A. shall
 - B. could
 - C. will
 - D. should.

Use the correct adjective to complete the below sentence.

28. After receiving medication, I felt _____ for the rest of the day.
- A. good
 - B. better
 - C. okay
 - D. ill

For question 29, complete the given proverb correctly.

29. A bird in hand is better than two in the _____.
- A. forest
 - B. net
 - C. bush
 - D. cage

Choose the correctly spelt word.

30. _____
- A. fourth
 - B. alot
 - C. tommorrow
 - D. recieve



Pinpoint Publishers
Always to the point

KPSEA REVEALED

SUPER PREDICTION

Grade Six

209506

KENYA PRIMARY SCHOOL EDUCATION ASSESSMENT

CREATIVE ARTS & SOCIAL STUDIES – 2022

1hr 40mins

INSTRUCTIONS TO CANDIDATES (Please read these instructions carefully)

You have been given this question booklet and a separate answer sheet. The question booklet contains 50 questions divided into two parts: **Part I and Part II**. Answer all the questions in part I. In part II there are three sections. Choose the section that you have prepared for and answer all the questions.

Do any necessary rough work in this booklet.

When you have chosen your answer, mark it on the **ANSWER SHEET**, not in this question paper.

HOW TO USE THE ANSWER SHEET

Use an ordinary pencil only.

Confirm that the answer sheet that you have been provided with has the following:

YOUR ASSESSMENT NUMBER

YOUR NAME

NAME OF YOUR SCHOOL

NAME OF THE SUBJECT

Do not make any marks outside the boxes

Keep the sheet as clean as possible and do not fold it

For each Questions 1 - 50, four answers are given. The answers are lettered **A, B, C, D**. In each case, only **ONE** of the four choices is correct. Choose the **correct** answer from the choices.

On the answer sheet show the correct answer by drawing a **dark line** inside the box in which the letter you have chosen is written.

Example

In the question booklet

23. Which one is not a symbol of national unity?

A. Flag

B. Passport

C. Coat of arm

D. Public seal

The correct answer is "B"

On the answer sheet,

23 In the set of boxes numbered 23, draw a dark line inside the box with the letter B printed in it as indicated below.

[A] [B] [C] [D]

In the set of boxes numbered **11**, the box with letter **A** printed in it is marked. Your **dark line MUST BE** within the box.

For each question, **ONLY ONE** box is to be marked in each set of four boxes.



Pinpoint Publishers

Always to the point

This question paper consists of 12 printed pages

TURN OVER

Email: info@pinpointpublishers.co.ke

Super Prediction 2022

Creative arts & sst/cre Grade 6

PART 1: CREATIVE ARTS
SECTION A: ART AND CRAFT

1. You are to reuse leather for a class assignment. Which one of the following is **not** a recycled leather?
 - A. Old belts
 - B. Old bags
 - C. Torn shoes
 - D. Animal hides

2. The following materials are used in weaving **except**
 - A. soft fibre
 - B. water
 - C. cutting tool
 - D. soil.

3. The following are parts of a book jacket which one is **not**
 - A. front page
 - B. back page
 - C. flats
 - D. middle page

4. The craft of making 3D objects using different types of paper is known as
 - A. shaping
 - B. paper craft
 - C. montge
 - D. calligraphy.


5. Grade six learners of Hope Junior Academy were discussing their artworks and discovered some of the objects had different shapes and sizes. Identify the principle of art that relates to different shapes and sizes.
 - A. Balance
 - B. Proportion
 - C. Symmetry
 - D. Rhythm

6. The view in which one takes a photograph when the camera is above what is being photographed is known as
 - A. birds eye view
 - B. ground view
 - C. worus eye view
 - D. all side view

7. The darkness or lightness of colour on an object is called
 - A. proportion
 - B. balance
 - C. tonal value
 - D. space.

8. The techique of joining two or more pieces of leather using thongs for lacing when making an article is called?
 - A. lacing
 - B. thonging
 - C. tanning
 - D. weaving.

9. Otieno drew a still life composition of a cup and jug as shown below.



What was lacking in his drawing?

- A. Space
 - B. Proportion
 - C. Texture
 - D. Balance
-
10. Which of the following is not a primary colour?
 - A. Green
 - B. Red
 - C. Yellow
 - D. Blue

11. What do we call the four-count beat?
 A. Minim
 B. Crotchet
 C. Fumi-breve
 D. Quarter

12. What is a two part song?
 A. A song with two parts
 B. A song by two people
 C. A song with two verses
 D. A song sang in two voices

13. A song that talks about saying no to drugs is called
 A. topical song
 B. sacred song
 C. lullaby
 D. folk song.

14. Write the French rhythm names for the following.




- A. taa taa ta-te taa-aa taa-aa-aa-aa
 B. ta-te taa taa-aa taa taa-aa
 C. taa-aa taa ta-te taa-aa
 D. taa-aa-aa-aa ta-te taa taa-aa
15. What is the French rhythm name for the sem-breve?
 A. taa - aa
 B. taa-aa-aa-aa
 C. ta-te
 D. taa

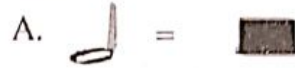
16. Breathing only at the end of a musical phrase is called
 A. gestures
 B. expressions
 C. phrasing
 D. exhaling.

17. What is pitch in music?
 A. Highness or lowness of a sound
 B. Loudness or softness of a sound
 C. The speed of music
 D. The smoothness of music

18. Rewrite using note symbols
 ta-te taa ta-te taa-aa.



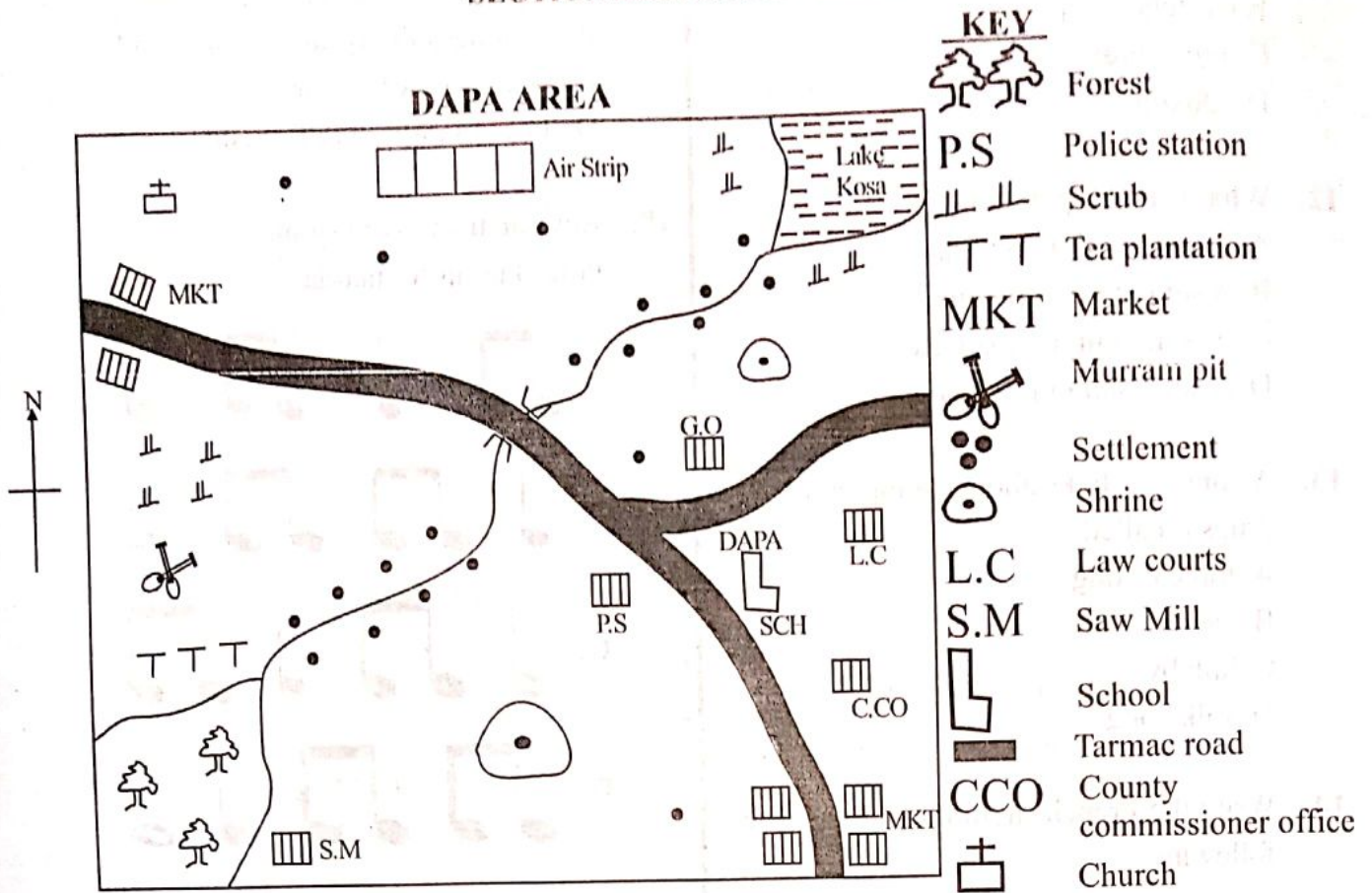
19. Which one is **correctly** matched with its vest



20. Join heard his mother singing to soothe the baby to sleep. Which sentence below describe how his mother sang?
 A. Fast and soft
 B. Slow and soft
 C. Fast and loud
 D. Slow and loud

4

PART II: SOCIAL STUDIES AND RELIGIOUS EDUCATION
SECTION A: SOCIAL STUDIES

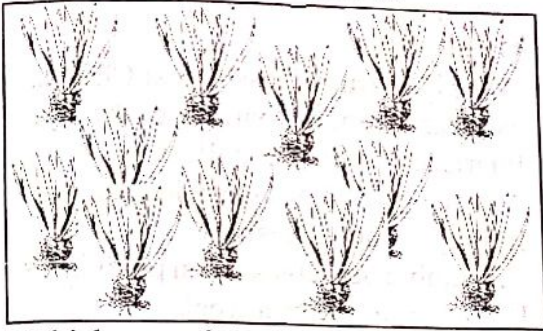


21. What is the direction of the church from Dapa school?
 A. North west
 B. South east
 C. South west
 D. North East
22. Grade six of Dapa school visited the quarry on the Western part of the map. They came across the natural vegetation. Which one of the following effects of the environment might have they come across due to mining activities?
 A. Land degradation
 B. Waterborne diseases
 C. Vegetation with stunted growth
 D. Opencast mining
23. The **main** factor influencing population distribution in Dapa area is
 A. climate
 B. human activities
 C. relief
 D. drainage
24. Dapa area is likely to be administered by a
 A. chief
 B. governor
 C. county commissioner
 D. police officer.
25. The **most** dominant religion practised in Dapa area is
 A. traditionalist B. islam
 C. christianity D. hinduism.
26. Three of the following statements are true about the vegetation shown in the diagram below **except**



- A. trees are of medium
- B. breathing roots
- C. umbrella shaped trees
- D. hardwood evergreen trees.

27. Pupils of Grade six in Mukao Primary School organized a field trip to a nearby farm. They came across a farm shown in the picture below.



Which one of the following is not a characteristic they learnt about the type of farming?

- A. Crops are grown in large piece of land.
 - B. Farming is practised in large tracts of land
 - C. production is high
 - D. require less capital.
28. The diagram below shows formation of a lake.



Which one of the following is **not** an example of the lake formation above?

- A. L. Ngozi
 - B. L. Shalla
 - C. L. Paradise
 - D. L. Kivu
29. The **main** fishing ground in Eastern Africa is
- A. L. Tanganyika
 - B. L. Victoria
 - C. L. Ngozi
 - D. L. Malawi.

-5-

30. Three of the following are factors that promote tourism in Eastern Africa. Which one is **not**?
- A. Games and sports
 - B. Price of commodities
 - C. Peace and stability
 - D. Cool climate

31. Who among the following officials of Buganda Kingdom managed the kingdom?

- A. Kabaka
- B. Katikiro
- C. Omwanika
- D. Omulamuzi

32. The **main** objective of the formation of East Africa community was to
- A. promote free movement of people
 - B. promote trade among member states
 - C. promote science, research and technology
 - D. have common tax system and other services.

33. Three of the following are responsibilities of Kenyan citizens. Which among them is **not**

- A. Obeying the law
- B. Owning property in the country
- C. Conserving the environment
- D. Observing Covid-19 protocols

34. Three of the following are examples of political rights. Which one is **not**?

- A. Right to vote
- B. Freedom of association
- C. Freedom of assembly
- D. Right to health care

35. Which one of the following is **not** a form of county government expenditure?

- A. Building rural roads
- B. Paying salaries for county workers
- C. Building schools
- D. Provide water and sewer service

SECTION B: RELIGIOUS EDUCATION
CHRISTIAN RELIGIOUS EDUCATION

36. Which one of the following instructions was given to Adam and Eve after being put in the garden of Eden?
A. To give birth and fill the earth
B. To stay as a husband
C. Not to listen to satan's temptation
D. Not to eat from the tree in the middle of the garden
37. When God made a covenant with Abraham. He ordered him to sacrifice some animals. Which one of the following was **not** one of the animals?
A. Three year old camel
B. Three year old goat
C. Three year old cow
D. Three year old ram
38. Which commandment did Joseph obey when he was living in the house of Potiphar in Egypt?
A. Do not kill
B. Do not covet
C. Do not commit adultery
D. Obey the sabbath day
39. Why did Moses flee to Median?
A. He had been sent by God
B. Had gone to look for a wife
C. He was called by God
D. He had killed an Egyptian
40. The covenant between the Israelites and God was sealed by
A. slaughtering a blemish lamb
B. sprinkling of blood
C. a pillar of thunder
D. a pillar of light.
41. Three of the following are achievements of king David. Which one is **not**?
A. Built the walls of Jerusalem temple
B. Made Jerusalem a religious centre of worship
C. Brought the ark of covenant to Jerusalem
D. United the tribes of Israel
42. Which one of the following miracles was performed by Elisha the prophet of God?
A. Getting water from a stone
B. Healing Naaman of leprosy
C. Changing water into wine
D. Multiplication of oil and flour.
43. Which one of the following lesson do we learn from the healing of the ten lepers?
A. Tolerant
B. Thankful
C. Peaceful
D. Prayerful
44. What is the **main** lesson that Christians can learn from the parable of the Pharisee and the tax collector?
A. The needy should be taken care of
B. Pray without ceasing
C. Humble ourselves when praying
D. Fast three times a week
45. Which one of the following books of the new testament is prophetic?
A. Romans
B. Revelation
C. Hebrew
D. Ephesians
46. Jesus wanted John the Baptist to baptize Him yet He was Holy because He wanted
A. fulfil the will of God
B. prove that he was a cousin to John
C. connect with other people
D. encourage others to be baptised
47. "**MENE, MENE, TEKEL UPHARSIN**" were the words that were written on the wall. According to events that happened in the context above teaches Christians to
A.. humble themselves
B. avoid being selfish
C. follow instruction
D. worship other gods
48. Where were Paul and Silas put in Prison?
A. Jerusalem B. Antioch
C. Philip D. Ephesus
49. Which one of the following is **not** a way of witnessing our faith in God?
A. Visiting the sick
B. Singing and praising God
C. Praying for the sick
D. Avoiding going to church
50. **Luke 22:40, "... when he arrived at the place, he said to them pray that you will not fall into temptation"** On which occasion did this take place?
A. Transfiguration B. Last supper
C. Temptation D. Arrest of Jesus

SECTION : B
ISLAMIC RELIGIOUS EDUCATION

36. On which day do muslim pray in large in numbers at one place
A. friday
B. IDDI
C. Thursday
D. Sunday
37. The Nisab for paying cattle is
A. 40
B. 30
C. 45
D. 35
38. Zakat is _____ pillar of Islam.
A. second
B. first
C. third
D. fourth
39. Which Surah teaches us to be good to orphans.
A. Kaw-thar
B. Maun
C. Quraish
D. Asr
40. Suratul Fiil has _____ verses.
A. five
B. four
C. six
D. three
41. Allah (sw) destroyed Abraha's army by
A. elephants
B. birds
C. cows
D. sheep
42. Which one does not destroy Wudhu
A. touching any private part with your hands
B. fainting
C. sleeping
D. eating
43. A person can do tayammum if there is
A. A river
B. milk
C. no water
D. water

- 7-
44. Which of the following item cannot be given as zakat?
A. Gold
B. Money
C. Agriculture
D. Furniture
45. How many years did the muslim spread Islam secretly
A. 5 years
B. 3 years
C. 23 years
D. 10 years
46. Which Surah is known as ummul-Quran?
A. kawthar
B. fatiha
C. quraysh
D. asr
47. Anything that the prophet did is referred to as
A. Hadith.
B. Sunah.
C. Muhaha.
D. Mustabaha.
48. We do not give Zakat on
A. gold
B. clothes
C. money
D. agricultural products
49. Suratul Al-Kauthar was revealed in
A. Madina
B. Makkah
C. Jerusalem
D. Iraq
50. The act which is halal is Islam, but most hated by Allah
A. Nikah
B. Monopoly
C. Talaq
D. Begging