

# **KPSEA REVEALED SERIES 7**

## **KPSEA SEVENTH TRIAL-22**

*Class of KPSEA 2024*

*The PDF Comprises of assessment Questions Meant to prepare the learners to prepare for the KPSEA National Exams set for October 2024.*

**For Marking Schemes:**

**Order online at: [www.kenyaeducators.co.ke](http://www.kenyaeducators.co.ke)**

**Or**

**Contact Kenya Educators Consultancy**

**0724333200**

**0795491185**

**0768321553**

Visit our Website [kenyaeducators.co.ke](http://kenyaeducators.co.ke) or Contact us on 0724333200 for CBC (pp1-grade 6), JSS (Grades 7 and 8) and Highschool levels (Forms 1-4) Exams, Lesson Notes and Schemes of Work, CBC report card books, lesson plans, Curriculum Designs and Official CBC Training Materials.

**KENYA EDUCATORS CONSULTANCY**

---

Compiled and distributed by Kenya Educators Consultancy- 0724333200

Website: [www.kenyaeducators.co.ke](http://www.kenyaeducators.co.ke)

#### INSTRUCTIONS TO CANDIDATES (Please read these instructions carefully)

1. You have been given this question booklet and a separate answer sheet. The question booklet contains 50 questions divided into two parts: **Part I and Part II**. Answer all the questions in part I. In part II there are three sections. Choose the section that you have prepared for and answer all the questions.
2. Do any necessary rough work in this booklet.
3. When you have chosen your answer, mark it on the **ANSWER SHEET**, not in this question paper.

#### HOW TO USE THE ANSWER SHEET

4. Use an ordinary pencil only.
5. Confirm that the answer sheet that you have been provided with has the following:

**YOUR ASSESSMENT NUMBER**

**YOUR NAME**

**NAME OF YOUR SCHOOL**

**NAME OF THE SUBJECT**

6. Do not make any marks outside the boxes
7. Keep the sheet as clean as possible and do not fold it
8. For each Questions 1 - 50, four answers are given. The answers are lettered **A, B, C, D**. In each case, only **ONE** of the four choices is correct. Choose the **correct** answer from the choices.
9. On the answer sheet show the correct answer by drawing a **dark line** inside the box in which the letter you have chosen is written.

#### **Example**

##### **In the question booklet**

23. Still life drawing involves drawing things

A. from imagination

B. that are stationary

C. that you remember

D. that you have never seen

The correct answer is "**B**"

##### **On the answer sheet.**

In the set of boxes numbered 23, draw a dark line inside the box with the letter B printed in it as indicated below.

[A]    [B]    [C]    [D]

In the set of boxes numbered 11, the box with letter A printed in it is marked

10. Your **dark line MUST BE** within the box.
11. For each question, **ONLY ONE** box is to be marked in each set of four boxes.



**PART 1: CREATIVE ARTS**  
**SECTION A: ART AND CRAFT**

1. Which principle of art is demonstrated in the following pictures?



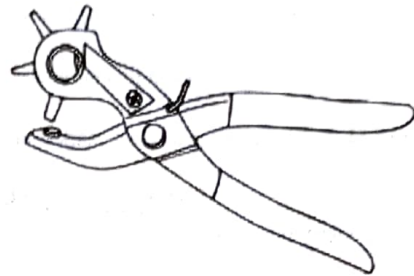
- A. Balance of form  
B. Proportion of form  
C. Texture  
D. Value
2. The art of making containers and functional item such as bowls, plates and cups using clay is  
A. coil technique  
B. template technique  
C. modelling  
D. posting.
3. Which of the following is **not** a paper craft technique used to make paper flowers?  
A. Folding                      B. Pinning  
C. Cutting                      D. Posting
4. Joy was taking a picture of a lion in a zoo. The position where she was standing is called  
A. background  
B. focus  
C. view point  
D. standing position.
5. Grade 6 learners brought the following materials during art lesson  
i) *Hard manilla paper*  
ii) *Scissors*  
iii) *Old pictures*  
iv) *Glue*  
v) *Green leaves.*

Which one of the following were the learners **likely** to make?

- A. Collage  
B. Still life composition  
C. Montage  
D. Smudging.

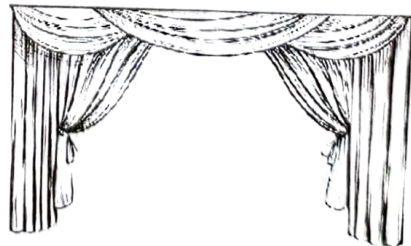
6. Timothy was thinking of a method in which he will use to decorate his pot. Which of the following methods will he **not** consider?  
A. Coiling  
B. Incising  
C. Embedding  
D. Painting

7. Study the picture below.



The tool in the picture above is used in;  
A. weaving  
B. cutting  
C. carving  
D. leather work.

8. A black paint was mixed with a red colour pigment. What was the result?  
A. The paint became 30% lighter.  
B. The paint turned red in colour.  
C. The paint turned 30% darker.  
D. There was no colour change.
9. A teacher displayed the picture below on the board.





The diagram above represents a  
A. studio.  
B. open window theatre.  
C. performing square.  
D. stage.


10. How do we use the facility in number 9 above?  
 A. Selling of puppets  
 B. Show casing talents  
 C. Performing puppetry  
 D. Educating the audience.
11. The following are values that we learn from the East African Community anthem. Which one is **not**?  
 A. Rich cultural heritage  
 B. Prosperity  
 C. Peace  
 D. Wisdom
12. Which part of a drum is used for carrying and holding a drum?  
 A. Resonator                      B. Membrane  
 C. Sling                              D. Sound box
13. A drum can be tuned by  
 A. storing it in a safe place  
 B. taking good care of it  
 C. tightening the laces  
 D. playing the drum in a moderate manner.
14. Which solfa syllable represent note 'e' of the descant recorder?  
 A. doh                                      B. reh  
 C. mih                                      D. fah
15. Which of the following differentiates the notes D and C of the descant recorder?  
 A. Close hole number two for note **D** and hole two and the thumb for note **C**.  
 B. Close hole two for note **C** and hole two and the thumb for note **D**.  
 C. Close hole one for note **D** and hole two for note **C**.  
 D. Close hole one and the thumb hole for both notes.


16. Study the song and choose the **correct** note symbols for it.

"Baa baa black sheep have you a-ny wool"

A. 

B. 

C. 


D. 

17. Jean saw children playing games. The children were also singing some songs as they played. What type of song were they **likely** to be singing?  
 A. Action songs  
 B. Folk songs  
 C. Lullaby  
 D. Singing games.
18. Which musical term describes highness and lowness of a song?  
 A. Tempo                                      B. Pitch  
 C. Dynamics                                      D. Harmony.
19. What is the French rythm partner of the following note symbols?



- A. taa taa taa taa ta-te ta-te taa-taa  
 B. ta -te ta -te taa ta - te  
 C. taa taa taa-aa taa ta-te taa  
 D. taa -aa ta - te taa- aa taa taa

20. 

- A.                       B. 
- C.                       D. 

**PART II: SOCIAL STUDIES AND  
RELIGIOUS EDUCATION  
SECTION A: SOCIAL STUDIES**

*Study the map of Eastern Africa below and answer questions 21 -24.*



21. The plateau marked **XXX** is
  - A. Merti
  - B. Jebel abyad
  - C. Fipa
  - D. Loriyu.
  
22. Which one of the following language groups used the route marked **H** during their migration?
  - A. Semites
  - B. Plain Nilotes
  - C. Bantus
  - D. River Lake Nilotes.
  
23. The river marked **K** is
  - A. Juba
  - B. Shibelli
  - C. Almar
  - D. Tana.
  
24. The Lake marked **Q** was formed when
  - A. lava blocked a river valley
  - B. water collected a long a line of weakness
  - C. the land sank
  - D. ice eroded the side of a mountain

25. Grade five learners in Kwameh Primary School visited a historic build environment near their locality. The curator explained to them the importance of taking care of the historic built environment. Which one of the following is the **main** reason he might have given?
  - A. Ensure they are safe and friendly.
  - B. Preserves our historic culture and values.
  - C. Makes them last long.
  - D. Attracts tourists.
  
26. Grade 6 learners of Ekenyoro Primary School went for an education trip in a nearby forest. They came across a vegetation with the following characteristics.
  - i) *Trees of medium height and scattered.*
  - ii) *Trees are umbrella-shape.*
  - iii) *Trees are deciduous.*
  - iv) *Tall grass was seen.*

The type of vegetation they might have seen is

- A. savanna grassland
  - B. mountain vegetation
  - C. tropical rainforest
  - D. semi-desert.
- 
27. Which one of the following is **not** a positive effect of migration and settlement of communities in Eastern Africa?
    - A. Increase in population.
    - B. Assimilation of some communities.
    - C. Increased trading activities.
    - D. Development of new languages.

28. Two or more age groups in traditional African societies formed
- A. language groups
  - B. age sets
  - C. a clans
  - D. a families.

29. The **main** way in which school collaborates with the community is
- A. donating land
  - B. preparing learners for future responsibility
  - C. learners cleaning the market
  - D. the school promoting the culture of the community.

30. The following are characteristics of a farming method.
- (i) *Crops are grown in plantation*
  - (ii) *Many animals are kept for meat and milk*
  - (iii) *Requires a lot of capital to start.*
- The method described above is **likely** to be

- A. small scale farming
- B. horticultural farming
- C. large scale farming
- D. subsistence farming.

31. The **main** factor influencing beef farming in Eastern Africa is
- A. climate
  - B. large tracts of land
  - C. availability of lands
  - D. government policy.

32. The following are reasons that make a person to lose their citizenship. Which one is **not**?
- A. Obtained citizenship by presenting false documents
  - B. A person is convicted of treason
  - C. A person becomes a citizen of another country
  - D. If a person reveals Kenyan secrets to an enemy of Kenya.

33. The symbol of national unity below is the



- A. flag
- B. public seal
- C. coat of arms
- D. passport.

34. The **most** wide spread means of communication in Kenya is
- A. the newspaper
  - B. radio
  - C. television
  - D. courier services.

35. The following are characteristics of a type of democracy in Kenya.
- (i) *People elect people who make decision on their behalf.*
  - (ii) *Elected people makes laws on their behalf.*
  - (iii) *Elected people presents the people's needs.*

- The type of democracy above is
- A. direct democracy
  - B. indirect democracy
  - C. liberal democracy
  - D. consensual democracy.

**SECTION B: RELIGIOUS EDUCATION**  
**CHRISTIAN RELIGIOUS EDUCATION**

36. The lesson that Christians can learn from the punishment of Adam and Eve is that
- human beings should have many children
  - people should offer animal services
  - people should avoid talking to animals
  - sin separates human beings from God
37. God tested Abraham's faith by
- changing his name from Abram to Abraham
  - telling him to sacrifice his only son
  - giving him a son by the name Isaac
  - asking him to move from Haran to unknown land.
38. The commandment of God that teaches Christians on the importance of leisure is
- tenth
  - fourth
  - fifth
  - second.
39. The book of Genesis was written by
- Mathew
  - Moses
  - Aaron
  - Samuel.
40. Who among the following Judges of Israel complained that he came from the weakest clan of Abiezer during his call?
- Samuel
  - Samson
  - Jephtah
  - Othwel
41. Which one of the following miracles was performed by Elisha?
- Raising the widows son.
  - Bringing fire from heaven.
  - Recovering the lost axe head.
  - Multiplying oil and flour for a poor widow.
42. What did Jacob demand from the man he wrestled with at Peniel?
- a wife
  - his name
  - blessings
  - go with him
43. Who among the following disciples is **not** among the first disciples to be called by Jesus?
- Mathew
  - John
  - James
  - Andrew.
44. Which one of the following was a reply to the second temptation of Jesus according to *(Luke 4:1-3)*
- The scripture says that human beings cannot live on bread alone but the word of God.
  - Worship the Lord your God and serve only Him.
  - Should not put the Lord your God into temptation.
  - Rejoice in the Lord always.
45. Which one of the following miracles teaches Christians that Jesus is a universal saviour?
- Healing of the Roman servant.
  - Healing of the paralytic man.
  - Raising of Jairus daughter.
  - Miraculous catch of fish.
46. Three of the following are ways in which the church helps the sick in society. Which one is **not**?
- Free medical camps.
  - Offering guidance and counselling.
  - Donating medical equipments.
  - Donating money for the sick.
47. Which one of the following parables teaches Christians on the growth of the kingdom of God?
- The sower
  - The mustard seed
  - The hidden treasure
  - The widow and unjust judge.
48. The leader of the early church was
- Paul
  - Stephen
  - Peter
  - James.
49. Early believers were first called Christians in the church at
- Ephesus
  - Antioch
  - Thessalonica
  - Roma.
50. Which one of the following is a gift of the Holy Spirit?
- Faithfulness.
  - Faith.
  - Kindness.
  - Goodness.

**SECTION : B**  
**ISLAMIC RELIGIOUS EDUCATION**

36. Which of the following surah's mention the earthquake?  
A. Dhuha  
B. Bayyinah  
C. Zilzala  
D. Takathur
37. Which surah tells us not to put all our time on acquiring wealth?  
A. Takathur                      B. Asr  
C. Zizalat                         D. Dhuha
38. **Muhajirun** are in  
A. people of makkah who migrated to madinah.  
B. Swahaban who lived in the mosque  
C. ones who knew the Quran by heart  
D. people of Madinah.
39. The word "NIFAS" means?  
A. Blood of child birth.  
B. Dead body.  
C. Monthly periods.  
D. A spice.
40. Muslims break fast by  
A. drinking juice  
B. eating dates  
C. eating nice  
D. drinking beer.
41. After their defeat at Badr, the quraish wanted to  
A. convert to Islam  
B. remove idols from the kaaba  
C. take revenge  
D. sign peace treaty with the Muslims.
42. Juma prayers have \_\_\_\_\_ adhans.  
A. 2 adhans  
B. 3 adhans  
C. 1 adhans  
D. 4 adhans
43. **Khamr** means  
A. river  
B. milk  
C. intoxicant  
D. haraam
44. Which pillar of Islam is mentioned eighty two times alongside swalat?  
A. Hajj  
B. Saun  
C. Zakat  
D. Shahada
45. Where do we find the prophet's mosque?  
A. Madinah  
B. Makkah  
C. Jaddah  
D. Tah
46. The habit of begging is **not** good because it  
A. teaches laziness  
B. encourages telling lies  
C. makes one poor  
D. is forbidden in Islam
47. The prophet said that whoever believes in Allah and the last day should not offend his  
A. neighbour  
B. father  
C. mother  
D. brother.
48. The word "**Tawakul**" means  
A. relying on Allah  
B. fear of allah  
C. truth in allah  
D. love of Allah.
49. Muslims are forbidden to come to the mosque with the smell of  
A. tomatoes  
B. garlic  
C. cabbage  
D. citrus fruits.
50. Sheikh Salim gave zakat to the following **except**  
A. orphans  
B. new converts  
C. Amileen  
D. way farers.



# KPSEA REVEALED

## Kenya Primary School Education Assessment

### GRADE SIX

— ENGLISH LANGUAGE — 2022

1 hour

#### READ THESE INSTRUCTIONS CAREFULLY

1. You have been given this question booklet and a separate answer sheet. The question booklet contains 30 questions
2. When you have chosen your answer, mark it on the **ANSWER SHEET**, not in this question booklet.

#### HOW TO USE THE ANSWER SHEET

3. Use an ordinary pencil only.
4. Confirm that the answer sheet provided with has the following:

**YOUR ASSESSMENT NUMBER**

**YOUR NAME**

**NAME OF YOUR SCHOOL**

**NAME OF SUBJECT**

5. Do not make any marks outside the boxes.
6. Keep your answer sheet as clean as possible and do not fold it.
7. For each of the questions 1 - 30, four choices are given. The answers are lettered A, B, C and D in each case, only **ONE** of the four choices is correct. Choose the **correct** answer.
8. On the answer sheet, the correct answer is to shown by drawing a **dark line** inside the box in which the letter you have chosen is written.

#### **Example**

##### **In the Question booklet**

15. Choose the alternative that **best** completes the sentence.

We are working hard in school, \_\_\_\_\_ ?

- A. are we
- B. isn't it
- C. aren't we
- D. don't we

The correct answer is C

##### **On the answer sheet.**

In the set of boxes numbered 15, draw a **dark line** inside the box with the letter C printed in it as indicated below.

**15** [A] [B] [C] [D]

9. Your dark line **MUST BE** within the box.
10. For each question, **ONLY ONE** box is to be marked in each set of four boxes.



Pinpoint Publishers  
*Always to the point*

**TURN OVER**

This question paper consists of 7 printed pages

Email: [info@pinpointpublishers.co.ke](mailto:info@pinpointpublishers.co.ke)

Read the dialogue below and answer question 1 to 5.

- Mwaura** : May I come in sir?  
**Teacher** : Yes, stand here. Why do you always come to school late?  
**Mwaura:** : Sir, it is the bus which makes me late.  
**Teacher** : What time do you leave home?  
**Mwaura** : I always leave home at a quarter to eight.  
**Teacher** : How far is your home from school?  
**Mwaura** : It is about 3 kilometers.  
**Teacher** : That is why, you get late. You leave your home very late.  
**Mwaura** : Sir, I take my breakfast at 7:30 a.m.  
**Teacher** : What time do you get up?  
**Mwaura** : I wake up at about 7:00 a.m.  
**Teacher:** : Don't you offer your prayers?  
**Mwaura** : Not regularly.  
**Teacher** : My dear, it is a bad habit. Change your routine. Always wake up early in the morning.  
**Mwaura** : You are right sir. From tomorrow I shall never be late again.  
**Teacher** : Good. Keep in mind to be regular and punctual always.  
**Mwaura** : Thank you very much for your good advice. Please may I sit down now, sir?  
**Teacher** : Oh yes, of course.



1. What did Mwaura fail to do before asking to get into class?
  - A. Greeting the teacher.
  - B. Cleaning his face.
  - C. Carrying his books.
  - D. Apologising.
  
2. What made Mwaura to always arrive late?
  - A. The bus.
  - B. Waking up late.
  - C. Not taking breakfast.
  - D. Sleeping late.
  
3. What did the teacher advise Mwaura to do every morning?
  - A. Take a jog
  - B. Offer a prayer
  - C. Make breakfast
  - D. Walk quickly.

4. What did the teacher advise Mwaura to keep in mind?
- Respect
  - Doubt
  - Breakfast
  - Punctuality
5. Which polite word did Mwaura use to the teacher after receiving the advice?
- Pardon me
  - Excuse me
  - Please
  - Sorry

**Read the passage below and answer question 6-10**

There lived a shepherd boy in the village of Kilundu. He used to graze a flock of sheep near a forest. It was not very far from his village. Besides his usual duty, he sang and played a flute. But the boy had a bad habit. He used to tell lies. He always made fun of villagers by shouting, "Wolf! Help! Wolf!" The villagers would think that the young boy might be in danger. They rushed to save him with sticks, pangas, spears and other tools. But they would find no wolf. Seeing the villagers, he laughed at them.

The villagers would be annoyed and walk back to their work. The liar shepherd made the same fun far and between. The villagers would come to his rescue but end up going home annoyed.

But one chilly day, a wolf came. The shepherd shouted at his highest voice. The villagers heard his shouting but did not stretch their helping hand thinking the boy was playing. The wolf also killed the shepherd. The poor unlucky shepherd boy lost his life because of lies.

So, it is told that telling lies is the root of all evils.



6. Where did the young shepherd boy live?
- In the forest
  - At home
  - In Kilundu Village
  - Near a big river.
7. What hobby did the shepherd boy enjoy during herding?
- Playing flute and singing
  - Playing hide and seek
  - Lying on the villagers
  - Fighting wolfs.
8. Which of the below weapons was never used by the villagers?
- Pangas
  - Guns
  - Sticks
  - Spears.
9. What feeling did the villagers have after finding that there was no wolf?
- Happy
  - Confused
  - Bored
  - Annoyed
10. **Flock** is to sheep while **pride** is to
- cattle
  - lions
  - birds
  - people

### MY GARDEN

My garden is in our home compound. It is near my study room. It forms a part of our homestead and adds to its beauty. At first we selected a big plot of fertile land. We cleared it of weeds, ploughed it deep and made the soil loose. We put enough manure on it and planted fruits, flowers and vegetables. We put a strong fence round the whole garden to keep off cattle and naughty children.



In a few years, the fruit plants grew up and bore many fruits. The flowers took a shorter time to grow and bring in flowers. Now various kinds of fruits and flowers grow in the garden. My mother also picks some vegetables from the garden whenever they are ready.

It requires care and protection. I myself work in it for one or two hours whenever I am free. My garden is a source of health, wealth and pleasure to me.

11. What made the planted items to grow so well?  
 A. They were planted by experts.  
 B. It rained heavily.  
 C. The land was fertile.  
 D. The garden is beautiful.
12. Why was a fence put around the garden?  
 A. To scare people.  
 B. To protect the homestead.  
 C. To prevent good children.  
 D. To keep off cattle.
13. How long does it take to work at the farm?  
 A. Two hours  
 B. One day  
 C. A week  
 D. Few minutes
14. What is one needed to do so that they can have good health?  
 A. Have a lot of wealth  
 B. Do regular physical exercise  
 C. Have a fresh body  
 D. Have strong muscles.
15. Which of the below is not grouped as a form of exercise?  
 A. Running  
 B. Swimming  
 C. Walking  
 D. Singing.

**Fill the broken passage below.**

Education removes darkness of ignorance. It is a process by \_\_\_ 16 \_\_\_ the minds developed by formal learning in school. It broadens a general outlook and creates \_\_\_ 17 \_\_\_ awareness of rights and responsibilities.

Education creates peace \_\_\_ 18 \_\_\_ people of different races. Education gives man a clear conscious view of \_\_\_ 19 \_\_\_ open opinion and judgement. It is a powerful means of adding human \_\_\_ 20 \_\_\_. Mwalimu Julius Nyerere once said, Education should promote humanity and brotherhood.”

- |     |            |               |           |                |
|-----|------------|---------------|-----------|----------------|
| 16. | A. who     | B. which      | C. where  | D. what        |
| 17. | A. an      | B. a          | C. over   | D. in          |
| 18. | A. between | B. eventhough | C. with   | D. among       |
| 19. | A. he's    | B. him        | C. his    | D. them        |
| 20. | A. loss    | B. beings     | C. values | D. distruction |

**GRAMMAR**

Choose the correct word to fill in the blank spaces in question 21 to 30.

21. The past few months, Covid-19 had spread nearly \_\_\_\_ in our country.
- A. everywhere  
B. everything  
C. everybody  
D. everyone
22. We suspect that \_\_\_\_ might have carried the tablet.
- A. something  
B. anything  
C. everything  
D. somebody

Complete the below sentences with the correct phrases.

23. The shopkeeper sells a \_\_\_\_ eggs at three hundred shillings.
- A. a pinch of  
B. a crate of  
C. a number of  
D. a glass of

Complete the sentence to future continuous tense.

24. We will \_\_\_\_ our exam this afternoon.
- A. begin  
B. began  
C. be beginning  
D. have began

Change the sentence from active to passive voice.

25. Benard was cutting the grass.
- A. The grass is being cut.  
B. The grass was being cut.  
C. Benard was being cut.  
D. The grass was cutting Benard

Complete the below similes.

26. The picture was as clear as
- A. food  
B. water  
C. glass  
D. crystal.

27. Delila and her sister are as alike as

- A. two peas
- B. twins
- C. double
- D. day.

**Complete the below sentences using the correct adverb.**

28. My uncle jogs \_\_\_ in the morning.

- A. loudly
- B. seldom
- C. regularly
- D. carefully.

29. I always keep my toys \_\_\_ in my room.

- A. towards
- B. happily
- C. neatly
- D. equally

**Use the correct alternative conjunction to complete the sentence.**

30. The suspect will \_\_\_ be fined or jailed if found guilty.

- A. neither
- B. either
- C. nor
- D. not only.

### MAAGIZO KWAWATAHANIWA(Soma maagizo yafuatayo kwa makini)

1. Umepewa kijitabu hiki cha kiswahili na karatasi ya kujibia. Kijitabu hiki kina maswali 30.
2. Ukiisha chagua jibu lako, lionyeshe katika **KARATASI YA MAJIBU** na wala sio katika kijitabu hiki cha maswali.

### JINSI YA KUTUMIA KARATASI YA MAJIBU

3. Tumia penseli ya kawaida.
4. Hakikisha ya kwamba karatasi ya majibu uliyopewa imejumuisha yafuatayo:  
**NAMBAYAKO YATATHMINI**  
**JINALAKO**  
**JINALASHULEYAKO**  
**JINALASOMO**
5. Usitie alama zozote nje ya visanduku.
6. Iweke safi karatasi yako ya majibu na usiikunje.
7. Kwa kila swali 1 - 30 umepewa majibu manne. Majibu hayo yameonyeshwa kwa herufi A, B, C, D. Ni jibu MOJA tu kati ya hayo manne ambalo ni sahihi. Chagua jibu sahihi.
8. Kwenye karatasi ya majibu, jibu sahihi lionyeshe kwa kuchora kistari katika kisanduku chenye herufi uliyochagua kuwa ndilo jibu.

### Mfano

#### Katika kijitabu cha maswali

28. Maneno katika jedwali hili yanastahili kuwa katika hali ya umoja pekee. Chagua jibu lenye maneno yasiyo katika hali ya umoja.

A	yai	dirisha	chandarua
B	uso	msusi	mwiko
C	ufagio	kiti	mswaki
D	kuni	vifutio	matunda

Jibu sahihi ni D

#### Katika karatasi ya majibu:

28 [A] [B] [C] [D]

9. Chora kistari chako vizuri. Kistari chako kiwecheusi na kisijitokeze nje ya kisanduku.
10. Kwa kila swali, chora kistari katika kisanduku kimoja tu kati ya visanduku vinne ulivyopew

Kijitabu hiki cha maswali kina kurasa 8 zilizopigwa chapa.

Email: [info@pinpointpublishers.co.ke](mailto:info@pinpointpublishers.co.ke)



**Swali la kwanza 1 hadi la 5**

**Soma kifungu kifuatacho kisha ujibu maswali yafuatayo.**



“Mwalimu mkuu, Bi. Salama, Naibu wake, Bwana Jeki, viranja na wanafunzi wenzangu, sabalkheri! Ni kweli kuwa siku njema huonekana asubuhi. Tunashukuru **Jalali** kwa siku hii ya leo. Mimi kama kiranja mkuu katika shule hii nawakaribisheni kwa muhula huu wa pili.

Kama mjuavyo, muhula wenyewe utakuwa mfupi sana. Shughuli nyingi zimepangiwa

wanafunzi licha ya ufupi huo wa muhula. Kwa mfano, Shindano la uandishi limepangwa kufanyika katika shule ya msingi ya Bidii iliyoko jijini Miandikoni. Sote tunatarajiwa kujiandaa vyema. Waandishi watahitajika kuandaa tungo kuhusu mada kama vile mahusiano, afya ya akili, misimu miongoni mwa nyinginezo.

Halikadhalika, tunatarajiwa kujiandaa vyema zaidi kwa siku yetu ya michezo hapa shuleni mwetu. Timu mbalimbali zimeorodheshwa na walimu pamoja na Makocha wetu. Ni wajibu wa kila mmoja kuhakikisha kuwa ametambua mchezo atakoushiriki siku hiyo. Ni wazi kama jua la mtikati kuwa michezo kama vile kandanda, hoki, jugwe na tenisi itakuwapo. Kwa maelezo zaidi, mfikie mwalimu wako au kiranja wa michezo shuleni. Atakufaa.

Ni mengi mno yaliyoandaliwa. Nmekutajia baadhi tu. Kwa kuwa muda umeyoyoma mno, naomba kukomea hapo. Nitwamwalika mwalimu wa zamu kwa matangazo zaidi.

Asanteni na muwe na muhula wenye ufanisi mkuu. Mungu awabariki.”

- |  |  |
|--|--|
| <p>1. Chagua jibu sahihi la salamu zilizotumiwa katika aya ya kwanza</p> <p>A. buriani dawa<br/>B. vyema<br/>C. akheri<br/>D. hatujambo</p>          | <p>3. Ipi si mada itakayoangaziwa katika shindano la uandishi?</p> <p>A. Afya ya akili<br/>B. Misimu<br/>C. Michezo<br/>D. Mahusiano</p>   |
| <p>2. Neno jingine lenye maana sawa na Jalali kama lilivyotumiwa kwenye kifungu ni</p> <p>A. Mungu<br/>B. binadamu<br/>C. mwalimu<br/>D. wavyele</p> | <p>4. Unafikiria michezo iliyotajwa kwenye kifungu ina umuhimu gani kwetu?</p> <p>A. Hupoteza muda wetu<br/>B. Huimarisha uwezo wa kiakili<br/>C. Humpatia mtu kazi ovyo ovyo maishani<br/>D. Huwapa walimu na wanafunzi siku ya kupumzika bila masomo darasani.</p> |

5. Mfano wa tashbihi iliyotumika kwenye kifungu ni?

- A. Mungu awabariki
- B. Hali kadhalika
- C. Siku njema huonekana asubuhi
- D. Wazi kama jua la mtikati

*Swali la 6 hadi 10*

**Soma mazungumzo haya kisha ujibu maswali yafuatayo.**

**Mwanga:** Hujambo rafiki yangu, Rosa?

**Rosa:** Sijambo Mwanga! Habari ya utokako?

**Mwanga:** Njema! Siku nyingi sijakuona tangu kuhamia kwako katika shule ya bweni.

**Rosa:** Nipo, mwenzangu wala siwezi kulalamika Mungu amenihifadhi. Juzi nimemkuta Bwana Maneno pale dukani pake Chifu wa eneo hili.

**Mwanga:** Bwana Maneno kwa sasa ndiye mwalimu wangu wa Kiswahili. Ametuelekeza vyema mno. Ametuelezea kwamba si vyema kuwataja wakubwa wetu bila ya kutumia maneno ya adabu na heshima.

**Rosa:** Hayo ni kweli kabisa, Mwanga. Ni vyema kutumia maneno kama vile Mheshimiwa, Rais, Mtawa au hata Kasisi miongoni mwa mengine.

**Mwanga:** Shukrani Rosa! Naona wewe pia umefunzwa haya.

**Rosa:** Naam, Mheshimiwa mara nyingi hutumiwa unapomtaja mbunge wa eneo fulani. Viongozi wa kidini pia wanayo majina ya vyeo vyao.

**Mwanga:** Unamaanisha nini, Rosa?

**Rosa:** Majina kama vile shehe na imamu hutumiwa miongoni mwa waislamu huku wakatoliki wakitumia jina “Padre” kumrejelea kasisi wao.

**Mwanga:** Asante sana mwandani wangu. Pamoja na maelezo yake, Bwana Maneno, nitazidi kuhakikisha kwamba nimezingatia na kudumisha heshima kwa wote, wakubwa kwa wadogo.

**Rosa:** Karibu! Siku zote kumbuka kwamba heshima si utumwa. (wanafumukana na kwenda kila mmoja njia yake)

6. Neno gani linalonyesha mahusiano katika mazungumzo?
- A. Bwana  
B. Mwenzangu  
C. Mbunge  
D. Chifu
8. Chagua orodha yenye maneno ya adabu na heshima
- A. padre, mheshimwa, mtoto, Imamu  
B. shehe, rais, bwana, mzazi  
C. mkulima, mwalimu, daktari, kocha  
D. bwana, Rais, mtawa, kasisi
7. “**Juzi**” nimemkuta Bwana Maneno. Neno juzi linamaanisha
- A. siku kabla ya jana  
B. siku baada ya leo  
C. siku iliyotangulia leo  
D. siku baada ya kesho
9. Ni vyema kuwaheshimu watu wote. Methali gani inaonyesha ukweli huu?
- A. Mtoto umleavyo ndivyo akuavyo  
B. Mtaka cha mvunguni sharti ainame  
C. Heshima si utumwa  
D. Haraka haraka haina baraka

**Swali la 10 hadi la 15**

***Soma makala haya kisha ujibu maswali yanayofuata.***

Mama Malaika alikuwa amesimama kando ya barabara. Mara mvua ikaanza kunyesha. Matone mazitomazito yakaanza kumnyea. Kwa bahati nzuri aliliona basi lililokuwa likielekea upande linapochomoza jua. Aliunyanyua mkono wake na kuliomba basi hilo kusimama.

Alipoingia ndani aliketi kwenye kiti kilichokuwa karibu na mwendeshaji. Walianza mazungumzo kuhusiana na mvua hiyo ya ghafla. Hapo ndipo utingo alimkumbusha kwamba ulikuwa ni msimu wa masika. Baadaye Mama Malaika alilipa nauli yake na kushuka gari hilo ili kwenda nyumbani kwake. Alijisemea kimoyomoyo kuwa hataucha mwavuli wake hadi majira ya masika yafike mwisho.

10. Mama Malaika alikuwa amesimama **kando ya** barabara. Maneno yaliyopigiwa kistari ni mfano wa  
A. kivumishi  
B. nomino  
C. kielezi  
D. kihusishi
11. Kulingana na kifungu, basi lilikuwa likielekea upande gani?  
A. Mashariki  
B. Magharibi  
C. Kusini  
D. Kaskazini
12. Msimu wa mvua nyingi kama ulivyoelezewa kwenye kifungu huitwa  
A. mchoo  
B. kipupwe  
C. masika  
D. kiangazi
13. Jina jingine lililotumiwa katika makala haya badala ya neno “**msimu**” ni  
A. masika  
B. hatujaelezewa  
C. mwavuli  
D. majira
14. Pesa anazolipa mtu ili kusafiri huitwa  
A. karo  
B. nauli  
C. zawadi  
D. kiingilio
15. .... aliketi kwenye kiti kilichokuwa karibu na mwendeshaji. Yaani,  
A. dereva  
B. utingo  
C. abiria  
D. rubani

*Swali la 16 hadi la 20.*


*Soma kifungu kifuatacho. Kila swali umepewa majibu manne. Chagua jibu lifaalo zaidi kati yale uliyopewa.*

Lugha ya Kiswahili \_\_\_16\_\_\_ aina \_\_\_17\_\_\_ za maneno. Baadhi ya aina hizi ni kama vile \_\_\_18\_\_\_ nomino, vivumishi, vitenzi na \_\_\_19\_\_\_. Ili kusanifisha lugha hii, \_\_\_20\_\_\_ nazo hutumiwa kama uti au nguzo muhimu za kuiboresha. Wengine husema kuwa, asiyejua ngeli hajui Kiswahili.


- |                            |            |                |           |
|----------------------------|------------|----------------|-----------|
| 16. A. kina                | B. zina    | C. lina        | D. ina    |
| 17. A. manane              | B. nane    | C. manne       | D. nne    |
| 18. A. :                   | B. ,       | C. ?           | D. .      |
| 19. A. vionyeshi           | B. vielezi | C. vitendawili | D. visawe |
| 20. A. alama za kuakifisha | B. vitabu  | C. ngeli       | D. kamusi |

**Swali la 21 hadi 30. Chagua jibu  
lifaalo zaidi ili kujibu swali**

21. Chagua sentensi inayoonyesha wingi wa **Karani huyu amebeba kitabu changu.**
- A. Makarani hawa wamebeba vitabu vyetu.  
B. Karani hawa wamebeba vitabu vyetu  
C. Makarani hawa wamebeba vitabu vyangu  
D. Karani hao wamebeba vitabu vyetu
22. Mchoro huu unaonyesha saa gapi?



- A. Saa sita kamili  
B. Saa mbili kamili  
C. Saa nane kamili  
D. Saa tisa na dakika kumi.
23. Vifaa hivi vina majina katika ngeli gani?



- A. YA - YA  
B. I - ZI  
C. U - U  
D. KI - VI

24. Tumia sentensi hizi ili kutunga kifungu chenye maana
- i) *kocha wetu aliingia uwanjani*  
ii) *mchezo huo ulikuwa tayari kuanza*  
iii) *ili kuashiria kwamba*  
iv) *na kupuliza kipenga*

- A. i, iv, iii  
B. i, iv, iii, iii  
C. ii, iv, i, iii  
D. iii, iv, i, ii

25. Bunda ni kwa punda kama vile zaa ni kwa

- A. sana  
B. zao  
C. saa  
D. zana

26. Nahau gani yenye maana ya kukamatwa na askari

- A. shika sikio  
B. tia mbaroni  
C. kula kalenda  
D. mkono mrefu

27. Ambatanisha ipasavyo.

	Neno	Kinyume
A.	lala	keti
B.	mama	nina
C.	baba	papa
D.	fumba	fumbua

28. Maneno yaliyopigiwa kistari ni mfano wa:

Gari **safi** lilioshwa **vizuri**.

- A. Nomino, kivumishi
- B. Kitenzi, kielezi
- C. Kivumishi, kielezi
- D. Kivumishi, kivumishi

29. Mavazi rasmi ya wachezaji huitwa

- A. jezi
- B. sare
- C. daluga
- D. fulana

7

30. Tegua kitendawili kifuatacho kwa usahihi.

Chakula kikuu cha mtoto

- A. usingizi
- B. maziwa
- C. ugali
- D. mkate

### READ THESE INSTRUCTIONS CAREFULLY

1. You have been given this question booklet and a separate answer sheet. The question paper contains 30 questions.
2. Do any necessary rough work in this paper.
3. When you have chosen your answer, mark it on the **ANSWER SHEET**, not in this question paper.

### HOW TO USE THE ANSWER SHEET

4. Use an ordinary pencil only.
5. Confirm that the answersheet you have been provided with has the following:  

**YOUR ASSESMENT NUMBER**  
**YOUR NAME**  
**NAME OF YOUR SCHOOL**  
**NAME OF SUBJECT**
6. Do not make any marks outside the boxes.
7. Keep the sheet as clean as possible and do not fold it.
8. For each Questions 1 - 30, four choices are given. The choices are lettered A, B, C and D in each case only **ONE** of the four answers is correct. Choose the **correct** answer from the choice.
9. On the answer sheet, the correct answer is to be shown by drawing a dark line inside the box in which the letter you have chosen is written.

### Example

#### In the question booklet:

19. Work out  $2 \times 18 + 7$
- A. 252
  - B. 50
  - C. 43
  - D. 27

The correct answer is C (43).

#### On the Answer Sheet:

**19.** [A] [B] [C] [D]

In the set of boxes numbered **19**, draw a **dark line** inside the box in which the letter you have chosen is written.

10. Your **dark line** **MUST** be within the box.
11. For each question, **ONLY ONE** box is to be marked in each set of four boxes.

This question paper consists of 8 printed pages

Email: [pinpointpublishers21@gmail.com](mailto:pinpointpublishers21@gmail.com)



**Pinpoint Publishers**  
*Always to the point*

**TURN OVER**

1. The number of registered voters in a certain country is seven hundred and seventeen thousand and seventeen. What is this number written in symbols?  
  
A. 717017  
B. 770070  
C. 701717  
D. 77017
  
2. The number of exercise books sold at a certain shop in the year 2001 was 3754201. What is the value of 5 in the number.  
  
A. Ten of thousands  
B. Thousands  
C. Fifty thousand  
D. 5000
  
3. Mutonga Milk Factory processed 479 litres of milk per day in the year 1999 and 1999 litres of milk per day in the year 2020. How many litres of milk did they process in the month of February of the year 2020.  
  
A. 55972  
B. 13891  
C. 13412  
D. 57971
  
4. Ahmed bought a 60kg bag of sugar. He repacked the sugar into  $\frac{3}{4}$ kg packets. How many packets did he obtain?  
  
A. 15  
B. 80  
C. 180  
D. 45
  
5. Kenya red cross Shared sh. 21098 among 14 families. How much money did each family receive?  
  
A. Sh. 157  
B. Sh. 1507  
C. Sh. 295372  
D. Sh. 16342



6. What is the next number in the pattern below?

51, 153, 255, 357, \_\_\_\_\_

- A. 459
- B. 408
- C. 510
- D. 255

7. **Work out**

$$472 + 2904 + 64$$

- A. 7688
- B. 2440
- C. 3330
- D. 3440

8. What is the value of  $49^2$ ?

- A. 2401
- B. 98
- C. 7
- D. 2101

9. What is the quotient of  $25945 \div 5$  rounded off to the nearest tens?

- A. 5189
- B. 5180
- C. 5199
- D. 5190

10. **Work out.**

$$49 + 44 - 79$$

- A. 172
- B. 74
- C. 14
- D. 84

11. **Work out**

$$49 \div 7 \times 6 + 8 - 25$$

- A. 25
- B. 37
- C. 58
- D. 311

12. What is the **least** number that is divisible by 6, 7 and 9 without a remainder

- A. 63
- B. 42
- C. 18
- D. 126

13. **Work out:**

$$471.42 - 21.442$$

- A. 450.088
- B. 449.978
- C. 257.00
- D. 450.022

14. Express 0.55 as a percentage.

- A. 0.55%
- B.  $\frac{55}{100}\%$
- C. 55%
- D. 5.5%

15. What is 47.4799 rounded off to three decimal places?

- A. 47.48
- B. 47.4710
- C. 47.480
- D. 47.479

16. Kipkirui had  $19\frac{1}{2}$  litres of petrol. He used  $14\frac{1}{4}$ . How many litres of petrol did he remain with?

- A.  $5\frac{1}{4}$
- B. 5
- C.  $33\frac{3}{4}$
- D.  $5\frac{1}{2}$

17. What is the product of  $\frac{4}{7}$  and its reciprocal.

- A. 0
- B. 1
- C.  $\frac{16}{49}$
- D.  $\frac{11}{7}$

18. **Work out**

$$10\frac{4}{9} + 4\frac{2}{3}$$

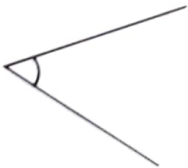
- A.  $14\frac{6}{9}$
- B.  $14\frac{10}{9}$
- C.  $14\frac{3}{9}$
- D.  $15\frac{1}{9}$

19. John ran from his home to the market, a distance of 4km 80m and back. What distance did he cover in metres only.

- A. 160m
- B. 8000m
- C. 4080m
- D. 8160m

20. Which of the following angles is greater than 180 degrees?

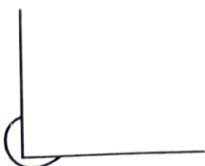
A.



B.



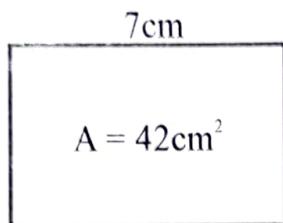
C.



D.



21. Work out the perimeter of the figure below.



- A. 28cm  
B. 26cm  
C. 13cm  
D. 49cm
22. Victoria bought 89 litres of milk. What amount of milk did she buy in millilitres?
- A. 89000 litres  
B. 89000 millilitres  
C. 8900 millilitres  
D. 0.89 millilitres
23. A rectangular container has a length of 10cm, width of 8cm and a height of 12cm. What is the volume of the container.
- A.  $960\text{cm}^3$   
B.  $120\text{cm}^3$   
C.  $96\text{cm}^2$   
D.  $960\text{cm}^2$
24. How many 250ml containers can fill a 500l container?
- A. 2  
B.  $\frac{1}{2}$   
C. 2000  
D. 500

25. **Work out**

$$8\text{kg } 800\text{g} + 34\text{kg } 640\text{g}$$


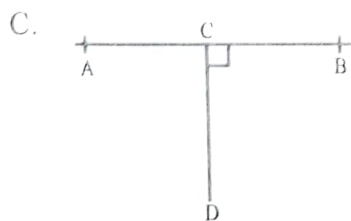

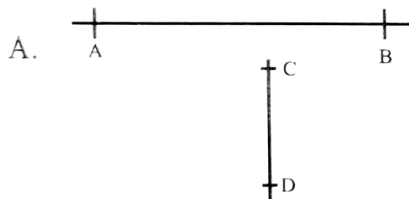
- A. 114kg 1440g  
 B. 42kg 440g  
 C. 42kg 1440g  
 D. 43kg 440g

26. **Work out**

$$14\text{min } 17\text{sec} - 4\text{min } 37\text{sec}$$

- A. 9 min 40 sec  
 B. 10 min 40 sec  
 C. 10 min 20 sec  
 D. 9 min 80 sec

## 27. Which of the following lines are perpendicular to each other





Use your protractor to measure the angle above. The angle measures.

- A.  $105^\circ$
- B.  $100^\circ$
- C.  $75^\circ$
- D.  $110^\circ$

29. Work out the value of  $x$  in

$$17 + x = 34$$

- A. 51
- B. 17
- C. 2
- D.  $2x$

30. Which one of the following is **not** a 3D object?

- A. Sphere
- B. Circle
- C. Cube
- D. Cylinder

WORKING SPACE



**Pinpoint Publishers**  
*Always to the point*

# KPSEA REVEALED

**Kenya Primary School Education Assessment**

**GRADE SIX**

**207507**

**— INTEGRATED SCIENCE — 2022**

**1hr 40mins**

**INSTRUCTIONS TO CANDIDATES (Please read these instructions carefully)**

1. You have been given this question booklet and a separate answer sheet. The question booklet contains 50 questions
2. Do any necessary rough work in this booklet.
3. When you have chosen your answer, mark it on the **ANSWER SHEET**, not in this question booklet.

**HOW TO USE THE ANSWER SHEET**

4. Use an ordinary pencil.
5. Confirm that the answer sheet provided with has the following:  
**YOUR ASSESSMENT NUMBER**  
**YOUR NAME**  
**NAME OF YOUR SCHOOL**  
**NAME OF SUBJECT**
6. Do not make any marks outside the boxes.
7. Keep the answer sheet as clean as possible and do not fold it.
8. For each of the questions 1 - 50, four choices are given. The answers are lettered A, B, C and D. In each case, only **ONE** of the four choices is correct. Choose the **correct** answer from the choices.
9. On the answer sheet, the correct answer is to shown by drawing a **dark line** inside the box in which the letter you have chosen is written.

**Example**

**In the Question booklet**

11. John and Peter observed a mango fruit falling from a mango tree. John told Peter that the mango fell because of

- A. high temperature
- B. force of gravity
- C. its small mass
- D. its high motion

The correct answer is **B**

**On the answer sheet.**

In the set of boxes numbered 11, draw a **dark line** inside the box with the letter **B** printed in it as indicated below.

**11** [A] [B] [C] [D]

10. Your dark line **MUST** be within the box.
11. For each question, **ONLY ONE** box is to be marked in each set of four boxes.

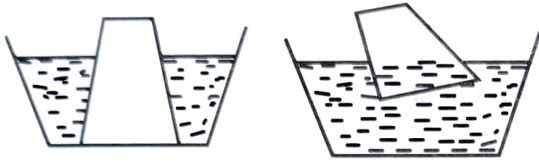


**Pinpoint Publishers**  
*Always to the point*

**TURN OVER**

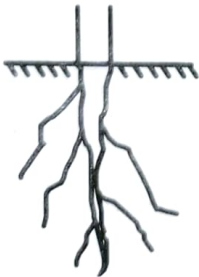
This question paper consists of 7 printed pages  
Email: [info@pinpointpublishers.co.ke](mailto:info@pinpointpublishers.co.ke)

1. One of the following is **not** a respiratory disease. Which one is it?  
 A. Tuberculosis  
 B. Malaria  
 C. Pneumonia  
 D. Colds.
2. Grade 4 learners carried out an activity to demonstrate a certain property of gases as shown below.



What was their conclusion?

- A. Air has mass  
 B. Air expands when heated  
 C. Air occupies space  
 D. Glass is lighter in water
3. The teeth used for cutting and biting are \_\_\_\_\_ in numbers in the mouth.  
 A. 8  
 B. 6  
 C. 4  
 D. 12
4. Study the diagram below.



The root system above is **not** found in

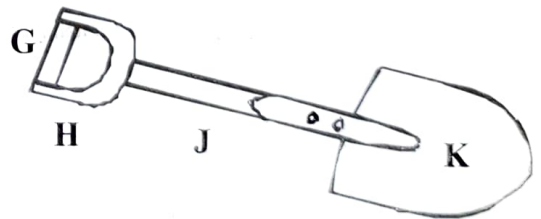
- A. cabbage  
 B. beans  
 C. sugarcane  
 D. kales.

5. Grade 6 learners observed a type of cloud with the characteristics below  
 i) *Appeared low in the sky*  
 ii) *Were dark grey in colour.*

The clouds were **likely** to

- A. appear like bundles of cotton wool  
 B. bring heavy rainfall  
 C. have a flat base  
 D. indicate a fine weather.
6. The process through which ice changes into water is known as  
 A. sublimation  
 B. freezing  
 C. melting  
 D. evaporation.

7. A teacher displayed the picture below on the board.

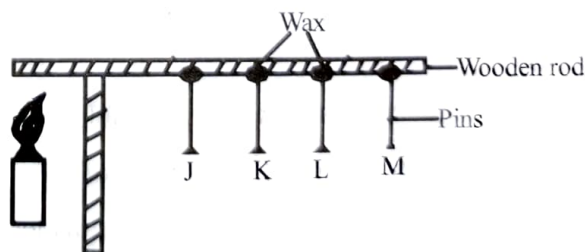


The effort should be applied at point

- A. G  
 B. H  
 C. J  
 D. K.



8. Which one of the following parts of a digital device is **not** correctly matched with its use?
- Mouse - Helps to give instructions when clicked.
  - Cables - to connect the device to its hardware.
  - Keyboard - types into the computer.
  - Monitor - controls and processes programmes.
9. In a Science project, grade six learners were asked to by their teacher to clear the bush. Which precautions were they supposed to take? Wear
- overcoat, goggles, gumboots
  - shoes, face mask, rubber gloves
  - rubber gloves, face mask, goggles
  - goggles, face mask, overcoat.
10. Which one of the following animals is the odd one out?
- Mite
  - Cockroach
  - Tick
  - Scorpion.
11. Which part of the human heart receives oxygenated blood from the lungs?
- Pulmonary vein
  - Venacava
  - Pulmonary artery
  - Aorta.
12. Which of the following parts of the male reproductive system is **wrongly** matched with its function?
- Sperm duct - Allows passage of urine out of the male body.
  - Testis - Production of sperm.
  - Penis - Deposits sperms into the vagina during intercourse.
  - Urethra - allows passage of sperms out of the male body.
13. Learners were asked to identify the function of leaves on their digital devices. Which one of the following was **likely** to be found?
- Absorption of water and mineral salts.
  - Storage of food.
  - Transpiration.
  - Transport of manufactured food.
14. Grade 4 learners conducted the experiment as shown below on conduction of heat in solids.



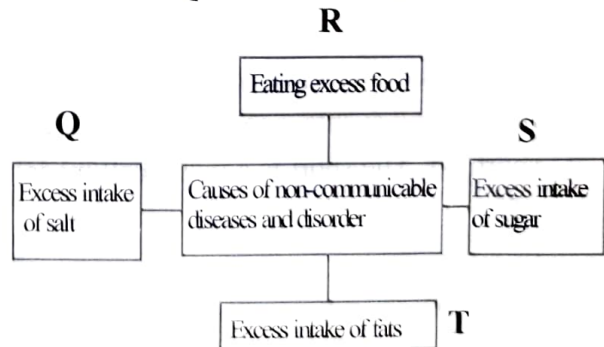
It is **true** to say that

- pin **J** fell last
- non of the pins fell
- pin **M** fell last
- pin **L** fell first.

15. During a visit to a clinic learners were informed about different blood groups. Which blood group were they told to be a universal recipient?
- Blood group A
  - Blood group AB
  - Blood group O
  - Blood group B.
16. The following are importance of innovative gardening **except**
- it allows one to design a garden in a way that fits one's needs.
  - it makes the compound beautiful.
  - it helps us make money by selling the crops.
  - it requires a lot of time to prepare and manage.
17. Which one of the following is **not** an innovative gardening practice?
- Growing vegetables in plastic bottles
  - Sowing seeds in the fields
  - Growing vegetables in plastic pipes
  - Sowing vegetables in sacks.
18. Ali wanted to sow some vegetables. He made some holes at the bottom of the containers. Why do you think he made the holes?
- To allow the roots to spread
  - To allow enough space for growth
  - To allow faster growth of the vegetable
  - To allow excess water to flow out.
19. Why do you think foods rich in vitamins are important to our bodies?
- They help our bodies grow fast.
  - They provide our bodies with energy to do work.
  - They boost our bodies immunity
  - They help in repairing worn out tissues.
20. Which one of the following is **not** a method of caring for the vegetable crops?
- Mulching
  - Innovative gardening
  - Weeding
  - Fencing .
21. Safe traps for catching wild animals in our farms should only be set by
- learners
  - neighbours
  - parents or guardians
  - anyone.
22. Which one of the following gardening tool **does not** require a file for maintenance?
- Hoe
  - Panga
  - Spade
  - Rake.
23. An eroded piece of land becomes
- fertile
  - shallow
  - less productive
  - attractive.

24. Which one of the following is a use of water in farming?
- rearing fish
  - watering structures
  - boat rowing
  - generating power.
25. Which one of these is **not** a routine practice in rearing small animals domestically?
- Deworming
  - Watering
  - Feeding
  - Slaughtering.
26. Which of the following is **not** a natural textile fibre?
- Acrylic
  - Wool
  - Cotton
  - Linen
27. A stitch used to repair a hanging hem is called
- back stitch
  - embroidery stitch
  - hemming stitch
  - running stitch.
28. Deep frying has the following benefits **except**
- makes food more delicious
  - preserves the food
  - the cooking oil can be re-used
  - cheaper than other methods of cooking.
29. Which of the measures will not be useful to maintain melamine kitchen tools and equipment?
- Handling with care
  - Cleaning with soft materials
  - Drying in direct sunlight
  - Removing food from them immediately after use.
30. When preserving cereals and pulses, we should observe proper hygiene. This will help us prevent
- losses
  - diseases
  - wastage
  - time
31. Nutrients are grouped into macronutrients and micronutrients. Which of the following is **not** a of macronutrients
- Vitamins
  - Fats
  - Proteins
  - Carbohydrates.

*Study the diagram below and use it to answer questions 32 and 33.*

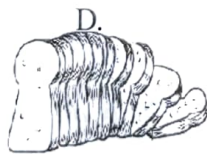
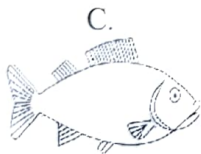
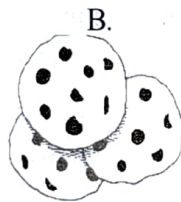


32. Which habit will **not** cause obesity?
- T
  - S
  - Q
  - R

33. Not taking of the food nutrients in Q will cause
- lack of appetite
  - goiter
  - vomiting
  - diarrhoea.

34. Which one of the following is **not** a factor to consider when planning a family meal?
- Time available
  - Amount of money available
  - Family dietary needs
  - Gender of the family members.

35. The following are examples of foods that can be cooked by baking. Which one is **not**?



36. In throwing events, one of the events is short put. The short is a metal ball made of
- plastic
  - iron
  - copper
  - leather.

37. Which one of the following is **not** a way of controlling and stopping an oncoming ball in soccer?
- Wall pass
  - Tigh trap
  - Chest trap
  - Sole of the foot trap.
38. Which of the following can **not** be used by soccer players during a match apart from the goal keeper?
- Overhead pass
  - Instep pass
  - Inside of the foot pass
  - Overarm pass.
39. You have been asked by your soccer team to improvise a relay baton. Which material would **not** be necessary?
- Old socks
  - Stones
  - Used carrier bags
  - Cellotape.
40. What action is taken against an athlete who commits a fault start in a hundred metre race? The
- athlete is removed from the race.
  - athlete is given the last warthing
  - player is given another race.
  - athlete is given yellow card.
41. Identify the part of the body that supports a gymnast when performing a hand stand.
- Shoulder
  - Hands
  - Head
  - Toes.

42. Which is the first step of managing an open wound?
- Covering the wound.
  - Squizing the wound.
  - Cleaning the wound.
  - Applying pressure on the wound.

43. A person trained to give emergency medical care before a casualty is taken to hospital is called a
- first aider
  - nurse
  - paramedics
  - home doctor.


44.



Which method of transporting an injured person is shown in the diagram above?


- Pick-a-back method.
  - Arm lift.
  - Single human crutch.
  - Two person-support method.
45. The method of communication between different groups by giving directions in an outdoor activity is referred to as
- tracking signs
  - keeping in touch
  - responsibility
  - planning.
46. Umoja Primary School football team was practising for a match that they were to play. Which one of the following was **least** practised?
- Push pass.
  - Wall pass.
  - Bounce pass.
  - Inside of the foot pass.

47. During a field event, Jane started by doing the technique below.



The technique is known as

- elongated start
  - medium start
  - bullet starts
  - standing start.
48. A clapper can be used instead of a gun in the game of
- shoot and kill
  - football
  - athletics
  - rope skipping.
49. The step of hurdles shown below shows the \_\_\_ stage in hurdling.



- approach
  - clearance
  - take off
  - flight.
50. Which one of the following is **not** an activity that can lead to dehydration?
- Fever and other illnesses.
  - Drinking too much sugary drinks.
  - Hot weather causing you to sweat a lot.
  - Eating dry food.



# KPSEA REVEALED

Kenya Primary School Education Assessment 207506

**GRADE SIX**

**– ENGLISH - COMPOSITION – 2022**

**40mins**

<b>YOUR NAME</b>	
<b>NAME OF YOUR SCHOOL</b>	

*Write an interesting composition about*

**THE DAY MY PARENTS AND I VISITED THE GAMEPARK**

---

---

---

---

---

---

---

---

---

---

---

---

---

---

---

---

---

---

---

---

---

---

---

---

---

---



Pinpoint Publishers  
*Always to the point*

# KPSEA REVEALED

Kenya Primary School Education Assessment

**GREDI YA 6**

**— KISWAHILI - INSHA — 2022**

**Muda: Dak 40**

JINA LAKO	
JINA LA SHULE	

*Endeleza mtungo ufuatao.*

Ilikuwa siku kuu kwa rafiki yangu. Alinialika nyumbani kwao .....