

HIGH POINT EXAM SERIES 1

KPSEA FIRST TRIAL-22

Class of KPSEA 2024

The PDF Comprises of assessment Questions Meant to prepare the learners to prepare for the KPSEA National Exams set for October 2024.

For Marking Schemes:

Order online at: www.kenyaeducators.co.ke

Or

Contact Kenya Educators Consultancy

0724333200

0795491185

0768321553

Visit our Website kenyaeducators.co.ke or Contact us on 0724333200 for CBC (pp1-grade 6), JSS (Grades 7 and 8) and Highschool levels (Forms 1-4) Exams, Lesson Notes and Schemes of Work, CBC report card books, lesson plans, Curriculum Designs and Official CBC Training Materials.

KENYA EDUCATORS CONSULTANCY

Compiled and distributed by Kenya Educators Consultancy- 0724333200

Website: www.kenyaeducators.co.ke



HIGH POINT EXAM SERIES

GRADE 6 - YEAR 2022

ENGLISH ACTIVITIES

NAME: _____ GRADE: _____

1 Hour

INSTRUCTIONS TO CANDIDATES (Please read these instructions carefully)

1. You have been given this question booklet and a separate answer sheet. The question booklet contains 30 questions.
2. When you have chosen your answer, mark it on the **ANSWER SHEET** not in this question booklet.

HOW TO USE THE ANSWER SHEET

3. Use an ordinary pencil.
4. Confirm that the answer sheet provided with has the following:
YOUR ASSESSMENT NUMBER
YOUR NAME
NAME OF YOUR SCHOOL
NAME OF SUBJECT
5. Do not make any marks outside the boxes.
6. Keep the sheet as clean as possible and do not fold it.
7. For each of the questions 1 - 30, four choices are given. The choices are lettered A, B, C and D. In each case, only **ONE** of the four choices is correct. Choose the **correct** answer from the choices.
8. On the answer sheet, the correct answer is to be shown by drawing a **dark line** inside the box in which the letter you have chosen is written.

Example

In the Question Booklet:

15. Choose the alternative that *best completes the sentence*.

We are working hard in school, _____ ?

- A. are we
- B. isn't it
- C. aren't we
- D. don't we

The correct answer is C. **On the answer sheet.**

In the set of boxes numbered 15, draw a **dark line** inside the box with the letter C printed in it as indicated below.

15. [A] [B] [C] [D]

9. Your **dark line** **MUST** be within the box.
10. For each question, **ONLY ONE** box is to be marked in each set of four boxes.

This question paper consists of 4 printed pages

Read the conversation and answer questions below.

- Rose : Good evening Bob? Where are you going at night?
Bob : I am looking for food from well wishers. I am very hungry and my granary is empty
Rose : Oh! I am sorry Mr. Bob can't you get some food from your daughter Selina?
Bob : Selina left this village two years ago for Nairobi. I live alone in my hut.
Rose : Do you mind walking to my house? I will offer you food and drinks.
Bob : (As they start walking) I am so grateful my granddaughter.

- | | |
|--------------------------------------------------------------------------------------------------------------------------------------------------------------------------------------------------------------------------------------------------------------------------------------------------------------------------------------------------------------------------------------------------------------------------------------------------|------------------------------------------------------------------------------------------------------------------------------------------------------------------------------------------------------------------------------------------------------------------------------------------------------|
| <p>1. It is likely that Rose and Bob met
A. in Bob's hut
B. At Rose's house
C. On the road
D. Not told</p> <p>2. The word that makes us know that it was dark is
A. evening B. morning
C. where D. night</p> <p>3. Who are well wishers?
A. People who are not old
B. People who you meet in the evening
C. Poor people
D. People who help needy people</p> | <p>4. Who was Selina in this conversation?
A. Mr Bob's granddaughter
B. Bob's mother
C. Roses mother
D. Rose's sister</p> <p>5. Why was Bob grateful?
A. Selina offered him food
B. Rose promised him food
C. He lived alone in a hut
D. Rose filled his granary</p> |
|--------------------------------------------------------------------------------------------------------------------------------------------------------------------------------------------------------------------------------------------------------------------------------------------------------------------------------------------------------------------------------------------------------------------------------------------------|------------------------------------------------------------------------------------------------------------------------------------------------------------------------------------------------------------------------------------------------------------------------------------------------------|

Read the passage and answer questions

That day I went to school late because I overslept. The previous day I had spent together with my fellow teens climbing Mt. Maragua which is in North Eastern parts of Kenya. When I arrived at the school gate, Mr. Mapozi was there holding a long stick. I was shaking with fear of being whipped. To my surprise Mr. Mapozi greeted me smiling and congratulated me for being position one in mountain climbing.

- | | |
|-------------------------------------------------------------------------------------------------------------------------------------------------------------------------------------|------------------------------------------------------------------------------------------------------------------------------------------------------------------------|
| <p>6. Why did the writer go to school late?
A. He woke up late
B. There was a mountain to climb
C. He was still tired
D. He was number one in climbing mountain</p> | <p>7. What is meant by the words, fellow teens"
A. experts of mountain climbing
B. his neighbours
C. trainers in mountain climbing
D. his agemates</p> |
|-------------------------------------------------------------------------------------------------------------------------------------------------------------------------------------|------------------------------------------------------------------------------------------------------------------------------------------------------------------------|

8. What is the name of the mountain he was climbing?
- A. We are not told
 - B. Mt. Maragua
 - C. Mr. Mapozi
 - D. Gate mountain

9. What surprise did the writer face at school?
- A. He was punished for being late
 - B. He did work for being late
 - C. He was not tired
 - D. He was congratulated instead of being punished

Read the story and answer questions

Mzee Bodo woke up early heading to the shamba to plant maize and beans. From a distance he thought he was dreaming. He even pinched his own hand to see if he **was** still asleep. His piece of land had been carried by a landslide.

10. Why did Mr. Bodo wake up early?
- A. Because it was raining
 - B. To go and plant
 - C. His piece of land was carried away
 - D. He suspected the landslide
11. What made Mr. Bodo think that he was dreaming?
- A. He could not find his piece of land
 - B. He woke up early
 - C. It was still rainy
 - D. He did not have seeds to plant

12. According to the passage, it is true to say that
- A. Mzee Bodo's piece of land was carried away by a landslide
 - B. Mzee Bodo wakes up early everyday
 - C. Some thieves had carried Mzee Bodo's piece of land
 - D. Mzee Bodo lives alone

Read the passage and answer questions

Plants are classified into two major groups. Green and non- green plants. Green plants have green colouring matter (chlorophyll) and makes their own food. Non- green plants have no green leaves and cannot make their own food. They feed on other plants.

13. Plants are classified into how many groups?
- A. Five
 - B. Six
 - C. Two
 - D. Ten

14. What do green plants do which non-green plants cannot do?
- A. Making leaves
 - B. Making roots
 - C. Absorbing water
 - D. Making own food

15. The best title for the above passage is

- A. plants making food
- C. green plants

- B. non- green plants
- D. groups of plants.

Fill in the gaps.

I am sure you have ever taken a walk in the ___ 16 ___. The atmosphere is peaceful besides the ___ 17 ___ of birds perched on the branches, rustling of leaves, occasional buzz of ___ 18 ___ and the rustle of dashing unseen creatures in the ___ 19 ___. Unfortunately, such places are diminishing and becoming ___ 20 ___ as demand for land for settlement and projects grow tremendously.

- | | | | |
|----------------------|--------------------|----------------------|----------------------|
| 16. A. woods | B. tree | C. trees | D. wood |
| 17. A. chipping | B. bleating | C. quacking | D. chirping |
| 18. A. animals | B. insects | C. leaves | D. branches |
| 19. A. sky | B. air | C. undergrowth | D. seen |
| 20. A. more and more | B. fewer and fewer | C. better and better | D. stable and stable |

Choose the plural of underlined words.

21. We saw the ship along the coastline.

- A. sheep
- B. sheeps
- C. ships
- D. ship

22. Ox is a strong animal.

- A. ox are
- B. oxen are
- C. oxes is
- D. oxes are

23. The monkey jumped from one tree to another.

- A. monkies
- B. monkys
- C. monkeyies
- D. monkeys

24. Our chief will address the meeting.

- A. chiefs
- B. chieves
- C. chief
- D. chieve

Choose the past tense of the underlined words.

25. Beatrice carries her bag on he back.

- A. carried
- B. carry
- C. carrying
- D. will carry

26. Our teacher reads a book quickly.

- A. reads
- B. read
- C. reading
- D. readed

27. I ride on my bicycle to school.

- A. riding
- B. ride
- C. rided
- D. rode

28. Peter _____ looking through the hole.

- A. was
- B. is
- C. were
- D. are

Choose the correct answer

29. The young one of a lion is called a

- A. puppy
- B. lioness
- C. cub
- D. calf

30. A _____ cuts people's hair.

- A. shaver
- B. barber
- C. kinyozist
- D. cutter



HIGH POINT EXAM SERIES

GRADE 6 - YEAR 2022

CREATIVE ARTS & SOCIAL STUDIES

1 Hour 40 Minutes

NAME: _____ GRADE: _____

INSTRUCTIONS TO CANDIDATES (Please read these instructions carefully)

1. You have been given this question booklet and a separate answer sheet. The question booklet contains 50 questions.
2. Do any necessary rough work in this booklet
3. When you have chosen your answer, mark it on the **ANSWER SHEET** not in this question booklet.

HOW TO USE THE ANSWER SHEET

4. Use an ordinary pencil.
5. Confirm that the answer sheet that you have been provided with the following

YOUR ASSESSMENT NUMBER
YOUR NAME
NAME OF YOUR SCHOOL
NAME OF SUBJECT

6. Do not make any marks outside the boxes.
7. Keep the sheet as clean as possible and do not fold it.
8. For each of the questions 1 –50, four choices are given. The choices are lettered A, B, C and D. In each case, only **ONE** of the four choices is correct. Choose the **correct** answer from the choices.
9. On the answer sheet, the correct answer is to be shown by drawing a **dark line** inside the box in which the letter you have chosen is written.

Example

In the Question Booklet:

23. One way in which your school can collaborate with the neighbouring community is by
- A. producing good results
 - B. cleaning the market in the neighbourhood
 - C. maintaining discipline
 - D. planting of trees in the school compound

The correct answer is "B".

On the answer sheet.

In the set of boxes numbered 23, draw a **dark line** inside the box with the letter **B** printed in it as indicated below.

23. [A] [B] [C] [D]

10. Your **dark line** **MUST** be within the box.
11. For each question, **ONLY ONE** box is to be marked in each set of four boxes.

This question paper consists of 4 printed pages

CREATIVE ARTS

- The technique that involves using dots to shade a drawing is known as
 A. stripping technique
 B. tonal value
 C. smudge technique
 D. colouring
- The art of making and manipulating puppets is called _____ while the person who moves or manipulates it is called
 A. sticking puppet
 B. puppetry, puppeteer
 C. toys, performer
 D. puppeteer, sticks

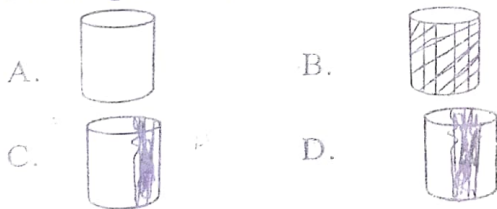
- The effect created by the cup below is known as



- Smudging
- Crayon etching
- Tonal variation
- Dark effect

- When two or more objects are placed or drawn in a way that they appear to be covering and blocking each other is known as
 A. overlapping B. creative art
 C. smudge drawing D. middle arm
- All these animals provide us with skins. Which one provides us with hides?
 A. Goat B. Cow
 C. Rabbit D. Sheep

- Which of the following is displaying cross hatching technique?



- Below is a list of tools and materials you require when painting an imaginative sporting activity. Which one is not?
 A. Drawing book B. Paint brushes
 C. Palette D. A banana

- The art of making containers and other items using flexible fibres is known as
 A. fabric B. tie and dye
 C. basketry D. warps
- The darkness and lightness of the colour of an object is known as
 A. volume
 B. crayon etching
 C. tonal value
 D. smudge
- Who is a marionettist?
 A. A puppet moving
 B. Strings used by a marionette
 C. Characters
 D. The person controlling the marionette

MUSIC





- The song "Tule vyakula bora, tujenge miili yetu" is an example of _____ song.
 A. sacred song B. tropical song
 C. folk song D. patriotic song
- A song performed by three people each singing a different voice is known as
 A. solo B. dual
 C. three choice D. trio
- In a song the mood can be shown through all of the following except
 A. facial expression
 B. instruments
 C. gesture
 D. tempo speed
- Complete the French rhythm names by filling in spaces F and Y

Beat count	French rhythm name
One long sound	F
Four long sound	Y

- | | |
|------------|-------------|
| F | Z |
| A. tate | Taa |
| B. Taa- aa | tate |
| C. Taa | Taa- aa- aa |
| D. ta- te | Taa- aa |

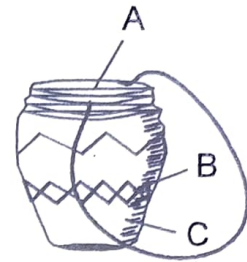
15. Religious songs are also called
 A. folk song B. tropical song
 C. sacred song D. patriotic song
16. In the table below on French rhythm.
 Which one is correctly matched with the
 note symbol.

Note symbol

- | | | |
|----|-----------------------------------------------------------------------------------|-----------|
| A. |  | Crotchet |
| B. |  | Semibrave |
| C. |  | Quaver |
| D. |  | Minim |

17. Singing with unfield voice is known as
 A. voice blending B. crescendo
 C. deminuendo D. voice rhythm

18. Among the following which one is a
 social economic importance of song.
 A. Musician get paid
 B. Musician earn revenue for the countries
 C. Musician accuses the other
 D. Musician get money from recording
19. Name the parts of the drums A, B and C
 respectively.

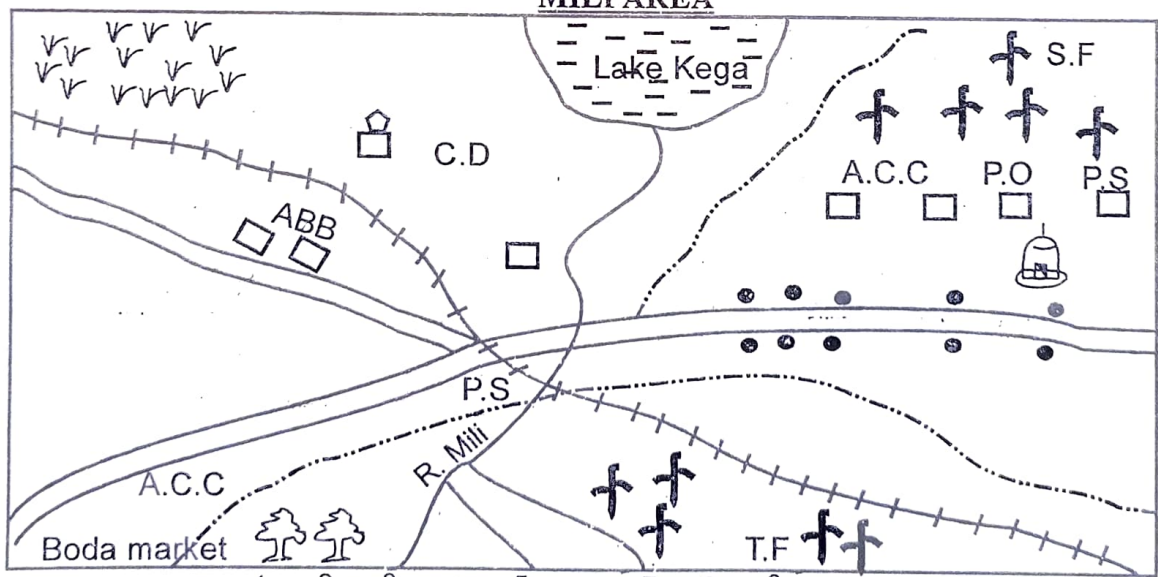


- A. Leather, skin, string
 B. Leather, sound box, string
 C. Sound box, string, leather
 D. Skin membrane, tuning laces, sound
 box

20. Which one of the following is an example
 of non- melodic percussion instrument?
 A. Drum B. Adogo
 C. Kayamba D. Marimba

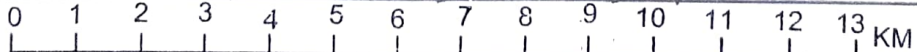
Social studies

MILI AREA



Key

Scale



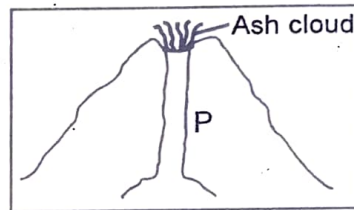
- | | | | | | | | | | | | | | |
|-------------------------------------------------------------------------------------|---------------------|-------------------------------------------------------------------------------------|--------------|-------------------------------------------------------------------------------------|--------------------------------------|---------------------------------------------------------------------------------------|------------------------|---------------------------------------------------------------------------------------|-----------|---------------------------------------------------------------------------------------|--------|---------------------------------------------------------------------------------------|------------------|
|  | Tarmac road |  | Murrām road |  | C.D- Cattle dip |  | Railway |  | Sugarcane | | | | |
|  | Grass |  | Tea |  | Mosque |  | Settlement |  | Lake |  | Forest |  | P.O- Post Office |
|  | P.S- Police Station |  | ABB Abattoir |  | T.F- Tea Factory |  | S.F- Sugarcane Factory | | | | | | |
|  | River and bridge | | |  | A.C.C- Assistant County Commissioner | | | | | | | | |

21. The dominant religion in Mili area is
 A. Christianity B. Paganism
 C. Hinduism D. Islamic
22. The Chief administrative officer in Mili area is the
 A. Governor
 B. Assistant County Commissioner
 C. Deputy Commissioner
 D. County Commissioner
23. What is the direction of the tea factory from the abbatoir?
 A. South East B. North East
 C. East D. South
24. The main type of industries found in Mili area are
 A. assembling factories
 B. processing factories
 C. manufacturing industries
 D. texture industries
25. The County Executive Committee is made up of the following except the
 A. County Executive member
 B. Members elected from different wards
 C. County Governor
 D. Deputy Governor
26. Which one of the following aspect of cultures should not be preserved?
 A. Female genital mutilation
 B. Our traditional foods
 C. Believing in God
 D. Moral laws
27. One may become a citizen of Kenya through
 A. marriage B. employment
 C. registration D. migration
28. Which one of the following types of fish is caught from the inland grounds of Eastern Africa?
 A. Tuna B. Mullet
 C. Star fish D. Nile perch

29. Which one of the following minerals is not correctly matched with where it is matched?

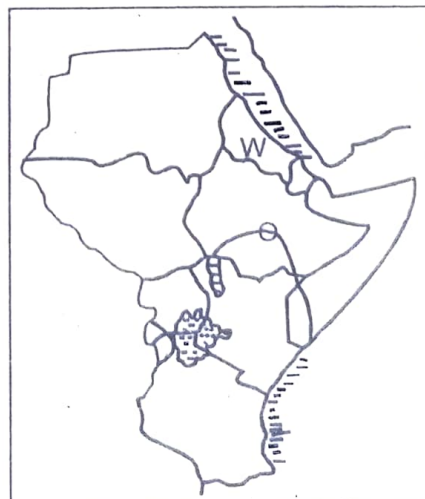
<u>Mineral</u>	<u>Where it is mined</u>
A. Petroleum	Ngamia one
B. Limestone	Bamburi
C. Flourspar	Lake Magadi
D. Diatomite	Kariandusi near Gilgir

Use the mountain drawn below to answer question 30 and 31.



30. The following are examples of mountains above except
 A. Mt. Elgon B. Mt. Longonot
 C. Mt. Ruwenzori D. Mt. Kariandusi
31. The part marked P is the mountain drawn is called
 A. vent B. magma
 C. lava D. subsidiary vent

Use the map of Eastern Africa to answer question 32 - 33.



32. The country marked W is
 A. Eritrea B. Djibouti
 C. Rwanda D. Burundi
33. The country marked O is
 A. Tana B. Turkwel
 C. Shabelle D. Nile
34. The following are example of historic built environment except
 A. St. Francis of Assisi in Eritrea
 B. John Crang Mausoleum in South Sudan
 C. Mtoni Palace Ruins in Tanzania
 D. Parliament in Kenya
35. The following are human rights except one freed to
 A. worship
 B. fair trial
 C. own party
 D. sending one to jail

C.R.E

36. Three of the following are bad effects of weather. Which one is not?
 A. Soil erosion B. Drought
 C. Winnowing D. Flood
37. What did God create on the 4th day?
 A. Day and night
 B. Heavenly bodies
 C. Human being
 D. Vegetation
38. During the time of Noah, people, animals and birds all died because of
 A. rain B. fire
 C. drought D. wind
39. In which book do we read the story of Moses and the Israelites?
 A. Exodus B. Genesis
 C. Luke D. Mark
40. King Ahab and Jezebel were punished by God for being unfair to
 A. Ananiah B. Elimelech
 C. Naboth D. Peter
41. Which one of the following was a gift given to baby Jesus by the wisemen?
 A. Silver
 B. Fishermen
 C. Tax collectors
 D. Ten makers

42. The first disciple of Jesus worked as
 A. doctors B. fishermen
 C. tax collectors D. ten makers
43. Who prepared the way for the Messiah?
 A. Herod
 B. John the Baptist
 C. Peter
 D. Jesus
44. Which one of the following is not a good way of celebrating Christians?
 A. Helping the needy
 B. Going to church
 C. Taking alcohol with friends
 D. Giving gifts to friends
45. During the baptism of Jesus the Holy Spirit came upon Him in form of
 A. fire
 B. a pigeon
 C. a burning bush
 D. a dove
46. Which of the following explains the meaning of self awareness?
 A. Ability to talk to others
 B. Understanding one's strength and weakness
 C. Showing hospitality to friends and relatives
 D. Taking care of one's self interest
47. Which one of these statements is not true about talents? We use our talents to help each other by
 A. competing in verse speaking
 B. working together in class assignment
 C. playing together in the field
 D. sharing meals
48. One way to promote manual work best in our society is by
 A. preaching its advantage to all people in radio
 B. encouraging educated people to do it
 C. reducing its value by talking ill about it
 D. respecting and rewarding it well

49. The main lesson that Christian learnt from healing of the paralysed man is to
- have courage
 - have faith
 - believe in themselves
 - love God
50. David a boy in Std. 6 laughed at a blind man who was struggling to find his way into the house. As a Christian the action you can take is to tell him
- that it is better to keep quiet than laughing
 - that he will give birth to the blind
 - the benefit of helping people with special needs
 - God will punish him for that.

I.R.E

36. Which one of the following surahs records the Qiyamah?
- Zilzallah
 - Humazah
 - Fatiha
 - Dhuha
37. The Chapter which is the mother of all chapters in the holy Quran is the
- Al- Fatiha
 - An Nasr
 - Kauthar
 - Maun
38. Which one of the following surahs warns against slandering and backbiting?
- Inshirrah
 - Maun
 - Lahab
 - Humazah
39. Worship Allah (SW) as if you see Him for if you do not see him.....complete the hadith.
- he ignores you
 - you won't enjoy the hereafter
 - he sees you
 - he forgets you
40. Muslims attend the holy Hajj in the town of
- Madina
 - Mecca
 - Jerusalem
 - Thibri

41. Paradise lies under the feet of
- Allah (SW)
 - Prophet (PBUH)
 - Mothers
 - Angels
42. The angel of Allah (SW) who is responsible for wahyi is
- Mikail
 - Atid
 - Jibril
 - Izrail
43. How many surahs are recorded in the holy Quran?
- 222
 - 97
 - 55
 - 117
44. The main pillar of Islamic religion as well as the pillar of Islam is the
- Saum
 - Swalat
 - Hajj
 - Rajab
45. Who among the following people is exempted from attending fasting?
- The needy
 - The debtor
 - Woman in heidh
 - An orphan
46. Which one of the following is not a pillar of Islam?
- Hajj
 - Zakkat
 - Swalah
 - Books
47. Which holy book of Allah (SW) was given to Nabii Dawud?
- Zaboor
 - Injeel
 - Taurat
 - Quran
48. Zakkat can be given to the following people except
- debtor
 - new convert
 - orphan
 - the needy
49. Muslims are brothers to own
- Muslims
 - Neighbours
 - Brothers
 - Any human being
50. Which prophet of Allah (SW) was a carpenter?
- Musa (AS)
 - Ibrahim (AS)
 - Yahiya (AS)
 - Nuh (AS)



HIGH POINT EXAM SERIES

GRADE 6 - YEAR 2022

INTERGRATED SCIENCE

NAME: _____ GRADE: _____

1 Hour

INSTRUCTIONS TO CANDIDATES (Please read these instructions carefully)

1. You have been given this question booklet and a separate answer sheet. The question booklet contains 50 questions.
2. Do any necessary rough work in this booklet
3. When you have chosen your answer, mark it on the **ANSWER SHEET** not in this question booklet.

HOW TO USE THE ANSWER SHEET

4. Use an ordinary pencil.
5. Confirm that the answer sheet that you have been provided with the following

YOUR ASSESSMENT NUMBER
YOUR NAME
NAME OF YOUR SCHOOL
NAME OF SUBJECT

6. Do not make any marks outside the boxes.
7. Keep the sheet as clean as possible and do not fold it.
8. For each of the questions 1 - 50, four choices are given. The choices are lettered A, B, C and D. In each case, only **ONE** of the four choices is correct. Choose the **correct** answer from the choices.
9. On the answer sheet, the correct answer is to be shown by drawing a **dark line** inside the box in which the letter you have chosen is written.

Example

In the Question Booklet:

11. John and Peter observed a mango fruit falling from a mango tree. John told Peter that the mango fell because of
A. high temperature
B. force of gravity
C. its small mass
D. its high motion

The correct answer is B

On the answer sheet.

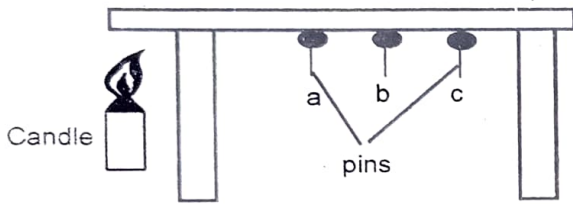
In the set of boxes numbered **15**, draw a **dark line** inside the box with the letter C printed in it as indicated below.

11. [A] [~~B~~] [C] [D]
10. Your **dark line** **MUST** be within the box.
11. For each question, **ONLY ONE** box is to be marked in each set of four boxes.

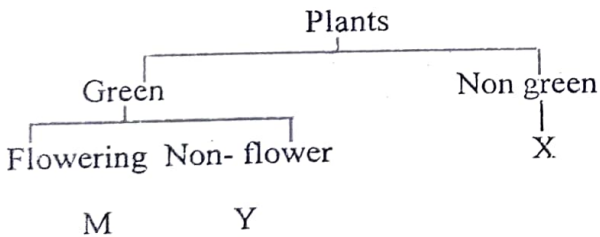
This question paper consists of 4 printed pages

SCIENCE & TECHNOLOGY

- The following are functions of leaves except
 - they absorb water and mineral salts
 - plant breathe through leaves
 - they make food
 - they remove waste through transpiration
- Which one of the following is not an importance of fungi?
 - Some fungi cause air pollution
 - Some make medicine
 - Some are used as food
 - Some causes diseases
- The part of a computer that types into computer is known as
 - cable
 - keyboard
 - mouse
 - monitor
- Grade 5 learner did the set experiment shown below to test conduction. Which pin fell first?



- d
 - c
 - a
 - None
- Which of the following is not an example of word document in computing?
 - Typing area
 - Cables
 - Status bar
 - Ribbon
 - The following are waterborne diseases except
 - typhoid
 - cholera
 - bilharzia
 - malaria
 - Which plants best replace M, X and Y below respectively?

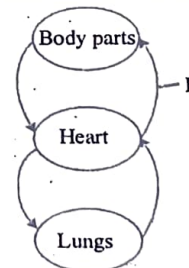


- Mushroom, bean, yeast
 - Onion, fern, mushroom
 - Moss, maize, cedar
 - Onion, mould, moss
- In the female reproductive system fertilisation take place in the
 - ovary
 - oviduct
 - urethra
 - vagina

- Which plant is likely to have the above type of root?



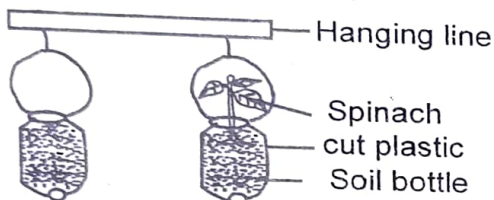
- sorghum
 - greengrams
 - onion
 - maize
- When breathing in, the diaphragm
 - moves upward
 - flatten
 - expands
 - inflates
 - Which one of the following is a characteristic of both snake and lizard?
 - Have scales
 - Give birth to young ones
 - Warm blooded
 - Breathe through gills
 - The following are functions of the nose except
 - moistening the air
 - warming the air
 - cleaning the air
 - absorption of air
 - The following are characteristics of a certain type of teeth.
 - Sharp pointed
 - Longer than other teeth
 - Has one root
 The type of teeth described above is
 - premolar
 - molars
 - incisors
 - canine
 - The following diagram represent a simplified human circulatory system.



- Which of the following statement is true about blood vessel marked F it
- carry oxygenated blood
 - is thin walled
 - carry deoxygenated blood
 - is known as pulmonary vein
- A person who receives blood from another person is known as
 - donor
 - reciept
 - receptor
 - blood giver

AGRICULTURE

16. Excess water that flows on the ground is known as
 A. soil erosion B. run off
 C. gabions D. splash erosion
17. Which one of the following farming practices is not good in conserving water?
 A. Mulching B. Shading
 C. Cover cropping D. Cultivating
18. What are creeping crops?
 A. These are crops that naturally spread their weak stems
 B. These are crops that give us fruits
 C. They are cereals
 D. These are legumes
19. The diagram below shows



- A. sunken bed farming
 B. drip irrigation farming
 C. innovative gardening practice
 D. drip irrigation
20. Which one of the following parts includes indigenous food crops?
 A. Arrowroot and maize
 B. Cassava and pineapples
 C. Pumpkin and maize
 D. Cassava and arrowroots
21. Which type of soil erosion sweeps the soil and is not easy to notice?
 A. Splash erosion B. Sheet erosion
 C. Gully erosion D. Rill erosion
22. In the table below on animals domesticated by man, which one is wrongly placed with its use.

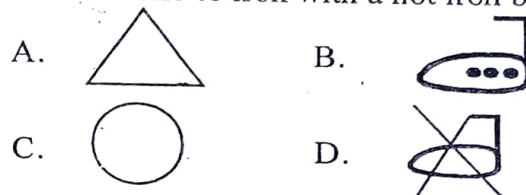
<u>Domestic animal</u>	<u>Uses of domestic animal</u>
A. Guinea pig	Used in laboratories to do experiments on diseases
B. Poultry	Provides meat, eggs and manure
C. Rabbit	Provides manure, fur for making handbag and pillows
D. Dogs	Keeps mice and rats away

23. The following are ways of taking care of seedlings in a garden. Which one is not?
 A. Watering B. Uprooting
 C. Shading D. Thinning

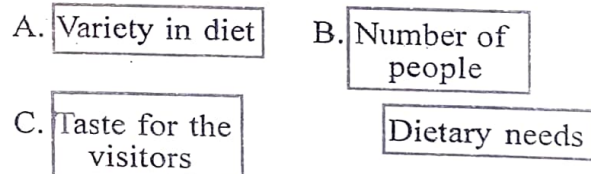
24. The following are creeping crops except
 A. watermelon B. pawpaw
 C. pumpkin D. strawberry
25. Classification of vegetables. Which pair of names of vegetables consists of stem vegetables?
 A. Asparagus and spring onions
 B. cabbage and kales
 C. carrot and beetroot
 D. pepper and tomato

HOMESCIENCE

26. Which one of the laundry symbols instructs one to iron with a hot iron box?



27. Which one of the pairs of things do you need when cleaning a paraffin (kerosene) stove?
 A. Newspaper and cleaning cloth
 B. Paraffin and water
 C. Clean dry plastic container and soap
 D. Old newspaper and a pair of scissors
28. The following boxes contain factors to consider when planning meals for the family. Which one is not?



29. Which one of the following is not recommended first aid for asthmatic attack?
 A. Assist the patient take long and deep breath
 B. Let the person sit upright
 C. Close his/her nose completely
 D. Ensure there is adequate ventilation
30. The following are factors to consider the method of gaping seam to use.
 A. The location of the damage
 B. The stitches to be used
 C. The colour and the quality of the thread to be used
 D. The low cost of gaping
31. The following are needle work tools except
 A. thimble B. iron box
 C. needle D. tape measure

32. Which one of the following is not an accessory?
 A. Scarve B. Cups
 C. Shoes D. Eye pencils
33. Which one of the following changes during adolescence takes place in girls only?
 A. Hips broaden
 B. Wet dreams
 C. Pimples may appear on the face
 D. Increase in weight and height
34. Items that a person applies on his or her face to enhance their appearance is known as
 A. cosmetics B. accessories
 C. powder D. jewellery
35. Repairing of torn clothes before washing is called
 A. sorting B. soaking
 C. mending D. patching

PHYSICAL HEALTH EDUCATION

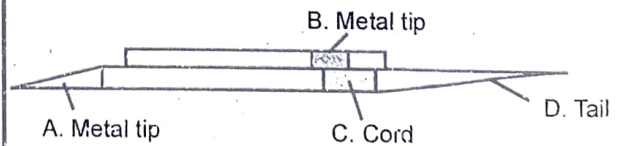
36. The following are equipments used in bucket fun game except
 A. carton B. small ball
 C. bean bags D. water
37. Unauthorised writing or drawing on a public surface is known as
 A. poster B. advertisement
 C. grafitti D. opponent
38. The arched middle portion of the human foot in front of the ankle joints especially its upper surface is known as
 A. instep B. opponent
 C. football D. volleyball
39. The first step of managing open wounds is
 A. applying detol or spirit
 B. cleaning the wound
 C. applying alcohol or swab
 D. bandaging the wound
40. Which one of the following game is correctly matched with its equipment?
 A. Baton - javelin
 B. Shot - crossbar
 C. Crossbar - high jump
 D. Hockey - javelin
41. Which pair consist of two methods of starting techniques?
 A. Drop finish and buch start
 B. Slow match and bullet start
 C. Short races and long race
 D. Warm up and cool down
42. Which one of the following is not one of the skills that can be done to develop balance?
 A. V- balance B. Crouch balance
 C. Hand balance D. Jogging

43. The following items Tom found in the field.
 i) Hockey sticks ii) Antiseptic
 iii) Flag marks iv) Bandage
 v) Pressure pad
 vi) A pair of scissors
 vii) A floater
 Which group of items are found in a first aid box?
 A. (ii), (iv), (v), (vi)
 B. (vii), (v), (i), (ii), (iii)
 C. (vii), (ii), (i)
 D. (vi), (v), (i), (iii)
44. The athletic event where the outgoing runner receives the baton without seeing is known as
 A. visual exchange baton
 B. running exchange
 C. non - visual baton exchange
 D. incoming runner
45. Which part of a rounders bat is not correctly matched?



- D. Knob C. Pole slot B. Barrel A. End cap

46. In a competition, equality, respect for rules and players is known as
 A. running B. default
 C. fairplay D. playing
47. In athletics bunch start is also known as
 A. quick start B. slow start
 C. bullet start D. fair start
48. Which method of finishing a race the athlete bends, pushes all, hands backwards and steps to the finish line?
 A. Marathon finish B. String finish
 C. Drop finish D. Shoulder shrug technique
49. Below is a javelin. Which part is correctly labelled.



50. In high jump, which one of the following is not an equipment used?
 A. Net B. Tape measure
 C. Cross bars D. Upright bars



HIGH POINT EXAM SERIES

GREDI YA 6 - MWAKA 2022

KISWAHILI: LUGHA

NAME: _____ GRADE: _____

Muda: Saa 1

MAAGIZO KWA WATAHINIWA (Soma maagizo yafuatayo kwa makini)

1. Umepewa kijitabu hiki cha Kiswahili na karatasi ya kujibia.
2. Kijitabu hiki kina maswali 30. Ukiisha kuchagua jibu lako, lionyeshe katika **KARATASI YA MAJIBU** na wala sio katika kijitabu hiki cha maswali.

JINSI YA KUTUMIA KARATASI YA MAJIBU

3. Tumia penseli ya kawaida.
4. Hakikisha ya kwamba karatasi ya majibu uliyopewa imejumuiisha yafuatayo:
NAMBA YAKO YA TATHMINI
JINA LAKO
JINA LA SHULE YAKO
JINA LA SOMO
5. Usitie alama zozote nje ya visanduku.
6. Iweke safi karatasi yako ya majibu na usiikunje.
7. Kwa kila swali 1-30 umepewa majibu manne. Majibu hayo yameonyeshwa kwa herufi A, B, C, D.
Ni jibu MOJA tu kati ya hayo manne ambalo ni sahihi. Chagua jibu sahihi.
8. Kwenye karatasi ya majibu, jibu sahihi lionyeshwe kwa kuchora kistari katika kisanduku chenye herufi uliyochagua kuwa ndilo jibu.

Mfano

Katika kijitabu cha maswali:

28. Maneno katika jedwali hili yanastahili kuwa katika hali ya umoja pekee. Chagua jibu lenye maneno yasiyo katika hali ya umoja.

A.	yai	dirisha	chandarua
B.	USO	msusi	mwiko
C.	ufagio	kiti	mswaki
D.	kuni	vifutio	matunda

Jibu sahihi ni D.

Katika karatasi ya majibu:

28. [A] [B] [C] [D]
9. Chora kistari chako vizuri. Kistari chako kiwe cheusi na kisijitokeze nje ya kisanduku.
 10. Kwa kila swali, chora kistari katika kisanduku kimoja tu kati ya visanduku vinne ulivyopewa.

Kijitabu hiki cha maswali kina kurasa 4 zilizopigwa chapa.

Soma mazungumzo haya kisha jibu maswali 1 hadi 5.

- Dizi : Shikamoo Bao?
Bao : _____ mwanangu. Waelekea sokoni kunua mboga
Dizi : Rafiki yangu uda
Bao : Ala! Uda mtoto wa rika yakko kakutumwa?
Dizi : Naam Bao. Yeye katumwa na dadake, dadake katumwa na jirani yake mzee Bisto
Bao : La, huo mfululizo si mzuri, Hebu kimbia na umrejeshe rafiki yako senti zake!
Dizi : Naam Bao (Dizi katimua mbio)

- | | |
|----------------------------------------------------------------------------------------------------------------------------------------------------------------------------------------------------------------------------------------------------------------------------------------------------------------------------|---------------------------------------------------------------------------------------------------------------------------------------------------------------------------------------------------------------------------------------------------------------------------------------------------------------------------------------------------------------------------------------------------------------------------------------------------------------------------------------------------|
| <p>1. Majibu ya heshima ambayo Bao angemjibu Dizi ni gani?
A. Kwa heri ya kuonana
B. Marahaba
C. Mshalheri
D. Makiwa</p> <p>2. Dizi alikuwa anaenda wapi?
A. Kumsalimia babu yake
B. Kutumwa akanunue mboga na jirani yake
C. Kuripoti alivyotumwa
D. Kumrejeshea mzee Bisto pesa yake</p> | <p>3. Je uda alikuwa ametumwa na nani?
A. Dadake B. Mzee Bisto
C. Babuye D. Nduguye</p> <p>4. Jina rika limetumika katika mjadala huu, je ni jina gani linakaribia na maana yake?
A. Mzee sana
B. Mtoto wa mtoto wako
C. Watu wenye umri mmoja
D. Majirani</p> <p>5. Kulingana na taarifa hii ni ukweli kusema kuwa Dizi alikuwa
A. mchezi B. mtiifu
C. mjinga D. pumbavu</p> |
|----------------------------------------------------------------------------------------------------------------------------------------------------------------------------------------------------------------------------------------------------------------------------------------------------------------------------|---------------------------------------------------------------------------------------------------------------------------------------------------------------------------------------------------------------------------------------------------------------------------------------------------------------------------------------------------------------------------------------------------------------------------------------------------------------------------------------------------|

Soma kifungu kisha ujibu maswali.

Ajira ya watoto ni kazi ambazo zinawatumia na kuwaathiri vibaya watoto kati ya miaka mitano hadi kumi na saba. Kwa namna fulani, watoto huathirika kiakili, kimwili, kimakazi na kimaadili, pia; ajira hizi ni kizuizi cha watoto hawa kupata elimu. Mateso yanayowapata watoto katika ulimwengu wa ajira ya watoto duniani ni mengi. Ajira hizi huweza kuwa za nyumbani kwa watu wengine, mashambani au viwandani. Kazi wanazozifanya watoto hawa ni pamoja na kulisha mifugo, kuchimba mawe, kufyatua matofali, kuchonga mawe, ujenzi wa barabara, kuvuta au kusukuma mikokoteni na za ndani ya nyumbani. Zote hizi ni kinyume na haki za binadamu kwa jumla.

- | | |
|----------------------------------------------------------------------------------------------------------------------------------------------------------------------------------------------------------------------|-------------------------------------------------------------------------------------------------------------------------------------------------|
| <p>6. Tumearifiwa kuwa ajira ya watoto huweza kuwaathiri watoto
A. kimaadili, kimakazi na kidini
B. kiakili, kimavazi na kimwili
C. kimakazi, kiakili na kimaadili
D. kiakili, kimwili na kiukoo</p> | <p>7. Kulingana na kifungu, ajira ya watoto haiwezi kuwa
A. nyumbani kwa wengine
B. katika viwanda
C. mashambani
D. shuleni</p> |
|----------------------------------------------------------------------------------------------------------------------------------------------------------------------------------------------------------------------|-------------------------------------------------------------------------------------------------------------------------------------------------|

8. Haki za binadamu hazimkubali mtoto
 A. kuosha vyombo nyumbani kwao
 C. kulifagia darasa lao
 B. kuvuta mikokoteni kwa malipo
 D. kufua sare zake

Soma kifungu kisha ujibu maswali.

Ilibidi chifu wa kijiji chetu aitane mkutano wa hadhara. Wananchi wa kijiji cha Marumo waliapa kuwasaka na kuwaangamiza wezi wote kijijini. Usiku huo ukweli wa methali siku za mwizi ni _____ ulionekana wazi. Walimkuta Bwana Fitina akivuna mahindi ya jirani yake. Walimchapa vibaya na kumpeleka polisi.

- | | |
|---------------------------------------------------------------------------------------------------------------------------------------------------------------------------------------------------------------------------------------------------------------------------------------------------------------------------------------------------------------------------------|------------------------------------------------------------------------------------------------------------------------------------------------------------------------------------------------------------------------------------------------------------------------------------------------|
| <p>9. Je, ni shinda gani ilimfanya chifu aitane mkutano wa hadhara?
 A. Ili kuwadhibu wezi
 B. Ili kuwasaka wezi
 C. Ili kuwaua wezi
 D. Ili kuwachoma wezi</p> <p>10. Je makala haya yanaongea juu ya kijiji gani?
 A. Cha Chifu
 B. Cha mavuno
 C. Cha wezi
 D. Cha Bidii</p> | <p>11. Ni kina nani waliapa na kuangamiza wezi?
 A. Wanakijiji
 B. Majirani
 C. Wezi
 D. Chifu</p> <p>12. Kamilisha methali. Siku za mwizi ni
 A. chache
 B. kifo
 C. arubaini
 D. hamsini</p> |
|---------------------------------------------------------------------------------------------------------------------------------------------------------------------------------------------------------------------------------------------------------------------------------------------------------------------------------------------------------------------------------|------------------------------------------------------------------------------------------------------------------------------------------------------------------------------------------------------------------------------------------------------------------------------------------------|

Soma kifungu kisha ujibu maswali

Kila Jumamosi, Mama yetu huenda sokoni na kutuachia shughuli za kutekeleza nyumbani. Mimi ndimi Mwanambee. Mama huniambia niwe mwangalizi akiwa na shughuli za nje. Kaka zangu wawili na dada zangu watatu hunisaidia kufanya shughuli za ndani. Ni watiifu. Daima hawakaidi maagizo yangu.

Jumamosi moja, mama aliondoka kwenda sokoni kama alivyo zoea. Tuliamua kuzigawa kazi ili tumalize kabla hajarejea. Niliwaambia dada zangu wafue, wasafishe nyumba na kutayarisha chamcha. Kaka zangu walipaswa kufyeka nyasi ndefu na kuulenga ua. Ghafla, nilimsikia mbuzi wetu akilia lo! Ni nani atakayewashughulikia wanyama hawa? Nikauliza.

- | | |
|-------------------------------------------------------------------------------------------------------------------------------------------------------------------------------------------------------------------------------------------------------------------------------------------------------------------------------------------------------------------------------------------------------------------------------------------------|---------------------------------------------------------------------------------------------------------------------------------------------------------------------------------------------------------------------|
| <p>13. Je, familia ya kina mwandishi ina jumla ya watu wangapi?
 A. Saba
 B. Sita
 C. Wanane
 D. Watano</p> <p>14. Kulingana na ufahamu, ni kweli kusema kuwa watoto katika familia hii
 A. hufanya shughuli zao kwa ushirikiano
 B. kila mara hufanya shughuli zao kwa haraka
 C. wamejawa na kiburi na majivuno
 D. ni wazembe kupindukia</p> | <p>15. Mwishowe, ni nani ambaye aliwashughulikia wanyama wa kina mwandishi?
 A. Mwandishi mwenyewe
 B. Kaka wa mwandishi
 C. Dada wa mwandishi
 D. Hatujaelezwa</p> |
|-------------------------------------------------------------------------------------------------------------------------------------------------------------------------------------------------------------------------------------------------------------------------------------------------------------------------------------------------------------------------------------------------------------------------------------------------|---------------------------------------------------------------------------------------------------------------------------------------------------------------------------------------------------------------------|

Jaza pengo

Baada ya ___ 16 ___ masomo, mwama alitokomea na kuyoyomea ___ 17 ___ Mambo. Binti ___ 18 ___ aliyelelewa ___ 19 ___ ya utajiri si umaskini yaani ___ 20 ___ yamkini aliamba, "Ni wengi wamesoma na vyeti wanavyo na lo! Hawana ___ 21 ___ wala bazi. Sisomi tena. La saba lanitoshia. La nane ___ 22 ___ sitalisoma! Mji mkuu naja!"

- | | | | |
|-----------------------|----------------|----------------|----------------------|
| 16. A. kumaliza | B. kuyaasi | C. kuyasoma | D. kuyaenda |
| 17. A. jijini | B. mjini | C. kariani | D. kitongojini |
| 18. A. hawa | B. huo | C. huyu | D. yule |
| 19. A. maishani | B. baitini | C. aulani | D. aushi |
| 20. A. ulalahoi | B. ulalahai | C. ulalaheri | D. uchochole |
| 21. A. maisha | B. chumo | C. bahati | D. kazi |
| 22. A. sijui sitambui | B. kutwa kucha | C. liwe liwalo | D. ashakum si matumi |

Jibu kulingana na maelezo.

Kamilisha sentensi

23. Jabibu alitupatia

- _____ mazuri
- | | |
|-------------|------------|
| A. Timba | B. Matibaa |
| C. Matibabu | D. Utibu |

24. Kijana mwizi alifungwa kwa ajili ya _____ wake.

- | | |
|----------|----------|
| A. wezi | B. mwizi |
| C. uwizi | D. wizi |

25. Jina jingine la ukuta ni

- | | |
|-------------|-----------|
| A. kiambaza | B. kuta |
| C. ukumbi | D. msonge |

26. Umbo hili huitwa



- | | |
|---------------|-------------|
| A. pembe tatu | B. mstatili |
| C. pia | D. mche |

27. Tashbihi

Popo amekonda kama _____

- | |
|------------|
| A. sindano |
| B. ng'onda |
| C. kijiti |
| D. kasuku |

28. Jiwe, lilianguka majini _____

- | |
|------------|
| A. tang' |
| B. pu |
| C. chumbwi |
| D. twa |

29. Jiwe, lilianguka majini _____

- | |
|------------|
| A. tang' |
| B. pu |
| C. chumbwi |
| D. twa |

30. Kiulizi:

Utakuja kwetu _____ ?

- | | |
|---------|---------|
| A. wapi | B. gani |
| C. lini | D. yupi |



HIGH POINT EXAM SERIES

GRADE 6 - YEAR 2022

MATHEMATICS

NAME: _____ GRADE: _____

1 hour 20 minutes

INSTRUCTIONS TO CANDIDATES (Please read these instructions carefully)

1. You have been given this question booklet and a separate answer sheet.
2. The question booklet contains Do any necessary rough work in this booklet
3. When you have chosen your answer, mark it on the **ANSWER SHEET**, not in this question booklet.

HOW TO USE THE ANSWER SHEET

4. Use an ordinary pencil.
5. Confirm that the answer sheet that you have been provided with has the follow
YOUR ASSESSMENT NUMBER
YOUR NAME
NAME OF YOUR SCHOOL
NAME OF SUBJECT
6. Do not make any marks outside the boxes.
7. Keep the sheet as clean as possible and do not fold it.
8. For each of the questions 1- 30 four choices are given. The choices are lettered A, B, C and D. In each case, only **ONE** of the four choices is correct. Choose the **correct** answer from the choices..
9. On the answer sheet, the correct answer is to be shown by drawing a **dark line** inside the box in which the letter you have chosen is written.

Example

In the Question Booklet

11. Work out $2 \times 18 + 17$

- A. 252
- B. 50
- C. 43
- D. 27

The correct answer is C (43).

On the Answer Sheet:

In the set of boxes numbered 11, draw a **dark line** inside the box with the letter C printed in it as indicated below.

[A] [B] [C] [D]

10. Your **dark line** **MUST** be within the box.
11. For each question, **ONLY ONE** box is to be marked in each set of four boxes.

This question paper consists of 4 printed pages

1. Which of the following is four hundred and forty thousand four hundred and four in symbols.

- A. 440440 B. 404404
C. 404400 D. 440404

2. What is the total value of digit 9 in 7928314?

- A. Nineteen thousand
B. Nine thousand
C. Nine hundred thousand
D. Ninety thousand

3. What is the value of $25k + 30n + 10k$

- A. $25k + 40n$ B. $15k + 30n$
C. $55K + 10n$ D. $35k + 30n$

4. Convert $\frac{7}{20}$ into percentage

- A. 7% B. 20%
C. 35% D. 70%

5. Divide:

$$6 \overline{) \text{Sh. } 599 \text{ } 40 \text{ cts}}$$

- A. Sh. 93 80 cts
B. Sh. 80 90cts
C. Sh. 90 99cts
D. Sh. 99 90 cts

6. What is 980931 rounded off to the nearest thousand?

- A. 981000
B. 980930
C. 980900
D. 980000

7. Tom was sent to the shop by her mother to buy the following items.

- $1\frac{1}{2}$ kg of rice @ sh. 50 per kg
- 3 bars of soap @ sh. 85
- 3 boxes of matchsticks for sh. 36
- 4 packets of unga @ sh. 80
- $2\frac{1}{4}$ kg of salt @ sh. 20 per kg

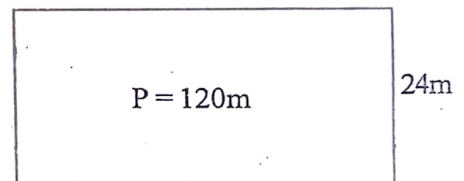
If he gave the shopkeeper 2- five hundred shillings notes, what balance was he given?

- A. 1000 B. 741
C. 259 D. 187

8. Find the LCM of 24, 30 and 48?

- A. 180 B. 120
C. 240 D. 480

9. Find the length of this figure if its perimeter is 120m.

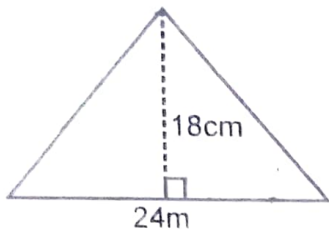


- A. 96m B. 24m
C. 48m D. 36m

10. What is the place value of digit 3 in the number 53418?

- A. Thousands
B. Hundreds
C. Ten thousands
D. Tens

11. Find the area of the figure below.



- A. 144cm^2 B. 324cm^2
 C. 216cm^2 D. 432cm^2

12. Add:

$$249852 + 610297 + 353068 =$$

- A. 1312127 B. 1213127
 C. 1213217 D. 131317

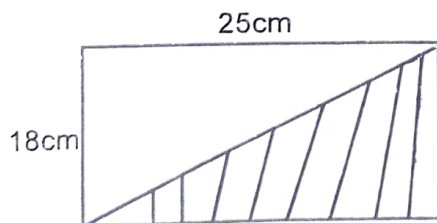
13. The fraction $\frac{3}{4}$, $\frac{2}{3}$, $\frac{4}{9}$ and $\frac{5}{6}$ are to be arranged in order from the smallest to the largest. Which of the following is the correct order.

- A. $\frac{2}{3}$, $\frac{3}{4}$, $\frac{4}{9}$, $\frac{5}{6}$ B. $\frac{4}{9}$, $\frac{2}{3}$, $\frac{3}{4}$, $\frac{5}{6}$
 C. $\frac{4}{9}$, $\frac{2}{3}$, $\frac{5}{6}$, $\frac{3}{4}$ D. $\frac{5}{6}$, $\frac{3}{4}$, $\frac{2}{3}$, $\frac{4}{9}$

14. Convert $7\frac{1}{10}$ kg into grammes

- A. 701g B. 71000g
 C. 710g D. 7100g

15. Calculate the area of the shaded part.



- A. 86cm^2 B. 225cm^2
 C. 450cm^2 D. 235cm^2

16. Write 6 in Roman number.

- A. IX B. XI
 C. IIX D. VI

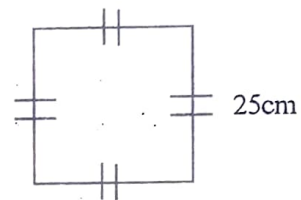
17. $92 + \sqrt{49}$

- A. 57 B. 88
 C. 56 D. 94

18. Change $6\frac{5}{7}$ to improper fraction



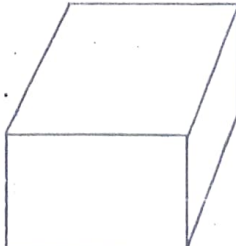
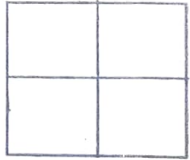
- A. $\frac{96}{7}$ B. $\frac{88}{7}$
 C. $\frac{42}{7}$ D. $\frac{47}{7}$

19. Find the area of the square below.



- A. 625m^2 B. 100m^2
 C. 320m^2 D. 2500m^2

20. Which of the following figure is a cuboid?

- A.  B. 
- C.  D. 

21. There are 124 wards in a referral hospital. Each ward has 14 beds. How many beds are there altogether?

- A. 1763 B. 1736
C. 138 D. 9

22. In an election for governorship, a candidate got 236105 votes in a certain county. What is the total value of the number in the tens of thousands place value.

- A. 100 B. 6000
C. 2000000 D. 30000

23. The area of a square plot of land is 1296m². What is the length of each side of the plot?

- A. 36m B. 63m
C. 33m D. 45m

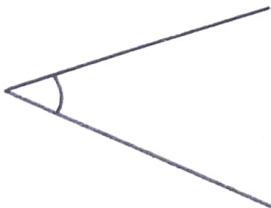
24. What is the value of $64 \times 68 \div 17 - 28 + 16 =$

- A. 420 B. 244
C. 202 D. 240

25. What is $\frac{12}{25}$ written as a percentage.

- A. 52% B. 48%
C. 58% D. 40%

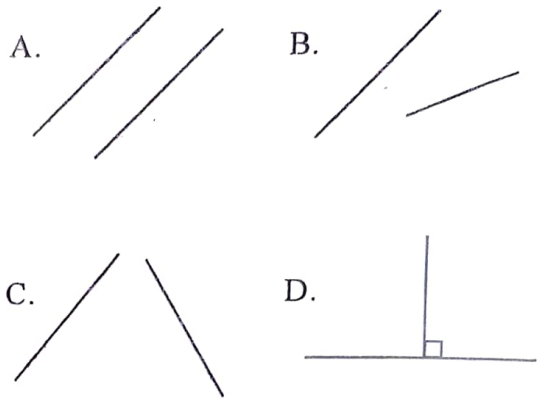
6. The angle below is drawn to scale



What is the measure of the angle?

- A. 50° B. 40°
C. 45° D. 135°

27. Which of the following are parallel?



28. Tom had 5 shed with y sheep each. In total he had 20 sheep. Which of the following equations represents this information?

- A. $20xy = 5$
B. $y + 20 = 5$
C. $20 = 5 - y$
D. $5xy = 20$

29. There are c cows in a school. 6 of them were sold and 10 remained. How many cows were there before?

- A. 106 B. 60
C. 4 D. 16

30. Which of the following is a 3- D object?

