

DISTINCTION EXAMS SERIES 1

KPSEA FIRST TRIAL-23

Class of KPSEA 2024

The PDF Comprises of assessment Questions Meant to prepare the learners to prepare for the KPSEA National Exams set for October 2024.

For Marking Schemes:

Order online at: www.kenyaeducators.co.ke

Or

Contact Kenya Educators Consultancy

0724333200

0795491185

0768321553

Visit our Website kenyaeducators.co.ke or Contact us on 0724333200 for CBC (pp1-grade 6), JSS (Grades 7 and 8) and Highschool levels (Forms 1-4) Exams, Lesson Notes and Schemes of Work, CBC report card books, lesson plans, Curriculum Designs and Official CBC Training Materials.

KENYA EDUCATORS CONSULTANCY

Compiled and distributed by Kenya Educators Consultancy- 0724333200

Website: www.kenyaeducators.co.ke

DISTINCTION UPPER PRIMARY ASSESSMENT



MONITORING LEARNER'S PROGRESS

6
PREMIER


GRADE 6 -2023

001

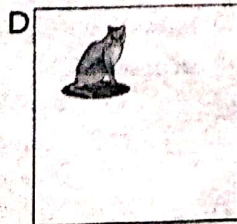



CREATIVE ARTS, SOCIAL STUDIES & RELIGION

PART 1: Art/Craft



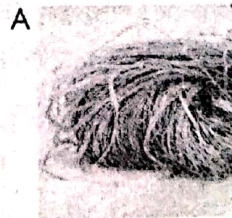
1. What is crayon etching?
A. Cutting and sticking pictures
B. Using dots to shade a picture
C. Scratching off paint or ink from a layer of brightly coloured crayons
D. Mixing wax with various colouring materials
2. The process of adding different coloured paints to make a picture is called _____.
A. carving
B. painting
C. montage
D. crayon etching
3. Why should one avoid working in direct sunlight when crayon etching?
A. To make smooth picture
B. To avoid sweating
C. To ensure gradual blending of colours
D. The wax may melt and spoil the picture
4. What is the name of the picture shown below?




- A. Tonal gradation strip
B. Montage composition
C. Shading
D. Printing
5. Which of the following pictures shows a properly balanced image?



6. In montage, _____ involves putting one picture cut-out on top of another to enable the picture at the back to be partly seen.
A. cutting
B. painting
C. overlapping
D. drawing
7. Using more dots on a drawing shows that the picture has _____ texture.
A. rough
B. smooth
C. soft
D. beautiful
8. An artist will shade a drawing of an object to make it look _____.
A. 3-D
B. lighter
C. brighter
D. darker
9. The following are primary colours expect _____.
A. red
B. orange
C. blue
D. yellow
10. A collage is _____.
A. a picture made by gluing different materials like paper and fabric shapes onto a flat background
B. where you go to school after high school
C. a picture made by drawing with a pencil
D. a good picture
11. Which one of the following materials is **not** used in weaving?



12. The process of making the leather strips marked x is called _____.



- A. cutting
B. preservation
C. thonging
D. beading
13. Give one way of conserving the environment during leatherwork.
A. Re-using old leather materials
B. Cleaning your working area
C. Disposing of water properly
D. Working with others to make leather items
14. You can use a _____ to make holes in your piece of leather.
A. paper punch
B. nail
C. hammer
D. pliers
15. The technique of using dots to create texture in a drawing is called _____.
A. shading
B. stippling
C. colouring
D. etching

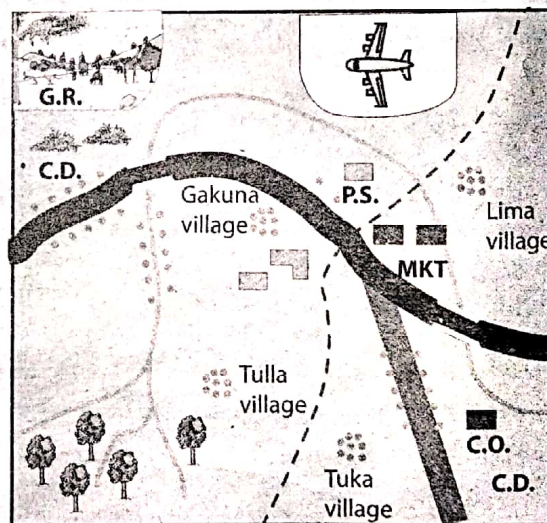
PART 2: Music

16. Which one is not a type of Kenyan indigenous instrument?
A. Percussion
B. String
C. Wind
D. Strumming
17. What kind of instruments are horn, flute, descant recorder and tubular bells?
A. Percussion
B. Shakers
C. String
D. Wind
18. Which of the following is a role in a folk song?
A. Adjudicator
B. Soloist
C. Audience
D. Composer
19. Young boys and girls sing as they play. What type of songs do they sing?
A. Lullabies
B. Sacred
C. Patriotic
D. Singing games
20. In Kenya, traditional costumes and instruments show,
A. How primitive Kenyans are
B. Our cultural heritage
C. How beautiful Kenyans are
D. Our music

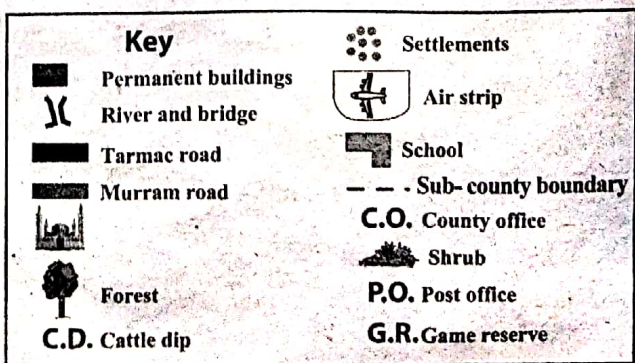
21. During a traditional dance, you noticed the dancers wearing rings, bangles and beads all over their bodies. What could all these be called?
A. Costumes
B. Ornaments
C. Accompaniments
D. Shakers
22. How many strings does a fiddle have?
A. 3
B. 8
C. 5
D. 1
23. Which one of the following is a string instrument?
A. Animal horns
B. Shiriri
C. Descant recorder
D. Bamboo flute
24. What do we call the person who leads a song in a choral performance?
A. Response group
B. Soloist
C. Instrumentalist
D. Audience
25. Which one is not an aspect of folk song?
A. Participants
B. Occasion
C. Instruments
D. Audience

PART 3: Social Studies.

Map of Gakuru Area



Scale 0 1 2 3 4 5 6 7 8 9 10 11 12



Study the map of Gakuru area and answer questions 26 - 28.

26. Gakuru area is likely to be a _____.
- A. Sub county
B. Sub-location
C. County
D. Location
27. The general flow of the river in Gakuru area is likely to be _____.
- A. East
B. West
C. South West
D. North West
28. The population settlement pattern in Gakuru area is _____.
- A. Sparse
B. Dense
C. Scarce
D. Light shade
29. My name is Hajji. I come from Wajir County. Our region experiences low and unreliable rainfall. Temperatures are very high. The climatic region is _____.
- A. Semi-desert
B. Desert
C. South Montane
D. Modified Equatorial
30. Neymar wants to know the human activities that are carried out in plains and plateaus. Which one is it?
- A. Pastoral farming
B. Tea and coffee growing
C. Sports activities
D. None of the above
31. A country that is North West of Kenya is _____.
- A. Tanzania
B. Somalia
C. South Sudan
D. Ethiopia
32. Indian Ocean neighbours Kenya to the _____.
- A. West
B. East
C. North
D. South West
33. The lines of latitude run from _____.
- A. East to West
B. North to South
C. South to North
D. West to East
34. Equator divides the earth into Northern and Southern hemisphere.
- A. True
B. False
C. I don't know
D. Incorrect
35. We can conserve historic built environments by _____.
- A. Putting a perimeter wall around them.
B. Leaving them the way they are.
C. Asking government to intervene.
D. Embracing local tourism.

36. Muchogu was listing the examples of relief features. Which of the following was **not** correct?
- A. Plains
B. Mountains
C. Swamps
D. Valleys
37. In traditional African communities, some of the games and sports were played in the following special events **except** one. Which one is it?
- A. Marriage
B. Birth
C. Worshipping
D. Initiation
38. Kenya has several neighbouring countries. It is surrounded by Uganda to the _____.
- A. North East
B. East
C. South West
D. West
39. Which one of the following is **not** a physical feature?
- A. Hill
B. A Lake
C. A river
D. Elephant
40. Amina wanted to find the direction of school from home on the map. What element of a map was she likely to use?
- A. Map
B. Key
C. Frame
D. Compass

PART 4: Christian Religious Education.

41. Why did Eve agree to eat the forbidden fruit? _____
- A. She wanted to be wise like God
B. She did not know it was forbidden
C. She wanted to be foolish
D. She was not hungry
42. Which one of the following **cannot** increase family unity? _____
- A. Spending time with each other
B. Appreciating every family member
C. Sharing family responsibilities
D. Alcohol and drug use
43. Alison says, 'My talent is drawing.'
Jackson says, 'My talent is playing chess.'
Miranda says, 'My talent is sleeping.'
Derek says, 'My talent is drawing pictures.'
Which one of the above children needs to develop a better talent? _____
- A. Alison
B. Derek
C. Jackson
D. Miranda
44. Rita was feeling very hungry. She did not have anything in her bag to eat. She prayed to God, because she felt shy about begging. To her surprise, when her teacher sent her to the next class, she found a birthday party going on. Rita was told to join in. Which attribute of God is seen in Rita's story?

- A. God is our creator
 B. God is our provider
 C. God is our protector
 D. God is our redeemer
45. How does a doctor use his abilities to fulfil God's purpose?
 A. By treating patients
 B. By charging a lot of money
 C. By making friends
 D. By greeting the patients
46. Which of these children has been denied their rights?
 A. Annete – Arranging the books on the shelf
 B. Brenda – Helping with chores around the house
 C. Imelda- She works in a coffee plantation during school hours
 D. Charles- He can play together with his friends.
47. Sharon was told by her teacher to be careful as she played outside. Sharon did not listen. A few minutes later, Sharon fell down the stairs and got hurt. What is the result of Sharon choosing not to listen to her teacher?
 A. When she disobeyed, she pleased her teacher
 B. She fell down and hurt herself
 C. She was pleased with herself
 D. She received many blessings
48. Which one of the following is a negative emotion?
 A. Happiness
 B. Excitement
 C. Anxiety
 D. Satisfaction
49. Which one of the following is not a value?
 A. Kindness
 B. Hatred
 C. Respect
 D. Integrity
50. Marriage is meant for _____
 A. Children who are less than eighteen years
 B. Children who are still in school
 C. Children who are not educated
 D. People who are above eighteen who are ready for commitment

PART 4: Islamic Religious Education

41. Which surah is an uncle of the prophet cursed?
 A. Masad
 B. Fil
 C. Quraysh
 D. Maun

42. Which city of surah Al-Nasr revealed?
 A. Taif
 B. Makkah
 C. Madina
 D. Hijaz
43. Which one of the following is a verse from surah Al-Kafirun?
 A. "You alone we worship and you alone we ask for help"
 B. "Nor are you worshippers of what I worship"
 C. "Say He is Allah the one"
 D. "From the mischief of those who practice secret art"
44. Faruqdeen, a Grade 5 learner, likes showing off while praying and reciting the Quran. The act is strongly discouraged in Surah _____.
 A. Falaq
 B. Takathur
 C. Humaza
 D. Maun
45. Rahma, a grade 4 learner, was asked by her I.R.E teacher to name the surah that promises the prophet a river in paradise. Which surah do you think she mentioned?
 A. Fatiha
 B. Kauthar
 C. Humaza
 D. Fil
46. When Zubeir, a Grade 6 learner, arrived in the mosque for Dhuhr swalat, he found the imam talking about the events that took place in the year of the elephant. He also mentioned the birth of the prophet. Which surah was the imam discussing?
 A. Fil
 B. Maun
 C. Fatiha
 D. Kauthar
47. Which month was the Qur'an revealed?
 A. Dhul Qaada
 B. Dhul-Hijjah
 C. Muharram
 D. Ramadhan
48. Learners of Grade 5 at Kwashee Primary School were asked to name the favours of Allah to the Quraysh. Who among them was right?
 A. Juma: They were given the custody of the Kaabah
 B. Zakaria: They were given the money
 C. Zuleikha: They were given rain
 D. Zulfa: They were given the Kaabah
49. Backbiting and rumour mongering are vices discouraged in Surah
 A. Humaza
 B. Fatiha
 C. Quraysh
 D. Asr
50. Jamal, a Grade 4 learner, has a habit of not being patient as well as lying to people. Which surah would you advise him to read?
 A. Qariah
 B. Ikhlas
 C. Asr
 D. Humaza

DISTINCTION GRADE 6 (SIX) KPSEA ASSESSMENT



MONITORING LEARNER'S PROGRESS GRADE SIX - 2023

6
PREMIER

001

ENGLISH

Read the conversation below and then answer question 1 – 5.

Amani : Good afternoon friends.

Ali : Good afternoon, Amani?

Tony : What took you so long to come?

Sue : We have been waiting here since ten o'clock.

Amani : Mother asked me to fetch water for before I could leave. Please forgive me, I am sorry.

Tony : Fine. We have forgiven you since it was not your own doing.

Sue : Sure. You know we are taught to obey our parents.

Ali : We must also be helpful to them. That is part of our responsibility.

Amani : Great. Thanks for your understanding. Now that it is our free time, let us do the activities we enjoy.

Tony : Yes, we have to perfect the art together.

Sue : As the saying goes, 'Birds of a feather flock together.'

Ali : You are right. Public speaking is our hobby.


Amani : What is the topic today?

Sue : Excuse me, group. I think we should pray first before we continue.

All : Yes, we should then continue with our topic, which is 'Engaging in leisure activities.'

Ali : Let us begin. Who goes first?

Tony : Yes, we have to take turns.




- | | |
|---|---|
| <p>1. How do we know that Amani was an obedient and polite girl?</p> <p>A. She did what the mother said and sought forgiveness for coming late.</p> <p>B. She was the last to come having done all the household chores.</p> <p>C. She fetched water on behalf of the group.</p> <p>D. She did not bother to say sorry or thank you to her friends for their patience.</p> <p>2. According to the conversation, one of the child's responsibilities is</p> <p>A. to meet her friends and discuss hobbies.</p> <p>B. to ensure mother has water.</p> <p>C. to play outside all day.</p> <p>D. to help the parents with household chores.</p> | <p>3. How did Sue interrupt Amani while talking?</p> <p>A. She was rude.</p> <p>B. She was polite in approach.</p> <p>C. She said what was on her mind.</p> <p>D. She was out of order.</p> <p>4. The word free time can be replaced by</p> <p>A. normal time.</p> <p>B. wasted time.</p> <p>C. crime time.</p> <p>D. leisure time.</p> <p>5. The best title for the conversation above would be</p> <p>A. How to spend leisure time.</p> <p>B. Public speaking with friends.</p> <p>C. When you join your friends late.</p> <p>D. How to do leisure activities with friends.</p> |
|---|---|

Read the passage below and then answer question 6 – 9.

I used to enjoy reading horror stories until I realized how much they impacted on my life. It all started when I was studying late into the night to prepare for my national assessment – Kenya Primary School Education Assessment. I sat in one corner of our huge living room, revising. Since I was all alone in the room, every slight noise I heard scared me out of my wits. I had a feeling that some

invisible creature was watching me as I memorized mathematical formulae.

Every time the curtains fluttered in the wind, my heart would miss a beat. When the neighbour's dog barked, I broke out into goose bumps. Finally, I decided to read aloud so that at least I would have the company of my voice. Unfortunately, I soon felt thirsty from it. I had no choice but to retire. As I lay sleepless on my bed, I swore never to read horror stories again.



- | | |
|---|--|
| <p>6. According to the passage, one of the writer's hobbies was</p> <ul style="list-style-type: none">A. horror movies.B. reading.C. going to bed late.D. listening to music. <p>7. In which class was the writer of this story?</p> <ul style="list-style-type: none">A. Grade 6B. Grade 8C. Grade 5D. Grade 7 | <p>8. According to the passage when you retire it means you have</p> <ul style="list-style-type: none">A. stopped working.B. been sacked.C. stopped reading.D. gone to bed. <p>9. The best title for the passage above would be</p> <ul style="list-style-type: none">A. Why I no longer read.B. Why I stopped reading horror stories.C. When I should read horror stories.D. My childhood nightmares. |
|---|--|

Read the passage below and then answer question 10 – 12.

Human trafficking involves the use of force to transport people for labour for the benefit of others. This is illegal. Human trafficking is a problem which affects children, too. A child who has been trafficked may be forced to work like a donkey without wages. Sometimes trafficked children are forced to go to war as child soldiers. Street children are especially at risk of being trafficked. Children can be victims of human trafficking within or outside the country.

The laws of Kenya protect all children, both boys and girls, from child labour. Children should not therefore be employed. However, children are expected to do some chores at home. This builds their character and helps prepare them for future jobs.

Children need to be protected from abuse, neglect and harmful cultural practices. They should also be kept away from all forms of violence, dangerous work or cruel punishment. Every child should be respected as a human being who has rights and dignity.




- | | |
|--|--|
| <p>10. The act of forcefully making somebody move to go and work to enrich others has been described as</p> <ul style="list-style-type: none">A. Child Abuse.B. Child Labour.C. Child trafficking.D. Child Exposure. <p>11. Three of the following may happen to trafficked children except</p> <ul style="list-style-type: none">A. they work without pay.B. they go to war as child soldiers.C. they can be trafficked outside the country.D. they are only trafficked within their own country. | <p>12. According to the passage,</p> <ul style="list-style-type: none">A. making children do household chores is beneficial.B. anyone making a child to do household chores is practising child labour.C. children should only be protected against abuse and trafficking.D. some children should be respected as human beings who have rights and dignity. |
|--|--|

Read the passage below and then answer question 13 – 15.

It was clear my stepfather did not want me around the house. I hated my life for it was all darkness. I left when I got this opportunity. I now work for a rich family. I begin my work at five o'clock in the morning. By the time I go to sleep, I am totally worn out. One day, I went for a walk when Madam Hellen was away. I met someone who told me that I was too young to be working for pay. She said I should be in school. This opened my eyes. She gave me her business card. When I told Madam Hellen about it, she did not say anything.

After that, I started looking for a way out. I did not want to keep working like a donkey! Where there is a will, there is a way. I am now as sure as sunrise that Madam Hellen will go to pick her last-born child from the boarding school next week. I shall be gone by the time she returns. I shall call the lady whom I believe will help me. When I get a chance to go to school, I shall study hard. I want to become an advocate in the children's court when I complete my studies.



13. By the time the writer goes to bed, she
- is completely exhausted.
 - is happy to have completed the work.
 - reports to Madam Hellen daily.
 - has done all the necessary things.
14. How do we know that Madam Hellen violates children's rights?
- She took the writer away from the grandfather.
 - She did not want to hear about the lady who was ready to support the writer.
 - She employed young people and denied them the chance to go to school.
 - She did not allow the writer a chance to play like any other child.
15. What do we learn about the writer of the story?
- She hated going to school.
 - She wanted to become a lawyer in a children's court.
 - She truly loved working.
 - She was not as hardworking as the Madam Hellen wanted her to be.

Read the passage below. It contains blank spaces numbered 16 – 20. For each blank space, choose the best alternative from the given four.

The employment of young 16 below eighteen years of age is called Child Labour. Work 17 exploits children and interferes with 18 education is not good. Working 19 hours and in unsafe working conditions 20 cause fatigue, tiredness or illness.

16. A. childrens B. children's C. childs D. children
 17. A. which B. that is C. of which D. whose
 18. A. there B. their C. they're D. they'll
 19. A. wide B. tough C. tiring D. long
 20. A. may B. will C. must D. should

For question 21 – 26, choose the best alternative to complete the sentence given.

21. We met _____ people who wanted to stop child labour.
- a lot
 - such
 - a lot of
 - enough
22. Can you think of _____ ways to end child labour?
- some
 - any
 - such
 - enough
23. If you stand near this area, you will _____ the sound clearly.
- here
 - heard
 - hare
 - hear
24. She went to class late, _____?
- didn't she
 - did she
 - isn't it
 - is it
25. My mother loves her _____ dress.
- pink, new, cotton
 - new, pink, cotton
 - pink, cotton, new
 - new, cotton, pink

26. The children sat _____ the shade of the tree after the race.
- under
 - by
 - at
 - in

For question 27 and 28, choose the plural of the underlined word.

27. I saw a goose running across the field.
- geese
 - gooses
 - goose
 - geeses
28. They rested on the bench and talked for hours.
- benchs
 - benches
 - bench
 - benches

For question 29 and 30, choose the opposite of the underlined word.

29. The young lass was forced to do hard work on the plantation.
- lad
 - man
 - girl
 - woman
30. It was a very easy sum to work out.
- simple
 - tough
 - complex
 - difficult

COMPOSITION

CHILD LABOUR SURVEY FORM

Your name

Date

Gender

Age

Name of your school

Name of your teacher

Home address

Types of child labour you are aware of


Why we should stop child labour



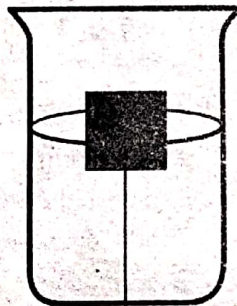
INTEGRATED SCIENCE

SCIENCE AND TECHNOLOGY

- The following are examples of reptiles. Which is **not**?
 A. crocodile
 B. salamander
 C. snake
 D. chameleon
- Zawadi saw his grandmother putting on a jacket during cold weather. From what he observed it can be concluded that animals;
 A. move.
 B. respond to changes in the environment.
 C. reproduce.
 D. feed.
- Water can be made safe for drinking by;
 A. boiling and filtering.
 B. filtering and treating.
 C. treating and boiling.
 D. boiling and preserving.
- Which factor that affects floating and sinking is demonstrated below?



a nail



wood

- material
 - shape
 - density
 - weight
- The part of a computer that is used for processing data is known as;
 A. monitor
 B. CPU
 C. mouse
 D. keyboard

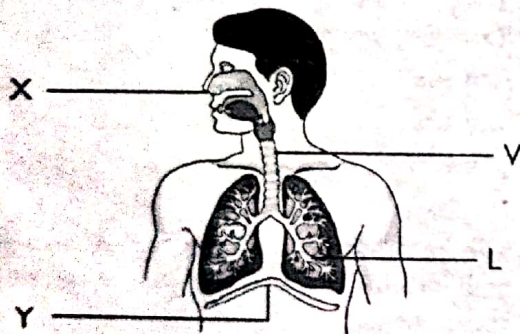
- The item shown below can be used for selecting and scrolling on the desktop or laptop.



Nuru wanted to use his laptop but he did not have it. What would you advise him to use?

- cable
 - mouse
 - track pad
 - buttons
- Which one of the following is a green non flowering plant?
 A. neem
 B. grass
 C. beans
 D. moss
 - Kimani shouted near a big cliff. After a while, he heard his voice back. Why did he hear his voice back?
 A. Because sound travels in all direction.
 B. Because sound can be reflected.
 C. Because sound cannot go through a cliff.
 D. Because sound travels in a straight line.
 - Young amphibians breathe through;
 A. gills
 B. lungs
 C. skin
 D. nostrils
 - The following is useful fungi **except**;
 A. yeast
 B. mushroom
 C. ringworms
 D. moulds

11. We are able to see items in our environment because;
- light travels in a straight line.
 - light travels from our eyes to the items.
 - light travels from the items to our eyes.
 - light cannot travel through a curved pipe.
12. During a Science and Technology lesson, learners poured water in containers made of wood, plastic, metal and clay. After some time, they discovered that the water had different levels of heat. Which container do you think had water with the least amount of heat?
- clay
 - metal
 - plastic
 - wood
13. Which of the following flying animals belongs to a different group?
- a bat
 - an eagle
 - a hawk
 - a vulture
14. Identify the point at which gaseous exchange takes place on the diagram below.

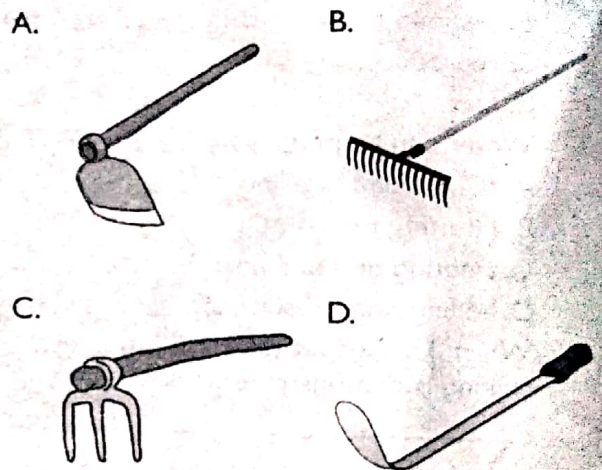


- L
 - Y
 - V
 - X
15. Which sense organ can sense touch?
- nose
 - mouth
 - ear
 - skin

AGRICULTURE

16. Compost manure adds _____ to our crops.
- moisture
 - colour
 - nutrients
 - weight

17. Applying dry leaves and grass at the base around seedlings is known as;
- mulching
 - watering
 - covering
 - conserving
18. _____ a is gardening practice that allows one to have few healthy plants on the garden.
- thinning
 - pruning
 - weeding
 - shading
19. Irrigation of crops should be done in the ____.
- morning
 - noon
 - evening
 - night
20. Which one the following farm tools is used to make the nursery bed level?



21. _____ is planting seeds by scattering them across the agricultural area.
- spreading
 - planting in rows
 - broadcasting
 - sprinkling
22. Which answer has the crops correctly matched with their group?
- | cereal | legume | vegetable |
|------------|------------|------------|
| A. maize | beans | spinach |
| B. wheat | groundnuts | mangoes |
| C. cowpeas | wheat | sukumawiki |
| D. rice | millet | cabbage |
23. An adult male sheep is known as;
- ewe
 - ram
 - bull
 - lamb

24. Tomato fruits that are ready for harvesting are usually _____ in colour.
- purple
 - green
 - orange
 - red
25. Planting sweet potatoes and cassava on the mould instead of ridges helps to control which type of small animals?
- mole
 - mongoose
 - squirrel
 - monkey
26. What improves air circulation on the compost pit?
- adding ash
 - turning it frequently
 - keeping it moist
 - adding compost manure
27. The following are ways of conserving water in farming activities. Which one is **not**?
- mulching
 - shading
 - cover cropping
 - weeding
28. Grade 5 learners were asked to name indigenous vegetables only. Who gave the correct answer?
- Jesse: millet, sorghum, African kales
 - Nuru: sweet potatoes, cocoyams, cassava
 - Prince: spiderplant, cowpeas, jute mallow
 - Zawadi: sukumawiki, spinach, cabbage
29. Why is it advisable not to kill small wild animals that we trap on our land?
- They can harm us
 - We can be arrested
 - They are important to the community
 - They are small and harmless
30. The carrying away of top loose soil is known as _____.
- soil recovery
 - soil conservation
 - soil erosion
 - soil improvement

PHYSICAL HEALTH EDUCATION

31. Which one of the following is not a way of taking care of community recreation facilities?
- Not littering the areas.
 - Planting trees around the area.
 - Teaching people on how to take care of the facilities.
 - Drawing graffiti on the walls of the facilities.
32. What is the very first step of managing an open wound?
- Securing the wound with a bandage.
 - Cleaning the wound.
 - Covering the wound with an adhesive strip dressing.
 - Ensuring that bleeding stops by applying pressure on the wound.
33. The following are causes of nose bleeding. Which one is **not**?
- High altitude
 - Injury to the nose or face
 - Low blood pressure
 - Bleeding disorders
34. The following are hurdling phases. Arrange them in the right sequence.
- landing
 - take off
 - approach
 - hurdle clearance
- iii, ii, iv, i
 - iii, ii, i, iv
 - ii, iii, iv, i
 - ii, iii, i, iv
35. Which of the following is **not** a rule to be followed during long jump?
- Takeoff foot must not cross the takeoff line
 - Use quick long strides on the runway
 - Land with the head leaning forward and the hands behind
 - Land on the pit with knees bent
36. In the game of softball, the defending team is referred to as;
- fielding team
 - batting team
 - defending team
 - attacking team

37. Which one of the following is an importance of sliding in softball?
- to be tagged
 - to avoid injury
 - to hinder an opponent
 - for a better batting
38. In the game of rounders, how can fielders put out batters?
- by stamping the post they are running to
 - by taping the batters
 - by standing next to the post they are running to
 - by stamping the post they are running from
39. Which of the following statements is true about volleyball?
- Each team has five members
 - The court is square in shape
 - The court measures 16m long and 8m wide
 - The court is divided into two halves by a centerline
40. Tag rugby game is characterized by:
- tackling
 - running
 - tagging
 - trapping

HOME SCIENCE

41. The following are disadvantages of using cookers **except**:
- They cook very fast
 - They are expensive
 - Can only be used with electricity
 - It can be risky if not carefully used
42. The removal of dust by the use of a vacuum cleaner is called _____.
- suction
 - dusting
 - blowing
 - sweeping
43. What method of preserving milk do **most** people in the village use to preserve milk for use the following day?
- refrigeration
 - boiling
 - fermenting
 - putting in packets
44. Which one of the following is an advantage of a traditional house?
- It is very durable
 - It provides a lot of security
 - It has several rooms
 - It is easy to construct
45. Which one of the following is **not** a fragile utensil?
- thermo flask
 - a ceramic cup
 - glass
 - a metallic plate
46. The following are factors to consider when choosing food from a general grocery. Identify the **main** factor from the given factors.
- expiry date of the food
 - the weight of the food
 - type of packaging material
 - the price of the item
47. The following advantages of using a shopping list. Which one is **not**?
- It saves time
 - It reduces waste
 - It helps us to buy what we need most
 - It enables us buy a lot of items
48. When Kamau was preparing food, he suddenly noticed that the fuel he was using was finished. Which type of fuel do you think Kamau as using?
- electricity
 - firewood
 - gas
 - charcoal
49. What is the **best** method of providing housing that Kazungu should use to provide a house for his family.
- he should use the employers house
 - he should build a house
 - he should rent a house
 - he should buy a house
50. Which one of the following communicable diseases can be spread by sharing personal items?
- malaria
 - coughs and colds
 - chickenpox
 - cholera

DISTINCTION GRADE 6 (SIX) KPSEA ASSESSMENT

MONITORING LEARNER'S PROGRESS

GRADE SIX - 2023

6
PREMIER




001

MATHEMATICS

Time: 1 hr 20 min

1. Six hundred and forty seven thousand, five hundred and twenty three bedsheets were sold by a certain supermarket in one month. How many bedsheets were sold by the supermarket in symbols?
A. 647423 B. 67423 C. 647520 D. 647523
2. What is 61759 rounded off to the nearest thousands?
A. 62000 B. 1000 C. 61000 D. 6200
3. Asuka noticed the number 7189 is not divisible by 10. What is the smallest number that must be subtracted from this number to make it divisible by 10?
A. 9 B. 1 C. 189 D. 4
4. Grade 6 learners went for a tour at the time shown below. What time was it?



- A. eight minutes past two
- B. ten minutes past eight
- C. ten minutes to eight
- D. eight minutes to two

5. Which of the following is a pair of factors of 51?
A. 2×26 B. 8×9 C. 17×3 D. 19×3
6. When Juma joined grade 6, he realized that there were three beautiful cards written on 12, 8 and 18. What is the greatest common divisor of the three numbers?
A. 72 B. 2 C. 18 D. 4
7. Emna carried 13.836 litres of milk to the market. What is the place value of digit 8 in the number?
A. Tenths B. ones C. tens D. hundredths
8. Find the area of the figure below



8 cm

4 cm

- A. 64 cm^2
- B. 12 cm^2
- C. 32 cm^2
- D. 24 cm^2

9. Sixty three grade six learners carried 12 books each to the headteacher's office. How many books were carried by the learners?

- A. 63 B. 7560 C. 756 D. 75

10. Arrange the following numbers from the largest to the smallest: 4.15, 5.14, 4.51, 5.41

- A. 4.15, 4.51, 5.14, 5.41 B. 5.14, 5.41, 4.51, 4.15
C. 5.41, 5.14, 4.51, 4.15 D. 5.41, 5.41, 4.51, 4.51

11. Work out:

$$\begin{array}{r} \text{l} \qquad \qquad \text{ml} \\ 18 \qquad \qquad 478 \\ - 12 \qquad \qquad 315 \\ \hline \end{array}$$

- A. 5 L 163ml B. 7L 63ml C. 6 L 63 ml D. 6L 163 ml

12. What is $1 - \frac{3}{9}$

- A. $\frac{6}{9}$ B. $\frac{2}{9}$ C. $\frac{1}{9}$ D. 6

13. The county government of Nairobi awarded 185462 students for exemplary performance in both academics and co-curricular activities. Work out the total value of digit 5 in the number.

- A. 185000 B. 5000 C. 186000 D. 500

The frequency table below shows how learners in a certain class performed in a certain Mathematics Assessment Test. Use it to answer question 14 and 15

SCORE %	TALLY MARKS	NUMBER OF LEARNERS
100	///	
90 – 99	### /	
80 – 89	### ## ///	
70 – 79	///	
60 - 69	/	

14. How many learners got 80% and above

- A. 13 B. 22 C. 32 D. 27

15. How many learners sat for this assessment test?

- A. 100 B. 22 C. 60 D. 26

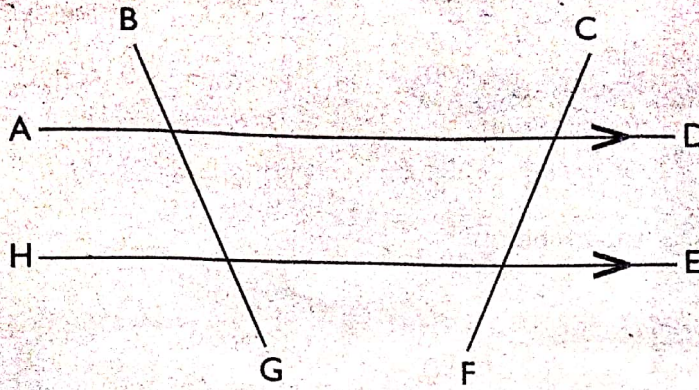
16. Which one of the following is a multiple of 12?

- A. 11 B. 6 C. 36 D. 42

17. Some grade 6 learners visited a certain bank to identify the services offered. Which of the following is **not** amongst the services offered in banks?

- A. Withdrawal of money
B. provide loans and other credit facilities
C. hiding money
D. bill clearance


18. Study the diagram below,



Which of the following is a pair of parallel lines?

- A. BG and FC B. AD and HE C. AD and CF D. AH and DE

19. Use a protractor to measure the following angle:



- A. 45° B. 90° C. 100° D. 80°

20. Shain starts milking her cows five hours after midnight. What time is it in a.m or p.m?

- A. 12.05a.m B. 5.00a.m C. 6.00a.m D. 12.50a.m

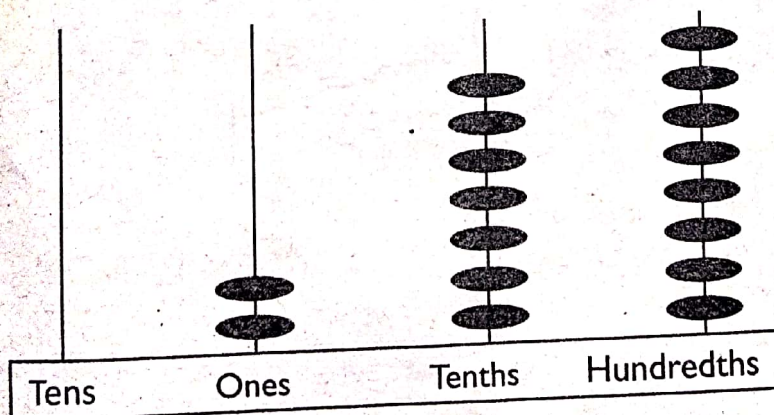
21. Linda took three weeks to learn how to skate. Write the number of days taken by Linda in roman numbers.

- A. X B. XX C. XXI D. VII

22. A piece of cloth of length 12 m and 30 cm was shared equally by 6 people. What length did each person get?

- A. 2m 5cm B. 12m 30cm C. 3m 5cm D. 4m 10m

23. Write the number shown on the abacus.



- A. 278
B. 27.8
C. 0.278
D. 2.78

24. Work out: $3.642 + 1 + 2.34$

- A. 3.877 B. 6.982 C. 5.983 D. 5.992

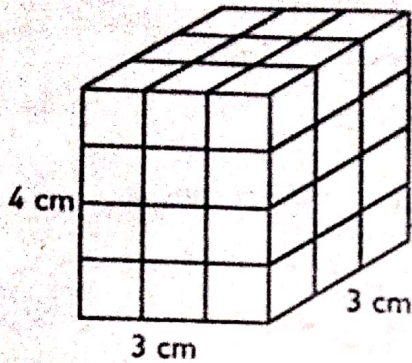
25. Solve the following : $9X + 10 = 91$

- A. 9 B. 8 C. 10 D. 91

26. Grade six learners at Shujaa Primary Schools used a half a litre container to fill a 19 litre container. How many half litre containers did he use?

- A. 19 B. 9 C. 38 D. 2

27. A Grade 4 learner arranged cubes as shown below.



How many cubes did the learner use?

- A. 13 B. 36 C. 10 D. 33

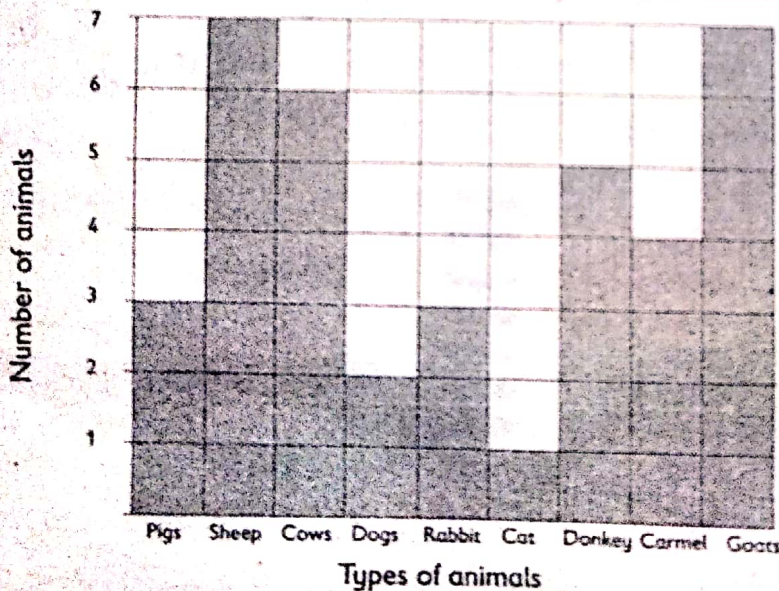
28. Hillary wrote down fractions that are equivalent to $\frac{3}{7}$. Which one of the following fraction is not?

- A. $\frac{9}{21}$ B. $\frac{6}{7}$ C. $\frac{6}{14}$ D. $\frac{30}{70}$

29. A teacher drew a circle on the board, divided it into 6 parts and shaded 5 parts. What fraction of the circle was shaded?

- A. $\frac{6}{6}$ B. $\frac{6}{5}$ C. $\frac{1}{6}$ D. $\frac{5}{6}$

A farmer represented the total number of his animals as shown below:



30. How many animals were in the farm in total?

- A. 38 B. 20 C. 53 D. 47