

DISCOVERY EXAMS SERIES 1

KPSEA FIRST TRIAL-22

Class of KPSEA 2024

The PDF Comprises of assessment Questions Meant to prepare the learners to prepare for the KPSEA National Exams set for October 2024.

For Marking Schemes:

Order online at: www.kenyaeducators.co.ke

Or

Contact Kenya Educators Consultancy

0724333200

0795491185

0768321553

Visit our Website kenyaeducators.co.ke or Contact us on 0724333200 for CBC (pp1-grade 6), JSS (Grades 7 and 8) and Highschool levels (Forms 1-4) Exams, Lesson Notes and Schemes of Work, CBC report card books, lesson plans, Curriculum Designs and Official CBC Training Materials.

KENYA EDUCATORS CONSULTANCY

Compiled and distributed by Kenya Educators Consultancy- 0724333200

Website: www.kenyaeducators.co.ke



GRADE SIX



**DISCOVERY NATIONAL EXAMINATIONS
KCPE GRADE SIX 2022**

LEARNER'S NAME _____

LEARNER'S ADMISSION NO. _____

INSTRUCTIONS TO THE LEARNERS

1. Answer all the questions.
2. Time: 2 hours

**SCHOOL BASED ASSESSMENT
ART & CRAFT / MUSIC**

RUBRICS ASSESSMENT

	Exceeds Expectation	Meets Expectation	Approaching Expectation	Below Expectation
ART				
MUSIC				
P.H.E				

his document consists of 4 printed pages.

Turn over

ART AND CRAFT

1. Name two things you need when constructing 3D block letters. **(2mks)**

a) _____

b) _____

2. Name two elements of Art **(2mks)**

a) _____

b) _____

(drawing, line, smudging, texture)

3. Name three primary colours **(3mks)**

a) _____

b) _____

c) _____

4. List two materials you need to make a pencil case **(2mks)**

a) _____

b) _____

5. Name two methods of decorating coiled pots; **(2mks)**

a) _____

b) _____


6. Write the message below using 3D block letters **(3mks)**

drink water

7. Another name for adhesive is _____ **(1mk)**

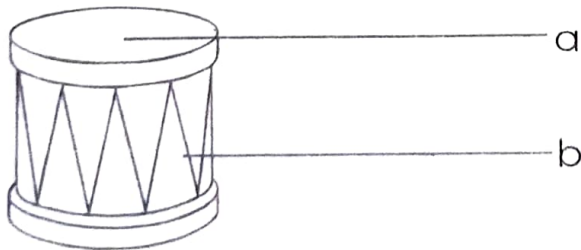
8. Pinch pots are also known as _____ **(1mk)**

9. Using cross hatching technique draw a human form **(4mks)**



MUSIC

1. A descant recorder is played by _____ (1mk)
2. Name two instruments used in folk song from your community (2mks)
 - a) _____
 - b) _____ (drum, descant, recorder, shakers)
3. Draw two dance formations (2mks)
 - a) _____
 - b) _____
4. The National Anthem has _____ verses. (1mk)
5. List down two wind instruments (2mks)
 - a) _____
 - b) _____ (coro, drum, adet, shaker)
6. Name two costumes used in folk dance (2mks)
 - a) _____
 - b) _____
(head gears, shields, sisal skirts spears)
7. Name two occasions when folk songs are performed (2mks)
 - a) _____
 - b) _____
8. Name two types of songs (2mks)
 - a) _____
 - b) _____
9. _____ is how high or low sound is (1mk) (Rhythm, pitch)
10. Name the following parts of a drum (2mks)



(skin resonator, tuning lace, ring)

11. Percussion instruments are played by _____ or _____
(blowing, hitting, shaking, plucking) (2mks)
12. We should dance on a clean floor _____ (true, false)

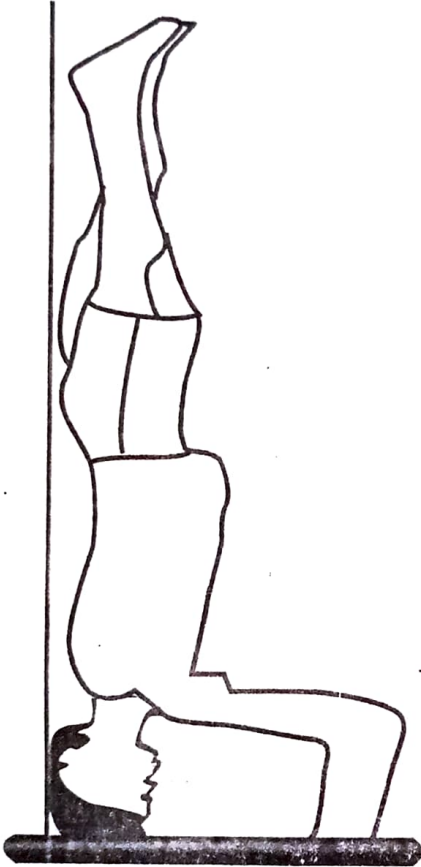
PHYSICAL EDUCATION

1. Name two types of passes used in soccer (2mks)

a) _____

b) _____

2. Name the skill shown below (1mk)



(handstand, headstand)

3. List two active leisure activities (2mks)

a) _____

b) _____

4. A _____ is a player who enters the opponents court. (1mk)

5. Write two equipments used in the tag Rugby game (2mks)

a) _____

b) _____

6. Name two body parts used in swimming (2mks)

a) _____

b) _____



GRADE SIX

DISCOVERY
001

DISCOVERY NATIONAL EXAMINATIONS
KCPE GRADE SIX 2022

LEARNER'S NAME _____

LEARNER'S ADMISSION NO. _____

INSTRUCTIONS TO THE LEARNERS

1. Answer all the questions.
2. Time: 2 hours

SCHOOL BASED ASSESSMENT
LANGUAGE

SECTION B

TASK	E.E	M.E	A.E	B.E
1. LISTENING & SPEAKING	8 - 18	5-7	03 - 4	0 - 2
2. LANGUAGE USE	31 - 40	21-30	11 - 20	0 - 10
3. WRITING	16 - 20	11 - 15	5 - 10	0 - 4

This document consists of 4 printed pages.

TASK 1: LISTENING AND SPEAKING

Your teacher will read for you a short passage. Listen keenly and then answer the questions you will be asked.

The chief in my village is a tall, fat man. I do not know his real name but everyone calls him Mkubwa because everything about his body is big. He has a long chin, a huge stomach and a long bald. His voice is high-pitched as he speaks and threatens small children when they hear it. His eyes look as if they were meant for other sockets.

He wears a long overall and a red cap. Many people in our village fear him. They say he is a strange man. His things are not easily stolen. He often walks in the village with his dog. As he tries to greet people, they usually walk away.

1. The chief in our village is a _____, _____ man.
2. Why is the chief called Mkubwa?
3. Mkubwa wears _____ and _____
4. His eyes look like they were meant for other sockets. This is because they are _____
5. He often walks with his _____ in the village.

TASK 2: LANGUAGE USE AND FUNCTION

A. Read the passage below. It contains blank spaces 1 to 10. Choose the best

word from those in the box below to fill the blanks

One _____ (1) Jane woke up very _____ (2). She had a feeling that something was _____ (3). She could not tell _____ (4) it could be as it was very _____ (5). She slowly got out of _____ (6) and went to the sitting _____ (7). There was _____ (8) there. She _____ (9) her mum. There was _____ (10) answer.

Wrong	bed	room	no	early	quiet
nobody		morning	what	called	

B. Underline the personal pronouns in the sentences below.

11. This is my car.
12. Our dog was taken to the vet yesterday.
13. Is this your bag or Kimwaki's?

C: Use the correct form of the words in the brackets to complete the sentences below.

14. The monkey is _____ than the hyena. (clever)
15. This is the _____ story I have ever read. (bad)
16. Of the twins, Terry is _____ (pretty)

D. Use the following words to complete the sentences below.

a few enough a little little most few

17. When cooking food, very _____ salt is needed.
18. The teacher asked _____ pupils to go out.
19. _____ of the teachers come to school early.

E. Use 'will' or 'shall'

20. _____ you help me carry this bag, please?
21. I _____ visit him tomorrow.
22. We _____ bring the items for the experiment tomorrow.

F: Complete the following sentences with the correct question tag.

23. We did our homework yesterday, _____?
24. The teacher was writing notes, _____?
25. The farmers were weeding their farms, _____?

G. Complete the following collective nouns.

26. A congregation of _____
 27. A _____ of cattle.
 28. A _____ of fish
- (flock, shoal, herd, worshippers, people)**

H. Underline the adverbs in the sentences below.

29. Kimotho left the room hurriedly.
30. The hungry child ate his food greedily.

I. Read the passage below and answer questions 31 to 40.

Peggy and Penny decided to visit their grandmother during the holiday. They were fond of her because she could tell them stories in the evening. They would help her dig the farm and fetch water from a nearby river.

One day, as they were on their way to the river, they saw a shining object and decided to take it. When they went near it, they saw a talking stone. It told them not to continue with their journey for there was a dangerous crocodile there.

Peggy and Penny decided to keep the stone to protect them from danger. The stone heard them and told them if they took it to the house, it won't help them in any way for it needed to be in an open air to get the messages to be given to the people.

They thanked the stone and went back to their grandmother. They narrated all they had seen to her. She laughed until you could see her only tooth.

31. When did the children go to visit their grandmother?

32. Why were the children fond of their grandmother?

33. Where did they fetch water from? _____
34. what did the children see on their way to the river?

35. The stone told them not to continue with their journey because

36. Why did they decide to keep the stone? For the stone to

37. The stone told them it should be kept in _____
A. The house
B. The pocket
C. In an open place
38. Did they carry the stone home? _____
39. When they narrated all they had seen to their grandmother, she

40. How many teeth did their grandmother have? _____



GRADE SIX

**DISCOVERY
001**

**DISCOVERY NATIONAL EXAMINATIONS
KCPE GRADE SIX 2022**

LEARNER'S NAME _____

LEARNER'S ADMISSION NO. _____

INSTRUCTIONS TO THE LEARNERS

1. Answer all the questions.
2. Time: 2 hours

**SCHOOL BASED ASSESSMENT
HOME SCIENCE**

RUBRICS ASSESSMENT

Exceeds Expectation (4) 16-20	Meets Expectation (3) 11-15	Approaching Expectation (2) 5-10	Below Expectation (1) 0 - 5

1. Write three materials you will need when cleaning a cemented surface (3mks)

- a) _____
- b) _____
- c) _____

2. Diseases that can easily spread from one person to another are called (1mk)

3. Give two examples of skin diseases (2mks)

- a) _____
- b) _____

4. Nyambura has opened a shop in town where she sells baby clothes. Write two media she can use to advertise her shop. (2mks)

- a) _____
- b) _____

5. Before buying items especially foodstuffs, it is important to check the _____ date. (1mk)

6. Macro-nutrients are required by the body in large quantities. Write three of them (3mks)

- a) _____
- b) _____
- c) _____

7. The following are some sources of food. Which nutrients do they provide in the body? (1mk)



8. Name two examples of food that can be deep fried. (2mks)

- a) _____
- b) _____

9. A child was taken to the hospital with the following signs and symptoms.

- i) Thin brownish hair
- ii) Swollen arms, feet and face
- iii) Sores at the corners of the mouth
- iv) Pot belly

The child was likely to be suffering from; (1mk) _____

- A. Marasmus
- B. Kwashiakor
- C. Covid 19

10. The diagram below shows a



_____ (1mk)

11. The diagram below shows an embroidery stitch. It is called;




_____ (1mk)

(chain stitch back stitch, running stitch)

12. Name one natural fibre (1mk)

b) The diagram below shows a care label symbol. What does it mean?



- A. Use a hot iron
- B. do not iron
- D. do not dry clean



GRADE SIX

DISCOVERY

001

**DISCOVERY NATIONAL EXAMINATIONS
KCPE GRADE SIX 2022**

LEARNER'S NAME _____

LEARNER'S ADMISSION NO. _____

INSTRUCTIONS TO THE LEARNERS

1. Answer all the questions.
2. Time: 2 hours

**SCHOOL BASED ASSESSMENT
MATHEMATICS**

RUBRICS ASSESSMENT

Exceeds Expectation (4)	Meets Expectation (3)	Approaching Expectation (2)	Below Expectation (1)
16-20	11-15	5-10	0-5

This document consists of 4 printed pages.

1. Round off to the nearest hundred

a) 7849 _____

b) 10351 _____

2. What is the place value of digit 6 in the following numbers.

a) 35601 _____

b) 306 _____

c) 261739 _____

3. Work out;

a) 421040

b) 387555

+ 340330

+ 501621

c) 874437

- 236120

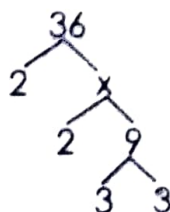
d) $834240 - 470456 =$

4. A triangular plot has a height of 12m and a base of 70m. Calculate its area;

5. Estimate the product of the following numbers by rounding off each number to the nearest ten.

$417 \times 14 =$

6. Find the value of x



7. What is the place value of digit 4 in 306.842?

8. Work out;

a) 749

b) 332

$\times 27$

$\times 85$

c) $307 \times 97 =$

9. John spends sh 350 per day. How much money does he spend in 16 days?

10. Complete the pattern

325, 356, 389, 424, _____

11. Work out;

a) $243 \div 3 =$

b) $9 \overline{)432} =$

c) Asha had 1002 sweets. She shared among her 6 friends. How many sweets did each get?

12. Work out

a) $468 \div 13 =$

b) $468 \div 36 =$

c) $36 \times \square = 468$

d) $13 \times \square = 468$

13. Shade $\frac{2}{3}$



Simplify;

14. a) $\frac{8}{12}$

b) $\frac{64}{100}$

15. John took $\frac{1}{4}$ litres of milk, Mark $\frac{2}{4}$ took litres of milk. How much litres did they take altogether?

16. Work out;

a) $\frac{2}{9} + \frac{3}{9} =$

b) $\frac{5}{8} - \frac{7}{16} =$

c) $\frac{3}{5} - \frac{2}{5} =$

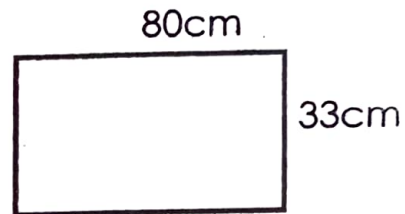
17. Convert the following meters into kilometers.

a) 16000m =

b) 320000m =

18. A driver started a 350km 400m journey. He had a puncture 200km 100m away from his destination. Calculate the distance he covered before the puncture.

19. What is the area of the rectangle below?



20. What is the area of a square whose length is 32m?

21. Calculate the volume of a brick which measures 46cm by 33cm by 20cm.

22. John bought a carton in the shape of a cube. Each side measured 16cm. What was the volume of the carton in cm^3 ?

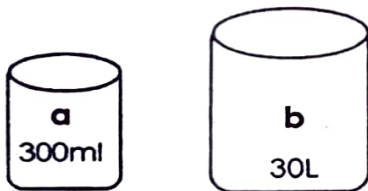
23. Convert the following litres into millilitres

a) 18 litres 50ml

b) 786 litres

24. A school uses 40 litres 100ml of milk in a day. How much milk does the school use in 5 days?

25. How many containers of **a** will fill container **b**?



26. Sam harvested 450kg of honey from 5 beehives. How much honey did he harvest from each beehive?

27. Jane slept for 50 minutes. How much was this time in seconds?

28. What is the time?



29. Juma bought clothes worth sh 8000. He paid sh 6500. How much tax did he pay?

30. Susan saves sh 95 everyday. How much does she save in 2 weeks?

31. In a school there are 380 pupils. There are 155 boys and **y** girls. Form a simple equation you can use to find the value of **y**

32. Find the value of **x** in the equation $x \times 5 = 20$



GRADE SIX

DISCOVERY
001

DISCOVERY NATIONAL EXAMINATIONS KCPE GRADE SIX 2022

LEARNER'S NAME _____

LEARNER'S ADMISSION NO. _____

INSTRUCTIONS TO THE LEARNERS

1. Answer all the questions.
2. Time: 2 hours

SCHOOL BASED ASSESSMENT SCIENCE & AGRICULTURE

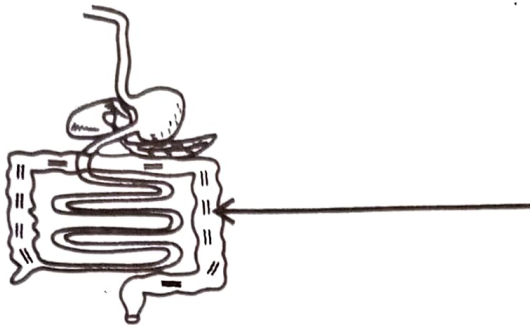
RUBRICS ASSESSMENT

	Exceeds Expectation (4) 16-20	Meets Expectation (3) 11-15	Approaching Expectation (2) 5-10	Below Expectation (1) 0 - 4
SCIE & TECH				
AGRICULTURE				

This document consists of 4 printed pages.

PART 1: SCIENCE & TECHNOLOGY

- Plants are classified into two groups; _____ and _____ (1mk)
- Name the part of the human digestive system marked below. (1mk)



- The type of tooth below is used for _____ (1mk)



- Grade 6 learners were told to bring a slice of bread. They kept their slices in the Science corner for a week. Black and green patches seen on the slices of bread are called _____ (1mk)
- Penicillin is an important fungi which is used for making _____ (1mk)
- When using the laptop or a computer, we type words, numbers and characters on the _____ (1mk)
- The following are vertebrates.
Elephant, Turkey, Lizard, Newt, Tilapia.
Group the animals into the group it belongs to. (5mks)

Mammals	Birds	reptiles	Fish	Amphibians

- A push or a pull applied on an object is called _____ (1mk)
- The human skeleton has different parts. which one of the following is not a part of human skeleton? _____
(backbone, tongue, ribcage, limb bones) (1mk)
- Which one of the following is not true about the windpipe? (1mk)
 - It has C-shaped rings
 - It is sponge like
 - It divides into two as it enters the lungs
 - It connects to the lungs

11. What do we call infections that are caused and spread through drinking or coming into contact with contaminated water?

12. John has a habit of eating undercooked meat. Which internal parasite is he likely to be infested with? _____ (1mk)
13. The 3RS teaches us how we can manage solid waste in many ways that help us to conserve the environment. Name one of the 3RS that means coming up with ways to stop producing waste.
_____ (1mk)
14. The process by which a solid changes directly to a gas is called _____ (1mk) (**deposition, sublimation, evaporation**)
15. The following are examples of bases except (1mk) _____ (**baking powder, lemon juice, soap, toothpaste**)
16. One Sunday afternoon, Jane sat under a mango tree. Suddenly one mango fell down and hit her on the head. She also noticed leaves falling on the ground. What do you think caused the fruit and the leaves fall? _____ (1mk)

AGRICULTURE

1. What is soil erosion? _____ (1mk)
2. After heavy rainfall, some water does not sink into the ground. It runs on the ground surface. This water is called _____ (1mk)
3. Write down one farming practice that conserve water
_____ (1mk)
4. Name one method a farmer can use to keep away wild animals from destroying crops and the farm animals without killing them (1mk)


5. Grade six learners went for a walk in the school garden. They found climbing fruits guided along wires like the diagram below.



What do we call this practice of supporting and guiding the climbing fruit plant _____ (1mk)

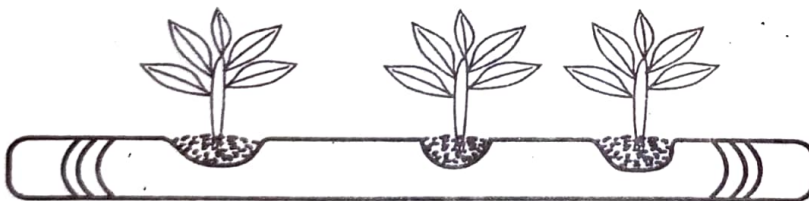
6. Write down one domestic animal that is kept for beauty at home (1mk)

7. What do we call the traditional foods that our great grandparents used to eat _____ (1mk)
8. Which one of the following crops is the odd one out?
A. Yams B. Rice C. Arrowroots D. Cassava
9. Name the following tools and equipments illustrated in the picture below. (2mks)



10. Grade six learners from Ihwa Primary school transplanted their seedlings to the main garden. After three days, they found some seedlings had dried up. They replaced with young healthy ones. What do we call this practice? _____ (1mk)
11. Seeds of some vegetable crops are first raised in a _____ before they are transferred to the _____
(seedbed, nursery bed)
12. Write down three materials for making innovative gardens (3mks)
 - a) _____
 - b) _____
 - c) _____

13. The picture below shows an innovative garden.



Name the innovative garden (1mk) _____

14. Write down four common gardening practices. (4mks)
 - a) _____
 - b) _____
 - c) _____
 - d) _____



GRADE SIX

**DISCOVERY
001**

**DISCOVERY NATIONAL EXAMINATIONS
KCPE GRADE SIX 2022**

LEARNER'S NAME _____

LEARNER'S ADMISSION NO. _____

INSTRUCTIONS TO THE LEARNERS

1. Answer all the questions.
2. Time: 2 hours

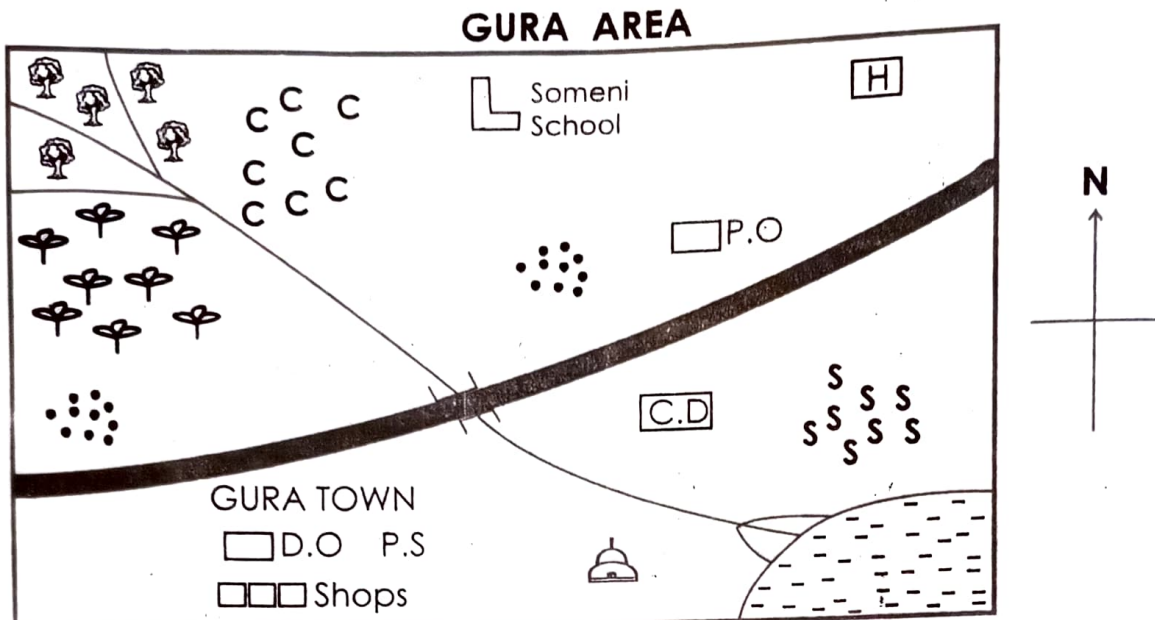
**SCHOOL BASED ASSESSMENT
SOCIAL STUDIES & RELIGIOUS ACTIVITIES**

RUBRICS ASSESSMENT

	Exceeds Expectation	Meets Expectation	Approaching Expectation	Below Expectation
SOCIAL STUDIES	20-25	13-19	7-12	0-6
C.R.E	12-15	8-11	4-7	0-3

This document consists of 4 printed pages.

Study the map below and answer question 1 to 5.



KEY:

Cattle Dip	Tarmac road	Sugarcane
District officer	Tea	Hospital
Mosque	Post office	Coffee
Settlements		

Use the map of Gura area above and use it to answer questions 1 to 5

- Which element of a map is missing from the above map?
_____ (1mk)
- Which crops are grown in Gura area? (3mks)
 - _____
 - _____
 - _____
- People in Gura area belong to _____ religion. (1mk)
(christianity, islam, hindu)
- What is the direction of the hospital from Gura town?


- The **main** means of transport in Gura area is _____ (1mk)

- The following are elements of a map except;
 - Key
 - Scale
 - Colour
 (1mk)
- Match the following communities with the language group they belong to; (4mks)
 - Akamba _____
 - Maasai _____
 - Rendille _____
 - Luo _____
- The following are ways through which children were taught in the past except; (1mk)
 - Apprenticeship
 - reading story books
 - story telling

9. The number of people living per square kilometer is known as _____ (1mk)

- A. population
- B. population distribution
- C. population density

10. The method of fishing shown in the diagram below is known as _____ (1mk)



- A. Trawling
- B. Net drifting
- C. Basket fishing

11. Which colour of the National flag represents the blood that was shed during the struggle for independence in Kenya? (1mk)

12. Write down the four national symbols in Kenya (4mks)

- a) _____
- b) _____
- c) _____
- d) _____

13. Which one of the following is not a modern method of communication? (1mk)

- A. Mobile phones
- B. Television
- C. Beating drums

14. Write the meaning of the following road signs (2mks)



a) _____ b) _____

15. The main tourist attraction in Kenya is: _____ (1mk)

16. _____ is the people's way of life. (1mk)

CHRISTIAN RELIGIOUS ACTIVITIES

1. Which prophet had a challenge with the prophets of Baal on mt. Camel? (1mk)

2. _____ saw a burning bush when he was looking after his father-in-law's sheep. (1mk)

3. Write three qualities of a good leader. (3mks)

i) _____

ii) _____


iii) _____

4. John the Baptist was the son of _____ and Elizabeth (1mk)

5. "This is my dear son, with whom I am well pleased." These words were said during the; (1mk)

- A. birth of Jesus
- B. Crucifixion of Jesus
- D. Baptism of Jesus

6. Happy are the pure in heart for they shall _____ (1mk)
 A. see God
 B. be comforted
 D. be called sons of God
7. Write two importances of prayer (2mks)
 i) _____
 ii) _____
8. Circle and write three gifts of the Holy Spirit from the table below.
- | | |
|----------|-----------|
| GOODNESS | LOVE |
| HUMILITY | WISDOM |
| HEALING | |
| PEACE | PREACHING |
- a) _____
 b) _____
 c) _____
9. Which social media site is shown by the symbol below (1mk)



_____ (facebook, whatsapp, youtube)

10. Write one appropriate way of using the above social media site (1mk) _____

ISLAMIC RELIGIOUS ACTIVITIES

- Muslims pray and seek guidance from _____ alone.
- When praying every raka'a a muslim reads Surah _____
- As a muslim, my religion is called _____
- Islam has got _____ pillars.
- Name two surahs that are called Muadhatein _____ and _____
- After performing Wudhu before I pray I should face _____
- The Holy book for Muslim is called _____
- A good muslim should pray _____ times a day fardh prayers.
- How many surahs are mentioned in the Holy Quran. _____
- Which prayer is performed at lunch hour? _____
- Hassan was heard in the class saying that he fasted for 30 days. Which month did he fast 30 days? _____
- The person who calls muslim for prayers is called _____
- Name two animals that were created by Allah and give us meat and milk. _____ and _____
- All dirty things in Islam are called _____
- Our prophet is called _____



GRADE SIX

DISCOVERY

001

**DISCOVERY NATIONAL EXAMINATIONS
KCPE GRADE SIX 2022**

JINA LA MWANAFUNZI _____

NAMBARI YA MWANAFUNZI _____

MAAGIZO KWA MWANAFUNZI

1. Jibu maswali yote.
 2. Onyesha kazi yako kwa nafasi uliyopewa.
 3. Jibu maswali inavyostahili
- Masaa mawili

**SCHOOL BASED ASSESSMENT
KISWAHILI**

VIWANGO VYA KUTATHMINIWA

	Kuzidisha matarajio	Kufikla matarajio	Kukaribia matarajio	Mballi na matarajio
KUSIKILIZA NA KUZUNGUMZA	9 - 10	5 - 8	3 - 4	0-2
MATUMIZI YA LUGHA	31 - 40	21 - 30	11 - 20	0-10

A: KUSIKILIZA NA KUONGEA

Mwalimu wako atakusomea kifungu kifupi. Sikiliza kwa makini kisha ujibu maswali atakayokuuliza.

Usafi ni kitu muhimu sana maishani mwa binadamu. Usafi una mambo mengi mno. Tunapotaja usafi, watu wengi hudhani tunazungumzia kuoga tu. La siyo.

Ni kweli jambo la kupewa kipaumbele ni usafi wa mwili ambapo ni kuoga na kuvaa nguo safi. Lakini zaidi ya hayo ni yale mazingira tunayoishi.

Pahali mtu anapoishi panafaa pawe safi. Viwe ni vyombo avitumiavyo au nyumba aishiyo. Fauka ya hayo, hata chakula tunachokula, ni lazima kiwe safi.

1. Kitu cha muhimu sana maishani mwa binadamu ni;
2. Jambo la kupewa kipaumbele ni; (2mks)
3. Usafi wa mwili ni ___ na ___ (2mks)
4. Taja vitu vitatu ambavyo mwandishi amesisitiza lazima viwe safi (3mks)
5. Kinyume cha usafi ni; (2mks)

SEHEMU YA PILI

A. MATUMIZI YA LUGHA

Soma kifungu kifuatacho. Kina nafasi 1 mpaka 10. Tumia maneno uliyopewa kwenye jedwali kujaza pengo.

Nilikuwa ningali mchanga kwa umri wangu (1) _____. Nilipofikisha miaka (2) _____ nilijiona ninaishi kwa upweke (3) _____. Kila asubuhi ndugu (4) _____ walikuwa wakivalia mavazi yaliyolandana kisha baadaye wanajitwika mikoba (5) _____ ikining'inia mabegani.

Sikuchoka kuuliza mjakazi niliyemjua kwa jina tu "Anti" (6) _____ mimi huanifulia nguo kama zile?" (7) _____ kwangu lilisalia kuwa swala nyeti ilhali kwake lilikuwa balagha.

Sasa ulikuwa ni (8) _____ wangu. Baba hakwenda kazi (9) _____ ilivyokuwa desturi. Kuamka mapema na kuabiri gari (10) _____ dogo na jeupe pepepe.

lake	mitano	huku	wakati	mdogo
zangu	hilo	kama	mwingi	mbona

B: Ambatanisha maamkuzi na majibu yake.

11. Shikamoo! _____
12. Hujambo! _____
13. Alamski _____

binuru, marahaba, sijambo, ya kuonana

C. Kamilisha tashbihi zifuatazo

14. Mweusi kama _____
15. Ringa kama _____
16. Wazi kama _____

mchana, makaa, tausi, kupe

D. Andika kinyume cha maneno yaliyopigwa mstari katika sentensi zifuatazo.

17. Alipojikwaa, Bakari alilia kwa uchungu _____
18. Mama alinunua mayai matano _____
19. Mlinzi aliketi langoni _____
20. Karani anapenda kucheka ovyo ovyo _____

E. Jaza pengo kwa kugeuza kitenzi kilicho kwenywe mabano katika kauli ya kutendeka.

Mfano: Hati hii ina _____ vyema. (soma)
Hati hii inasomeka vyema

21. Maji yali _____ sakafuni (mwaga)
22. Daraja limebomoka haliwezi ku _____ (pita)
23. Vitabu vilipangwa vika _____ vizuri. (panga)

F. Andika kisawe cha;

24. Maskini _____
25. Msichana _____
(banati, fukara, tajiri, kipusa)

G. Chagua nomino zilizo katika ngeli ya U-YA



26. _____

27. _____

H. Andika sentensi zifuatazo kwa wingi

28. Meza itatengenezwa kesho _____
29. Wimbo huo unapendeza _____
30. Ipi si nomino ambata kwa zile ulizopewa? _____
A. Mwanajeshi
B. Parachichi
C. Mlindalango

I. **Soma habari ifuatayo kisha ujibu maswali 31-40**

Jina langu ni Kiprono. Wanafunzi wenzangu wananiita Kip. Hilo silo jina langu. Hilo ni jina la utani tu. Sikilizeni nitawaambia kwanini ninaitwa jina la Kip. Jina la kubandikwa.

Wakati shule zilipofungwa, sisi humzuru nyanya yetu. Nyanya yetu huishi katika kijiji cha Kisauni. Yeye ana bustani kubwa sana. Katika bustani hilo yeye hufuga ng'ombe, kodo, mbuzi, kuku, bata na bata mzinga.

Nilienda kumtembelea nyanya yangu katika likizo moja. Nilipokuwa huko, nilimwonyesha jino langu ambalo lilikuwa linaregarega, lilitaka kung'oka.

Nyanya aliliangalia jino langu kwa makini na kuniambia ni lazima ling'olewe. Mimi sikutaka ling'olewe, lakini nyanya yangu alinibembeleza. Nyanya alionya kwamba nisingeng'oa meno yangu yangepandana. Nilitafakari taswira ya maneno yake nyanya nikaona kwamba, ningekuwa kama fuko.

Basi niling'olewa jino hilo na damu ikanitoka. Nilianza kuogopa nilipoona damu. Niliingia chumbani mwangu nikajitazama! Lo! eeh nilikuwa na pengo kubwa sana. Nyanya aliona hofu yangu lakini akanipa moyo.

Niliporudi shuleni wanafunzi walinicheka na kuniimba hivi; Kip Kipengo kipe, ukimtazama kweli utacheka. Jina la utani nikapata hapo.

31. Jina la Kiprono la utani lilikuwa lipi? _____
32. Kiprono hufanya nini shule zinapofungwa? _____
33. Nyanya ya Kiprono huishi wapi? _____
Taja wanyama wawili wanaopatikana katika bustani ya nyanya ya Kiprono
34. _____
35. _____
36. Nyanya alionya kwamba Kiprono asingeng'oa jino yangefanya nini? _____
37. Kiprono asingeng'oa jino, aliona kwamba angekuwa kama _____
38. Mtu asiyekuwa na meno huitwa; _____
A. kibogoyo
B. kipofu
C. kiziwi
39. Alipong'olewa jino _____ ilitoka.
40. Kwa nini wanafunzi walimcheka Kiprono aliporudi shuleni?
