

IN THIS DIGITAL AGE GETTING EDUCATIONAL RESOURCES IN NOW EASIER THAN EVER!!
DO YOU NEED ANY OF THE FOLLOWING:

- REVISION/TEACHING NOTES
- TERMLY EXAMS
- KCSE/KCPE MOCKS
- KCSE/KCPE PAST PAPERS
- SCHEMES OF WORK
- LESSON PLANS
- RECORDS OF WORK
- ACTED SETBOOK VIDEOS
- SETBOOKS' NOTES AND GUIDES
- EDUCATIONAL VIDEOS
- TEACHING POWERPOINTS

CONTACT/WHATSAPP THE LIBRARIAN 0743505350 AND RECEIVE WHATEVER YOU NEED INSTANTLY VIA WHATSAPP/EMAIL!!

FOR MARKING SCHEMES WHATSAPP 0743505350

ENGLISH - CBC GRADE 2 2023

QUESTIONS

TASK 1: LISTENING AND SPEAKING

Answer the following questions that the teacher will ask you orally (5mks)

1. Name two things found in the classroom.
 - a. State two activities that you do at home.
 - b. Spell the word 'calendar'.
 - c. Name one means of transport.
 - d. Which is the seventh month of the year?

TASK 2: READING ALOUD

2. Read the story below aloud. (10mks)

Little monkey was ready for school but he could not find his bag. It was not beside the door. It was not in the cupboard. It was not on the table. Little monkey looked under his bed. The bag was there. He was very happy to find it. Little monkey took the bag and left.

TASK 3: GRAMMAR

3. Use 'was' or 'were' to complete the sentences. (4mks)
 - a. There ___ some learners writing in class
 - b. He ___ at the gate.
 - c. The girls ___ sweeping the compound
 - d. ___ Mary in the house?
4. Fill in the gaps (3mks)
 - a. b_cycl_
 - b. b_at
 - c. tr__n
5. Find and circle the words below in the puzzle. (4mks)

d	a	j	c	o	o	k	h	v
c	k	k	l	a	t	l	m	n
u	g	p	e	o	w	a	s	h
d	f	s	a	v	j	k	w	d
p	l	a	n	t	b	q	e	l
d	f	o	b	n	j	k	e	z
c	x	t	y	u	l	m	p	o

- a. sweep
- b. wash
- c. plant
- d. cook

6. Write the plurals (4mks)
 - a. berry
 - b. shelf
 - c. family
 - d. child
7. Add '-ing' to the words in brackets and use them to fill in the blanks spaces. (5mks)
 - a. Auma is___at the joke. (laugh)
 - b. The cows are___green leaves. (eat)
 - c. Peter is___near the fence. (stand)
 - d. They are___mangoes from the tree. (pick)
 - e. The worker is___the cart. (push)

TASK 4: COMPREHENSION

8. Read the story below and answer the question. (5mks)

Jane and her mother were cleaning the house. Jane was sweeping the sitting room. Her mother was mopping the kitchen. Jane saw a big cockroach on the wall. She pointed at the wall and called her mother. The cockroach moved down the wall. Jane jumped back and shouted. Her mother came to the sitting room quickly. She hit the cockroach with a broom. She used a dustpan to carry it outside the house.

 - a. Jane and her mother were__the house.
 - b. Jane saw a__cockroach.
 - c. Where did Jane see the cockroach?
 - d. What did the mother do to the cockroach?
 - e. What is the work.of dustpan?

TASK 5: GUIDED WRITING

9. Write ten sentences about: (10mks)
MY TEACHER

LANGUAGE ACTIVITIES - CBC GRADE 2 2023

Task 1: COMPREHENSION. (5 marks)

Read the story below and answer the following questions.

Kiptum is a Grade Two learner. His mother knitted a red jumper for him. Yesterday, he went to the market to buy a knife. On the way, he was knocked down by a motorcycle. Kiptum's knee was hurt. He cried and cried. His mother took him to the hospital.

- a. Kiptum is in which grade? _____
- b. Who knitted a jumper for him? _____
- c. What was the colour of the jumper? _____
- d. What knocked him down? _____
- e. Where did his mother take him? _____

Task 2: GRAMMAR. (15mks)

1. Use a or an (3mks)
 - a. They went on _____ trip.
 - b. _____ book is on the table.
 - c. We use _____ umbrella when it rains.
2. Fill in the gaps using the following words. (3mks)
(pink, think, tank)
 - a. Jane has a _____ dress.
 - b. There is a water _____ beside the tree.
 - c. "I _____ you are right," Bob said.
3. Write the opposite. (3mks)
 - a. hen _____
 - b. ewe _____
 - c. bull _____
4. Write these words correctly. (3mks)
 - a. cktis _____
 - b. stbe _____
 - c. keasp _____
5. Write the doing word of the word in bracket. (3mks)
 - a. She is _____ (read)
 - b. He is _____ (sleep)
 - c. Mary is _____ (call)

Task 3: WRITING (10 mks)

Write five sentences about

"MYSELF"

LITERACY ACTIVITIES - CBC GRADE 2 2023

LISTENING AND SPEAKING (5mks)

I will read a story then I will ask you some questions.

My sister Akinyi is now a big girl. She is five years old. I am in Grade Three. My name is Ekuru. My mother asked me to take my sister to school.

- How old is Akinyi? _____
- What is the name of Akinyi's brother? _____
- Ekuru is in which grade? _____
- Who asked Ekuru to take Akinyi to school? _____
- What is the name of Ekuru's sister? _____

READING ALOUD (15mks)

Read the story aloud.

Kerubo was riding her bicycle fast. She wanted to win the race. Maina had an old bicycle. He was riding slowly. Kerubo was happy she was leading. Suddenly, a dog crossed the path in front of her. Kerubo fell down and cried in pain. She had to crawl to the grass. Her friends helped her to get home. Nobody won the race.

A learner to read 50 words in one minute.

HYGIENE AND NUTRITION - CBC

GRADE 2 2023

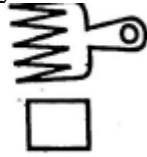
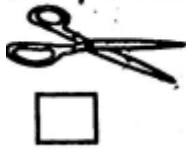
QUESTIONS

1. A___ is a personal item (toothpaste, towel, textbook)
2. We can clean a___ using warm salty water. (toothbrush, hairbrush, handkerchief)
3. Personal items should not be shared so that we don't spread or get___ (them, germs, clean)
4. Study the items below.



The items above can be used to clean our (tongue, hair, shoes)

5. Tick the item you may need to make you hair neat.



6. When brushing our teeth, salt can be used instead of___(a toothbrush, water, toothpaste)

Match the given foods to their tastes.

7. Salt sweet
8. Lemon bitter
9. Honey salty
10. Ginger sour
11. We eat the seeds of___(sugarcane, cabbages, maize)
12. ___of sukumawiki are eaten as food. (Stems, Fruits, Leaves)
13. ___can be eaten as a snack. (Potatoes, Popcorns, Porridge)
14. Eating snacks between meals makes us___ (weak, healthy, sleep)
15. For good health, we should take___meals a day. (four, two, three)
16. It is good to eat___food. (more, enough, little)
17. Breakfast is the food eaten in the___ (morning, afternoon, evening)

18. When we eat too much, food we can___ (faint, vomit, cough)
19. Dental floss can be used to clean between our___ (eyes, teeth, ears)

20. Water used for rinsing school uniform can again be used for___(mopping, cooking, drinking)
21. A___is likely to be found in the bedroom. (pillow, bicycle, tree)
22. Second hand smoke is dangerous because it affects our___(lungs, teeth, mouth)

INTEGRATED LEARNING AREA - CBC

GRADE 2 2023

QUESTIONS

HYGIENE & NUTRITION ACTIVITIES (10mks)

1. ___ is the food we eat in the morning. (1mk)
2. Write two good oral habits (2mks)
3. List two rooms found in a house (2mks)
4. If you do not have a sponge, you can use ___ to wash utensils. (1mk)
5. Name one dangerous thing that people smoke.(1mk)
6. What is water contamination?(1mk)
7. Left over pieces of soap can be used to make ___ (1mk)
8. Name the personal item drawn below. (1 mk)



ENVIRONMENTAL ACTIVITIES (10mks)

1. Name one type of cloth worn during a sunny day.
2. Name two items that are used for storing water.
3. A vehicle that transport water is known as
4. ___soil makes long ribbons when wet.
5. List any two plants
6. Cat help to keep ___ away.
7. Write down one way of caring for animals
8. The ___ of a plant are found in the ground.

RELIGIOUS EDUCATION

1. ___ created us in his image.
2. Grandfather, uncle and aunts are members of a ___ family.
3. List three things we share at home.
4. The moon and stars give us light at ___
5. The ___ is the word of God.
6. The Old Testament has ___ books.
7. God called Samuel ___ times.
8. God told ___ to build an ark.

MOVEMENT & CREATIVE ACTIVITIES. (10mks)

1. Name two forms found in the environment
2. The texture of a basket is
3. Name the tools shown below



4. Which new colours do you get on mixing the following
 - a. Red + green =
 - b. Blue + yellow =
 - c. Blue + red =
5. Name two types of patterns

MUSIC

1. Name to occasions where songs are sung
2. We should stand at when we sing the national anthem.
3. The fastness or slowness of music is called.
4. Songs that children sing as they play are known as___
5. Name the props shown below



6. Wind instruments are played by___
7. Name any two wind instruments

INTEGRATED LEARNING AREAS - CBC GRADE 2 2023

HYGIENE AND NUTRITION ACTIVITIES


1. Name these food that show balanced diet (3mks)



2. We get the advertisement of food from.

r____dio and t____levision.

3. The food we take in the morning is called _____. (supper, lunch, breakfast)
4. Name these foods we take for breakfast (5mks)



5. **Match the items with the room** (4 marks)



kitchen



dinning room



bedroom



bathroom

ENTREZ

ENVIRONMENTAL ACTIVITIES.

1. We protect crops by _____ (**cutting, fencing, burning**)
2. Plants need _____ to grow. (**water, milk, soil**)
3. We keep plants free from pests by _____ them. (**cutting, washing, spraying**)
4. We remove _____ so that plants can grow well. (**plants, weeds, water**)
5. Name t items used for cleaning the animal house. (**3mks**)

6. We should _____ ourselves when cleaning animal houses. (**wash, expose, protect**)
7. A dirty school can make us _____ (**well, sick, fine**)

CRE ACTIVITIES. (13mks)

1. When I am given something I should be _____ (**sorry, thankful, happy**)
2. Which son asked for his share of the property? _____ (**Younger, Older, Bigger**)
3. What do we learn from the story of the prodigal son? That we should _____ others. (**hate, abuse, forgive**)
4. Name items that we carry to school for learning. (5mks)

5. We should _____ of the items we carry to school. (**take care, cut, throw**)
6. Samuel was called _____ times. (**2, 3, 4**)
7. Who built an ark? _____ (**Moses, Noah, John**)
8. Name the three sons of Noah? (**3mks**)

CREATIVE ACTIVITIES.

1. **Name materials that can be used to make toy car.** (4mks)

2. We s___ng s___ngs to create melodies. (2mks)

MATHEMATICAL ACTIVITIES - CBC

GRADE 2 2023

NUMBERS. (35mks)

1. **Divide:** (5mks)

$$18 \div 3 = \underline{\hspace{2cm}}$$

$$12 \div 4 = \underline{\hspace{2cm}}$$

$$8 \div 2 = \underline{\hspace{2cm}}$$

$$20 \div 4 = \underline{\hspace{2cm}}$$

Share 25 marbles equally among 5 boys. Each boy will get _____ marbles.

2. **Multiply:** (5mks)

$$5 \times 8 = \underline{\hspace{2cm}}$$

$$10 \times 3 = \underline{\hspace{2cm}}$$

$$3 \times 1 = \underline{\hspace{2cm}}$$

$$5 \times 3 = \underline{\hspace{2cm}}$$

$$4 \times 4 = \underline{\hspace{2cm}}$$

3. **Write the missing numbers:** (5mks)

$$\quad - 15 = 53$$

$$\quad - 22 = 34$$

$$\quad - 16 = 62$$

$$\quad - 14 = 71$$

$$\quad - 13 = 36$$

4. **Subtract.** (5mks)

$$\begin{array}{r} 49 \\ -32 \\ \hline \end{array}$$

$$\begin{array}{r} 38 \\ -24 \\ \hline \end{array}$$

$$\begin{array}{r} 98 \\ -40 \\ \hline \end{array}$$

$$\begin{array}{r} 98 \\ -40 \\ \hline \end{array}$$

$$\begin{array}{r} 68 \\ -40 \\ \hline \end{array}$$

5. **Add by regrouping.** (5mks)

$$16 + 7 = \underline{\quad}$$

$$36 + 8 = \underline{\quad}$$

$$25 + 9 = \underline{\quad}$$

$$\begin{array}{r} 75 \\ +25 \\ \hline \end{array}$$

$$\begin{array}{r} 63 \\ +37 \\ \hline \end{array}$$

6. Draw these fractions. (2mks)

$\frac{1}{4}$	$\frac{1}{2}$
---------------	---------------

7. Write these numbers in symbols. (5mks)

Thirty eight _____

Seventy six _____

Eighty one _____

Ninety seven _____

Forty nine _____

8. Write numbers 100 to 90. (5 steps backwards.) (3mks)
e.g. from 80 to 70 80, 75, 70

MATHEMATICS - CBC GRADE 2 2023

QUESTIONS

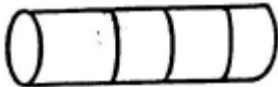
Write in words or in symbols

1. 18
2. Ninety six
3. 14
4. Eighty eight
5. Count backwards in fives and fill the empty box

85	80	75	70	65	60	55	50	
----	----	----	----	----	----	----	----	--

Colour the written fractions.

6. $\frac{1}{4}$



7. $\frac{1}{2}$



8. One bottle had 9 bottle tops .. and another one had 5. How many bottle tops were they altogether?
9. Subtract 25 from 48.
10. Divide $24 \div 3 =$

Write the number of days in the following months:

11. May
12. September
13. February

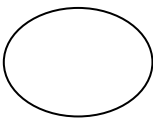
Draw the following lines

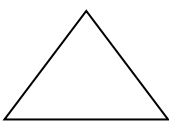
14. Straight line

15. Curved line

Match the shape to its name.

16.  Circle

17.  Triangle

18.  Square

Complete the number sentence

19. 101, _____, 103, _____, _____, 106

20. 201, _____, 203, _____, _____, 206

KISWAHILI - CBC GRADE 2 2023

MASWALI

SEHEMU YA 1: KUSIKILIZA NA KUZUNGUMZA

1. Familia yako ina watu wangapi?
2. Unao ndugu wangapi?
3. Ni nani huwapikia katika familia yenu?
4. Wewe na familia yako mnaishi wapi?
5. Nyinyi husaidiana vipi katika familia yako?

SEHEMU YA 2: KUSOMA

Zoezi la 1: Kusoma kwa sauti.

Wiki iliyopita, nilihudhuria sherehe ya harusi. Ilikuwa ni wikendi njema. Joto lilikuwa la kadiri. Watu wengi walikuwa shereheni. Nilisimama na kuwatazama.

Alama 10

Zoezi la 2: Kusoma kwa Ufahamu.

Soma hadithi na ujibu maswali yafuatayo.

Jumamosi iliyopita, shangazi yangu alitutembelea. Hakuwa ametutembelea kwa muda wa wiki mbili. Aliniletea peremende na biskuti. Baba na mama walifurahi mno kumwona. Hata hivyo, nilikuwa na furahi kuliko wao. Siku iliyofuata, Jumapili, mimi na shangazi tulienda kanisani ambapo tuliimba na kumchezea Mungu. Ilikuwa ni siku njema.

11. Shangazi wa mwandishi aliwatembelea siku ya.
12. Shangazi wa mwandishi alimletea mwandishi
13. Mwandishi alienda kanisani pamoja na
14. Kina mwandishi walienda kanisani siku ya
15. Walipokuwa kanisani, waliimba na kumchezea.

SEHEMU YA 3: SARUFI

Andika sentensi hizi katika wakati uliopo.

16. Nilichora kibonzo ubaoni.
17. Tutaandika barua.
18. Nitamsaidia rafiki yangu.
19. Tuliongea kwa sauti.

Tumia maneno uliyopewa kujazia vihashe. (vizuri , vibaya)

20. Viazi___ vilitupwa jaani.
21. Aliongea___ kwa heshima.
22. Wananchi walimchapa___mwizi yule.

Chagua jibu bora zaidi kutoka mabanoni.

23. Kidole___ni cha mtoto. (huyu, hiki, ile)
24. Mama___ni mpole. (wao, yangu, lake)
25. Shule___imepakwa rangi. (hii, lao, changu)

SEHEMU YA 4: KUANDIKA

"Ziandike upya sentensi hizi kwa hati nadhifu.

26. Jana nilienda kwa nyanya.
27. Nilipofika nilimkuta akiota jua.
28. Alinipikia uji wa wimbi.
29. Niliufurahia uji huo.
30. Nilimshukuru sana nyanya yangu.

SHUGHULI ZA KISWAHILI - KUSIKILIZA NA KUZUNGUMZA - CBC GRADE 2 2023

KUSIKILIZA NA KUZUNGUMZA (Alama 5)

Nitakusomea hadithi kisha utajibu maswali nitakayokuuliza.

Sungura mjanja alimtembelea binamu yake mjini. Alipofika kwake, aliviona vyumba vingi. Alijiseema, kila siku nitalala chumba tofauti nihisi jinsi kilivyo.

- Sungura alimtembelea nani? _____
- Binamu yake aliishi wapi?

- Taja vyumba vitatu vinavyopatikana kwa nyumba.

KUSOMA KWA SAUTI (Alama 10)

Soma hadithi hii kwa sauti. Mwanafunzi asome maneno 40 kwa dakika moja.

Fisi alikuwa amelala siku nyingi. Aliogopa kufa kwa sababu ya njaa. Siku moja kabla ya kwenda mawindoni, alimwomba Mungu amsaidie apate chakula. Akatoka nyumbani kwake akiwa mchovu sana. Ghafla, alimpata ndama amefungwa kwenye mti kwa kamba. Nani kama mimi? Akaanza kujigamba. Alijisifu kuwa yeye ni hodari na siku hiyo haingepita bila yeye kupata mlo.

Mwanafunzi asome maneno 40 kwa dakika moja.

SHUGHULI ZA KISWAHILI - UFAHAMU, SARUFI NA KUANDIKA - CBC GRADE 2 2023

UFAHAMU (Alama 5)

Soma hadithi ifuatayo kisha ujibu maswali:

Kalulu alikuwa anafanya kazi katika hoteli ya Mzee Tumbo. Kila siku alitumwa kuchukua mikate kutoka mjini. Hoteli ya Mzee Tumbo ilikuwa kijijini. Kati ya hoteli na mjini, kulikuwa na msitu. Mjini alipewa kijikaratasi kilichoandamana na mikate. Kalulu hakuelewa ni cha nini.

- Kalulu alifanya kazi wapi? _____
- Hoteli ilikuwa ya nani? _____
- Alitumwa nini kila siku?

- Alinunua mikate wapi? _____
- kati ya hoteli na mjini kulikuwa na nini?
? _____

SARUFI (Alama 15)

Tumia -ako au -enu kujaza pengo. (Alama 3)

- Mtoto _____ ni mzuri.
- Vyakula _____ ni vitamu.
- Walimu _____ ni wazuri.

Tumia hiki au hivi kujaza pengo. (Alama 3)


- Nilitumia kisu _____ vizuri.
- Vikombe _____ ni vizuri.
- Kioo _____ kilivunjika.

Andika hali hizi za anga. (Alama 3)

a.



b.



c.



Jaza pengo. (Alama 3)

- a. V__tabu
- b. m__wingu
- c. mt_hani

Taja watu watatu wa familia. (Alama 3)

- a. _____
- b. _____
- c. _____

KUANDIKA. (Alama 10)

Andika sentensi tano kuhusu.

"Rafiki yangu"

KUANDIKA

Mwalimu asahihishe kulingana na majibu