

**OFFER! OFFER! GET 5 COMPLETE SETS OF EXAMS FOR EACH CLASS @ 100 SHILLINGS ONLY**

**NB: EACH SET HAS ALL SUBJECTS AND MARKING SCHEMES CALL 0743505350**

**GRADE TWO EXAMS**

**FOR ANSWERS AND MORE SETS OF EXAMS, SMS OR WHATSAPP: 0743505350**

**GRADE TWO**


**COMPETENCE BASED CURRICULUM**

**CRE ACTIVITIES**

**TERM 3 OPENER EXAMS 2020**

<b>NAME</b>	
<b>SCHOOL</b>	
<b>GRADE</b>	

1. God created me in his own \_\_\_\_\_ (way, image, man)
2. I am \_\_\_\_\_ before God. (Bad, ugly, special)
3. A nuclear family is made up of father, mother and \_\_\_\_\_ (uncle, children, cousin)
4. \_\_\_\_\_ were the first people to visit baby Jesus. (Shepherds, wise men, disciples)
5. This is a \_\_\_\_\_



6. God \_\_\_\_\_ me. (Hate, abuse, loves)
7. Mother to my father is my \_\_\_\_\_ (cousin, grandfather, grandmother)
8. God created \_\_\_\_\_ to give us light during the night. (moon, sun, clouds)
9. The Bible is divided into \_\_\_\_\_ parts (39 ,27 ,2 )
10. \_\_\_\_\_ called Samuel. ( Elikannah ,Eli ,God)

11. During the time of Noah , it rained for \_\_\_\_\_ days. (7 ,40 ,20 )

12. Daniel prayed to God \_\_\_\_\_ times a day.(3 ,7 ,1 )

13. \_\_\_\_\_ built an ark .(David, Noah ,Jonah )

14. \_\_\_\_\_ was fed by a widow at Zeraphath( Elijah, Elisha, nobody )

15 .Jesus died on the \_\_\_\_\_(tomb, house, cross)

16. We should have \_\_\_\_\_ in God.(faith , jealous ,sad)

17. \_\_\_\_\_ is telling the truth (obey, forgiveness, honesty)

18. The disciples received the Holy Spirit on the day of \_\_\_\_\_(Pentecost ,birthday, Christmas)

19. The first book in the bible is \_\_\_\_\_(Mathew ,Genesis, Malachi)

20. People we do not know are called \_\_\_\_\_(neighbours , Christians ,strangers)

21. The wise men who came to visit baby Jesus came from the \_\_\_\_\_ direction.(west, south, East)

**Name 3 things that God created**

22. \_\_\_\_\_

23. \_\_\_\_\_

24. \_\_\_\_\_

25. The Bible has \_\_\_\_\_ books. (66, 69 , 39)

**GRADE TWO**  
**COMPETENCE BASED CURRICULUM**  
**ENGLISH ACTIVITIES**  
**TERM 3 OPENER EXAMS 2020**

<b>NAME</b>	
<b>SCHOOL</b>	
<b>GRADE</b>	

**Dictation**

1. \_\_\_\_\_
2. \_\_\_\_\_
3. \_\_\_\_\_
4. \_\_\_\_\_
5. \_\_\_\_\_

**Write well**

6. ookb - \_\_\_\_\_
7. eetr - \_\_\_\_\_
8. oostl - \_\_\_\_\_
9. ntraI - \_\_\_\_\_
10. oomn - \_\_\_\_\_

**Write the opposite**

11. Good- \_\_\_\_\_
12. Hot - \_\_\_\_\_
13. Father - \_\_\_\_\_
14. Late - \_\_\_\_\_
15. Asleep - \_\_\_\_\_

**Add -ing in the sentences**

16. The boy is \_\_\_\_\_  
(climb) the hill.

17. The teacher is \_\_\_\_\_  
(write) on the board.

18. The pupils are  
\_\_\_\_\_ (clap)

19. The boy is \_\_\_\_\_  
(hide) under the table.

20. The farmer is  
\_\_\_\_\_ (store) maize in the  
granary.

**Match the animals with their young ones**

21. Woman      kid
22. Lion      calf
23. Goat      baby
24. Sheep      cub
25. Elephant      Lamb

**Use 'a' or 'an' to complete the sentences**

26. My father bought \_\_\_\_\_  
envelope.

27. There is \_\_\_\_\_ umbrella  
in my bag.

28. May I have  
\_\_\_\_\_ mango.

29. They were resting under \_\_\_\_\_  
shade.

30. We use \_\_\_\_\_ antiseptic to kill  
germs.

**Write in plural**

31. Chief \_\_\_\_\_

32. Ox- \_\_\_\_\_

33. Child- \_\_\_\_\_

34. Shelf - \_\_\_\_\_

35. Bag - \_\_\_\_\_

**Fill the spaces**

36. G \_ \_ t

37. \_ r a n g \_

38. P \_ n c \_ l

39. M \_ r k \_ t

40. F l \_ w \_ r

**Use 'why, when, why, what' to fill the  
blank spaces**

41. \_\_\_\_\_ are we closing the  
school?

42. \_\_\_\_\_ is my bag?

43. \_\_\_\_\_ were you absent  
yesterday?

44. \_\_\_\_\_ are you doing?

**Make words with these sounds**

45. br \_\_\_\_\_

46. pl \_\_\_\_\_

47. ch \_\_\_\_\_

**Write the past tense**

48. Go - \_\_\_\_\_

49. Come - \_\_\_\_\_

50. Sit - \_\_\_\_\_

**GRADE TWO**  
**COMPETENCE BASED CURRICULUM**  
**ENVIRONMENTAL ACTIVITIES**  
**TERM 3 OPENER EXAMS 2020**

<b>NAME</b>	
<b>SCHOOL</b>	
<b>GRADE</b>	

1. We carry an \_\_\_\_\_ when it is rainy (sack, umbrella, shirt)
2. \_\_\_\_\_ keeps on changing from time to time (climate, weather)

**Draw the following weather symbols**

<p>3. Rainy</p>          	<p>4. Windy</p>          
---	---

**Name 3 types of soil**

5. \_\_\_\_\_
6. \_\_\_\_\_
7. \_\_\_\_\_
8. My country is called \_\_\_\_\_
9. Our national anthem is written in 2 languages .These are \_\_\_\_\_ and \_\_\_\_\_

10. Stored water should be \_\_\_\_\_ (covered ,poured, open )
11. We wear \_\_\_\_\_ clothes when it is cold. ( light ,heavy, many)
12. A \_\_\_\_\_ guards our school. ( driver ,gardener ,security guard )
13. \_\_\_\_\_ is the top colour in our flag.(red ,black, white)

**Name 3 harmful animals**

14. \_\_\_\_\_

15. \_\_\_\_\_

16. \_\_\_\_\_

17. Which soil is used for planting crops  
\_\_\_\_\_ (clay, loam, sand)

18. \_\_\_\_\_ are animals that  
are kept at home.(many, wild, domestic )

**Name 3 sources of light**

19. \_\_\_\_\_

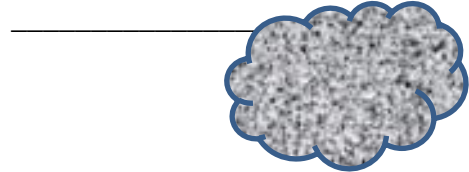
20. \_\_\_\_\_

21. \_\_\_\_\_

22. Most leaves are  
\_\_\_\_\_ in colour. ( red  
,green ,yellow)

24. A kennel is the house of a  
\_\_\_\_\_ (dog ,rabbit, cow )

25. Name the weather symbol -



**GRADE TWO**  
**COMPETENCE BASED CURRICULUM**  
**HYGIENE AND NUTRITION ACTIVITIES**  
**TERM 3 OPENER EXAMS 2020**

<b>NAME</b>	
<b>SCHOOL</b>	
<b>GRADE</b>	

1. We eat \_\_\_\_\_ meals in a day. (2, 3, 1)

2. A pig gives us \_\_\_\_\_ (mutton, beef, pork)

**Name 3 parts of a plant that we eat as food**

3. \_\_\_\_\_

4. \_\_\_\_\_

5. \_\_\_\_\_

6. The classroom dustbin should be emptied \_\_\_\_\_ (everyday ,never ,weekly )

7. The first help we give to an injured person is called \_\_\_\_\_ (help ,pricks ,first aid )

8. Wounds are covered with a \_\_\_\_\_ (bandage ,paper, tissue )

9. The first teeth to grow are called \_\_\_\_\_ (first teeth ,good teeth ,milk teeth )

10. We remove dirt particles from water by \_\_\_\_\_ (boiling ,filtering ,cooling )

**Write 3 things we should not share**

11. \_\_\_\_\_

12. \_\_\_\_\_

13. \_\_\_\_\_

14. An \_\_\_\_\_ can be eaten raw. (apple ,beans, spinach)

15. A \_\_\_\_\_ treats our teeth. ( optician ,dentist ,nurse )

16. I use \_\_\_\_\_ to cut my finger nails (teeth ,knife ,nail cutter)

17. The main source of water is \_\_\_\_\_ (tank, tap, rain)

18. Contaminated water can make us \_\_\_\_\_ (healthy, cry, sick)

**Name 3 main meals we eat in a day (lunch, snacks ,breakfast, chips, supper ,soda)**

19. \_\_\_\_\_

20. \_\_\_\_\_

21. \_\_\_\_\_

22. I am a place in the house. Foods are prepared in me. I am a \_\_\_\_\_  
(dining room, kitchen ,sitting room)

23. A \_\_\_\_\_ cannot be used to clean the floor ( broom ,mop ,panga )

24. Green or red pepper tastes \_\_\_\_\_  
(sour ,sweet ,bitter )

**Where are these items found in the rooms of a house**

25. Sofa set  
\_\_\_\_\_

26. Bed \_\_\_\_\_


27. Frying pan  
\_\_\_\_\_

28. Television  
\_\_\_\_\_


29. Knife  
\_\_\_\_\_


30. Pillow  
\_\_\_\_\_

**Draw 4 fruits and write their names**

31.  


32.  


33.  


34.  


**Name the parts of our body we use to clean with the following items**

35. Comb - \_\_\_\_\_

36. Toothbrush - \_\_\_\_\_

37. Handkerchief - \_\_\_\_\_

**Name 3 sources of water**

38. \_\_\_\_\_

39. \_\_\_\_\_

40. \_\_\_\_\_

**Which part of plant do we eat from these plants**

41. Sweet potatoes - \_\_\_\_\_

42. Kales -  
\_\_\_\_\_

43. Maize -  
\_\_\_\_\_

44. Sugarcane -  
\_\_\_\_\_



45. Carrots - \_\_\_\_\_

**Name 2 bad oral habits**

46. \_\_\_\_\_

47. \_\_\_\_\_

48. We use \_\_\_\_\_ and clean water to wash utensils.(jug ,soap ,toothbrush)

49. Dirty utensils bring \_\_\_\_\_ in the house. ( Mosquitoes ,lice ,cockroaches )

50. \_\_\_\_\_ causes diseases. ( food ,germs, oily)

**GRADE TWO**  
**COMPETENCE BASED CURRICULUM**  
**KISWAHILI ACTIVITIES**  
**TERM 3 OPENER EXAMS 2020**

<b>NAME</b>	
<b>SCHOOL</b>	
<b>GRADE</b>	

**Imla**

1. \_\_\_\_\_
2. \_\_\_\_\_
3. \_\_\_\_\_
4. \_\_\_\_\_
5. \_\_\_\_\_

**Tumia ‘hili’ au ‘haya’ kujaza nafasi**

6. Gari \_\_\_\_\_ ni bovu.
7. Matunda \_\_\_\_\_ ni matamu.
8. Maua \_\_\_\_\_ yananukia.
9. Jani \_\_\_\_\_ limeanguka.
10. Mayai \_\_\_\_\_ yameoza

**Jaza pengo**

11. K \_ j \_ k o
12. R \_ n d a
13. M f \_ k \_
14. F u \_ a n \_
15. Dir \_ s \_ a

**Tumia – angu**

- Mtoto wangu
16. Kiatu \_\_\_\_\_
  17. Mwili \_\_\_\_\_
  18. Kalamu \_\_\_\_\_
  19. Mwalimu \_\_\_\_\_
  20. Embe \_\_\_\_\_

**Andika kinyume**

21. Lala - \_\_\_\_\_
22. Lia - \_\_\_\_\_
23. Anika - \_\_\_\_\_
24. Safi - \_\_\_\_\_
25. Mrefu - \_\_\_\_\_

**Andika maneno vizuri**

26. tatama - \_\_\_\_\_

27. liro - \_\_\_\_\_  
28. gende - \_\_\_\_\_  
29. rampi - \_\_\_\_\_  
30. limumwa - \_\_\_\_\_

**Tambua silabi katika maneno haya**

31. watoto = \_\_\_\_ + \_\_\_\_ + \_\_\_\_  
32. sahani = \_\_\_\_ + \_\_\_\_ + \_\_\_\_  
33. kisu = \_\_\_\_ + \_\_\_\_  
34. Kijiko = \_\_\_\_ + \_\_\_\_ + \_\_\_\_  
35. Chura = \_\_\_\_ + \_\_\_\_

**Andika kwa wingi**

36. Choo \_\_\_\_\_  
37. Ufagio \_\_\_\_\_  
38. Uta \_\_\_\_\_  
39. Ua \_\_\_\_\_  
40. Mgeni \_\_\_\_\_

**Andika kwa nambari**

41. Arubaini na nane \_\_\_\_\_  
42. Hamsini na sita \_\_\_\_\_  
43. Themanini na moja \_\_\_\_\_  
44. Thelathini na mbili \_\_\_\_\_

**Kanusha**

45. Mtoto analia  
\_\_\_\_\_

46. Msicahana anacheza .  
\_\_\_\_\_

47. Mama amelala.  
\_\_\_\_\_

48. Mwanafunzi anasoma.  
\_\_\_\_\_

49. Kijiko kimevunjika.  
\_\_\_\_\_

50. Mzazi wa kike huitwa  
\_\_\_\_\_

**GRADE TWO**  
**COMPETENCE BASED CURRICULUM**  
**LITERACY ACTIVITIES**  
**TERM 3 OPENER EXAMS 2020**

<b>NAME</b>	
<b>SCHOOL</b>	
<b>GRADE</b>	

**Read these words aloud**

Lunch          clothes          clock          cloud          trade  
Fetch          flower          animal          travel          many  
Tour          plane          lucky

**Read the sentences loudly**

The children are taking their lunch.  
My mother is washing clothes outside.  
The clock has fallen and broken.  
I fetch water after school.  
She is watering the flower bed.  
The animals are hungry.  
We will travel by a plane.

**Read the paragraph below aloud**

A farm is where crops are planted and animals kept. In a farm we find a farmer. My father is a farmer. He has a very big farm. He plants tomatoes, onions, maize and beans. He also keep dairy cows and hens. After school I help my father in the farm. I love working in the farm.

**Soma maneno kwa sauti**

Mwalimu          samaki          nyumba          mawingu          mkulima  
Upepo          mkate          mjomba          karatasi          kikapu

Kifyeoko shoko chakula

**Soma sentensi kwa sauti**

Mwalimu ametupatia karatasi za mtihani

Kikapu cha samaki kimepotea

Nyumba ya mjomba imebebwa na upepo.

Mkulima anatumia kifyeoko kukata nyasi.

Mkate ni chakula kitamu.

Mawingu meusi yametanda.

Shoko la babu limepotea.

**Soma kifungu kwa sauti**

Sokoni ni pahali tunaponunua ama kuuza bidhaa tofauti. Pale sokoni utawapata wanunuzi na wauzaji. Kuna bidhaa za aina tofauti kama vile nafaka, vyombo, nguo na vyakula. Bei huwa ghali au wakati mwingine nafuu. Mimi hupenda kwenda sokoni na mama yangu. Napenda kumsaidia kuchagua bidhaa na kubeba. Nalipenda soko langu.

**GRADE TWO**  
**COMPETENCE BASED CURRICULUM**  
**MATHEMATICAL ACTIVITIES**  
**TERM 3 OPENER EXAMS 2020**

<b>NAME</b>	
<b>SCHOOL</b>	
<b>GRADE</b>	

- 98 = \_\_\_\_\_ tens \_\_\_\_\_ ones
- 54 = \_\_\_\_\_ tens \_\_\_\_\_ ones
- 6 = \_\_\_\_\_ tens \_\_\_\_\_ ones
- 356 = \_\_\_\_\_ hundreds \_\_\_\_\_ tens \_\_\_\_\_ ones

**Write the numbers in figures**


- Two hundred and fifty six  
\_\_\_\_\_
- Three hundred and thirty three  
\_\_\_\_\_
- Eighty six \_\_\_\_\_

**Fill the missing numbers**

- 0 , 5 , 10 , 15 , \_\_\_\_\_

$$\begin{array}{r}
 15. \quad 50 \\
 \quad + 30 \\
 \hline
 \\
 \hline
 \end{array}$$

- 2 , 4 , 6 , \_\_\_\_\_ , 10 , 12
- 3 , 6 , 9 , 12 , 15 , \_\_\_\_\_
- Shade  $\frac{1}{2}$



- A quarter is written as \_\_\_\_\_
- $4 + 4 + 3 =$  \_\_\_\_\_
- $26 + 13 =$  \_\_\_\_\_

16. 40

+20

---

---

17.    Tens        Ones

      7            4

-        2

---

---

18.    Tens        Ones

      6            9

- 4            4

---

---

19. Kamau bought 17 books and 10 pencils. How many items did he buy altogether? \_\_\_\_\_

20. Add 7 to 8 =

21. Subtract 25 from 50 = \_\_\_\_\_

22. \_\_\_\_\_ + 7 = 12

23. 10 + \_\_\_\_\_ = 19

24. 2+2+2+2=\_\_\_ x \_\_\_\_\_ = \_\_\_\_\_

25. 3+3+3= \_\_\_\_\_ x \_\_\_\_\_ = \_\_\_\_\_

26.



\_\_\_\_\_ x \_\_\_\_\_ = \_\_\_\_\_

27.



$$\underline{\hspace{2cm}} \times \underline{\hspace{2cm}} = \underline{\hspace{2cm}}$$



28. Share 20 mangoes among 4 boys .Each will get \_\_\_\_\_

29. The month of March has \_\_\_\_\_ days.

30. 1 hundreds 4 tens 6 ones = \_\_\_\_\_

31. 0 hundreds 3 tens 2 ones = \_\_\_\_\_

32. How many legs do 4 cows have \_\_\_\_\_

33. Which number is big? 55 or 25

**Arrange from the largest to the smallest**

34. 38 , 53 ,89 ,98 23 ,65 ,16

\_\_\_\_\_

35. 123 ,156 ,103 ,189 ,127

\_\_\_\_\_

36. 2 weeks = \_\_\_\_\_ days

37. \_\_\_\_\_ is the 6<sup>th</sup> month of the year.

38. Put together 34 and 23 = \_\_\_\_\_

39. Draw a curved line

**Write the place value of 2 in**

40. 27 \_\_\_\_\_

41. 234 \_\_\_\_\_

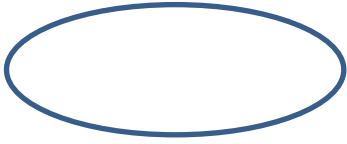
42. 72 \_\_\_\_\_

43. 521 \_\_\_\_\_

44. A football ball has \_\_\_\_\_ shape.

45. 15 - 10 = \_\_\_\_\_

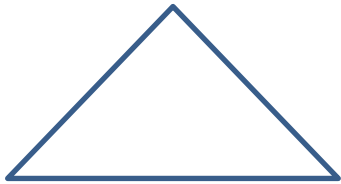
Name the shapes



46. \_\_\_\_\_



47. \_\_\_\_\_



48. \_\_\_\_\_

49. A year has \_\_\_\_\_ months.

50. \_\_\_\_\_ is the second day of the week.

**OFFER! OFFER! GET 5 COMPLETE SETS OF EXAMS FOR EACH CLASS @ 100 SHILLINGS ONLY**

**NB: EACH SET HAS ALL SUBJECTS AND MARKING SCHEMES CALL  
0743505350**

**ALSO AVAILABLE: SUMMARIZED NOTES FOR ALL CLASSES ALL SUBJECTS, KCPE/KCSE PAST PAPERS 2000-2019 WITH MARKING SCHEMES, POWERPOINTS AND ANIMATIONS AND SETBOOKS DVDS. 0743505350**