

**TISMA EXAM SERIES 1**  
**GRADE 1 OPENER 2023**

**2023 ACADEMIC YEAR**

**FOR MARKING SCHEMES:**

**CONTACT:**

**Mr Machuki – 0724333200**

**OR**

**ORDER ONLINE AT:**

**[www.kenyaeducators.co.ke](http://www.kenyaeducators.co.ke)**

**KENYA EDUCATORS CONSULTANCY**

# TISMA 001

## ENGLISH - CBC GRADE 1 TERM 1 OPENER (ENTRY) 2023 EXAM

### QUESTIONS

1. **TASK 1: LISTENING AND SPEAKING.**

Answer the following questions that the teacher will ask you orally (Emks)

- At what time do you wake up?
- How is the weather today?
- What do we use to cut our nails?
- Which part of the body do you use for seeing?
- Name any two family members.

2. **TASK 2: READING ALOUD**

Read the story below aloud. (10mks)

Tom is the second born in their family. He is in Grade One. Jane is his elder sister. Tom and Jane are pupils at Kemi Primary School. Their twin brothers are two years old. Tom's parents are Mr. and Mrs Juma. They are both doctors. During weekends, Tom and Jane help to clean their compound. They also take care fo their baby brothers.

3. **TASK 3: GRAMMAR**

Write the past tense by adding '-ed' (5mks)

- Clean
- Wash
- Comb
- Jump
- Look

4. Complete the sentences using 'that' or 'those'... (4mks)

- \_\_\_ are rulers.
- \_\_\_ is my car.
- \_\_\_ books belong to Peter.
- \_\_\_ is an apple.

5. Write correctly (3mks)

- ndiwwo
- asigs
- otp

6. Write the plurals (Amks)

- Basket
- Pencil
- Desk
- Room

7. Add -ing to the words in brackets and use them to complete the sentences. (4mks)

- The wind is \_\_\_\_\_(blow)
- It is \_\_\_outside. (rain)

- c. She is \_\_\_\_ a flower. (pick)
  - d. He is \_\_\_\_ a tree. (climb)
8. **TASK 4: COMPREHENSION**
- Read the story and answer the questions below. (5mks) My name is Peres. I live with my mother and father. We have a nice home. We have two houses. There are many trees around our home. My mother and father are farmers. We have two cows and four goats. After school, I look after the cows and goats.
- a. Who does Peres live with?
  - b. How many houses are in Peres' home?
  - c. What is the occupation of Peres' parents?
  - d. How many cows do they have?
  - e. At what time does Peres look after the cows and goats?
9. **TASK 5: GUIDED WRITING**
- Write ten sentences about; (10mks)
- "OUR CLASS"**


## TISMA 001

# INTEGRATED LEARNING AREAS - CBC GRADE 1 TERM 1 OPENER (ENTRY) EXAM 2023


### QUESTIONS

#### HYGIENE & NUTRITION ACTIVITIES. (10mks)

1. Milk teeth are also called \_\_\_ teeth. (1mk)
2. Write one healthy habit
3. Name the following forms of medicine. (2mks)



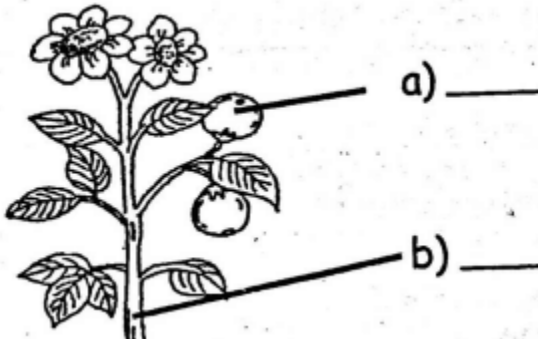
b)



4. We cut our nails short using a
5. \_\_\_ are used by boys and men. (1 mk)
6. We should \_\_\_ the toilet after using it. (1mk)
7. Name the two main sources of food. (2mks)
8. A ripe tomato is \_\_\_ in colour. (1mk)

#### ENVIRONMENTAL ACTIVITIES. (10mks)

9. Kites fly well on a \_\_\_ day. (1mk)
10. Name two sources of water. (2mks)
11. Name the parts of the plant shown below. (2mks)



12. List two domestic animals. (2mks)

13. A guitar produces sound by\_\_\_(1mk)
14. We eat the\_\_\_of a cabbage plant. (1mk)
15. Animals that live in the forest are called\_\_\_animals. (1mk)

### **RELIGIOUS EDUCATION ACTIVITIES. (10mks)**

16. Father, mother and children make a\_\_\_family. (1mk)
17. \_\_\_is our father in heaven. (1mk)
18. The\_\_\_is the word of God. (1mk)
19. Name the first book in the Bible\_\_\_(1mk)
20. The father of David was called\_\_\_(1mk)
21. Joseph had\_\_\_brothers. (1mk)
22. Jesus was born in the town of\_\_\_(1mk)
23. was taken to heaven by a strong wind. (1mk)
24. The first people to visit baby Jesus were the\_\_\_(1mk)
25. Draw and colour a Bible (1mk)

### **MOVEMENT AND CREATIVE ACTIVITIES. (10mks)**

26. Name two materials that are used for making a painting brush. (2mks)
27. Draw the following lines. (2mks)
28. Zigzag line
29. Spiral line
30. The smoothness or roughness of a surface is known as\_\_\_(1mk)
31. Name three tools that are used in drawing. (3mks)

### **MUSIC (10mks)**

32. Clothes worn during a music performance are called\_\_\_(1mk)
33. Name three types of songs. (3mks)
34. A shaker is played by\_\_\_it. (1mk)
35. When do we sing the National Anthem? (2mks)
36. We can make a rhythm by\_\_\_our hands. (1mk)

# TISMA 001

## KISWAHILI - CBC GRADE 1 TERM 1 OPENER (ENTRY) EXAM 2023

### MASWALI

#### 1. ZOEZI 1: KUSIKILIZA NA KUZUNGUMZA

Jibu maswali haya utakayoulizwa na mwalimu wako. (Alama 5)

- Taja vifaa viwili vya darasani.
- Jibu salamu: Shikamoo?
- Taja sehemu mbili za mwili.
- Tambua vifaa vitatu ya usafi.
- Neno "babu" lina herufi ngapi?


#### 2. ZOEZI LA 2: KUSOMA KWA SAUTI

Soma kifungu hiki kwa sauti.

Mimi ni Abdi. Rafiki yangu anaitwa Musa. Siku ya Jumamosi, sisi hucheza pamoja. Leo tunacheza mchezo na Kibe. Musa kufumba macho yake asinione. Mimi ninakimbia ili nijifiche. Nimejificha nyuma ya kiti. Nimejifunika kichwa kwa kitambaa. Musa hajaniona.

#### 3. ZOEZI LA 3: SARUFI

Andika majina ya picha zifuatazo. (Alama 3)



#### 4. Andika nambari kwa maneno. (Alama 4)

- 6
- 3
- 4
- 1

#### 5. Jibu maamkuzi yafuatayo. (Alama 5)

- Shikamoo?
- U hali gani?
- Habari?

- d. Hujambo?
- e. Umeshindaje?
- 6. Andika majina ya siku tatu za wiki. (Alama 3)
- 7. Uganisha silabi ili kuunda maneno sahihi. (Alama 5)
  - a. Ta + no
  - b. Ma + ka + o
  - c. Ku + la =
  - d. Li + pa =
  - e. Che + za=

8. **ZOEZI LA 4: UFAHAMU**

Soma kifungu hiki kisha ujibu maswali. (Alama 5) Siku moja, Mumo alikuwa akitoka shuleni. Alikuwa na rafiki yake, Tausi. Tausi alidungwa na mwiba. Hakuweza kutembea vizuri. Mumo alimshika mkono. Walitembea polepole hadi nyumbani kwa Tausi. Wazazi wa Tausi walimshukuru sana Mumo. Tausi alipelekwa hospitalini. Mwiba ulitolewa. Tausi alipona.

- a. Mumo alikuwa akitoka wapi?
  - b. \_\_\_\_\_alidungwa na mwiba akaumia.
  - c. Kwa nini Tausi hakuweza kutembea vizuri?
  - d. Wazazi wa Tausi walimpeleka wapi?
  - e. Wazazi wa Tausi walimfanyia nini Mumo?
9. **ZOEZI LA 5: KUANDIKA**

Andika sentensi kumi juu ya:

**MWALIMU WANGU**

## TISMA 001

### KUSOMA ACTIVITIES QUESTIONS - CBC GRADE 1 TERM 1 OPENER (ENTRY) EXAM 2023

#### Maswali

1. KUSIKILIZA NA KUZUNGUMZA (Alama 5)

Nitakusomea hadithi kisha nitakuuliza maswali. Sikiliza kwa makini.

Jumatano ni siku ya soko kula Sori. Mama yangu huuza vyakula vya kiasili vifuatavyo: maharagwe, mahindi na njugu. Rafiki yake Sara humuuzia mihogo na viazi.

- a. Soko ya Sori huwa siku gani?

- b. Taja vyakula vitatu vya kiasili ambavyo mama huuza? (alama 3)

- c. Rafiki ya mama anaitwaje?

2. KUSOMA KWA SAUTI (Alama 10)

Soma hadithi hii kwa sauti

Wakati wa likizo Eliza na Lazizi walielekea ziwani. Waliona minazi na mizabibu. Wakala mizabibu. Waliwabebea wazazi wao zabibu na nazi. Wazazi waliwanunulia Zawadi. Lazizi alizawadiwa zeze. Eliza alinunuliwa miwani.

3. Mwanafunzi asome maneno 20 kwa dakika moja.

Jumla = (alama 50)

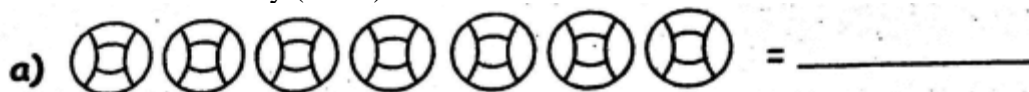


# TISMA 001

## MATHEMATICS - CBC GRADE 1 TERM 1 OPENER (ENTRY) EXAM 2023

### QUESTIONS

1. Count and write how many (4mks)



2. Write the missing numbers (3mks)

a. 66, 67, \_\_, \_\_, 70

b. 19, \_\_, \_\_, \_\_, 23, 24

c. 27, \_\_, 29, \_\_, 31

3. Write the numbers in figures (4mks)

a. Twenty one


b. Seven

c. Thirteen

d. Fifty six

4. Complete the following (4mks)

a.



\_\_Tens, \_\_ones = \_\_

b. 32 = \_\_tens and \_\_ones.

c. 21 = \_\_tens and \_\_ones.

d. 4 = \_\_tens and \_\_ones.

5. Work out (4mks)

a.  $3 + 4 + 4 =$

b.  $8 + 1 =$

c.  $6 + 0 =$

d.  $2 + 3 + 4 =$

6. Add (4mks)

- a.  $40 + 30 =$
- b.  $50 + 10 =$
- c.  $3 + 3 + 6 =$
- d.  $12 + 14 =$

7. Fill in the boxes (2mks)

- a.  $8 + \underline{\quad} = 12$
- b.  $\underline{\quad} + 8 = 10$

8. Take away (5mks)

- a.  $42 - 31 =$
- b.  $13 - 5 =$
- c.  $18 - 8 =$
- d.  $15 - 3 =$
- e.  $12 - 6 =$




9. What is 16 take away 9?

10. Subtract 8 from 20

11. Mark had 6 mangoes. He ate two mangoes. How many mangoes remained?(1mk)

12. Which one holds more? (1mk)

13. How much money? (3mks)



14. Which line is shorter (1 mks)

A \_\_\_\_\_

B \_\_\_\_\_

15. A week has \_\_\_ days. (1 mk)

16. Which one is heavier? (1mk)



= \_\_\_\_\_

17. Name the shapes below (6mks)

a)



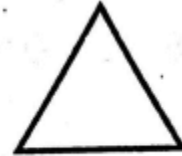
\_\_\_\_\_

b)



\_\_\_\_\_

c)




\_\_\_\_\_

d)



\_\_\_\_\_

e)



\_\_\_\_\_

f)



\_\_\_\_\_

## Tisma 001

### Reading Activities - CBC Grade 1 Term 1 Opener (Entry) Exam 2023

#### Questions

1. LISTENING AND SPEAKING (5mks)

All going to read a story to you and then I will ask you some wiestions, Listen correctly.

We have a chief. Our chief has a farm. He grows crops. The men trek to visit the chief. He says, "Let us ,buy land and grow crops." The chief grows grains. The men and women can grow grains too.

- a. What does chief have?
- b. Who wants to visit the chief?
- c. What do people want to buy?
- d. What does chief grow in his farm?
- e. What will men and women grow?

2. READING ALOUD

Read the story aloud.

It was early morning. Mary woke up hungry, she got dressed. Then, she went to the kitchen. She got a small pan and cooked an egg. After that, Mary put a few pieces of melon on a plate and ate them after having a cup of tea.

3. A learner to read 30 words in one minute.  
(Total =50marks)