

OFFER! OFFER! GET 5 COMPLETE SETS OF EXAMS FOR EACH CLASS @ 100 SHILLINGS ONLY

NB: EACH SET HAS ALL SUBJECTS AND MARKING SCHEMES CALL 0743505350

GRADE ONE EXAMS

COMPETENCE BASED ASSESMENT

GRADE 1 YEAR 2020

END TERM 3 EXAMS (MONITORING LEARNERS PROGRESS)

ENGLISH/LITERACY ACTIVITIES

TIME: _____

NAME: _____

LEARNER UPI:
GIRL

--	--	--	--	--	--

GENDER:

BOY

SCHOOL NAME _____

No. of questions correct	
Performance level	

ANSWER ALL QUESTION IN THE SPACES PROVIDED

Use "am" or "are" to fill in the blanks

spaces

1. We _____ going to the market.
2. I _____ sweeping the classroom.

Fill in the blank spaces using plural of the words in Brackets.

3. My mum has many _____ (broom)

4. We have many _____ at home (bag)

Fill in the gaps using "this", "that"

5. _____ Is our home.
6. _____ If your car.
- 7.



This is a _____



8. This is an _____

Fill in the letters

9. Cl ____ ck

10. M ____ g

Fill in the blank spaces by adding “-ed” at the end of the doing words in bracket

11. My friends _____ their legs.(wash)

12. I _____ the classroom alone. (clean)

Use the letter box below to make two complete words.

S	T	V	N
R	A	C	R
I	M	E	L

13. _____

14. _____

Use “my”, “our”, “its” to fill in the gaps

15. We welcome _____ guests in the house.

16. I don't play when _____ raining.

Match the item below with its name using an arrow.

17.  Mobile phone

18.  Bell

19.



Television

20. Name the activity the pupils are doing.



Use “these”, “those” to fill the gaps

21. _____ are my shoes

22. _____ are my hands.

Read the passage bellow and answer the following questions that follows

Kevin has a bicycle. Kelly has a bicycle too. They like riding. One day as they were riding, Kelly had an accident. He broke his legs. His three friends visited him

23. _____ and _____ like riding bicycle.

24. Who had an accident? _____

25. Write a simple sentence using “like”

COMPETENCE BASED ASSESMENT

GRADE 1 YEAR 2020

END TERM 3 EXAMS (MONITORING LEARNERS PROGRESS)

ENVIRONMENTAL/C.R.E ACTIVITIES

TIME: _____

NAME:

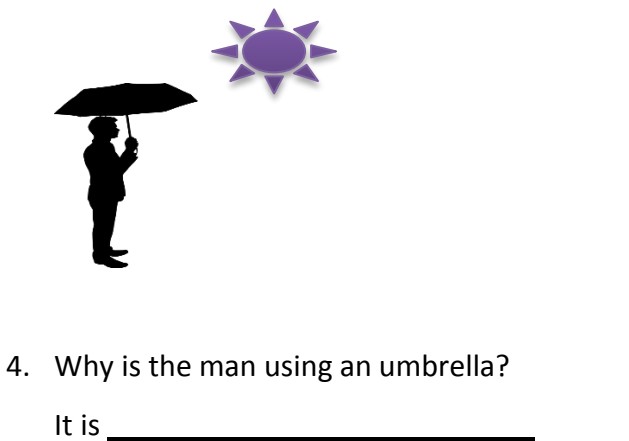
LEARNER UPI:

GENDER: GIRL BOY

SCHOOL NAME

Answer all questions in the spaces provided




What is the weather today?



No. of questions correct	ENVIRONMENTAL	C.R.E
Performance level		

5. Where do we get water from? _____
(tree, river)
6. We use water home to? _____
(sweep, wash)
7. We water plants using _____
(milk, water)
8. _____ is used to model.
(soil, grass)

Match the picture of the animal with its name

	Animal	Name
9.		Cat
10.		Cow
11.		Lion



12. Which plant is this? _____

(Tree, Banana)

13. _____ produce sound

(Drum, paper)

14. Which of the items below can injure us at home?



A

B

15. I have a _____ to be named

(right, child)

16. _____ is a basic need. **(water,**

car)

17. People work to make? _____

(paper, money)

18. We water flowers so that they can _____


_____ **(wither, grow)**


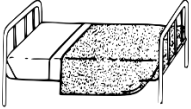
19. A cat feeds on _____

(honey, milk)

Match the items below and where they are

found.

	Item	Where found
20.		Sitting room

21.		Bedroom
22.		Kitchen

23. Draw and colour a picture of a goat

CHRISTIAN RELIGIONS EDUCATION

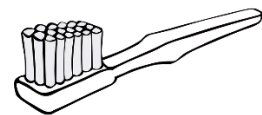
24. _____ created us. **(Man, God)**

25. Father, mother, children make up a? _____

_____ **(house, family)**

26. Which of the following items below can we

share?



A

B

27. Who killed Goliath? _____

(Samson, David)

28. _____ was hated by his brothers?

(John, Joseph)

29. We should _____ the Holy bible.

(Tear, read)

30. Mary and _____ are the parents of

Jesus. **(Zachariah, Joseph)**

31. We _____ obey our parents.

(hate, obey)

32. _____ the Baptist baptized Jesus.

(Simon Peter, John)

33. What do we do inside the picture below?



We
(Play, Worship)

COMPETENCE BASED ASSESMENT

GRADE 1 YEAR 2020

END TERM 3 EXAMS (MONITORING LEARNERS PROGRESS)

ENVIRONMENTAL/C.R.E ACTIVITIES

TIME: _____

NAME:

LEARNER UPI:

--	--	--	--	--	--

GENDER: GIRL BOY

SCHOOL NAME


Answer all questions in the spaces provided

What is the weather today?

1.  _____

2.  _____




3.  _____

4.  Why is the man using an umbrella?
It is _____

No. of questions correct	ENVIRONMENTAL	C.R.E
Performance level		

5. Where do we get water from? _____
(tree, river)
6. We use water home to? _____
(sweep, wash)
7. We water plants using _____
(milk, water)
8. _____ is used to model.
(soil, grass)

Match the picture of the animal with its name

	Animal	Name
9.		Cat
10.		Cow
11.		Lion



12. Which plant is this? _____

(Tree, Banana)

13. _____ produce sound

(Drum, paper)

14. Which of the items below can injure us at home?



A

B

15. I have a _____ to be named

(right, child)

16. _____ is a basic need. (water,

car)

17. People work to make? _____

(paper, money)

18. We water flowers so that they can _____

_____ (wither, grow)


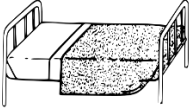
19. A cat feeds on _____

(honey, milk)

Match the items below and where they are

found.

	Item	Where found
20.		Sitting room

21.		Bedroom
22.		Kitchen

23. Draw and colour a picture of a goat

CHRISTIAN RELIGIONS EDUCATION

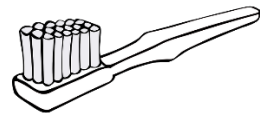
24. _____ created us. (Man, God)

25. Father, mother, children make up a? _____

_____ (house, family)

26. Which of the following items below can we

share?



A

B

27. Who killed Goliath? _____

(Samson, David)

28. _____ was hated by his brothers?

(John, Joseph)

29. We should _____ the Holy bible.

(Tear, read)

30. Mary and _____ are the parents of

Jesus. (Zachariah, Joseph)

31. We _____ obey our parents.

(hate, obey)

32. _____ the Baptist baptized Jesus.

(Simon Peter, John)

33. What do we do inside the picture below?



We
(Play, Worship)

COMPETENCE BASED ASSESMENT

GREDI YA 1 MWAKA 2020

MWISHO WA MUHULA WA 3 (MONITORING LEARNERS PROGRESS)

KISWAHILI

MUDA: _____

NAME:

LEARNER UPI:

--	--	--	--	--	--

GENDER:

BOY

GIRL

SCHOOL NAME:





No. of questions correct	
Performance level	

Jibu maswali yote

Toa majibu ya maamkuzi yafuatyo.

1. Hujambo _____
2. Shikamoo _____

Ambatanisha picha na jina

3.		Baisikeli
4.		Kifutio
5.		Kitabu
6.		Meza

Andika majina ya tarakimu zifuatazo

7. 9 _____

8. 6 _____

9. Siku ya tatu katika wiki huitwaje?

_____ (Jumapili, Jumanne)

Tumia silabi katika jedwali ifuatayo kuunda maneno mawili

Ma	U	Ma	a
----	---	----	---

10. _____

11. _____

Andika sentensi zifuatazo katika wingi

12. Mguu wangu

13. Kichwa changu.

14. Choo chetu.

Tumia “-angu”, “-etu” kujaza pengo.

15. Tunda _____ limeiva.

16. Chakula _____ ni kitamu.

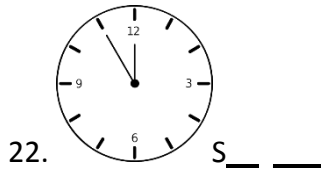
17. Magari _____ yameletwa.

Jaza pengo kwa kutumia “huyu”, “hawa”

18. Mwanafunzi _____ anacheza

19. Wezi _____ waliiba.

Jaza nafasi kwa silabi ifaayo.



Soma hadithi ifuatayo kisha ujibu maswali yafuatayo

Mimi ni Fila. Nina umri wa miaka saba. Niko gredi ya kwanza. Ninaishi na wazazi wangu. Mimi hupenda kula matunda. Kila siku baba huniletea matunda kama parachichi, mchungwa na ndizi.

23. Fila anapenda nini?

24. Taja aina za matunda anazopenda Fila

25. Fila anaishi na kina nani?

COMPETENCE BASED ASSESMENT

GRADE 1 YEAR 2020

END TERM 3 EXAMS (MONITORING LEARNERS PROGRESS)

MATHEMATICS ACTIVITIES

TIME: _____

NAME:

LEARNER UPI:

--	--	--	--	--	--

GENDER:

BOY

GIRL

SCHOOL NAME

STRAND	NUMBERS	MEASUREMENT	GEOMETRY
Question Number	1 – 15	16-20	21-24
No. of questions correct			
Performance level			

Answer all questions in the spaces provided

1. Which one is Less?



A



B


2. How many objects?

Number	Object

3. Which one is rough?



A



B

4. 76 is _____ tens _____ ones

5. Fill in the missing number in the pattern

13, 14, 15, _____, 17, 18

6. Make a pattern by increasing by 2.

5, _____, _____, _____

7. Add $65 + 40 =$

8. Aisha had 6 pencils. Joy has 3 pencils and Tito has 7 pencils. How many pencils do they have altogether?

9. Fill in the missing number

$16 - 9 =$

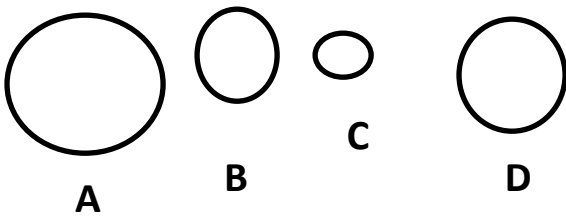
$9 +$ $= 16$

10. What is _____ 30


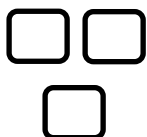

+ 10

11. What is 16 take away 7

12. Arrange from the smallest to the largest.



13. Fill in the space



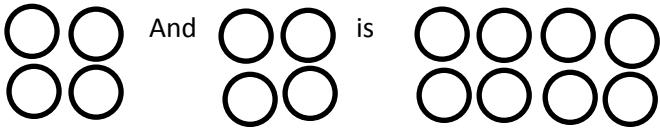
14

4 + 3 _____

14. When do you sweep your class?

 (Evening, morning, afternoon)

15. Write as addition.



4 _____ 4 =

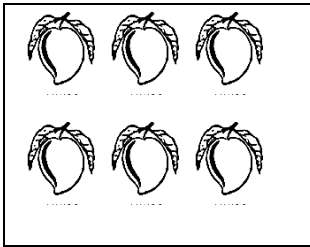
8

16.

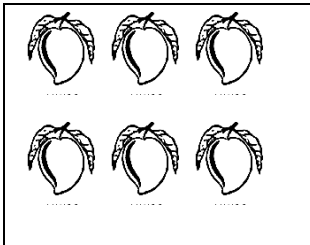


Stick A is _____ than stick B

17.



Q



R

Q is _____ as R (Less, same)


18. How much money?



19. Which one is a curved line?

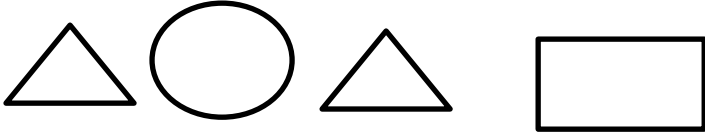


S



R

20. Which shapes are the same?



A

B


C

D

21. Which is the third day of the week?

22. Draw a pattern of circles and rectangles?

23. How many cups will fill the Bucket?




24. Which one of the following is a need?



Bicycle



Food



Sweets

COMPETENCE BASED ASSESMENT

GRADE 1 YEAR 2020

END TERM 3 EXAMS (MONITORING LEARNERS PROGRESS)

MOVEMENT/CREATIVE ARTS/MUSIC ACTIVITIES TIME: _____

NAME:

LEARNER UPI:

GENDER: BOY

GIRL

SCHOOL NAME

No. of questions correct		
Performance level		

ANSWER ALL QUESTIONS IN THE SPACES PROVIDED

A. Study the music piece below and answer questions 1-5

Playing Train

Grace V. Wilson

1. What sound does the train make?
_____ (hooting, puffing)

2. Draw and colour the picture of a train.



3. When we sing the song by opening our _____ (eyes, mouth)
4. Ding ding, toot toot is a _____ sound (musical, singing)
5. Name any two body parts used when practicing the song.

B. Below is a picture of an ornament.



6. Name the ornament _____
(necklace, bracelet)
7. Which shape is the ornament?


(Circle, oval)

8. Colour and paint the ornament.
9. _____ songs express love for the country (Patriotic, Love)
10. Identify on which occasion ornament is worn.
_____ (dances, running)

Match the animal and the sound



woof



tweet tweet

13. Colour and paint the two animals above.

COMPETENCE BASED ASSESMENT

GRADE 1 YEAR 2020

END TERM 3 EXAMS (MONITORING LEARNERS PROGRESS)

READING ALOUD/KUSOMA TIME: _____

NAME:

LEARNER UPI:

--	--	--	--	--	--

GENDER: BOY

GIRL

SCHOOL NAME

No. of questions correct		
Performance level		

READ ALOUD THE FOLLOWING WORDS

1. Jump
2. Mouth
3. Book
4. Mat
5. Hill
6. Elephant
7. Lamb
8. Yam
9. Bag
10. Church
11. King
12. Flower
13. Root
14. Ear
15. Clock

Read aloud the following sentences

- a. I like my dog.
- b. The sky is blue.
- c. My father has a boat.
- d. Tom is at the Zoo.
- e. This is a blue car.

SOMA MANENO YAFUATAYO KWA UFASAHA

1. Kima
2. Ukuta
3. Kalamu
4. Taulo
5. Konokono

SOMA SENTENSI ZIFUATAZO KWA UFASAHA

1. Dora mdogo anacheza ngoma.
2. Bibi anatembea kwa kijiti.
3. Rosa anafagia.
4. Fisi watatu wanakula.
5. Ninapenda kula matunda.

FOR ANSWERS AND MORE SETS OF EXAMS, SMS OR WHATSAPP:

0743505350

**OFFER! OFFER! GET 5 COMPLETE SETS OF EXAMS FOR EACH
CLASS @ 100 SHILLINGS ONLY**

NB: EACH SET HAS ALL SUBJECTS AND MARKING SCHEMES CALL

0743505350

**ALSO AVAILABLE: SUMMARIZED NOTES FOR ALL CLASSES ALL SUBJECTS,
KCPE/KCSE PAST PAPERS 2000-2019 WITH MARKING SCHEMES,
POWERPOINTS AND ANIMATIONS AND SETBOOKS DVDS. 0743505350**

