

KPSEA 2024 KEY AREAS **CREATIVE, SST & CRE/IRE**

**{200 CREATIVE ARTS, SOCIAL STUDIES &
CRE/IRE PREDICTION QUESTIONS}**

{COMMONLY KPSEA TESTED QUESTIONS}

*A Series of KPSEA 2024 Prediction Questions
Prepared by a Pannel of Top KNEC Examiners HQ
Nairobi*

**All KPSEA 2024 Candidates are advised to take the
questions Serious!**

Confidential!!!

For Marking Schemes

Contact 0724333200/0795491185/0768321553

Or Order online at

www.kenyaeducators.co.ke

KENYA EDUCATORS CONSULTANCY

A. **CREATIVE ARTS & SPORTS.**

1. When practising crayon etching, we use

- B. a sharp object.
- C. plasticine.
- D. clay.
- E. cotton wool.

2. A teacher asked some learners the use of a pencil case. Here are their responses:

Komu: keeping painting brushes.

Kambua: storing blades.

Wamae: carrying pencils.

Mtindi: keeping finished leather work.


Who among the learners was correct?

- A. Komu
- B. Mtindi
- C. Kambua
- D. Wamae

3. All the following cannot be kept in an expandable folder except

- A. painting materials.
- B. crayons.
- C. files.
- D. papers.

4. Which of the following forms displays smudge technique?



5. Which of the following is not a secondary colour?

- A. Blue
- B. Green
- C. Orange

D. Violet

6. All the following crafts cannot be made using twine technique. Which one can?



7. Which of the following pairs of items may be needed for montage?

- A. Adhesive, nails.
- B. Picture cut outs, glue.
- C. A pair of scissors, paper.
- D. Leather, manila paper.


8. Which one of the following puppets can wing string?

- A. Glove puppet
- B. Rod puppet
- C. Marionette
- D. Stick puppet

9. The technique of using dots to create light and dark effects on forms is called

- A. smudge.
- B. crayon etching.
- C. cross hatching.
- D. stippling.

10. Which of the following indigenous crafts is a product of leather work?

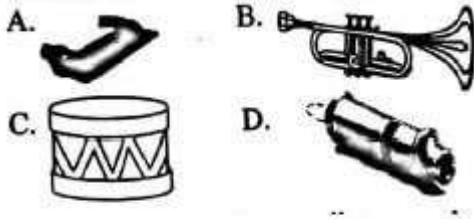


11. Percussion music instruments can be grouped into

- A. three
- B. four
- C. five

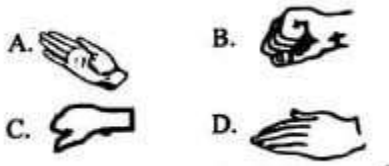
- D. two
12. Which one of the following is an example of patriotic songs?
- Songs sung for babies.
 - The National Anthem.
 - Traditional folk songs.
 - Gospel songs.

13. Which of the following musical instruments can be played by shaking?



14. It is important to observe distance when dancing in order to
- come up with new moves.
 - avoid spreading contagious diseases.
 - allow free circulation of air.
 - ensure safety among dancers.
15. Which of the following lines is found in the chorus of the East African Anthem
- Umoja wetu ni nguzo yetu.
 - Tuijenge jumuiya bora.
 - Haki iwe ngao na mlinzi.
 - Tuwezeshe kuishi kwa amani.

16. Which of the following hand signs represents doh pitch?



17. The part of a drum that is hit to produce sound is called the

- lace.
- foot.
- resonator.
- membrane.

18. All the following are aspects of folk songs except

- occasion.
- message.
- dancing style.
- participants.

19. Which of the following symbols shows a quaver?




20. Which of the following is the role of an instrument in a folk song

- Guiding and leading other performers.
- Playing the instruments.
- Decorating dancers by adorning their bodies.
- Being a role model to the other performers.

C. SOCIAL STUDIES.

21. Below is a type of population distribution.



The population distribution can be described as

- linear.
- dense.
- sparse.
- nucleated.

22. The following are characteristics of a climatic region in Kenya.

- A. Experiences annual rainfall between 1800mm-2000mm.
B. Experienced in the highland areas.
C. Experiences temperatures ranging between 18°C-23°C
The climatic region described above is likely to be
A. equatorial of the coast and the lake basin.
B. mountain and highland.
C. modified tropical highland.
D. savannah.
23. Which of the following countries does not border Kenya to any side?
A. Ethiopia
B. Sudan
C. Somalia
D. Rwanda
24. The following are economic activities carried out in various counties in our country:
i. Lumbering
ii. Fishing
iii. Farming
iv. Basketry
Which among the economic activities listed above can be made possible using timber?
A. i
B. ii
C. iv
D. iii
25. Which of the following is an example of build up environments?
A. Swamps
B. Valleys
C. Monuments
D. Forests
26. Who among the following school administrators takes minutes in the Board of Management meetings in a public primary school in Kenya?
A. Deputy head teacher.
B. Head teacher.
C. Senior teacher.
D. School sponsor.
27. All the following are Eastern Cushites except
A. Oromo.
B. Bajuni.
C. Rendile.
D. Borana.
28. Which of the following helps to manage time in school?
A. A classroom register.
B. A school motto.
C. School core values.
D. A school routine.
29. In the past, children learnt from the elders through all the following except
A. stories
B. proverbs.
C. notes.
D. riddles.

30. Which of the following minerals is **correctly** matched with the place it is found?
- A. Soda ash - Magadi
 - B. Diatomite - Malindi
 - C. Salt - Kariandusi
 - D. Oil - Nakuru
31. Which of the following actions can help reduce the rate of road accidents in our country?
- A. Reduction of transport fare.
 - B. Increment of traffic officers' salaries.
 - C. Creating awareness on the importance of obeying traffic rules.
 - D. Tarmacking all major roads in the country.
32. Which of the following is a quality of a good leader?
- A. Dishonest
 - B. Caring
 - C. Cruel
 - D. Unjust
33. Chege a grade five pupil has been employed in a hotel. The hotel owner is practising:-
- A. Child labour
 - B. Early marriage
 - C. Good citizenship
 - D. Child right
34. Who among the following traditional leaders practised long distance trade?
- A. Mekatilili wa menza
 - B. Njuri Ncheke
 - C. Oloibon Lenana
 - D. Chief Kivoi Mwendwa
35. Which of the following economic activities is **correctly** matched with the symbol it represents?
- A. Saw mill-fishing
 - B. Tea- transport
 - C. Quarry - mining
 - D. Road - farming
- D.CHRISTIAN**
RELIGIOUS
EDUCATION
36. Which one of the following is a form of leisure?
- A. Working hard in school.
 - B. Resting.
 - C. Participating in a school choir.
 - D. Maintaining physical fitness.
37. The type of marriage presided over by a government official is called
- A. customary marriage
 - B. Christian marriage
 - C. civil marriage.
 - D. traditional marriage.
38. Jesus raised a widow's son in
- A. Timnah.
 - B. Galilee.
 - C. Nain.
 - D. Samaria.
39. How many stones did Elijah use to built an altar during the battle with the prophets of Beal?
- A. 7
 - B. 3
 - C. 5

- D. 12
40. The story of Balaam and his donkey teaches Christian value of
- A. obedience.
 - B. honesty.
 - C. trust.
 - D. faith.
41. Which of the following pairs of books is found in the Old Testament?
- A. Jude, Titus
 - B. James, Mark
 - C. Timothy, Ezra
 - D. Zephania, Haggai
42. The birth of Jesus Christ was announced by
- A. John the Baptist.
 - B. Isaiah
 - C. angel Gabriel
 - D. the shepherds
43. During the Eucharist,
- A. the disciples spoke in strange tongues.
 - B. Jesus pointed out His betrayer.
 - C. a voice was heard from heaven.
 - D. darkness covered the whole land.
44. Your friend has a habit of breaking into his classmates' desks and picking their property. As a Christian, how best can you advise him?
- A. Tell him to do it secretly.
 - B. Encourage him to keep it up.
 - C. Tell him why it is wrong to steal.
 - D. Tell him to steal once in a while.
45. All the following are not possible causes of child labour except
- A. poverty.
 - B. pride.
 - C. physical fitness.
 - D. strict parents.
46. We can take good care of the environment by
- A. helping the less fortunate members of the society.
 - B. planting and taking good care of trees.
 - C. visiting children's homes.
 - D. laying hands on the sick.
47. All the following are lessons from the parable of talents except
- A. we should use our God given talents well
 - B. it is everybody's responsibility to know their talents.
 - C. our talents will be taken away if we don't use them.
 - D. God will ask how we used the talents He gave us.
48. Who among the following was John the Baptist's father?
- A. Ananias
 - B. Obed
 - C. Zecharia
 - D. Jesse
49. Njiwa always follows her guardians' rules. Njiwa can therefore be described as
- A. honest.
 - B. kind.
 - C. trustworthy.
 - D. obedient.
50. Which Christian value did Bartmacous portray before his healing?
- A. Blindness
 - B. Tolerance
 - C. Faith
 - D. Patience

E. ISLAMIC
RELIGIOUS EDUCATIO
N.

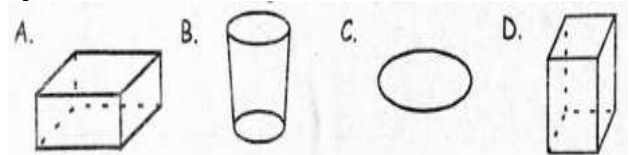
36. Surah Alaq was revealed by the prophet at cave
 A. Hira
 B. Thaur
 C. Hur
 D. Badr
37. The surah that Bismillahi is one of the verses is
 A. Nas
 B. Fatiha
 C. Ikhlas
 D. Fiyl
38. The sunnah prayer performed after Isha during the month of Ramadhan is
 A. Dhuha.
 B. Taraweh.
 C. Tahajud.
 D. Asr.
39. Isra-Wal-Miraj took place
 A. at night.
 B. in the morning.
 C. at midday.
 D. in the evening.
40. Surah Ikhlas was revealed in
 A. Yathrib.
 B. Madina.
 C. Saudia.
 D. Makkah.
41. Surah Al-Humazah does not speak about
 A. slandering.
 B. backbiting.
 C. piling wealth.
 D. hygiene.
42. Allah rewards us according to our
 A. tribes.
 B. faith.
 C. deeds.
 D. races.
43. Nabii Yusuf (AS) was the son of
 A. Nabii Ibrahim.
 B. Ya'qub.
 C. Yunus.
 D. Ismail.
44. Removing harmful objects from the way is an example of
 A. swalah.
 B. swaum.
 C. swadaqah.
 D. communication.
45. According to prophet's hadith on greetings, a person who starts greeting the others is closest to
 A. paradise.
 B. angels.
 C. jahanam.
 D. Allah.
46. The angel responsible for taking souls is called angel
 A. Israfil.
 B. Atid.
 C. Izrai.
 D. Mikail.
47. Muslims normally give swadaqah to earn
 A. thawabs.
 B. a living.
 C. pride.
 D. attention.
48. The prayers said before fardh prayers are called
 A. Witr.
 B. Ba'adiyah.
 C. Qabliyah.
 D. Taraweh.
49. Allah's attribute that means The all knowing is
 A. Al-Ghaffar
 B. Al-Wahiid

- C. Al-Aalim
D. Al-Hakim
50. Any bad deed in Islam should be followed by
- another bad deed.
 - a good deed.
 - forgiveness.
 - the same kind of deed.

F. CREATIVE ARTS & SPORTS

51. Three of the following materials are used in making montage. Which one is **not**?
- Old newspaper
 - Manila paper
 - Glue
 - Water
52. Smearing colour onto a surface is known as
- smudging
 - colouring
 - brushing
 - washing
53. The lightness or darkness of a colour is known as
- tone
 - paint
 - colour
 - value
54. The following are natural materials needed for weaving **except**
- Sisal
 - Banana fibres
 - Reeds
 - Plastic
55. Three of the following materials can be made from leather. Which one **cannot**?
- Hats
 - Bags
 - Drums

- D. Cups
56. Which one of the following shows a cylindrical form?



57. Grade five pupils made the clay item drawn below. The item is known as a




- Cup
 - Pot
 - Sufuria
 - Jug
58. The following materials are needed to make a drum except
- leather material
 - Knives
 - Old containers
 - cloth
59. What is the name of the digital device shown below?



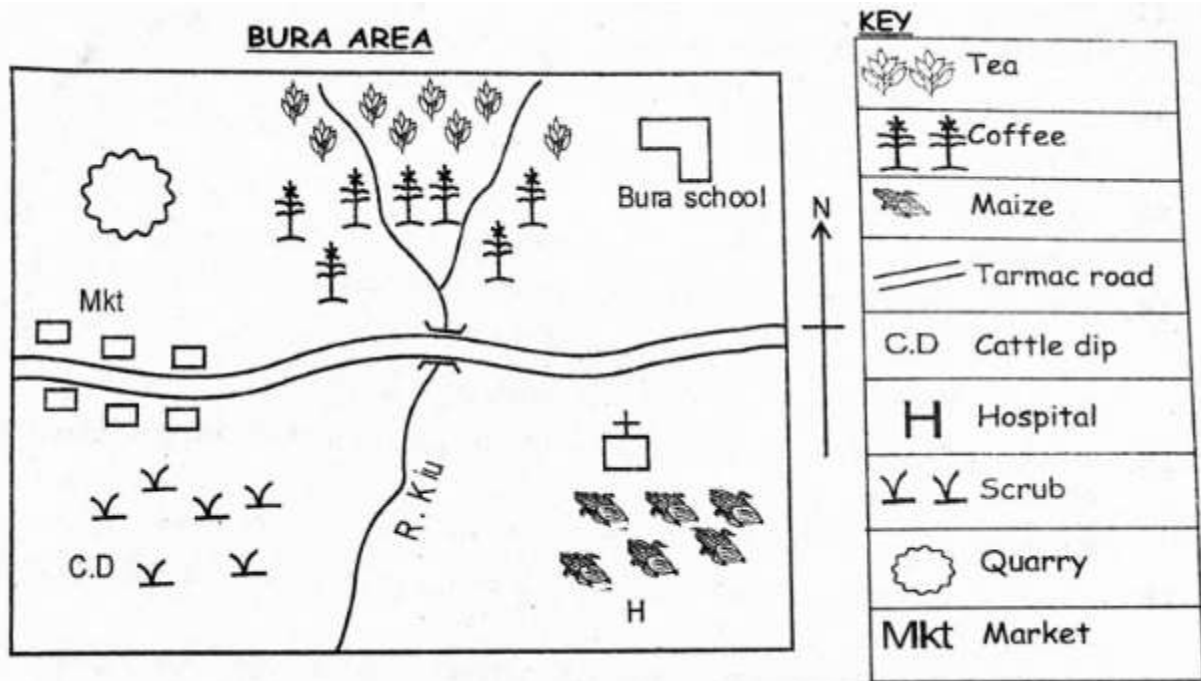
- Computer
 - Laptop
 - Mobile phone
 - Tablet
60. Which one of the following materials **cannot** be used for painting?
- Crayons
 - Charcoal
 - Pencil
 - Eraser

G. MUSIC

61. The East African Anthem is sang in the following countries except
- Rwanda
 - South Sudan
 - Uganda
 - Ethiopia
62. The participant who leads the rest in a folk song is known as a
- singer
 - leader
 - soloist
 - performer
63. Cultural artifacts are kept in
- stadiums
 - churches
 - museums
 - hospitals
64. Wind instruments are played by
- hitting
 - shaking
 - blowing
 - plucking
65. How do we stand when singing the national anthem?
- At attention
 - With our hands up
 - With one leg lifted
 - With legs apart
66. When two voices are in agreement while singing together, they are said to be in
- pitch
 - harmony
 - Volume
 - auto
67. A sang that is sand by the people in the mosques or churches are known as _____
- folk songs
 - sacred songs
 - patriotic songs
 - lullaby songs
68. Where is mouth placed in the musical instrument shown below?
- 
- a
 - b
 - c
 - d
69. The following are musical instruments which accompany songs. Which one is **not**?
- Kayamba
 - Piano
 - Guitar
 - Hand clapping
70. The following words are found in the first stanza of the Kenya National Anthem. Which one is **not**?
- God
 - Creation
 - Bless
 - Arise

H. SOCIAL STUDIES

Study the map of Tuli Area below and answer the questions that follows



71. River kiu flows from _____ to _____
- North, South
 - South, North
 - East, West
 - South to West
72. What is the direction of the school from the cattle dip?
- South West
 - North West
 - North East
 - South East
73. Which religion do the people of Bura area belong?
- Christianity
 - Islamic
 - Pagan
 - Hindu
74. What is the main means of transport used in Bura area?
- Road
 - Air
 - Railway
 - Water
75. Which element of a map is missing in the above map Bura Area?
- Key
 - Frame
 - Title
 - Scale
76. Cultural artifacts are kept in
- stadiums
 - churches
 - museums
 - hospitals
77. The following are parts of administration in a school except
- Headteacher
 - Deputy head teacher
 - Class prefect
 - Chief
78. Soda ash is mined in:
- Lake Victoria
 - Lake Elementaita
 - Lake Baringo

- D. Lake Magadi
79. The following are traditional methods of fishing except
- A. herbs
 - B. basket
 - C. traps
 - D. trawling
80. Which of the following is a Bantu community in Kenya?
- A. Borana
 - B. Maasai
 - C. Akamba
 - D. Luo
81. Which is the fastest means of transport?
- A. Railway
 - B. Road
 - C. Air
 - D. Water
82. The growing of flowers only is known as
- A. horticulture
 - B. floriculture
 - C. viticulture
 - D. agriculture
83. Who is the head of a county?
- A. President
 - B. Governor
 - C. Member of county assembly
 - D. Chief
84. The following are traditional methods of fishing except
- A. herbs
 - B. basket
 - C. traps
 - D. trawling
85. Cultural artifacts are kept in
- A. stadiums
 - B. churches
 - C. museums
 - D. hospitals
86. The following were ways of passing knowledge in the past. Which one is **not**?
- A. Songs
 - B. Riddles
 - C. Reading
 - D. Apprenticeship
87. Which one of the following is the largest lake in Kenya?
- A. Lake Victoria
 - B. Lake Turkana
 - C. Lake Bogoria
 - D. Lake Naivasha
88. Dairy farming is done in all the following counties in Kenya **except**
- A. Kişii
 - B. Meru
 - C. Kiambu
 - D. Mandera
89. An area of a fairly raised land that is almost flat at the top is known as a
- A. Plain
 - B. Plateau
 - C. Lake
 - D. Hill
90. The general elections in Kenya is done after every _____ years.
- A. 5
 - B. 10
 - C. 20
 - D. 15
- I. CHRISTIAN RELIGIOUS EDUCATION**
91. A grade five teacher was teaching his pupils about the story of creation from the book of Genesis. The teacher taught them that God created human beings **mainly** to:
- A. eat the fruits in the garden
 - B. cultivate the garden

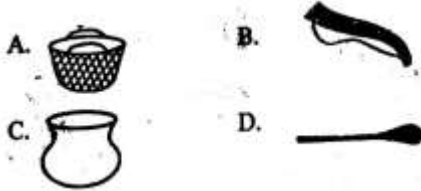
- C. take care of his creation
D. talk with the serpent
92. Which one of the following is NOT a member of the nuclear family.
- A. Aunt
B. Mother
C. Father
D. Children
93. Who among the following kings of Israel was known for his wisdom?
- A. Samson
B. Ahab
C. Solomon
D. David
94. Who among the following prophets had a contest with the prophets of baal at Mt. Camel?
- A. Elisha
B. Elijah
C. Jeremiah
D. Joel
95. Alice, a grade four learner, keeps on praying to God to excel in her exams but feels like God is NOT answering her prayers. Which one of the following is the BEST advice you would give her?
- A. To keep on praying
B. To drop out of school
C. To commit suicide
D. To stop praying
96. Children should learn to obey their parents mainly because:
- A. They will be cursed if they don't
B. It is away of pleasing them
C. They will become responsible citizens
D. God commands them to do so
97. Which one of the following gifts of the Holy Spirit did Peter portray on the day of pentecost?
- A. preaching
B. knowledge
C. Healing
D. Wisdom
98. Which one of the following miracles performed by Jesus shows that He has power over nature?
- A. Healing the man possessed by demons
B. Calming the storm
C. Healing the Roman officer's servant
D. Healing Peter's mother in-law
99. Which one of the following is the BEST way grade five pupils can utilize their leisure time?
- A. practicing in the church choir
B. cleaning the school compound
C. reading Bible stories
D. Visiting the elderly
100. Paul, a grade four learner bought a pencil from a shop. The shopkeeper Jane gave excess change which he returned. The Christian value that Paul demonstrated is:
- A. love
B. humility
C. honesty
D. obedience
- J. CREATIVE ARTS & SPORTS**
101. A Grade 6 boy drew a picture like the one shown below.



The type of drawing drawn above is known as

- A. memory drawing.
B. still life drawing.
C. stationary drawing.

- D. virtual drawing.
102. Which one of the following items can be made by carving?

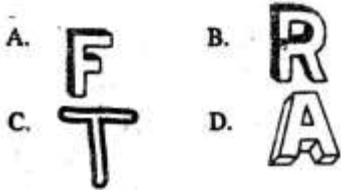


103. A teacher drew a form like the one below.



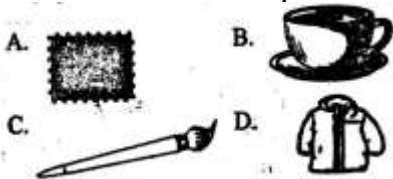
Which of the following techniques did the teacher use to show shading effect?

- A. Cross hatching.
B. Smudge
C. Crayon etching.
D. Collage.
104. Which one of the following shows a 2 dimensional letter?



105. A sculpture can be carved using
- A. plasticine.
B. clay.
C. plastic.
D. wood.

106. Which one of the following indigenous crafts can be made using plain and twine technique?



107. A puppet like the one drawn below was drawn on a classroom chart.



The type of puppet drawn is called a

- A. glove puppet.
B. marionette.
C. rod puppet.
D. stick puppet.
108. All the following are elements of photography. Which one is **not**?
- A. Focus.
B. Composition
C. Lightning.
D. Framing.
109. Which of the following lists consists of two secondary colours and one primary colour?
- A. Orange, green, red.
B. Green, purple, orange.
C. Yellow, red, blue.
D. Blue, green, red.
110. Paraffin wax and bees wax are used in
- A. crayon etching.
B. cross hatching.
C. smudge technique.
D. painting.

111. A traditional dancer was seen marking her face and body with red clay. This is called

- A. body tattooing.
B. costuming.
C. body adornment
D. performing.
112. Percussion instruments produce sound when

- A. blown or plucked.
B. shaken or blown.
C. plucked or shaken.
D. hit or shaken.
113. Below is a wind instrument called abu.



Which of the following communities plays the musical instrument drawn above?

- A. Mijikenda.
B. Luo
C. Abagusii.
D. Agikuyu.
114. Which one of the following elements of a folk song is the **most** important?
- A. Message.
B. Instrumentation
C. Participants.
D. Occasion.
115. A traditional dancer made a hat using cartons and feathers in readiness for a dance. The hat he made is an example of
- A. instruments.
B. clothes
C. costumes.
D. props.
116. Which one of the following lines is **not** found in the Kenya National Anthem?
- A. Kila siku tuwe na shukrani.
B. Raha tupate na ustawi.
C. Natulinde uhuru na amani.
D. Nasi tujitoe kwa nguvu.


117. Which of the following symbols shows a minim?





118. Which of the following parts of a drum is adjusted to tune it?
- A. Lace.
B. membrane
C. Foot.
D. Resonator.
119. Which of the following lines is found in the last verse of the East African Community Anthem?
- A. Tuwezeshe kuishi kwa amani.
B. Umoja wetu ni nguzo yetu.
C. Natulinde uhuru na amani.
D. Tufanye kazi sote kwa makini.
120. Body movements used to show the meanings of words or ideas in a song are called
- A. moods.
B. tones
C. dictions.
D. gestures.


K. SOCIAL STUDIES.

121. In African traditional education,
- A. children learnt through the internet.
B. teachers gave their learners notes to read.
C. elders taught the young ones through story telling.
D. group discussions were held in classrooms.
122. Who among the following school administrators is at the

- highest hierarchy in a public primary school in Kenya?
- Senior teacher.
 - Class teacher.
 - Deputy head teacher.
 - Head teacher.
123. Who among the following is not among the Western Bantus?
- Akamba.
 - Abakuria
 - Abaluhya.
 - Abagusii.
124. Which one of the following means of communication is audio-visual?
- A. 

B. 

C. 

D. 
125. All the following are tourist attractions in Kenya except
- language groups.
 - cultural activities.
 - natural sceneries.
 - wildlife.
126. Which one of the following is **not** a way through which tourism has contributed to the economy of our country?
- Promoting local industries.
 - Providing basic needs to families in the land.
 - Earning the country foreign exchange.
 - Promoting cultural services.
127. A school routine is normally shown on
- a timetable.
 - an exercise book cover.
 - the school uniform.
 - the school gate.
128. Which of the following lists shows crops that can be grown under horticulture?
- Coffee, maize, sugarcane.
 - Grass, onions, rice.
 - Pumpkins, sisal, tea.
 - Tomatoes, cabbages, kales
129. Some Grade six learners were asked to name some resources found in our country:
- Osman - museums
Aisha - lakes
Rajab - minerals
Maimuna - forests
- Who among the learners was not correct?
- Maimuna.
 - Aisha.
 - Rajab
 - Osman.
130. Which of the following minerals is **correctly** matched with the place it is found?
- Soda ash - Magadi
 - Diatomite - Malindi
 - Salt - Kariandusi
 - Oil - Nakuru
131. Dairy fanning is important in our country because
- farmers keep different breeds of dairy cattle.
 - farmers are able to earn a living.
 - every citizen uses dairy products on a daily basis.
 - dairy farmers are able to give loans to young farmers at no interest.
132. How many basketfuls of food were left after Jesus fed the multitude?

- E. 24
F. 10
G. 3
H. 12
133. Which is the **correct** way of using social media?
A. Accusing others
B. Watching nakedness
C. Sending greetings to friends
D. posting immoral pictures
134. Otieno wakes up very early every Sunday to arrange chairs in their church. Otieno demonstrates:-
A. responsibility
B. courage
C. holiness
D. loneliness
135. Who raised the Jairus daughter from death?
A. Peter
B. Jesus
C. Elisha
D. Paul
- L. CHRISTIAN RELIGIOUS EDUCATION**
136. During the baptism of Jesus, which of the following events did **not** take place?
A. Heaven opened
B. Holy Spirit came down in form of a dove.
C. A voice came from heaven.
D. Temple curtains were torn.
137. Preparation for the coming of the Messiah was the **main** preaching of
A. pharisees.
B. John
C. Jesus.
D. Jews.
138. When Jesus fed a multitude, He portrayed His
A. power over nature.
B. compassion for the needy.
C. power over death.
D. faith in His father.
139. Which of the following books of the Bible is in the Old Testament?
A. Acts
B. Titus
C. Haggai
D. Thessalonians
140. Jesus showed His power over nature when He
A. calmed the storm.
B. healed a paralysed man.
C. performed miracles.
D. raised the dead.
141. The parable of Jesus about the lost sheep teaches Christians
A. the value of attending church services.
B. about the recovery of the lost human beings.
C. about the importance of keeping property safely.
D. the value of tending well to domestic animals.
142. Happy are those who work for peace,
A. for they will see God.
B. God will be merciful to them.
C. God will call them His children.
D. God will grant them peace.
143. Which Christian value did king Solomon put into use when ruling?
A. Obedience.
B. Patience

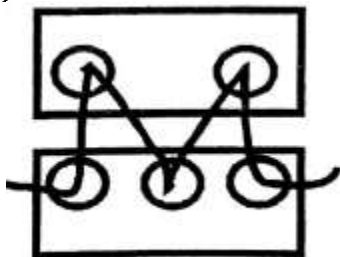
- C. Trust.
D. Wisdom.
144. Who among the following were the first to know about the birth of Jesus Christ?
A. Sherpherds.
B. jews
C. Pharisees
D. Kings Herod and Pilate.
145. The contest at mount Carmel was between the prophets of Baal and
A. Elisha.
B. Jesus
C. angels.
D. Elijah.
146. The act of deciding not to revenge is called
A. unity.
B. forgiveness
C. sympathy.
D. weakness.
147. Bartimaeous was healed by Jesus mainly because of his
A. faith.
B. blindness
C. courage.
D. patience.
148. As Grade 6 pupils were out for break, Murefu was seen by Njiwa taking something from their class teacher's hand bag. As a Christian, what was the best action for Njiwa to take?
A. Report him to his parents.
B. Tell the class about it.
C. Tell him to stop and also effects of such acts.
D. Share whatever Murefu took with him.
149. Which among the following is **not** a form of child labour?
A. A Grade five boy sweeping their classroom.
B. A twelve year old girl taking care of a baby for a pay.
C. A Grade 6 boy working in a quarry for a pay.
D. A seventeen year old boy working in a shop for a pay.
150. When Jesus healed the ten lepers, how many were thankful?
A. None of them.
B. Nine.
C. One.
D. All of them.

M. ISLAMIC RELIGIOUS EDUCATION.

136. Which one of the following attributes of Allah means All forgiving?
A. Al-Haafidh.
B. Al-Ghafar.
C. Al-Aalim.
D. Al-Malik,
137. Which one of the following is not a characteristic of angels?
Angels
A. can change form.
B. were created from light.
C. can either be males or females.
D. do not have parents.
138. Which one of the following is a miracle performed by prophet Musa (AS)?
A. He had clear signs of Allah's mercy on him.
B. Turning a rod into a snake.
C. His hand shone like the moon when he put it in his armpits.

- D. Raising the dead.
139. Muslims can earn thawabs when they
- A. pray once per day.
 - B. perform swalahs correctly.
 - C. fast everyday.
 - D. visit Makka yearly.
140. Taraweh is a baadiyah swalah performed during the month of
- A. Ramadhan.
 - B. Dhulhijja.
 - C. Shabaan.
 - D. Muharram.
141. All the following are optional prayers. Which one is **not**?
- A. Fajr.
 - B. Qabliyah.
 - C. Tarawch.
 - D. Baadiyah.
142. Which among the following surahs is **correctly** matched with its meaning?
- A. Al-Kawthar a river in paradise
 - B. Al-Maun the Quraish
 - C. Al-Fyl the dawn
 - D. Al-Massad the cursed
143. **We should always be grateful to Allah for everything that He continues to bless us with.** This is a lesson from surah
- A. An-Nas.
 - B. Al-Kawthar.
 - C. Al-Baqarah.
 - D. Al-Lahab.
144. The first pillar of Islam is
- A. swalah.
 - B. hijja
 - C. zakat.
 - D. shahadah.
145. According to the prophet's hadith on knowledge, seeking knowledge is a must for
- A. all.
 - B. elders.
 - C. males.
 - D. females.
146. There are _____ categories of Najasaat.
- A. four
 - B. three
 - C. two
 - D. five
147. It is an obligation of parents to
- A. provide entertainment to their children.
 - B. provide basic needs to their children.
 - C. do homework for their children.
 - D. buy modern games for their children.
148. Abdul's father bought him a smartphone. As a Muslim, Abdul should **not**
- A. download qasweeda using his smartphone.
 - B. send abusive pictures to his friends.
 - C. Share Qura'n verses in the whatsapp group.
 - D. send seasons greetings to his friends.
149. Which of the following acts is forbidden in Islam?
- A. Working in a bank.
 - B. Fishing.
 - C. Begging.
 - D. Working in a salon.
150. How many khutbahs are there in Idd swalah?
- A. 7

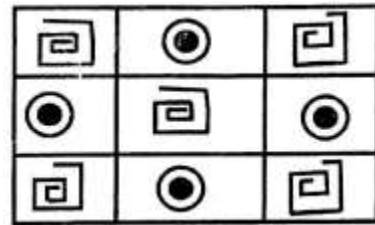
- B. 5
C. 3
D. 2
151. Which of the following is an upper case letter?
A. a
B. b
C. H
D. g
152. A person who manipulates and control puppet is called:-
A. marionette
B. puppeteer
C. magician
D. acrobat
153. Which of the following is **not** a principal of art?
A. Balance
B. Tonal value
C. Proportion
D. Overlapping
154. The following materials are used in painting **except**:-
A. Pencil
B. Crayon
C. Thread
D. Brush
155. The process of joining these two pieces of leather is called:



- A. beading
B. etching
C. thonging
D. hemming
156. Three of the following are benefits of songs **except**. Songs

people.


- A. educate
B. entertain
C. console
D. accuse
157. Erick used the printed fabric shown below to decorate a book cover. How many motif have been used?



- A. Three
B. Two
C. Nine
D. Six
158. Sarah, a grade five learner drew a hut on a hard carton. She then applied glue and mounted rice on the drawing. Sarah was making a
A. mosaic
B. motif
C. collage
D. montage
159. Which colour do you get when you mix red and yellow?

- A. Green
B. Violet
C. Orange
D. White

160. The pattern below is used in weaving. It is called:-



- A. twinning
- B. splitting
- C. plaiting
- D. plain weaving

161. The pattern above can be used to decorate a

- A. mat
- B. pot
- C. sufuria
- D. T.V

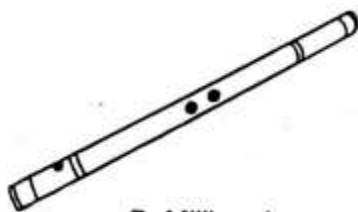
162. Wind instruments are played by:-

- A. plucking
- B. blowing
- C. hitting
- D. shaking

163. Special clothes that are worn when performing folk songs are called:-

- A. uniform
- B. costumes
- C. adornment
- D. decoration

164. Which community uses the instrument below?



- A. Kalenjin
- B. Mijikenda

- C. Akamba
- D. Teso

165. Which of the following types of song is correctly matched with the community it comes from?

- A. Ramogi - Akamba
- B. Isikuti - Luo
- C. Mwomboko - Agikuyu
- D. Kilumi - Luhya

166. Which of the following materials can be used to make a dancing skirt?

- A. Clay soil
- B. Tree leaves
- C. Manilla paper
- D. Sisal fibres

167. What is the use of adhesives when mounting an artwork?

- A. Decoration.
- B. Exhibition.
- C. Sticking.
- D. Cutting.

168. The speed of a song is called:-

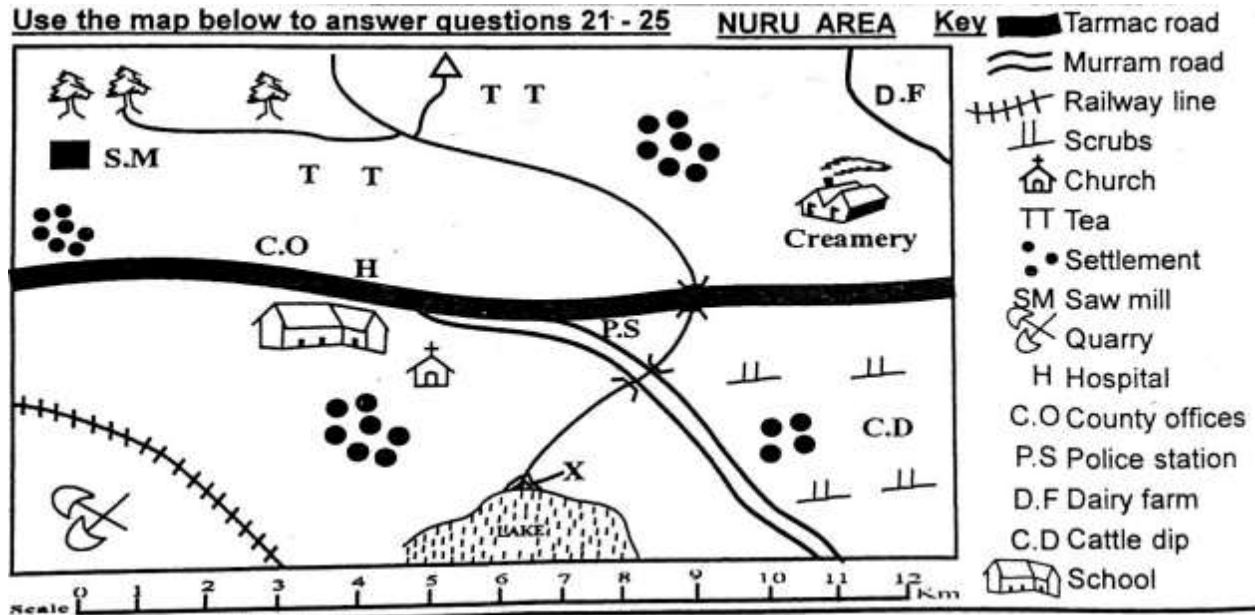
- A. tempo
- B. pitch
- C. rhythm
- D. volume

169. "Natujenge taifa letu". This statement is found in the:-

- A. East Africa Anthem
- B. Sacred song
- C. Topical song
- D. Kenya National Anthem

170. A piece of song performed by two people is called:-


- A. duet
- B. solo
- C. choral
- D. trio



171. Which pattern is formed by the population distribution in Nuru Area?
- A. nucleated
 - B. sparse
 - C. dense
 - D. linear
172. Nuru area is headed by:-
- A. Assistant County Commissioner
 - B. Deputy County Commissioner
 - C. Governor
 - D. Chief
173. The climate experienced in the Northern part of Nuru area is :-
- A. cool and wet
 - B. hot and wet
 - C. cool and dry
 - D. hot and dry
174. The feature marked x is called:-
- A. estuary
 - B. delta
 - C. confluence
 - D. tributary
175. Which economic activity is **not** carried out in Nuru Area?
- A. Lumbering
 - B. Farming
 - C. Tourism
 - D. Mining
176. Which of the following groups consists of the plain nilotes in Kenya?
- A. Agikuyu, Dawida, Abakuria
 - B. Maasai, Samburu, Turkana
 - C. Somali, Boran, Rendille
 - D. Arabs, Nubians, Indians
177. A school routine is normally shown on
- A. a timetable.
 - B. an exercise book cover.
 - C. the school uniform.
 - D. the school gate.
178. Equatorial climate is always:-

- A. hot and wet
B. hot and dry
C. cool and wet
D. cool and dry
179. On 12th December, Kenyans celebrate:-
A. Madaraka day
B. Labour day
C. Jamhuri day
D. Mashujaa day
180. Which of the following minerals is **correctly** matched with the place it is found?
A. Soda ash - Magadi
B. Diatomite - Malindi
C. Salt - Kariandusi
D. Oil - Nakuru
181. One of the crops below is grown in the subsistence farms. Which is it?
A. Tea
B. Flowers
C. Kales
D. Coffee
182. Which of the following is a quality of a good leader?
A. Dishonest
B. Caring
C. Cruel
D. Unjust
183. Chege a grade five pupil has been employed in a hotel. The hotel owner is practising:-
A. Child labour
B. Early marriage
C. Good citizenship
D. Child right
184. Who among the following traditional leaders practised long distance trade?
A. Mekatilili wa menza
B. Njuri Ncheke
C. Oloibon Lenana
D. Chief Kivoi Mwendwa
185. Which of the following economic activities is **correctly** matched with the symbol it represents?
A. Saw mill-fishing
B. Tea- transport
C. Quarry - mining
D. Road - farming
186. Identify a historic built environment in Kenya.
A. Wilson airport
B. River Tana
C. Mount Kenya
D. Fort Jesus
187. Which is the largest country in Eastern Africa?
A. Tanzania
B. Sudan
C. Somalia
D. Djibouti

Use the diagram below to answer questions 38 and 39



188. The fishing method illustrated above is
A. trawling.
B. net drifting.
C. harpooning.
D. purse-seining.
189. The fishing method above is used where
A. water is flowing fast.

- B. there are few fish.
C. a river is shallow.
D. the sea is deep.
190. How many basketfuls of food were left after Jesus fed the multitude?
- E. 24
F. 10
G. 3
H. 12
191. Which is the **correct** way of using social media?
- A. Accusing others
B. Watching nakedness
C. Sending greetings to friends
D. posting immoral pictures
192. Otieno wakes up very early every Sunday to arrange chairs in their church. Otieno demonstrates:-
- A. responsibility
B. courage
C. holiness
D. loneliness
193. Who raised the Jairus daughter from death?
- A. Peter
B. Jesus
C. Elisha
D. Paul
194. Which of the following is **not** one of the books in the Bible?
- A. Genesis
B. Exodus
C. Gideon
D. Samuel
195. Who among the following grade six learners used his/her free time well during the December holiday?
- A. Ken- went to steal fruits from a nearby farm
B. Eliud - went to fetch water for an old lady
C. Tom was given a ride by a stranger
D. Betty-talking with her friends about others
196. One of the Ten commandments tells us to honour our parents because:-
- A. they give us food
B. we can live long on earth
C. we can avoid being cursed
D. they may refuse to pay our school fees
197. "Do not accuse anyone falsely". Which lesson do Christians learn from this statement? The importance of being:-
- A. obedient
B. kind
C. loving
D. truthful
198. Eve was created by God as a _____ of Adam.
- A. servant
B. caretaker
C. helper
D. enemy
199. Which of the following prophets challenged the prophet of Baal at Mt. Carmel by bringing fire from heaven?
- A. Jeremiah
B. Daniel
C. Elijah
D. Isaiah

200. Which of the following prophets challenged the prophet of Baal at Mt. Carmel by bringing fire from heaven?

- A. Jeremiah
- B. Daniel
- C. Elijah
- D. Isaiah