

**312/2**  
**GEOGRAPHY**  
**Paper 2**  
**December, 2023**  
**Time 2 hours 45 min.**

**MOKASA II EXAMINATION**  
**Kenya Certificate of Secondary Education**

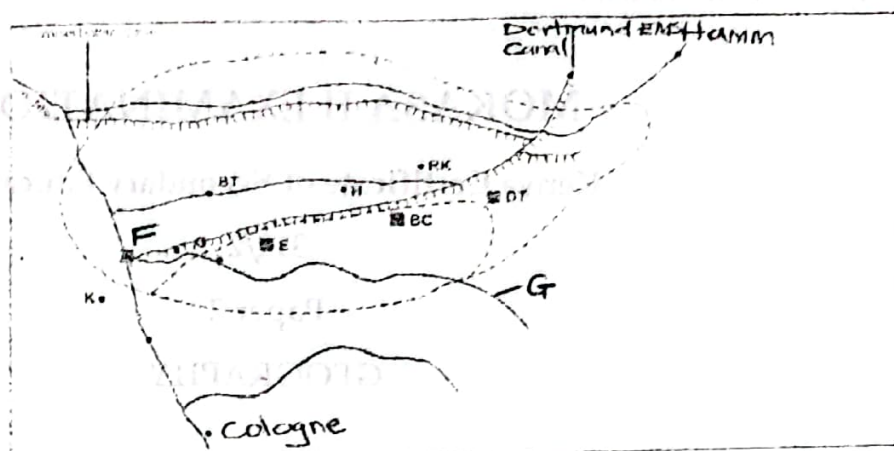
**312/2**  
**Paper 2**  
**GEOGRAPHY**

**SECTION A**

*Answer all the questions in this section.*

1. (a) Define Agroforestry. (2 marks)  
(b) Give three importance of forest products in Kenya. (3 marks)
2. (a) Name two exotic breeds of dairy cattle reared in Kenya. (2 marks)  
(b) State three challenges facing nomadic pastoralism in Kenya. (3marks)
3. (a) Define land rehabilitation. (2 marks)  
(b) State three physical factors that influenced the location of the Perkerra irrigation Scheme. (3 marks)

4. Study the map below of the Ruhr Industrial Region of Germany and use it to answer the questions that follow.



- (a) Name the industrial centre marked F and river labelled G. (2 marks)
- (b) State three factors that favoured the location of iron and steel industry in the Ruhr region. (3 marks)
5. (a) Define game cropping. (2 marks)
- (b) Give three reasons why the Kenya government is encouraging domestic tourism. (3 marks)

### SECTION B

Answer question 6 and any other two questions in this section

6. The table below shows items exported from Nigeria in 2015. Use it to answer the questions that follow

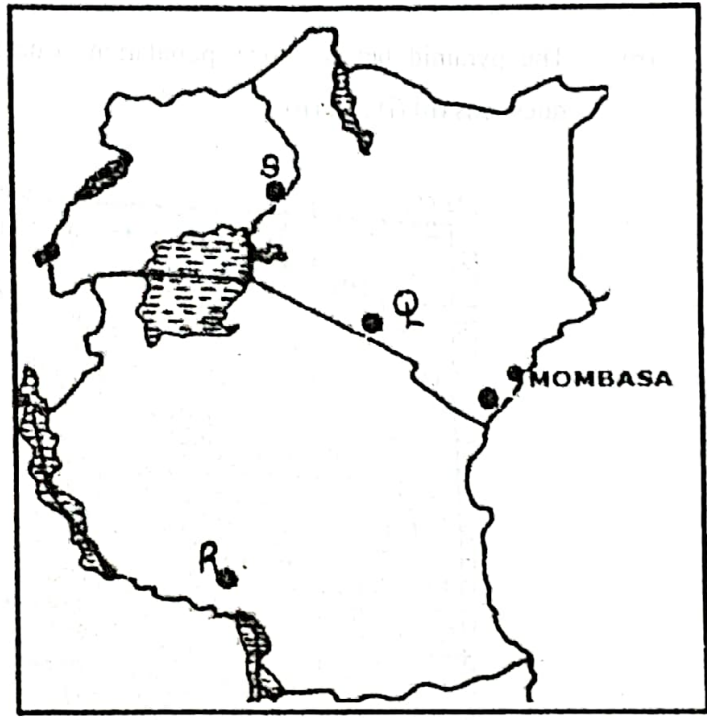
EXPORT ITEM	WEIGHT IN TONNES
Maize	13,600
Coffee	11,000
Oil palm	1,600
Spices	850
Total	27050

- (a) (i) Draw a divided rectangle of length 15 cm to represent the data above. (8 marks)
- (ii) State three advantages of using the above method to represent statistical data.

- (b) (i) Differentiate between balance of trade and balance of payment. (2 marks)
- (ii) State **three** reasons why Kenya imports goods that she produces. (3 marks)
- (c) State **three** problems facing SADC. (3 marks)
- (d) Explain the benefits of international trade to the economy of Kenya? (6 marks)

7. a) i) Define the term mining. (2 marks)
- ii). State **three** factors that influence the exploitation of minerals in East Africa. (3 marks)

(b). Study the map of East Africa below, and use it to answer the question b (i) below.

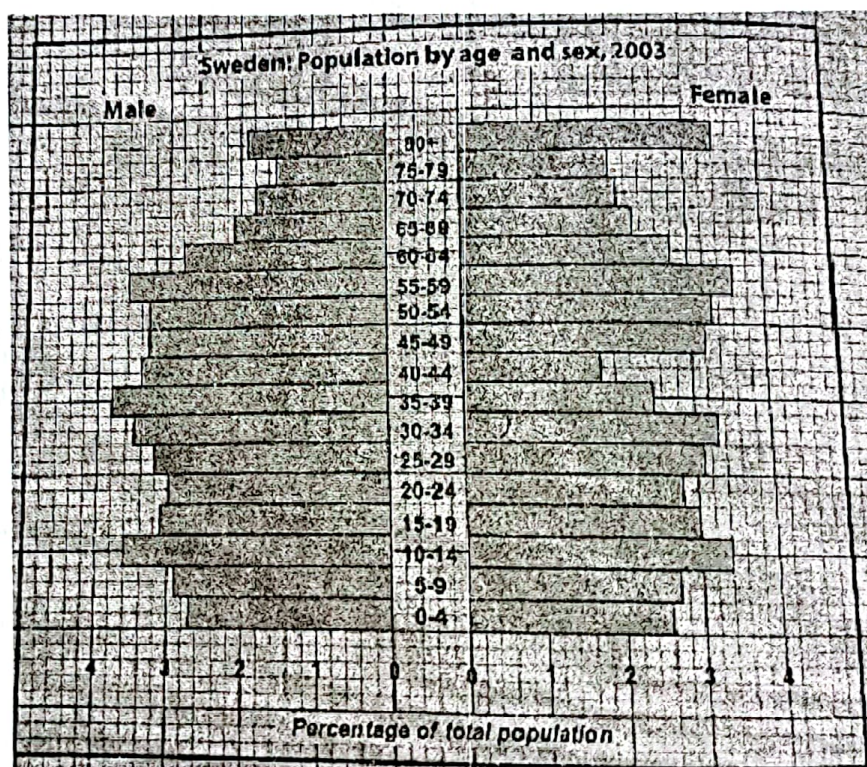


- (i) Identify the minerals in the parts marked Q, R and S. (3 marks)
- (ii) Give **two** uses of soda ash. (2 marks)
- (c) Name **two** oil producing countries in the Middle East. (2 marks)
- (d) Describe the deep shaft mining method. (5 marks)
- (e) Explain **four** significance of mining to the economy of Kenya. (8 marks)



8. (a) (i) Name **three** counties to the west of the Rift valley that produce tea in large scale. (3 marks)
- (ii) State **four** physical conditions that favour tea growing in Kenya. (4 marks)
- (b) (i) Describe how tea is processed at the factory. (6 marks)
- (ii) Explain **four** ways in which the Kenya Tea Development Agency (KTDA) assist tea famers in Kenya. (8 marks)
- (c) State **four** problems facing small scale tea farming in Kenya. (4 marks)
9. (a) (i) What is population density? (2 marks)
- (ii) State **three** importance of population census. (3 marks)

- (b) The pyramid below shows population structure of a country. Use it to answer questions (b) (i) and (ii)



- (i) Identify any **two** countries that have population structure similar to the one shown above. (2 marks)

- (ii) Give *four* characteristics of the population structure of Sweden. (4 marks)
- (c) Explain *three* problems of high population growth rate to a country. (6 marks)
- (d) (i) Identify *two* types settlement patterns. (2 marks)
- (ii) Explain *two* factors that have influenced the rapid growth of Eldoret town. (4 marks)
- (iii) State *two* problems facing the city of Kisumu. (2 marks)
10. (a) (i) State *four* effects of drought. (4 marks)
- (ii) Apart from drought and pollution, list *three* other environmental hazards. (3 marks)
- (b) (i) Explain *three* causes of water pollution. (6 marks)
- (ii) State *four* measures that can be taken to control lightning. (4 marks)
- (c) You intend to carry out a field study on pollution in a nearby local open air market.
- (i) State *four* follow up activities you would carry out after the study. (4 marks)
- (ii) State *four* ways in which the study will be of importance to the local community. (4 marks)