

TISMA EXAM SERIES 1
GRADE 2 OPENER 2023

2023 ACADEMIC YEAR

FOR MARKING SCHEMES:

CONTACT:

Mr Machuki – 0724333200

OR

ORDER ONLINE AT:

www.kenyaeducators.co.ke

KENYA EDUCATORS CONSULTANCY

TISMA 001

COMPETENCY BASED CURRICULUM
GRADE 2 - TERM 1 OPENER (ENTRY) EXAM
ART AND CRAFT, MOVEMENT ACTIVITIES

NAME: SCHOOL

1. Make number patterns. 4MKS

--	--

Draw the following line: (8MKS)

2. Straight line

3. Curved line

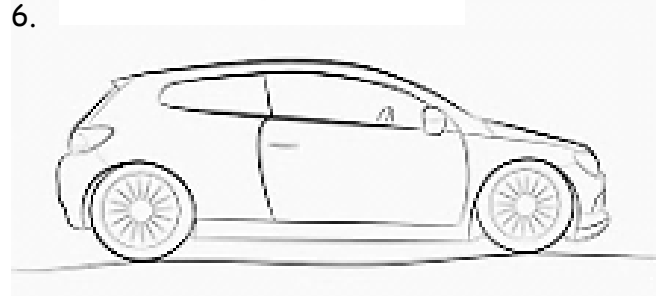
4. Zigzag line

5. Wavy line

Color the picture below (6MK)



6.



7.

8. What is the color of healthy

vegetable? _____(2mks)

9. We use fire to _____ food(slaughter,

cook)(2mks)

10. We use our hands to _____(

food(eat, rot)

TISMA 001

COMPETENCY BASED CURRICULUM GRADE 1 - TERM 1 OPENER (ENTRY) EXAM 2023 – RELIGIOUS ACTIVITIES

1. I was created in the _____ of God

(face ,image)

2. God knows me by my _____ (face,

name)

3. Who is the father of Jesus?(Ishmael, joseph)

4. Draw a picture of the bible (3mks)



5. The Bible is divided into _____ (3,4,2)

6. Jesus was born in _____ (Kenya,

Bethlehem)


7. Who killed Goliath _____? (Jacob, David)

8. Draw and color your church in the box bellow

(4mks)

NAME:

SCHOOL.....



9. Jesus was baptized in

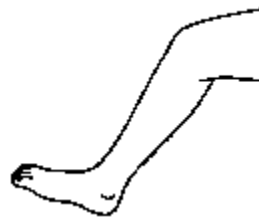
river _____?(Jordan,kuja)

10. God created human being, male and female and put them in the garden called _____(Eden, Canaan)

11. **Father, mother, uncle, Mary, son, sister, joseph, aunt.**

Male	Female
1.	
2.	
3.	
4.	

12. What are the uses of the body parts bellow?



13.



14.



15. Who created human beings

_____ (God, Satan)

16. Write a short prayer before going to sleep.(4mks)

.....
.....
.....
.....

17. We should not _____ (fight, forgive)

18. Abraham was the father of _____
(Isaac, Moses)

19. New testament has _____
books(27,39)

20. Jesus was baptized by _____

(Jacob, john)

21. God created _____ and Eve?(Adam,

Human being)

22. God rest on _____ day after creation(7,6)


23. _____ was created by God (doors, animals)

24. Name two domestic animals created by God

25. What is the person doing _____(praying, laughing)



26. Color the animal below?



TISMA 001

COMPETENCY BASED CURRICULUM GRADE 1 - TERM 1 OPENER (ENTRY) EXAM 2023 – ENGLISH ACTIVITIES

NAME:

Dictation

1. _____

2. _____

3. _____

4. _____

5. _____

Complete the sentence below

6. She bought _____ ball (an, a)

7. She _____ not tall (not, is)

8. Otieno _____ sick (was, not)

9. She brought _____ glass of water (the, a)

10. I _____ not going to school (am, I

Name the pictures below

11. .



12. .

SCHOOL.....



13.



14.



15.



Write in capital letters.

16.ten_

17.chair_

18.house -

19.cup

20.television

Write words that begins with these

sounds

21.h_

22.ch_

23.th_

24.b_

25.cl_

TISMA 001
COMPETENCY BASED CURRICULUM
GRADE 2 - TERM 1 OPENER (ENTRY)
EXAM
ENVIRONMENTAL ACTIVITIES

NAME.....

SCHOOL.....

1. _____ is a domestic animal (**dog,**

8.

Lion, leopard)

2. Animals kept at home are called

_____ (**wild animals, domestic**


Animals)


3. We can use water for _____

9.

(**Cooking, running, playing)**

4. Name the animals below





produces _____

10. Bell

noise)

(**Sound,**

5.


give us _____ (**wool, food)**

11. plants



_____ in the sky at

12. We see



night (sun,
moon)

6. Drums make
sound by

13. Draw the
following weather
(Plucking, blowing,
beating)


7. Name the source
of water below

sunny :



14. RAINY

_____ is the main source of water (rain, river)




24. Which animal give us eggs (sheep,
chicken)_____

25. We get milk from _____(cow, goose)

15. CLOUDY

16. Windy



17. Name two animals kept at home

18. _____

19. We put on heavy jackets during _____

(Rainy day, sunny day)

20. _____ is found in the sitting
room (Chair, bed)

21. We drink water using _____ (jug, Glass)

22. We carry _____ on a rainy season

(Umbrella, Gumboots)

TISMA 001

COMPETENCY BASED CURRICULUM

GRADE 2 - TERM 1 OPENER (ENTRY)

EXAM- HYGIENE AND NUTRITION

ACTIVITIES

1. We use _____ to cook tea (**milk, maize**)
2. Cows gives us ____ (milk, millet)
3. We always brush our teeth ____ meals (**Before, After**)
4. We buy meat from _____ (**market, burchery**)
5. We should not play with _____ (**knives, toys**)
6. Sick people go to _____ (**hospitals, market**)
7. We take _____ to feel better when sick (**alcohol, medicine**)
8. Teeth that are removed are called _____ (**milk teeth, permanent teeth**)
9. _____ is used to clean our nose (**handkerchief, tissue**)

NAME:

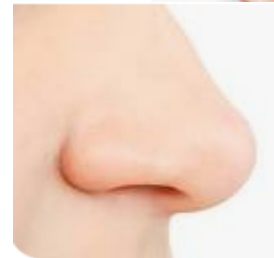
SCHOOL

Name pictures below

10. _____



11. _____



12. _____



13. _____



14.



Name the fruits in your locality

15.

16.

17.

18.

19. Dirty fruits make us _____ (healthy, sick)

20. We should not eat _____ bananas (rotten, clean)

Draw the following fruits

21. Mango

22. Orange

23. We should always keep medicines in the _____ (store, curd board)

24. We should not take _____ drugs (expired, prescribed drugs)

25. Too much sugar is _____ to our health (good, bad)

TISMA 001

COMPETENCY BASED CURRICULUM

GRADE 2 - TERM 1 OPENER (ENTRY) EXAM 2023- KISWAHILI ACTIVITIES

NAME:

SCHOOL.....

IMLA

1. _____
2. _____
3. _____
4. _____
5. _____

Jibu maswali yafuatayo

6. Watu _____ walifika (wengi, tatu)
7. Mwalimu _____ alikufa (yetu, wetu)
8. Sisi tunaenda _____jumapili (kanisa, jela)
9. Mama _____ugali (anapika, anakanyaga)
10. Dactari amenidunga _____(chuma, shindano)
Maliza sentensi ukitumia hawa,huyu,
11. Kijana _____anakula ndizi(hawa,huyu)
12. Watoto_____ni wachoyo(huyu,wale)
13. Mama _____ anafua nguo(sisi. Yake)
14. Baba _____ni mkulima(sisi, yangu)
15. Wasichana _____ walichapwa
(wale,huyu)

Chora picha hizi

16. Kikombe

17. Msichana

18. Mvulana

19. Runinga

20. Kiti

Andika majina ya wanyama hawa

21.



22.



23.



24.



25.



TISMA 001
COMPETENCY BASED
CURRICULUM
GRADE 2 - TERM 1 OPENER
(ENTRY) EXAM 2023 – LITERACY
ACTIVITIES

NAME:

SCHOOL

Chair tea meat

 cup dress

Desk top bottom

 tank the

Red hot dog

 chat can

Read the sentences below

1. This is a bag
2. I have two bananas
3. I love God

4. You are sick

5. I need tea

KUSOMA

Meza pera

 keti yai

Chini juu

 kando

 ua

Rangi chai

 sema

 tena

Soma sentensi

hizi

1. Mama anakuja
2. Otieno analala
3. Kesho tunatoka
4. Naenda kwa mwalimu
5. Nakuja kwenu

TISMA 001
COMPETENCY BASED CURRICULUM

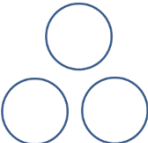
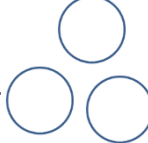
**GRADE 2 - TERM 1 OPENER (ENTRY) 2023 –
MATHEMATICS ACTIVITIES**



NAME:

..... **SCHOOL**

.....

1.  +  =

2.  +  =

3.  =


Draw enough balls

4. 3

5. 5

6. 8

7. 10

Write the next number

8. 1,2,3,4,____,____, _____

9. 10,20,____, _____, ____

10. 11,12,13,14, _____,____,____

11. Select the bigger number

20 or 30 _____

12. 13 or 31 _____

Write numbers from 1-10

13. _____, _____, _____, _____, _____

14. _____, _____, _____, _____, _____

Write the numbers

15. Forty

- 16. Twenty
- 17. Ninety
- 18. Eighty
- 19. Nineteen

Put together the following

20. $10 - \square = 0$

21. $6 + \square = 13$


How many are they

22.



23. Otieno has two banana,
Sheila has three, how much
total do they have
24. What is the shape of
egg_____

25. which one is tall



A




B

TISMA 001

COMPETENCY BASED CURRICULUM GRADE 2 - TERM 1 OPENER (ENTRY) EXAM 2023 - RELIGIOUSACTIVITIES

Name the the items below



NAME:

..... SCHOOL

.....



6. Drum produces sound when
you _____ (beat, chew)

7. Name songs you play at school?

8. We raise flag on Monday and
_____ (Tuesday, Friday)

Fill in the blank spaces below

National anthem

9. Ee mungu nguvu _____,
Ilete _____ kwetu,
Haki iwe _____ na mlinzi,
Natukae na undugu,
Amani na _____,
Raha _____ na

ustawi. (_____/5marks)

10. When do we sing the national anthem? (2mks)

a. _____

b. _____

11. Song we sung to praise God are called _____ (ohangla,sacred)

12. Song we sung to praised babies to sleep(lullabies, bongo)

13. Songs sung to our country _____(patriotic, ohangla)

Answer these questions.

1. Twinkle Twinkle Little Star

2. Row, Row, Row, Your Boat

14. Which song is faster? _____

15. Which one is slower? _____

Draw the following pictures

16. Cake

17. Flag

18. guitar

19. What type of instrument is a guitar (_____wind, violin, string, percussion)