


HOLIDAY ASSIGNMENTS
YEAR 2024
GRADE 1 LOWER PRIMARY
ALL SUBJECTS



END TERM 1 HOLIDAY ASSIGNMENTS

2024 ACADEMIC YEAR

*This PDF Comprises of a Series of Assessment Questions
Covering the Syllabus Upto End of Term 1*

FOR MARKING SCHEMES:

Contact

0724333200/ 0795491185/ 0768321553

Or

Order Online at:

www.kenyaeducators.co.ke

KENYA EDUCATORS CONSULTANCY

GRADE 1 ENDTERM 1 HOLIDAY ASSIGNMENT

English Activities - CBC Grade 1 Term 1

Questions

Task 1: COMPREHENSION.

1. Read the story below and answer the following questions.

It is early morning. The sun shines in the hills. The birds are singing. They are happy in the hills.

- a. The sun rises in the _____ (evening, morning)
- b. Where does the sun shine? _____
- c. What are the birds doing? _____
- d. How are the birds? _____
- e. Draw the sun




Task 2: GRAMMAR.

1. Use a, an or the. (20mks)
 - a. _____ chief is visiting our school.
 - b. She ate _____ apple.
 - c. She has _____ book.
2. Write the opposites. (5mks)
 - a. Girl _____
 - b. Mother _____
 - c. Sister _____
 - d. Daughter _____
 - e. Uncle _____
3. Write the past tense by adding d. (3mks)
 - a. use
 - b. live
 - c. love
4. Rearrange the words to make correct sentences. (3mks)
 - a. bought you a phone who? _____
 - b. do you what want? _____
 - c. need you what do? _____


5. Use his, her or their to fill in the gaps
- She eats _____ yam.
 - They pack _____ bags.
 - He has _____ books.
6. Use inside, outside or behind a)

a.



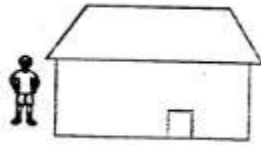
The boy is _____ the house

b.



The boy is _____ the house

c.



The boy is _____ the house

Task 3: WRITING

Start each sentence with a capital letter.

- what is your name?
- here is the teachers phone.
- i am a mobile phone.
- ben plays with his pets.
- the animals run away.
- the pigs eat two cups of food.
- i have a pet hen.
- these are my chicks,
- welcome to our horn
- the dog sits on its mat.

GRADE 1 ENDTERM 1 HOLIDAY ASSIGNMENT

Integrated Learning Areas - CBC Grade 1 Term 1

Questions

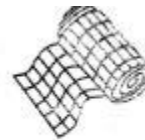
HYGIENE AND NUTRITION ACTIVITIES (15mks)

1.



This is a _____
(box, first Aid Kit, cross)

2. Name these items found in a first Aid Kit (3marks:)



3. First aid is done to reduce loss of _____
(blood, milk, food)

4. Name these (3marks)



5. Draw and colour these foods. (6marks)

beans	ripe bananas	tomatoes
		


6. Write one food that is not good for your teeth

ENVIRONMENTAL ACTIVITIES. (15mks)

1. During the day we should switch _____ the electricity.
(on, off, up)
2. We should not _____ water. (keep, store, waste)
3. After using the tap water, we should _____
(leave, open, close)
4. We sit under a shade when the weather is _____
(cloudy, sunny, rainy)

CRE ACTIVITIES.

1. Draw and colour a church.



2. We go to church to _____(play, fight, pray)
3. Who worship in a church? _____
(Muslims, Christians, Hindus)
4. The church is a house of _____ (God, pastors, people)
5. _____ made me. (God, Parents, Friends)
6. We shall have a _____(pet, name,car)
7. _____ and _____ are members of a nuclear family.
8. Who made plants and animals? _____
(God, My family, My friend)

CREATIVE ACTIVITIES. (10mks)

1. A pot is made from _____ soil. (sand, clay, loam)

2. How do you feel when you listen to music?
(Sad, Happy, Angry)

3. I _____ as I sing the song that is soft and loud. (dance, sleep)

GRADE 1 ENDTERM 1 HOLIDAY ASSIGNMENT

Kiswahili Activities - CBC Grade 1 Term 1

Maswali

1. UFAHAMU

Soma hadithi ifuatayo kisha ujibu maswallyerfuatayo:

Karimi ni msichana nadhifu. Yeye husoma katika gredi ya kwanza shuleni leleji. Mwalimu wake wa darasa ni Bi Khadija. Kiranja wa darasa ni mvulana. Jina lake ni Adhoch.

- Karimi ni msichana wa aina gani?
- Ako katika gredi gani?
- Shule yake inaitwaje?
- Mwaiimu wake wa darasa anaitwaje?
- Kiranja woo anaitwaje?


2. SARUFI (Mama 20)

- Andika majina ya vyakula hivi (Mama 5)

a)



b)



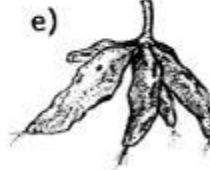
c)



d)



e)



- chagua jibu sahihi. (Mama 5)

- Ndizi _____ zimeharibika. (zetu, langu)
- Mihogo _____ imepikwa. (letu, yetu)
- Embe _____ limeiva. (langu, zangu)
- Muwa _____ ni mtamu. (zetu, wangu)
- Viazi _____ ni vikubwa. (chetu vyetu)
- Tumia haya maneno kujaza pengo
(nawa mikono, futa kamasi, kata kucha)
 - Mtoto ali _____ kwenye pua lake.
 - Baada ya kutoka msalani ali _____
 - Mwanafunzi ali _____ zake ndefu za vidole

- d. Jaza pengo kwa kutumia maneno haya
(pole, tafadhali, kwaheri)
 - a. Ukimkosea mtu utamwambia _____
 - b. Ukimuaga mtu unasema _____ ya kuonana.
 - c. _____ nisaidie kalamu yako.
 - e. Andika majina ya nambari hizi kwa maneno
 - a. 10 _____
 - b. 8 _____
 - c. 6 _____
 - d. 7 _____

3. KUANDIKA.

Unda maneno kumi kutoka kwenye jedwali
kwa mfano: a na bi sha - anabisha

nya	bu	bi	na	mba	za
mu	ba	sha	a	ha	sa


1. _____
2. _____
3. _____
4. _____
5. _____
6. _____
7. _____
8. _____
9. _____

GRADE 1 ENDTERM 1 HOLIDAY ASSIGNMENT

Mathematics Activities - CBC Grade 1 Term 1

Questions

1. Arrange from the largest to smallest.



2. Write these numbers in symbols

Fifty _____

Seventeen _____

Forty six _____


Thirty nine _____

Twenty three _____

3. Match the numbers with the objects



10



5



4

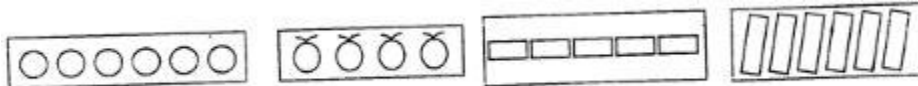


8



3

4. Circle the ones that are the same in numbers.



5. A class has 20 learners. 10 are boys. How many girls are there?
6. What is 16 take away 8?

7.

a.
$$\begin{array}{r} 30 \\ -20 \\ \hline \end{array}$$

b.
$$\begin{array}{r} 40 \\ -20 \\ \hline \end{array}$$

c.
$$\begin{array}{r} 60 \\ -30 \\ \hline \end{array}$$

8. A farmer had 20 cows. He bought 10 more cows. How many cows did he have altogether?

9.

a.
$$\begin{array}{r} 52 \\ +7 \\ \hline \end{array}$$

b.
$$\begin{array}{r} 32 \\ +14 \\ \hline \end{array}$$

c.
$$\begin{array}{r} 18 \\ +11 \\ \hline \end{array}$$

d.
$$\begin{array}{r} 40 \\ +30 \\ \hline \end{array}$$

10. Write the missing numbers. (5 marks)

a. 10, 15, _____, 25

b. 35, 33, 31, _____

c. 30, 32, _____, 36

d. 40, 45, 50, _____

e. 37, 39, 41, _____

11. Count and write backward by 5 from 35 to 15 (5 marks)

_____, _____, _____, _____, _____

12. There are _____ days in a week. (6, 5, 7)

13. Fill in the missing days (4 marks)

Sunday, _____, Tuesday, _____, _____, Friday, _____