

DOYEN PUBLISHERS

KENYA JUNIOR SCHOOL EDUCATION ASSESSMENT

MID-TERM II 2025 EXAM

GRADE 9

CREATIVE ARTS & SPORTS – 911/2



Time: 1 hour 40 mins

NAME: _____
 SCHOOL: _____
 STREAM: _____ DATE: _____

INSTRUCTIONS

- a) Write your name, school, stream and date in the spaces provided above.
- b) This paper consists of **two** sections: **A** and **B**.
- c) **Section A** comprises Multiple Choice Questions numbered **1** to **40**.
- d) **Section B** comprises short, structured questions number **41** to **50**.
- e) Answer **ALL** the questions in section A in the table provided below.
- f) Answer **ALL** the questions in section B in the spaces provided in this QUESTION PAPER.
- g) Do **NOT** remove any page from this question paper. Answer **ALL** the questions in English.

ANSWER SHEET – SECTION A

1.	2.	3.	4.	5.	6.	7.	8.	9.	10.	11.	12.	13.	14.	15.	16.	17.	18.	19.	20.
21.	22.	23.	24.	25.	26.	27.	28.	29.	30.	31.	32.	33.	34.	35.	36.	37.	38.	39.	40.

LEARNER'S SCORE

SCORES		TOTAL
A (Out of 40)		
B (Out of 60)		

This paper consists of 8 printed pages. Candidates should check the question paper to confirm that all pages are printed as indicated and that no questions are missing.

L'avenir commence ici



Page 1 of 8

DOYEN PUBLISHERS || 0780802443

Visit our website to access complete papers: www.doyenpublishers.com.

SECTION A (40 marks)

Answer ALL questions in this section in the space provided on the first page.

1. Jane is passionate about music and enjoys writing both the melody and lyrics for songs. She often collaborates with singers and producers to bring her compositions to life. Which career best fits Jane's interests?
A. Music teacher C. Songwriter
B. Sound designer D. DJ
2. Which of the following professionals is responsible for writing the music in a performance?
A. Audio engineer C. DJ
B. Composer D. Sound designer
3. What is the primary role of a stage manager in theatre arts?
A. Acting out lead roles
B. Designing costumes for characters
C. Organizing rehearsals and coordinating the production
D. Writing play scripts
4. During a school play, Mark is not acting on stage, but he ensures rehearsals happen on time, communicates with the lighting and sound teams, and makes sure everything runs smoothly during the performance. What is Mark's role?
A. Stage manager C. Actor
B. Director D. Playwright
5. What distinguishes a dotted crotchet in music notation?
A. It is silent for one beat
B. It lasts for 1.5 beats
C. It has a sharp sound
D. It is played twice in a row
6. Identify the rest shown below.

A. Minim rest
B. Crochet rest
C. Quaver rest
D. Rhythm rest
7. After recovering from a knee injury, Peter works with a trained professional who guides him through exercises to regain strength and mobility. This expert also monitors his progress and helps him avoid re-injury. What is the profession of this expert?
A. Coach C. Physical therapist
B. Fitness trainer D. Sports psychologist
8. What pattern is used to construct a major scale in music theory?
A. T-S-T-S-T-T-S C. T-T-S-T-T-T-S
B. S-T-T-S-T-S-T D. T-S-S-T-T-S-T
9. Identify the musical notation below.

A. Grand staff C. Music notes
B. A staff D. Rhythm
10. What is it primarily used for?
A. Organizing stage lighting
B. Notating piano music
C. Directing live plays
D. Training vocalists
11. Which of the following is an entrepreneurial opportunity in Creative Arts and Sports?
A. Becoming a referee
B. Teaching science
C. Running an art gallery
D. Playing for a national team
12. Which of the following best describes the purpose of harmony in visual artwork?
A. To add random elements
B. To create balance and flow
C. To focus on a single object
D. To make the artwork colorful
13. Which technique uses repeated dots or strokes of paint to add texture and detail?
A. Dabbing B. Smudging C. Blending D. Spraying

14. Which color group would be considered analogous?

- A. Red, Blue, Yellow
- B. Blue, Orange, Yellow
- C. Red, Green, Purple
- D. Green, Blue-Green, Blue

15. What does note extension do to a musical rhythm?

- A. It lengthens the duration of a note
- B. It increases the pitch
- C. It adds more beats to a measure
- D. It changes the key of the song

16. Liam is painting a scene of the ocean. He uses Blue, Blue-Green, and Green to show calmness. What artistic principle is he applying?

- A. Harmony through analogous colors
- B. Contrast
- C. Unity through perspective
- D. Saturation


17. Sara claps a rhythm that begins with a dotted crotchet followed by a quaver. How many beats do those two notes add up to?

- A. 1 beat
- B. 2 beats
- C. 2 beats
- D. 3 beats

18. Grade 9 learners listed the phases below during a sports lesson. Which of the following is NOT a phase of the triple jump?

- A. Take-off Phase
- B. Approach Phase
- C. Glide Phase
- D. Landing Phase

19. Name the phase of triple jump shown below.



- A. Take-off Phase
- B. Approach Phase
- C. Glide Phase
- D. Landing Phase

20. What is the main purpose of pacing in long-distance running?

- A. To start fast and finish early
- B. To keep other runners from passing
- C. To maintain consistent speed and conserve energy
- D. To confuse opponents during the race

21. Mosaic art uses small pieces called _____.

- A. Shards
- B. Tesserae
- C. Tiles
- D. Interstices

22. You are preparing for a triple jump event at your school sports day. What should you do first to ensure safety?

- A. Begin jumping immediately
- B. Wear sandals to feel the ground
- C. Skip warm-up to save energy
- D. Check the runway and sandpit for objects


23. What is the correct order of events in triple jump?

- A. Hop → Jump → Step
- B. Run → Jump → Throw
- C. Hop → Step → Jump
- D. Step → Jump → Hop

24. You and your friends are practicing long-distance running. One of your teammates starts too fast and gets tired quickly. What advice should you give them?

- A. Sprint the last lap only
- B. Use pacing to conserve energy
- C. Run barefoot for speed
- D. Take long rests between laps

During an athletic competition in school, the substance below was provided to the athletes after running. Study it and answer the questions below.



25. What is it used for?

- A. To motivate the athletes
- B. To appreciate the athletes
- C. To replenish the energy of athletes
- D. To make the athletes breath slower.

26. If glucose contains sugar, then why do athletes prefer taking glucose than sugar?

- A. It is absorbed quickly in the body.
- B. It is smoother
- C. It is easier to swallow
- D. It is cheap

27. During music class, your teacher asks you to compose a two-bar answer phrase in F major. What should your phrase end with?

- A. The tonic 'doh'
- B. A random high note
- C. The note 'ti'
- D. A sharp note outside the key

28. Which of the following is the **MAIN** characteristic of a spiral spin pass in rugby?

- A. The ball is popped upward quickly
- B. The ball is thrown without rotation
- C. The ball is kicked towards the teammate
- D. The ball rotates while passing, adding speed and accuracy

29. During a game, you want to quickly pass the ball to a teammate running towards you at pace. Which pass should you use?

- A. Spin pass
- B. Place kick
- C. Drop kick
- D. Pop pass

Study the kick technique below used in rugby.



30. The player is performing a _____.

- A. Spin pass
- B. Place kick
- C. Drop kick
- D. Pop pass

31. When is it used in rugby?

- A. To restart the game after a score or during kick-off
- B. When scoring a try
- C. To throw the ball to a teammate
- D. To perform a place kick

32. You are about to perform a place kick after a try. What is the correct way to position the ball?

- A. Lay it flat on the ground
- B. Hold it in your hands while kicking
- C. Use a tee to hold the ball upright with its valve pointing toward the target
- D. Toss it in the air and kick

33. Your team is preparing to take a penalty kick using a place kick. What should you aim for to score points?

- A. Kick the ball between the posts and above the crossbar
- B. Kick the ball towards the opponents
- C. Kick the ball to the sidelines
- D. Kick the ball under the crossbar

34. Which kind of view is shown in the image below?



- A. Fish's eye view
- B. Bird's eye view
- C. Normal viewpoint
- D. Worm's eye view

35. Which of these is **NOT** a common viewpoint in photography?

- A. Fish's eye view
- B. Worm's eye view
- C. Normal viewpoint
- D. Bird's eye view

36. Atieno heard the word 'subject' during a lesson on photography. What does it refer to?

- A. The camera used
- B. The photographer
- C. The object or person being photographed
- D. The object or person being photographed

37. You want to take a photo of a tree from the top of a building. Which viewpoint should you use?

- A. Worm's eye view
- B. Normal viewpoint
- C. Bird's eye view
- D. Panorama view

38. Which is a key step when taking photographs of scenery from a normal-eye viewpoint?

- A. Taking photos from a drone
- B. Positioning the camera close to the ground
- C. Standing at eye level and focusing on the scenery in front of you
- D. Taking photos from the top of a building