

TARGETER WINGS
KENYA PRIMARY SCHOOL EDUCATION ASSESSMENT
GRADE 6 - YEAR 2025
SOCIAL STUDIES /RE



TIME: 1 hour 40 minutes

INSTRUCTIONS TO CANDIDATES (Please read these instructions carefully)

1. You have been given this question booklet and a separate answer sheet. The question booklet contains 50 questions.
2. Do any necessary rough work in this booklet.
3. When you have chosen your answer, mark it on the **ANSWER SHEET**, not in this question booklet.

HOW TO USE THE ANSWER SHEET

4. Use an ordinary pencil.
5. Confirm that the answer sheet that you have been provided with has the following:
YOUR ASSESSMENT NUMBER
YOUR NAME
NAME OF YOUR SCHOOL
NAME OF SUBJECT
6. Do not make any marks outside the boxes.
7. Keep the sheet as clean as possible and do not fold it.
8. For each of the questions 1 - 50, four choices are given. The choices are lettered A, B, C and D. In each case, only **ONE** of the four choices is correct. Choose the correct answer from the choices.
9. On the answer sheet, the correct answer is to be shown by drawing a dark line inside the box in which the letter you have chosen is written.

Example

In the Question Booklet:

17. The following are Kikuyu communities except

- A. Pokomo
- B. Oromo
- C. Aembu
- D. Mijikenda

The correct answer is B.

On the Answer Sheet:

In the set of boxes numbered 17, draw a dark line inside the box with the letter B printed in it as indicated below.

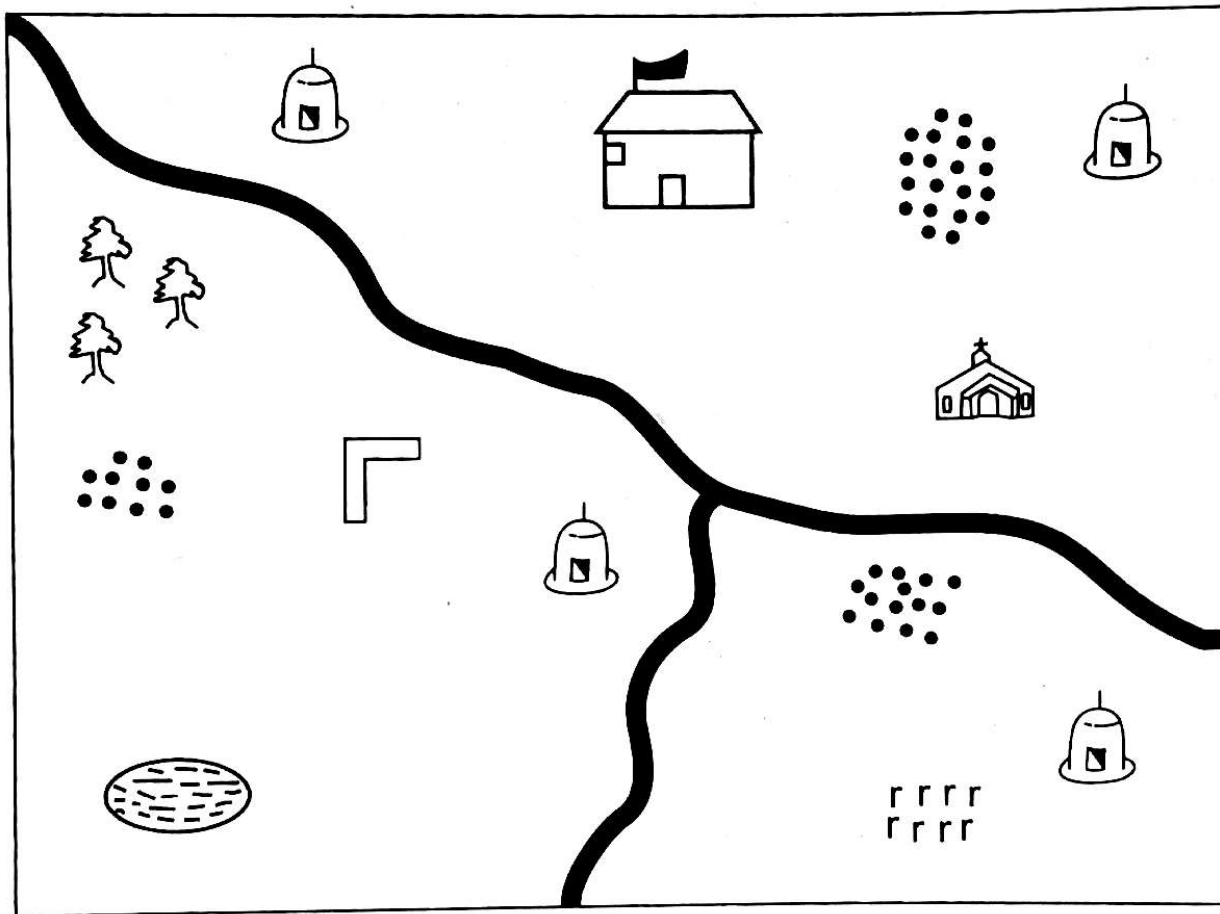
14. [A] [B] [C] [D] 15. [A] [B] [C] [D] 16. [A] [B] [C] [D] 17. [A] [B] [C] [D]

10. Your dark line **MUST** be within the box.
11. For each question, **ONLY ONE** box is to be marked in each set of four boxes.

This question paper consists of 8 printed pages










SOCIAL STUDIES

MAJENGO AREA



Scale 0 1 2 3 4 5 6 7 8 9 10 Km

KEY

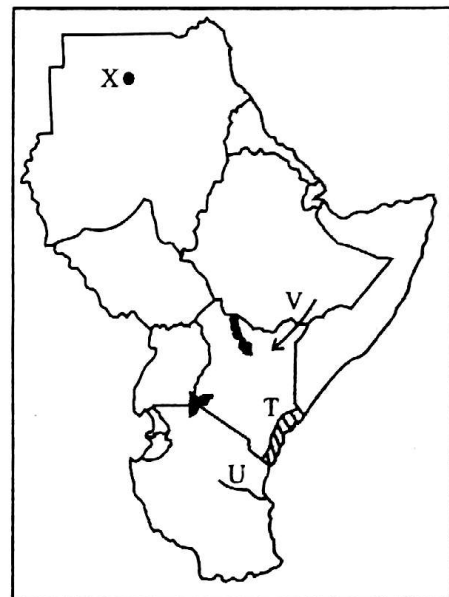
	Swamp		Mosque		School
	Deputy Governor's office		Scrub		Church
	Forest		Tarmac road		Settlement

Study the map of Majengo area and answer questions 1 - 3

1. Which is the most dominant religion in Majengo area?
 - A. Christianity.
 - B. Islam.
 - C. Hinduism.
 - D. Paganism.
2. Who is likely to be the elected head of Majengo area?
 - A. Chief.
 - B. Governor.
 - C. Senator.
 - D. County commissioner.
3. Presence of shrubs at the South Eastern region of Majengo area suggests that
 - A. the climate is hot and dry
 - B. the climate is hot and wet
 - C. the climate is cool and wet
 - D. the climate is cool and dry.
4. Which of the following is **not** among the reasons for the migration of Bantu speakers from their original homeland?
 - A. Search for fertile land for farming.
 - B. Cultural exchange.
 - C. Search for new land for settlement
 - D. To reduce population pressure on resources
5. Which of the following explains the meaning of the term 'climate'?
 - A. Hotness or coldness of a place at a given time.
 - B. Average of weather conditions taken over a long period of time.
 - C. Changes in the conditions of the atmosphere of a given place and at a particular time.
 - D. Dryness and wetness of a place.
6. In which of the following historic built environments are local traditional artefacts preserved?
 - A. Museums.
 - B. Monuments.
 - C. Libraries.
 - D. Game parks.
7. Interdependence between language groups in Kenya has led to the following benefits **except**
 - A. racism and tribalism
 - B. peaceful coexistence
 - C. sharing of resources
 - D. resolution of conflicts peacefully.




8. Some pastoralist communities in Eastern Africa export their meat products to various countries in the world for sale. What would you suggest as an immediate solution to promote trade in meat products from the region?
 - A. Promote cross breeding of livestock to improve their quality.
 - B. Establish standard prices for meat and beef products produced in the region.
 - C. Engage in other economic activities.
 - D. Close their country boundaries to avoid movement or entry of meat products from competing countries.
9. The following include aspects of African traditional culture **except**
 - A. festivals
 - B. dances
 - C. games and sports
 - D. school motto.

Use the map of Eastern Africa below to answer questions 10 - 13




10. The shaded area marked T has the following characteristics **except**
 - A. high temperature throughout the year
 - B. low temperature
 - C. has two main seasons
 - D. High rainfall.
11. Which language group migrated into Kenya through the route marked V?
 - A. Semites.
 - B. Nilotes.
 - C. Cushites.
 - D. Bantus.

12. The river marked U is called
 A. Rufiji
 B. Juba
 C. Ruvuma
 D. Omo
13. The capital city marked X is called
 A. Juba
 B. Khartoum
 C. Asmara
 D. Kigali
14. Kahagu want to set up a grocery shop in town. Where will he get a permit for his business?
 A. Chief's Office.
 B. County Commissioner's Office.
 C. County Offices.
 D. Police Station.
15. Who among the following is a citizen of Kenya by birth?
 A. Andrew - Born in Kenya but his parents are foreigners who are working in Kenya.
 B. Rodgers - Born in foreign country by parents who are non-Kenyans.
 C. Keziah - Her parents are foreigners but have lived in Kenya for over 16 years.
 D. Kenneth: Born in Kenya and both his parents are Kenyan citizens.
16. Which of the following road signs requires a driver to reduce the speed of his vehicle?



17. Which of the following is **not** an element of a map?
 A. The title.
 B. Size.
 C. Scale.
 D. Frame.

18. Which of the following cultural artefacts were **mainly** used by hunters in the past?
 A. Pots and baskets.
 B. Bows and arrows.
 C. Gourds and calabashes.
 D. Baskets and gourds.
19. Munene, Mwit, Mugambi, Mutuma and their families are all related. They share a common origin since they have a common ancestor. They are members of the same
 A. age-set
 B. family
 C. clan
 D. age group.
20. Which of the following is a solution to the problem of soil erosion?
 A. Practising afforestation in areas that had no trees before.
 B. Carrying out mining activities far from home.
 C. Cultivating near or along sources of water.
 D. Cutting a few trees on slopes of hills and mountains.
21. Mekatilili wa Menza was a leader of the
 A. Maasai
 B. Akamba
 C. Agikuyu
 D. Agirjama.
22. Njuri Ncheke among the Ameru was a
 A. group of warriors
 B. council of elders
 C. group of religious leaders
 D. group of women leaders.
23. Ahir and Amir lives near a lake. Their father is a fisherman. He uses the method of fishing shown in the picture below to harvest fish for sale.



- This method of fishing is called
 A. basket traps
 B. net drifting
 C. purse seining
 D. trawling.

24. Construction of new roads in the country shows how the government
- spends revenue
 - reduces accidents on our roads.
 - needs to borrow more money from other organizations.
 - misuses the resources.
25. Which of the following is the fastest means of transport in Eastern Africa?
- Air.
 - Roads.
 - Water.
 - Railway.
26. Which of the following has promoted preservation of local artefacts in Kenya?
- Pastoralism.
 - Democracy.
 - Intolerance.
 - Tourism.
27. The following are methods of instruction used in African traditional education **except** one. Which one is it?
- Songs.
 - Riddles.
 - Proverbs.
 - The Internet.
28. Most miners in Kenya still use the poor and local tools to extract minerals even though there are other modern and better mining equipments. What could be the cause of this?
- Lack of skills to use modern mining tools.
 - Inadequate capital to buy modern mining tools.
 - Poor transport in refining areas.
 - Minerals are deep in the ground.
29. Who among the following is a Member of County Executive Committee in the county government?
- Speaker of the county.
 - County representatives.
 - Governor.
 - Senator.

30. The following are national symbols in Kenya **except**
- state house
 - national flag
 - public seal
 - coat of arms.

C.R.E

31. Gloria is talented in drawing. Everyday Gloria completes her school work and practices drawing. Which value is demonstrated by Gloria?
- Obedience.
 - Love.
 - Responsibility.
 - Unity.
32. A union between a man and a woman which is recognized in court and by the community is known as
- creed
 - marriage
 - companionship
 - love.
33. David, a Grade 6 boy laughed at a blind man who was struggling to find his way into a house. As a Christian, what would you tell him?
- God will punish him for that.
 - That he will give birth to a blind child.
 - God want us to help people with special needs.
 - That he is not a good person.
34. Prophet Elisha healed a Syrian who was suffering from leprosy. His name was
- Stephen.
 - Bartimaeus.
 - Naaman.
 - Lazarus.

35. The first disciple of Jesus to die because of his faith was
 A. James.
 B. John.
 C. Stephen.
 D. Philip.
36. Which two disciples did Jesus send ahead to prepare the last supper?
 A. John and James.
 B. Peter and John.
 C. Judas and Thomas.
 D. Andrew and Philip.
37. Noah did not die in the floods because
 A. God had spared his life only
 B. he hid in the ark
 C. God wanted to bring blessings to the world through him
 D. he always prayed to God.
38. After Jesus was baptized, he went to the wilderness to
 A. pray
 B. receive the Holy spirit
 C. be tempted
 D. preach.
39. Which prophet was taken up to heaven in a chariot of fire?
 A. Ahijah.
 B. Elisha
 C. Jeremiah
 D. Elijah
40. Which of the following prophets prophesied a new covenant that would be written in the hearts of men?
 A. Jeremiah.
 B. Amos
 C. Elijah.
 D. Isaiah:
41. Grade 6 learners were asked by their teacher to identify the fruits of the Holy Spirit. Who among the following gave the wrong answer?
 A. Kimani - Faithfulness, patience, kindness.
 B. Joyce - Self control, humility, prophecy.
 C. Anita - Peace, joy, patience.
 D. Boniface - Goodness, kindness, joy.
42. Jesus Christ taught using parables that had different meanings. Which of the following parables of Jesus Christ teaches us about prayer?
 A. The prodigal son.
 B. The lost sheep.
 C. The friend at midnight.
 D. The Good Samaritan.
43. Each human being has been gifted with a unique ability. In the parable of the talents that Jesus Christ narrated, we learn all the following except one. Which one is it?
 A. God expects us to use our gifts wisely.
 B. God does not judge all of us using the same measure.
 C. We have all been given the same gifts by God.
 D. We will have to account for the way in which we used the gifts God blessed us with.
44. Flooding is a challenge that people in some parts of Kenya face. As a Christian, what would you do to help them overcome this challenge?
 A. Accuse the government of neglecting them.
 B. Work with other Christians to help them move to safer areas.
 C. Say intercessory prayers for them asking God to help them get a solution.
 D. Tell them to wait patiently for God to perform a miracle.
45. Grade 6 learners were practising the ten commandments according to the book of Exodus 20:3-17. Arianna was asked to mention the commandment number eight. She said _____
 A. do not accuse anyone falsely.
 B. do not steal.
 C. do not commit murder.
 D. respect your parents so that you may live long.

46. Miss Isabella explained to grade six learners that the Bible is the inspired word of God because of all the following **except** one. Which one is it?
- It consists of many books.
 - Was written by people who were guided by the holy spirit.
 - It contains the word of God to human beings.
 - It offers guidance for daily living.
47. Samson defeated the Philistines mainly because
- he had a large army
 - he was a well trained warrior
 - he had faith in God
 - he was obedient to the king.
48. Early marriages should be discouraged because
- they can easily influence their peers to get into marriage.
 - they are not financially stable
 - they deny children their right to work
 - it is against the rights of children.
49. According to Genesis 32:22:30, Jacob wrestled with God until just before daybreak. Jacob called the place
- Bethany
 - Damascus
 - Peniel
 - Judah.
50. Which one was **not** a gift given to baby Jesus by the wisemen?
- Myrrh.
 - Frankincense.
 - Silver.
 - Gold

IRE

31. Muhsin, a grade six learner has a habit of backbiting other people. This habit is discouraged in surah
- Al-Maun
 - Al-Humaza
 - Al-Fiil
 - Al-Quraish.
32. "*Verily, man is in loss*". This verse is from surah
- Al-Qariah
 - Al-Fatiha
 - Al-Asr
 - Al-Falaq.
33. Maimuna's parents are very wealthy but they are not satisfied with what they have. They are still looking for more wealth. Which of the following surahs should they be advised to read and make use of its teachings?
- At-Takathur.
 - Al-Qariah.
 - Al-Humaza.
 - Al-Maun.
34. According to the teachings of surah Al-Qariah, mountains will be like
- Scattered moths
 - A flat earth
 - Columns of fire
 - Carded wool.
35. Jaldesa, a grade six learner wants to perform swalatul Maghrib. Which of the following surahs must she recite in order for her prayer to be accepted?
- Al-Fatiha.
 - Al-Ikhlās.
 - An-Nas.
 - Al-Falaq.
36. Ali had planned to perform Swalatul Dhuhur in a nearby mosque. Unfortunately, while on his way, heavy rains started and he was unable to go. According to the Hadith on intention, it is fair to say
- he did not get rewards of performing the prayer in the mosque.
 - he got rewards of the prayer because of his intention.
 - he received half of the rewards.
 - Allah will reward him only on the day of judgement.

37. Before a servant moves on the day of judgement, he or she will be asked about four matters. Which of the following will be one of the matters to be asked?
- Your family and how you treated them.
 - Your Rizq and how you got it.
 - Your youth and how you spent it.
 - Your friends and how you related with them.
38. Muzammil, a grade six learner believes in the five pillars of Iman. Which of the following is the third pillar of Iman?
- Belief in Allah.
 - Belief in the prophets.
 - Belief in the Angels.
 - Belief in the books.
39. Ismail's friends like calling him by the name Mutawakkil. This means that Ismail
- relies on Allah
 - fears Allah
 - respects Allah
 - obeys Allah.
40. Who among the following was the father of Nabii Yusuf (A.S)?
- Ismail.
 - Yaqub.
 - Ibrahim.
 - Ishaq.
41. Mumtaz, a grade six learner was asked by her teacher to classify Hadath. Which of the following will she classify under Hadath Akbar?
- Breaking wind.
 - Touching a dead body.
 - Menstruation.
 - Fainting.
42. Nasteha wants to perform wudhu but there is no water. What will be the best course of action for Nasteha to take?
- Ask for Allah's forgiveness.
 - Buy water from the nearest shop.
 - Postpone the prayers until water is available.
 - Perform tayammum.
43. Which of the following is the fifth pillar of Islam?
- Zakat.
 - Saum.
 - Shahada.
 - Hajj.
44. Three of the following are some of the types of Hajj. Which of them is **not**?
- Ifrad.
 - Iqran.
 - Tawaaf.
 - Tamatu'u.
45. According to the teachings of Islam, work is a form of
- punishment
 - pastime
 - ibaadah
 - laziness.
46. The main reason why begging is discouraged in Islam is because
- it makes some people rich
 - it encourages laziness
 - it encourages hard work
 - it makes people become famous.
47. Munira likes throwing food in the dustbin because she cooks more than she needs. This act is referred to as
- Mufassil
 - Israf
 - Ilham
 - Fil-Riqab.
48. Who among the following prophets was the first to be sent to the world?
- Adam (A.S).
 - Musa (A.S).
 - Muhammad (A.S).
 - Issa (A.S).
49. Which city was prophet Muhammad (S.A.W) born?
- Makkah.
 - Taif.
 - Madina.
 - Jeddah.
50. Who among the following was the first teacher to be sent out by the prophet to go and teach Islam?
- Musab bin Umeir.
 - Bilal bin Rabah.
 - Abu Sufyan.
 - Hamza bin AbdulMutalib.