



TARGETER WINGS

KENYA PRIMARY SCHOOL EDUCATION ASSESSMENT

GRADE 6 - YEAR 2025

CREATIVE ARTS



TIME: 1 hour 40 minutes

INSTRUCTIONS TO CANDIDATES (Please read these instructions carefully)

1. You have been given this question booklet and a separate answer sheet. The question booklet contains 50 questions.
2. Do any necessary rough work in this booklet.
3. When you have chosen your answer, mark it on the ANSWER SHEET, not in this question booklet.

HOW TO USE THE ANSWER SHEET

4. Use an ordinary pencil.
5. Confirm that the answer sheet that you have been provided with has the following:
YOUR ASSESSMENT NUMBER
YOUR NAME
NAME OF YOUR SCHOOL
NAME OF SUBJECT
6. Do not make any marks outside the box.
7. Keep the sheet as clean as possible. Do not fold or tear it.
8. For each of the questions 1-50, four possible answers are given A, B, C and D. In each case, only ONE of the four choices is correct. Choose the correct answer from the choices.
9. On the answer sheet, the correct answers are marked with a dark line inside the box in which the letter you have chosen is written.

Example

In the Question Booklet:

17. Nyatiti is a musical instrument from the
- A. Mijikenda
 - B. Luo
 - C. Agikuyu
 - D. Akamba.

The correct answer is B

On the Answer Sheet:

In the set of boxes numbered 17, draw a dark line inside the box with the letter B printed in it as indicated below.

14. [A] [B] [C] [D] 15. [A] [B] [C] [D] 16. [A] [B] [C] [D] 17. [A] [B] [C] [D]

10. Your dark line MUST be within the box.
11. For each question, ONLY ONE box is to be marked in each set of four boxes.

This question paper consists of 8 printed pages

1. A grade 6 teacher drew the musical instrument below on a chalkboard. He then asked the learners to name the parts and state the functions of the parts named



Which learner gave an incorrect answer?

Learner	Part of a fiddle	function
A. Laurnyn	Tuning peg	Loosening or tightening the string to produce sound
B. Baraka	Resonator	Holding and supporting the instrument when playing
C. Ian	String	Produces sound through bowing
D. Gift	Bridge	Used to make the sound produced more clearer

2. How many beats are there in the note illustrated below?




- A. Four.
B. One.
C. Three.
D. Two.
3. Kemuto mixed some colours in equal proportion. Which of the following mixtures gave the correct results?
- A. Yellow + Red = Orange.
B. Blue + Yellow = Purple.
C. Red + Blue = Green.
D. Green + Blue = Red.

4. The following are values that a player learns when involved in sports **except**
- A. teamwork
B. unity
C. disrespect
D. obedience.

5. Which of the following equipment is **not** required in the game of rounders?
- A. Bat.
B. Posts.
C. Ball.
D. Net.

6. During painting, Grace accidentally added white colour pigment to her green colour and realized that the green colour had become lighter. What is the name given to what she did?
- A. Shading.
B. Tinting.
C. Smudge.
D. Mosaic.

7. While interacting with a digital device, Kaluma observed the following equipment. Which game is played using the equipment drawn below?



- A. Volleyball.
B. Rounders.
C. Netball.
D. Football.

8. Miwani was practising on clapping the following note patterns. Which of the following French rhythm names correspond with the given notes?



- A. taa taa-aa ta-te ta-te taa
 B. ta-te taa taa-aa ta-te taa
 C. taa taa-aa ta-te taa ta-te
 D. taa ta-te taa-aa taa ta-te
9. The artistic nature of beautiful handwriting where letters are written in a manner that they appear slightly tilted is known as
- A. matting
 B. calligraphy
 C. montage
 D. mosaic.
10. Which of the following pairs of colours is **not** found in the colour wheel?
- A. Green, purple
 B. Yellow, red
 C. White, black
 D. Blue, orange.
11. Plaiting technique can be used to improvise
- A. rounders bat
 B. a wind instrument
 C. relay baton
 D. a rope.
12. The following are safety measures to consider when improvising a volleyball equipment **except**
- A. ensure the area has proper lighting and well ventilated
 B. make sure there is enough space for working
 C. use sharp tools in a congested area
 D. follow outlined instructions.

13. Identify the type of service in the game of volleyball drawn below

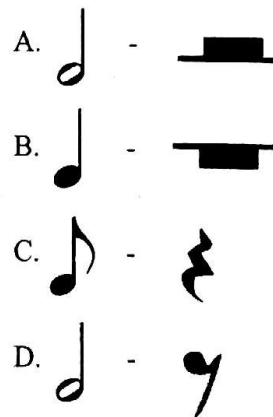


- A. dig
 B. overarm
 C. underarm
 D. toss.

14. Grade 6 learners wanted to play the game of volleyball. How many players were they in total at the beginning of the game in the court?

- A. 11
 B. 6
 C. 12
 D. 22

15. Which of the following musical notes is correctly matched with its corresponding rest?



16. Learners were asked to each bring a palette to school to be used during a painting lesson. What is the function of a palette when painting?
- A. Absorbing extra paint.
 B. Removing dust from the paint.
 C. Drying the wet surface.
 D. Mixing paints.

17. The East African Community Anthem is currently officially sung in which of these languages?

- A. Kiswahili only.
- B. Kiswahili and English.
- C. English only.
- D. Kiswahili and French.

18. A semibreve is a musical note with how many beats?

- A. Four.
- B. Two.
- C. A half.
- D. One.

19. As two learners were playing rounders, the bat they were using broke. Which technique would they use to improvise another bat?

- A. Modelling.
- B. Drawing.
- C. Carving.
- D. Weaving.

20. When performing a dig in the game of volleyball, what should be the position of the arm?

- A. Over the head.
- B. Side ways.
- C. Back of the body.
- D. In front of the body.

21. The following are elements of art that are used to create the image of the object **except** one. Which one is it?

- A. Proportion.
- B. Form.
- C. Value.
- D. Lines.

22. Grade five learners were asked by their Creative Arts teacher to bring materials that they could use as moulds when making items using papier mache. Who brought the correct material?

- A. Lucy - a closed soda bottle.
- B. Milly - open cylindrical container.
- C. Nahya - a broom.
- D. Dan - a brick.

23. Application of a layer of black Indian ink with a little soap on a wax-crayon background is known as

- A. surface cleaning
- B. overlapping
- C. overlaying
- D. etching.

24. Which of the following diagrams shows note B on a descant recorder?

A.



B.



C.



D.




25. What is the importance of a dance when performing a folk song?

- A. To act as musical instruments.
- B. To preserve cultural heritage.
- C. To control the tone of the song.
- D. To attract the audience.

26. The following materials can be used to improvise a colour wheel **except**

- A. wax
- B. paper
- C. paint
- D. pencil.



27. The below illustrated note is a quaver. Identify the part marked 1




- A. note head
B. flag
C. stem
D. post.
28. A descant recorder has how many finger holes?
A. 8
B. 7
C. 10
D. 5
29. A sprint start technique where the legs are further apart and the knee of the hind leg is in line with the heel of the front leg is called
A. medium
B. visual
C. non-visual
D. elongated.
30. Which of the following pair of methods can be used to finish the edges of a woven mat?
A. Burning and folding.
B. Folding and cutting.
C. Cutting and tying.
D. Cutting and folding.
31. The following are recyclable materials that can be used for weaving **except**
A. papyrus
B. aluminium foil
C. yarns
D. sisal.

32. What is the importance off recycling materials that are used in improvising learning materials?
A. To spend a lot of money.
B. To make the environment dirty.
C. They do not last for long.
D. To avoid wastage.

33. The following are sources of natural dye **except**
A. turmeric
B. crayon
C. beetroot
D. hibiscus.

34. Identify the object drawn below as used in weaving



- A. serrated card loom
B. clay slab
C. motif
D. slip.

35. Which of the solfa syllables are missing in the gaps below respectively?

d, r, m, f ____, l ____, d'

- A. t, s
B. r, s
C. d, t
D. s, t

36. The following materials can be used as a support surface when making a collage **except**
A. drawing paper
B. manila paper
C. plywood
D. cardboard.

37. The part of a drum that is hit by either a stick or hands to produce sound is called
- A. sling B. tuning laces
C. membrane D. sound box.


38. Grade 4 learners were heard singing a song
- "Tushangilie Kenya
Taifa letu tukufu
Kenya tunayoipenda
Daima***

What type of song is this likely to be?

- A. Topical song. B. Patriotic song.
C. Lullaby song. D. Action song.

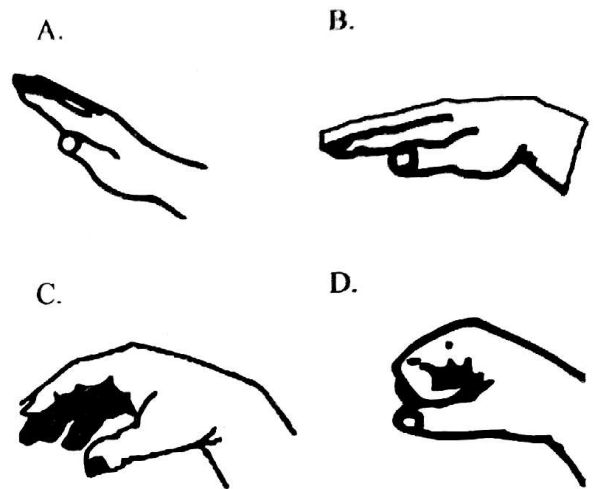
39. Which of the following is **not** a component of a Kenyan folk dance?
- A. Body movements.
B. Props.
C. Songs.
D. Balance.

40. Identify the three action sequence illustrated in the diagram below respectively from i, ii, iii



- A. Swan balance, forward balance, cartwheel.
B. Cartwheel, forward roll, swan balance.
C. Forward roll, swan balance, cartwheel.
D. Cartwheel, swan balance, forward roll.

41. Which of the following Kodaly hand signs represents solfa syllable 'l'?



42. Mulinge improvised a ball for playing soccer. He used all the following materials **except**

- A. old clothes
B. thin wires
C. recyclable bags
D. sisal strings.

43. Which of the following roles is **not** correctly matched with participant that performs it in a Kenyan folk dance?

- A. Dancers - mark the climax in a dance.
B. Soloist - pitches the singing in the dance.
C. Instrumentalists - play the instrument to provide the rhythm.
D. Response group - responding to the soloist.

44. Which of the following materials **cannot** be used to make ornaments?

- A. Beads.
B. Seeds.
C. Feathers.
D. Thorns.

45. Which of the following is **not** a safety precaution to observe when one is around the swimming area?


- A. Avoid swimming when the weather is unfavourable.
- B. Follow the instructions of the swimming instructor.
- C. Eat while swimming.
- D. Take a shower before entering the pool.

46. Winny was asked by her teacher to draw a form and shade it using cross hatching technique. Which of the following was a correct presentation?

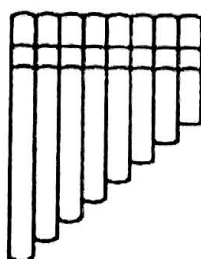
- A.
- B.



C.



D.



47. To play a descant recorder properly, one would need to do the following skills **except**

- A. fingering
- B. strumming
- C. breath control
- D. tonguing.

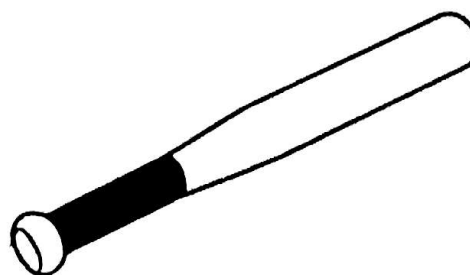
48. Why do dancers performing a Kenyan fork dance wear costumes while performing the dance?

- A. Improve the confidence of the dancers.
- B. To act as instruments.
- C. Make dancers to change tempo of the dance.
- D. To prevent them from getting tired.

49. The following materials can be used as surfaces to create patterns using stencils **except**

- A. walls
- B. fabric
- C. board
- D. soil.

50. The equipment drawn below is used in which game?



- A. Netball.
- B. Football.
- C. Rounders.
- D. Volleyball.