



TARGETER WINGS

MONITORING LEARNER'S PROGRESS



GRADE 4 - 2025

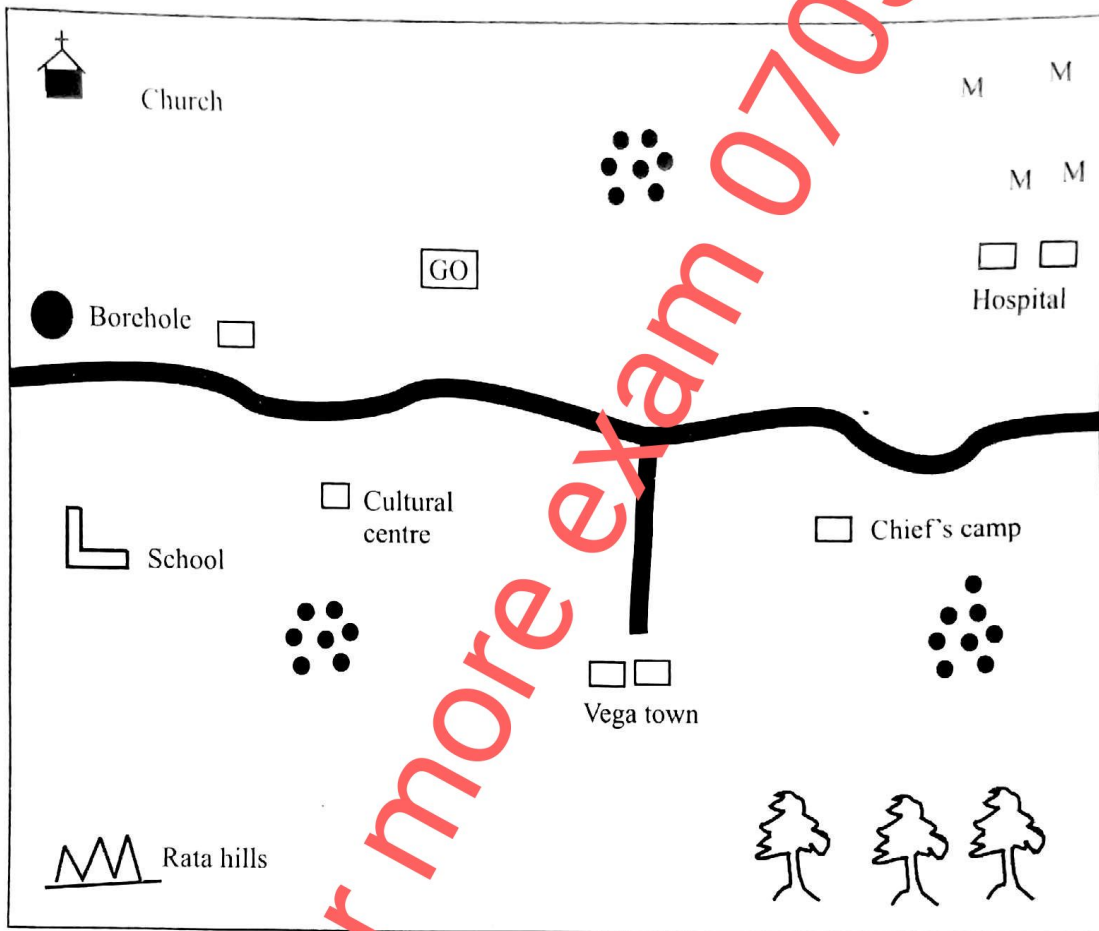
TIME: 1hr 40min

SOCIAL STUDIES & RE





SOCIAL STUDIES

Study the following map of Pata area and answer questions 1 - 5

PATA AREA



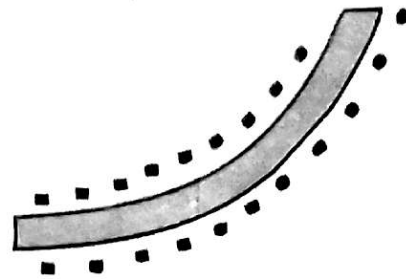
Key

	Forest	MM	Maize farm		Tarmac road
	Governor's office		Settlement		

Study the map of Pata area and answer questions 1 - 5

1. What is the direction of the hospital from the governor's office?
A. North
B. East.
C. West.
D. South
2. It is true to say that there is a historic built environment in Pata Area. Which one is it?
A. River
B. Rata Hills
C. Forest
D. Cultural centre.
3. Which among the following is a best example of a food crop that is grown by people living in Pata area?
A. Coffee.
B. Tea.
C. Rice.
D. Maize.
4. Identify one physical feature that is found in Pata area?
A. Borehole.
B. Hospital.
C. Hills.
D. Road.
5. Who is likely to be the elected head of Pata area?
A. The president.
B. The chief.
C. The governor.
D. The village headman.

6. The diagram below is of a certain area in a county. It shows population distribution pattern.

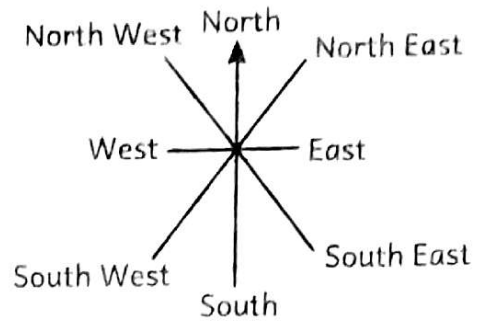


The dots represent people's houses built along a road. The population distribution pattern shown is called.....

- A. clustered
 - B. nucleated
 - C. linear
 - D. scattered
7. People in the county where my school is located depends on which people to make clothes for them?
A. Doctors. B. Tailors.
C. Carpenters. D. Masons.
 8. When we grow maize in our county, we can _____ them to other counties.
A. sell. B. buy.
C. plant D. borrow.
 9. Patrobas visited a historic built environment in his county. Suggest one way in which he can care for the historic built environment?
A. Destroying items inside the historic built environment
B. Sweeping the area around the historic built environment
C. Scattering leaves and dry flowers inside the historic built environment.
D. Scrubbing paint on the historic built environment using a sharp object.

10. The main role of the police in our county is
- teaching children
 - maintaining law and order
 - punishing law breakers
 - protecting leaders.
11. Learners were seen wearing sweaters and others heavy clothes. What is the weather likely to be?
- Cold
 - Hot
 - Dry
 - Windy
12. Grade four learners visited a historic built environment and learnt about the following benefits of historic built environments. Which one is not?
- Create employment
 - Attract tourists
 - Are hideouts for thieves.
 - Are learning resource centers.
13. Aloo is a person who assists the Governor to run the affairs of the County. Aloo is a
- Member of county assembly.
 - Chief.
 - President.
 - Deputy Governor.
14. The following are benefits of interdependence. Which one is not?
- People live in unity
 - People get new ideas
 - People get assistance
 - People hate each other.

15. Tamika was asked to label a compass direction and she labeled it as follows.



Which of the above directions is not a cardinal point of a compass?

- West
 - East
 - North West
 - South
16. Luke observed the sun rising. He found out that the sun rises from which direction?
- East
 - North
 - West
 - South.
17. When you are about to cross the road and the traffic light turns red, you should
- get ready
 - go
 - go back
 - stop
18. Grade four pupils were asked to name the instrument used to show the direction of a place. They gave the following answers. Which one is the correct answer?
- A picture.
 - A map.
 - Compass.
 - Artefacts.

19. Rivers which flow throughout the year are called

- A. seasonal rivers.
- B. permanent rivers.
- C. streams.
- D. temporary rivers.

20. Mzee Hekima narrated to grade four learners at Boma School that in the past people carried out their day to day activities differently. The activities became a practice and later became the _____ of the people. What is the best word to fill the blank space?

- A. culture
- B. school
- C. economic activities
- D. resources

21. Which is the smallest county in Kenya?

- A. Turkana.
- B. Marsabit.
- C. Nairobi.
- D. Mombasa.

22. A high raised part of land forms a

- A. plain
- B. mountain
- C. lake
- D. river

23. Mountains, valleys, rivers and hills are called.....

- A. relief features.
- B. drainage features
- C. manmade features
- D. physical features

24. The road sign below shows that



- A. there are children crossing.
- B. there is a hospital ahead.
- C. there are bumps ahead.
- D. there is a junction ahead.

25. An area in our county where many trees grow is called a

- A. plain
- B. forest
- C. farm
- D. roadside.

26. Which of the following is an acceptable value that a grade four learner should adopt?

- A. Laziness.
- B. Hatred.
- C. Disrespect.
- D. Honesty.

27. The green colour found on our national flag represents

- A. colour of people in our country.
- B. our peaceful country.
- C. our rich agricultural land.
- D. the blood shed by freedom fighters

28. People who kill wild animals in the park without permission are called

- A. tourists
- B. game rangers
- C. poachers
- D. robbers.

29. A type of population distribution where people live close to each other is said to be

- A. dense population
- B. scattered population
- C. sparse population
- D. low population.

30. A built environment in which traditional tools and household items have been preserved is known as a

- A. monument
- B. museum
- C. game park
- D. sculpture.

C.R.E

31. During creation, God created all things. Human beings were created in God's own
- A. behaviour and character
 - B. image and likeness
 - C. image and behaviour
 - D. colour and likeness.
32. During a CRE Lesson, grade four learners learnt that the Bible has many books. Which of the following books is found in the New Testament?
- A. Psalms
 - B. John
 - C. Deuteronomy
 - D. Leviticus
33. Grade four learners learnt about members of an extended and nuclear families. Who among following is a member of extended family?
- A. Mother
 - B. Son
 - C. Father.
 - D. Grandfather.
34. In case a stranger offers you biscuits and soda, what should you do?
- A. Take them and say thank you.
 - B. Refuse and go away.
 - C. Tell the stranger your favourite flavour so that he or she does not make a mistake next time.
 - D. Pay for the items.
35. God has all the listed attributes apart from one. Which one is it?
- A. Loving father.
 - B. Creator.
 - C. Unreasonable.
 - D. Holy father

36. Which of the following is not the right way to cope with emotions?
- A. Playing with our friends.
 - B. Forgiving others
 - C. Hating others.
 - D. Reading the Bible.
37. Which of the following is the best way of handling the Bible?
- A. Carry it well and keep it safely.
 - B. Tear some papers
 - C. Fold some important pages
 - D. Write your name everywhere in the Bible
38. Who among the following people climbed a sycamore tree in order to see Jesus Christ?
- A. John
 - B. Peter
 - C. Paul
 - D. Zacchaeus
39. Grade four learners were asked to name the first book found in the old Testament. Which of the following books mentioned was correct?
- A. Matthew
 - B. Exodus
 - C. Genesis
 - D. Micah
40. The father-in-law of Moses was called
- A. Peter
 - B. Miriam
 - C. Jethro
 - D. Meshack

41. Four grade four learners stated some ways in which one can show respect to the family members. Who among them gave the correct answer?
- A. Jared- being rude to them
 - B. Jeniffer - ignoring them.
 - C. John - abusing them.
 - D. Judy - doing what they ask us to do.
42. When God created Adam and Eve, they lived in the garden of
- A. Bethsaida
 - B. Eden
 - C. Gethsemane
 - D. Sodom and Gomorrah.
43. In Corinthians 6:19, we learn that our bodies are the _____ of the Holy Spirit.
- A. angels
 - B. houses
 - C. temples
 - D. churches
44. Which prophet of God was mocked by some boys because of his bald head?
- A. Elisha
 - B. Elijah
 - C. Moses
 - D. Isaiah
45. Which King commanded Shadrack, Meshack and Abednego to worship the statue he made and when they refused he threw them into a fiery furnace to burn?
- A. King Solomon
 - B. King Herod
 - C. King Saul
 - D. King Nebuchadnezzar
46. "So now go, I am sending you to pharaoh to bring my people, the Israelites out of Egypt". (Exodus 3:10) Who was told those words?
- A. Moses
 - B. Aaron
 - C. Cain
 - D. Elijah
47. As Christians, we should _____ those who wrong us.
- A. fight
 - B. forgive
 - C. question
 - D. hate
48. Jonah was swallowed by a _____ when he refused to go to Nineveh.
- A. ship
 - B. crocodile
 - C. fish
 - D. lion
49. What was Moses doing when God called him to go to Egypt?
- A. Taking care of a flock of sheep.
 - B. Hiding from Egyptians.
 - C. Praying on a mountain.
 - D. Making a boat.
50. Who among the following was not among the twelve disciples of Jesus?
- A. Levi.
 - B. Andrew.
 - C. James.
 - D. Simeon.

31. "All praise and thanks be to Allah, The Lord of all the worlds". This quotation is a verse from surah
- Al-Fatiha
 - Al-Falaq
 - An-Nas
 - Al-Ikhlās
32. Who is a true king according to surah An-Nas?
- Angels
 - Prophet Muhammad (S.A.W)
 - Allah (S.A.W)
 - Firaun
33. Which of the following surah curses an uncle of the prophet (S.A.W)?
- Al-Falaq
 - Al-Kafirun
 - Al-Fatiha
 - Al-Masad
34. Salim does not believe in one God. He worships other things alongside Allah (S.W.T). Which of the following surahs discourages shirk?
- Al-Masad
 - Al-Quraish
 - Al-Ikhlās
 - Al-Falaq
35. What is the meaning of Abu Lahab according to surah Al-Masad?
- The father of flames
 - The mother of flames
 - The angry man
 - The angry woman
36. The prophet (S.A.W) said in a Hadith that he was sent for the purpose of
- destroying bad morals
 - perfecting good morals
 - teaching religion
 - dealing with evil doers
37. While reading the Hadith of the prophet on fitness, Salma a grade four learner came across three sports that he mentioned in that Hadith. Which of the following is not one of those sports?
- Archery
 - Horse riding
 - Football
 - Swimming
38. Which of the following attributes of Allah (S.W.T) means that He is the King of Kings?
- Ar-Rahman
 - Ar-Rahim
 - Ar-Razzaq
 - Al-Malik
39. Sarah is writing a chart on the pillars of Iman. Which of these pillars will appear as the second one?
- Belief in Allah
 - Belief in Angels
 - Belief in the Books
 - Belief in the prophets
40. Shaban stole his friend's pen during break time. Who among the following angels recorded what Shaban did?
- Jibril
 - Mikail
 - Atid
 - Raqib
41. After breastfeeding her one-year-old baby boy, Shauzil realized that the baby had urinated on her. What was the best way to remove the najasaat?
- By washing with sand
 - By washing with water
 - By washing seven times with both water and sand
 - By sprinkling water at the spot where urine went

42. Three of the following are examples of medium najasaat. Which one is **not**?
- Alcohol
 - Blood
 - Pus
 - Urine of a baby boy below two years
43. Rajab wants to perform wudhu in readiness for the performance of swalah. How many parts of the body will he wash?
- Seven
 - Eight
 - Four
 - Three
44. Which of the following is the second pillar of Islam?
- Saum
 - Swalah
 - Zakat
 - Shahada
45. Which parts of the body should a female dress cover according to the teachings of the prophet (S.A.W)?
- Face and hands only
 - Stomach and chest only
 - The whole body except face and hands
 - The whole back side except the feet
46. Complete the following Dua, "In the name of Allah we enter and upon Allah we"
- come out
 - leave
 - walk
 - depend
47. Who among the following people worship in the church?
- Muslims
 - Christians
 - Hindus
 - Jews
48. Munira, a grade four learner is preparing flash cards on the qualities of prophet Muhammad (S.A.W). Which one is not one of them?
- Arrogant
 - Honest
 - Hard working
 - Truthful
49. Three of the following activities take place on the day of Aqiqa. Which one does not?
- Shaving the hair
 - Slaughtering an animal
 - Giving a name to the baby
 - Dancing and drinking alcohol
50. The birthday of the prophet (S.A.W) is celebrated on
- 1st Shawwal
 - 10th Muharram
 - 12th Rabiul Awwal
 - 27th Rajab