



TARGETER WINGS

MONITORING LEARNER'S PROGRESS

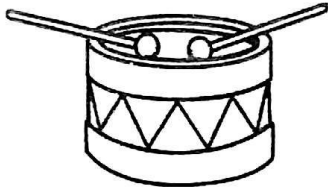
GRADE 4 - 2025



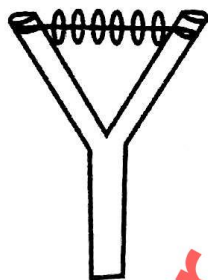
CREATIVE ARTS

TIME 1hr 40mins

1. The percussion musical drawn below is played through which technique?



- A. Blowing B. Shaking
C. Hitting D. Bowing.
2. How many players are required in the field during a netball game?
A. 7 B. 14
C. 6 D. 12
3. Tukiko wanted to improvise a ball. He needed to collect the following pair of tools and materials except
A. panga and small stones
B. old socks and knife
C. scissor and a used carrier bag.
D. razor blade and a string.
4. Mbulwa was asked by her friend to help play the instrument below.



The part of the above instrument that hit each other to produce sound is the

- A. sticks
B. wires
C. bottle tops
D. papers.

5. Which colour should appear in the part marked F of the Kenya national flag?

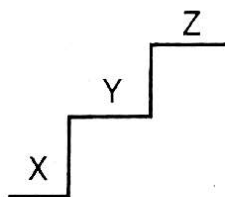


- A. Black. B. Red.
C. White. D. Green.
6. When the membrane of a drum is tight, it
A. produces a higher pitch
B. produces a lower pitch
C. stops producing sound
D. can be played by blowing.
7. Which of the following skills is not learnt in a game of netball?
A. Chest pass. B. Kicking.
C. Overhead pass. D. Catching.
8. A picture making technique that involves cutting and pasting different pictures to produce one pictorial composition is called
A. collage B. mosaic
C. painting D. montage.
9. To improvise a drum, Wanjala needed all the following materials except
A. cylindrical container
B. animal hide
C. bottle tops
D. string.
10. Identify the type of pass drawn below in a game of netball.



- A. overhead pass B. chest pass
C. overarm pass D. underarm pass

11. Which of the following activities can be performed as a warm up activity before playing netball?
- Eating.
 - Kneeling.
 - Stretching arms.
 - Resting on the ground.
12. The following are colours that are obtained without mixing other colours except
- red
 - orange
 - blue
 - yellow.
13. Which of the following cannot be a source of pictures used when creating a montage?
- Old newspapers.
 - Old magazines.
 - Old calendars.
 - Old clothes.
14. Which of the following correctly fills the spaces marked X, Y and Z respectively?



- d, r, m
 - m, d, r
 - r, m, d
 - m, r, d
15. Which colour value is obtained when a black colour is added to a colour?
- Light tone is obtained.
 - No change is seen on the colour.
 - Pale tone is obtained.
 - Dark tone is obtained.
16. The following are steps involved when creating a montage
- Prepare the base*
 - Look for the materials*
 - Paste pictures and finish*
 - Select a theme*
 - Arrange and overlap*
- Arrange the above steps in order
- iv, ii, i, v, iii
 - v, iv, iii, ii, i
 - i, ii, iii, iv, v
 - iii, v, ii, iv, i

17. The rest drawn below corresponds to which of the following musical notes?

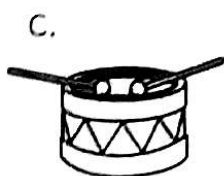



-
-
-
-


18. Which of the following is not a quality of a good melody in music?
- Has flow.
 - Volume.
 - Balanced.
 - Memorable.
19. Grade 3 learners were asked by their Creative Arts teacher to improvise a skipping rope. Which of the materials below was not used when improvising the rope?
- Sisal fibre.
 - Banana fibres.
 - Old pieces of clothes.
 - Broken wires.
20. Which of the following colours on the Kenyan flag represents peace?
- White.
 - Green.
 - Black.
 - Red.
21. Which of the following is a non-melodic percussion instrument?
- Marimba.
 - Adongo.
 - Kigamba.
 - Whistle.
22. The line below has been obtained from the Kenya National anthem **'Service be our earnest endeavour'** The above line was obtained from which stanza?
- 1
 - 2
 - 3
 - 4
23. Which percussion instrument below is correctly matched with the technique used to play it?
- Kayamba - hitting
 - Marimba - hitting
 - Isikuti - shaking
 - Kigamba - striking.

24. Which of the following parts of a drum is correctly matched with its function?
- A. Laces - hit to vibrate and produce sound.
 - B. Sling - used for tuning the drum.
 - C. Membrane - fixes the skin on the resonator.
 - D. Resonator - amplifies the sound produced.
25. Which of the following materials can be used to make percussion instruments?
- A. Clay slab
 - B. Gourds
 - C. Papers
 - D. Banana leaves.
26. When singing the Kenya national anthem, one should be
- A. running
 - B. walking
 - C. standing at attention
 - D. seated.
27. Grade 4 learners wanted to improvise a ball that would last for a long time. Which technique did they use?
- A. Modelling.
 - B. Weaving.
 - C. Macrame.
 - D. Smudge.
28. Mike was creating a montage pictorial composition. He later found that he was not having an adhesive material. What would he use instead of glue?
- A. Water.
 - B. Mud.
 - C. Saliva.
 - D. Wheat flour paste.

29. Which of the following is a string musical instrument?



30. The following materials and tools are used to make charcoal sticks except
- A. crayon
 - B. green sticks
 - C. knife
 - D. source of heat.
31. How many teams are allowed to play the game of netball at a go?
- A. Four.
 - B. One.
 - C. Three.
 - D. Two.
32. Which part of the body does a player in the game of netball use to pass the ball to a teammate?
- A. Feet.
 - B. Knee.
 - C. Hands.
 - D. Chest.
33. Which of the following can be used instead of beads to make a necklace?
- A. Water paint.
 - B. Maize grains.
 - C. String.
 - D. Wire.
34. Identify the gymnastic activity drawn below.



- A. V - balance
 - B. Side roll
 - C. Forward roll
 - D. Crab balance.
35. The Kenya national anthem is sung in how many languages?
- A. 4
 - B. 3
 - C. 2
 - D. 1
36. Which of the following materials cannot be used when creating a collage composition?
- A. Pictures from magazines.
 - B. Adhesives.
 - C. Grass.
 - D. Cutting tools.

37. Which equipment drawn below has been made through weaving?

A.




B.



C.



D.



38. Adongo is a percussion instrument that is played by which community?

A. Agikuyu.

B. Teso.

C. Luo.

D. Giriama.

39. Which of the following lowercase letters is a descender?

A. y

B. h

C. b

D. k

40. Leg stretching and jogging are some activities that are done by a player to prepare for a netball game. They are referred to as

A. warm up activities

B. resting activities

C. athletics

D. cool down activities.

41. Which of the following is the French rhythm name for a crotchet?

A. ta - te

B. taa-aa

C. taa

D. taa-ta-te

42. The highness or lowness of a sound in music is known as

A. melody

B. pitch

C. rhythm

D. volume.

43. Which of the following materials can be used in drawing a form on a drawing paper?

A. Toothpick.

B. Stone.

C. Stick.

D. Pencil.

44. Which of the solfa- syllables has the lowest pitch?

A. m

B. d

C. r

D. r,d

45. During a painting lesson, grade 4 learners noted that none of them had purple colour which they needed to use before presenting their artwork. To get purple colour, which primary colours were mixed in equal proportion?

A. Yellow and blue.

B. Yellow and red.

C. Blue and red.

D. Yellow and green.

46. Identify the musical note drawn below



A. Crotchet. B. A pair of quaver.

C. Quaver. D. Minim.

47. Identify the solfa syllable that represents the hand sign below.



A. d

B. d and r

C. r

D. m

48. Which of the following materials would Anita use to model the solfa syllables?

A. Clay soil.

B. Eraser.

C. Sand soil.

D. Used pencils.

49. The East African Community anthem has how many stanzas?

A. Four.

B. Three.

C. Five.


D. Two.

50. Which of the pictures below shows a medium sprint start?

A.



B.



C.



D.

