



POST MOCK 2024



MATHEMATICS

121/1

PAPER 1

TIME: 2½ HOURS

NAME..... SIGN.....

INDEX NO..... ADM NO.....

Kenya Certificate of Secondary Education.

INSTRUCTIONS TO CANDIDATES

1. Write your name, Admission number and class in the spaces provided.
2. Sign and write date of the examination in the spaces provided.
3. The paper contains TWO sections: Section A and B
4. Answer ALL questions in section I and **STRICTLY ANY FIVE** questions from section II.

FOR EXAMINERS USE ONLY

SECTION A

[illegible]

SECTION B

[illegible]

SECTION A (50MKS)

ANSWER ALL THE QUESTIONS IN THIS SECTION

1. Simplify $\frac{\left(1\frac{3}{7}-\frac{5}{8}\right)+\frac{2}{3} \text{ of } 1\frac{1}{5}}{\frac{3}{4}+1\frac{5}{7} \div \frac{4}{7} \text{ of } 2\frac{1}{3}}$ (4mks)

2. A straight line $ax + by = 16$ passes through A (2, 5) and B (3, 7). Find the values of a and b (3mks)

3. Simplify $\frac{2-x-x^2}{3x^2-2x-1}$ (3mks)

4. Solve for X where $0 \leq x \leq 90^\circ$

$$\sin 2x - \cos(x - 30) = 0$$

(2mks)

5. Solve for X in

$$2x - 4 \leq 3x + 2 < 10 - x$$

Hence represent your solution on a number line

(3mks)

6. Two similar cylindrical solids have heights of 18 cm and 24 cm. The volume of the larger cylinder is 320cm^3 , find the volume of the smaller cylinder

(4mks)

7. Solve for X

(3mks)

$$8^{3x-2} \times 16^{\frac{1}{2}x} = \frac{1}{4}$$

8. A quantity P varies jointly as Q and inversely as on the square root of R. If Q is increased by 10% and R is reduced by 19%, find the percentage change in P

(3mks)

9. Okedi sold goods whose marked price is sh. 340,000 at a discount of 2%. He was paid sh. 16660 as commission for the total sales. Calculate the percentage rate of commission

(3mks)

10. The interior angle of a regular polygon is three and a half times the exterior angle. Determine the sides of the polygon **(3mks)**

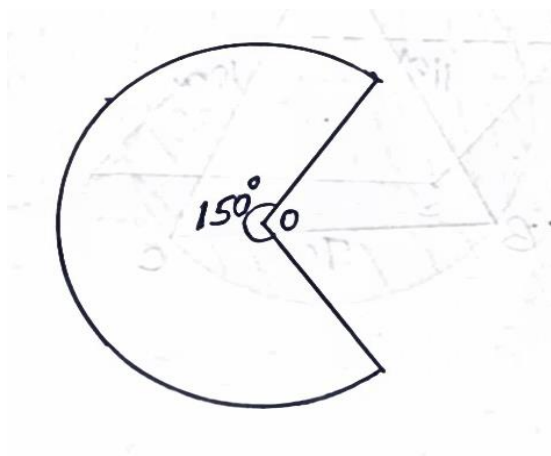
11. Give that $A = \begin{pmatrix} 2 & 3 \\ 1 & 4 \end{pmatrix}$, $B = \begin{pmatrix} -1 & 3 \\ 2 & -1 \end{pmatrix}$; find matrix C where $AC = B$ **(3mks)**

12. Amoiti bought 2 pens and 5 exercise books at a cost of sh. 275. Allan bought 4 such pens and exercise books from the same shop at a cost of sh. 415 by letting sh. X and y to be the costs of a pen and a book respectively, find the cost of each item **(4mks)**

13.Okech left some money in his will to be shared amongst his wife, son and daughter in the ratio 4:3:2 respectively. If the daughter received sh. 120,000 less than the mother's share, find the total amount of money Okech left in his will. **(2mks)**

14.Use tables of reciprocals to find the reciprocal of 0.3758. Hence find the value $\frac{\sqrt[3]{0.125}}{0.3758}$ correct to 4.S.f **(4mks)**

15.A major sector of a circle subtends an angle of 150 at the centre. The radius of the circle is 7cm and the centre is at O as shown



If the sector is folded into a conical shape, calculate the radius of the cone correct to 1 d.p

(3mks)

16.A Kenyan bank buys and sells currencies at the exchange rates below

Currency	Buying (ksh)	Selling (ksh)
1 euro	147.87	148.00
1 us dollar	74.22	74.50

An American tourist arrived in Kenya with 24,000 Euros. He converted all the euros to Kenya shillings at the bank. He spent a total sh. 200,000 while in Kenya and converted the rest into US dollars at the bank. Find the amount in dollars that he received. **(3mks)**

SECTION II (50MKS)

Answer Any Five Questions In This Section

17. The diagonals of a rectangle P, Q, R, S intersect at (5, 3). Given that the equation of line PQ is $4y - 9x = 13$ and that of line PS is $y - 4x = 5$

a) The co-ordinates of P **(3mks)**

b) The co-ordinates of R **(2mks)**

c) The equation of line RQ **(2mks)**

d) The equation of a perpendicular line drawn to meet PR at (5,3) **(3mks)**

18. A bus left Malaba town at 6.00am and travelled at an average speed of 80km/h towards Nairobi which is 510km away. At 6.30am a salon car left Nairobi the same day following the same route and travelled at average speed of 100km/h towards Malaba. After 1 hour, the car had a puncture which took 15minutes to repair before proceeding with the journey;

Determine

a) The distance covered by the bus in 30minutes **(1mks)**

b) The time of the day when car met the bus. **(6mks)**

c) The distance from Nairobi to the point where the car met with the bus **(2mks)**

d) The time of the day to the nearest minute when the bus got to Nairobi **(1mk)**

19. Points P, Q and R are a straight line on a level ground. An electricity pole is erected at P with a point X and Y on it. From point X, the angle of depression of point Q is 48° while the angle of depression of R from Y which is 3m above X is 60°

a) Illustrate the position of X, Y, P and R by sketching. **(1mk)**

b) Hence calculate to 1 d.p.

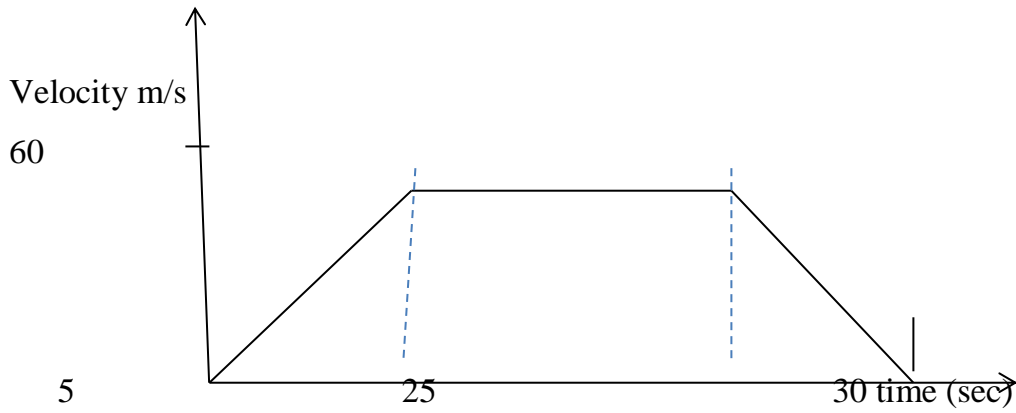
i) The length XP **(3mks)**

ii) The distance YQ **(2mks)**

iii) The distance PQ **(2mks)**

iv) The angle of elevation of Y from R given that PR = 8cm **(2mks)**

20.a) The figure shows a velocity- time graph of a car



i) Find the total distance covered by the car in metres

(3mks)

ii) Calculate the deceleration of the car

(3mks)

b) A lorry left kisumu at 8.00am and travelled towards the Nakuru at an average speed of 72km/h.

At 8.30am a matatu left kisumu and followed the lorry at an average speed of 96km/h.

Determine the time of the day when the matatu caught up with the lorry

(4mks)

21. The data below shows marks scored by 48 students in a geography exam.

Marks %	30-39	40-49	50-59	60-69	70-79	80-89
Students	6	10	x	9	12	2

a) Determine the value of x **(2mks)**

b) State the modal class **(1mk)**

c) Calculate the **(3mks)**

i) Mean mark


ii) Median mark **(4mks)**

22.a) Complete the table below for the equation $Y = x^2 + 3x - 6$ where $-7 \leq x \leq 4$

x	-7	-6	-5	-4	-3	-2	-1	0	1	2	3	4
y		4			6				-2			

(3mks)

b)Using the scale 1 cm to represent 1 unit on the X- axis and 1cm to represent 2 units on the Y - axis, draw the graph of $y = x^2 + 3x - 6$ for $-7 \leq x \leq 4$ (4mks)



c) Use your graph to solve for x in

$$x^2 + 3x - 6 = 0$$

(2mks)

d) State the;

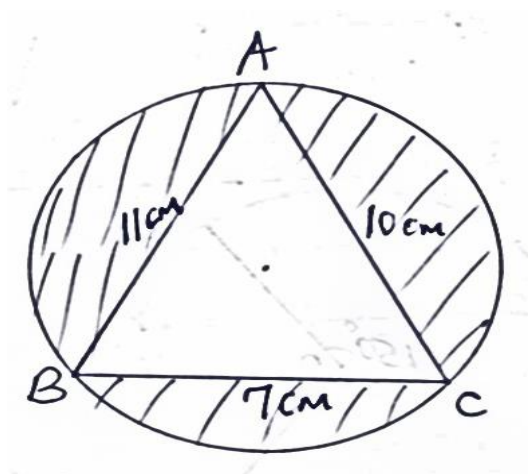
i) Turning point of the curved

(1mk)

ii) Equation of the line symmetry

(1mk)

23. The figure shows triangle ABC inscribed in a circle where $AC = 10\text{cm}$, $BC = 7\text{cm}$ and $AB = 11\text{cm}$



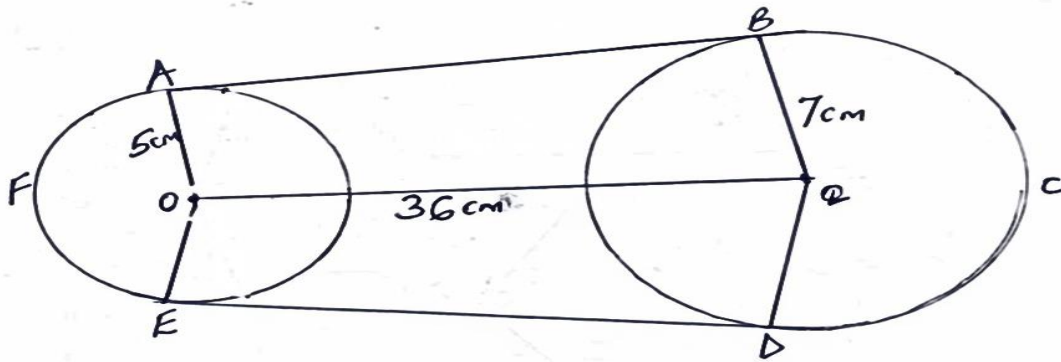
Calculate correct 1 d p (use $\pi = \frac{22}{7}$)

a) The size of the angle CAB (4mks)

b) The radius of the circle (2mks)

c) Hence, find the area of the shaded region (4mks)

24. ABCDEFGA is a belt tied around two wheels whose centres are O and Q forming a pulley system. Given that $Q = 36\text{cm}$, $AO = 5\text{cm}$ $BQ = 7\text{cm}$. calculate correct 1 d.p (Take $\pi = \frac{22}{7}$)



a) Angle AOQ (3mks)

b) The length of the belt in contact with

i) The wheel whose centre is O (2mks)

iii) The wheel whose centre is Q (2mks)

c) The length of AB, hence the total length of the belt (3mks)