

# ALL SUBJECTS



THE KENYA PRIMARY SCHOOL EDUCATION ASSESSMENT

## KPSEA 2023 EXAMINER SUPER PREDICTION

### **A KPSEA 2023 PREDICTION WITH PRECISION**

---

This PDF Comprises of Expected KPSEA 2023 Questions prepared by a panel of top KNEC writers. All the KPSEA 2023 Candidates are advised to take the prediction questions therein seriously!

---

**For Complete Blue print analysis &  
Marking Schemes Contact**

**0724333200/ 0795491185**

**Mr Machuki**

**Confidential!!!**

*Kenya Educators Consultancy Wishes all the KPSEA 2023 Candidates  
the best of Luck ahead of the KPSEA National Exams.*



317083

©2023 The Kenya National Examinations Council



Turn over



**KENYA PRIMARY SCHOOL EDUCATION ASSESMENT**  
**KPSEA 2023 EXAMINER SUPER PREDICTION**

**ENGLISH**

**Time: 1 hour 40 Minutes**

**READ THESE INSTRUCTIONS CAREFULLY.**

1. You have been given this question booklet and a separate answer sheet. The question bookier contains 30 questions.
2. Do any necessary rough work in this booklet.
3. When you have chosen your answer, mark it on the **ANSWER SHET**, not in the question paper.

**HOW TO USE THE ANSWER SHEET.**

4. Use an ordinary pencil only.
5. Make sure that you have written on the answer sheet.

**YOUR INDEX NUMBER**

**YOUR NAME**

**NAME OF YOUR SCHOOL**

6. By drawing a **dark line** inside the correct numbered boxes mark your full index number (i.e. school code Number and the three -figure candidate's Number) in the grid near the top of the answer sheet.
7. Do not make any marks outside the boxes.
8. Keep your answer sheet as clean as possible and Do not fold it."
9. For each question 1-30 four answers are given. The answers are lettered A, B, C, D. In each case Only One of the four answers is correct. Chose the correct answer.
10. On the answer sheet show the correct answer by drawing a dark line inside the box in which the letter you have chosen is written.
11. Your dark line Must be within the box. Make your line as dark as possible.
12. For each question **Only One box** is to be marked in each set of four boxes.

*Candidates should check the question papers to ensure that all questions are printed.*



**Read the story below and answer the questions that follow.**



Anna was a popular girl at school. Everyone liked her very much because she always treated everyone kindly. Whenever anyone had a problem and needed help, they would go to her and she was ready to help.

One day, there was a celebration held in their school. This celebration was commonly referred to as Best Friend's Day. The teacher asked everyone to make three presents to give to three of their best friends. Everyone made presents for their friends but Anna was confused because she considered every one as her friend. When the presents were distributed, Anna did not get any present. She became really sad. Later in the evening, she told her mother what had happened. Her mother said, "your best friend is the person you give a lot of time and attention to and are willing to support you even when times are hard." She also said, "you cannot have everybody as your best friend because there will never be enough time to spend with all of them."

Anna finally understood what it means to have a best friend. She now knew that her best friend would be her mother and gave her the presents she had made.

### **Questions**

1. Why did everyone like Anna very much?
  - A. always treated everyone fairly
  - B. let them copy her homework
  - C. gave them snacks
  - D. was rich.
2. Why were the learners told to make three presents?
  - A. The teacher was celebrating her birthday.
  - B. It was going to be Christmas the next day.
  - C. They were celebrating Best Friends' Day.
  - D. They wanted to surprise their parents.
3. Who was Anna's best friend according to the passage?
  - A. Her teacher
  - B. Everybody
  - C. Her mother
  - D. Nobody.
4. Why can't everybody be Anna's best friend?
  - A. There are not enough presents for everybody.
  - B. There is never enough time to spend with everyone.
  - C. Nobody liked her.
  - D. *It's* against the law.
5. Why didn't Anna get any present?
 

She.

  - A. did not have a best friend
  - B. did not want any present
  - C. was sad
  - D. did not make any presents.

**Read the following story and answer the questions that follow.**



One day, there was an argument between the chameleon and hare. Chameleon was tired of *hare* making fun of him because of his eating habits and slow nature when he walked. To stop the argument, they decided to race to see who would win.

Hare was so confident that he would win that he started bragging to everyone about it. Tortoise was asked to be the judge. Tortoise said the first to sit on the stool at the finishing line would be the winner. The race started and when hare looked back, he did not see chameleon. He relaxed and started walking slowly while eating fruits on the side of the road. When hare reached the stool, he prepared to sit down but he heard a little voice telling him, "don't sit on me, hare, am already here." It turned out chameleon had attached himself on to hare's tail and jumped onto the stool as soon as hare turned to sit down. Hare was so surprised. The animals who had come to watch the race cheered chameleon and carried him high in the air. Hare walked away in shame.

### Questions.

6. Why did hare make fun of chameleon? Because
  - A. of his eating habits and slow nature
  - B. he was small in size
  - C. chameleon changed colour
  - D. he liked making fun of animals.
7. Why did the hare and the chameleon decide to race?
  - A. For fun.
  - B. To stop an argument.
  - C. To win a prize.
  - D. To see who was stronger.

8. What happened when hare looked back and did not see chameleon? He
  - A. continued to run to the finish line
  - B. went back to look for chameleon
  - C. lay down and slept
  - D. relaxed and walked slowly.
9. How did chameleon reach the stool before hare? He
  - A. asked other animals to carry him
  - B. ran all the way there
  - C. attached himself to hare's tail
  - D. flew there.
10. What lesson do we learn from this story? We should
  - A. not make fun of others because of their weaknesses
  - B. always respect our elders
  - C. always be like hare
  - D. never be slow.

### Read the following passage and answer the questions that follow.

The constitution is the fundamental principles or established rules that constitute the legal basis of a political party, organization or other type of entity and commonly determines how that entity is to be governed. When these principles are written down into a single document or set of legal documents, those documents may be said to embody a written constitution.

Constitutions concern different levels of organizations, from sovereign countries to companies and associations. A treaty that establishes an international organization is also its constitution, in that it defines how that organization is constituted. Within states, a constitution defines the principles upon which the state is based, the procedure



in which laws are made and by whom. Some constitutions, also act as limiters of state power, by establishing lines which a state's rulers cannot cross, such as fundamental human rights.

The Kenyan constitution acts as a safeguard against human rights violation. The human rights contained in the constitution is the right to life, freedom of speech, association and religion, right to own land or business and several more. Without the constitution, there would be disorder and chaos. Without the constitution everyone would do as they please without regard to others. People wouldn't care whom they hurt and this world would be impossible to live in.

- C. Constitution
  - D. Treaty
14. The Kenyan constitution acts as
- A. evidence of independence
  - B. a safeguard against human rights violation.
  - C. a way to show of how learned we are
  - D. definite way to show how to run the country.
15. Which of the following is not a human right or freedom?
- A. Right to life.
  - B. Right to quality education.
  - C. Freedom of expression and association.
  - D. Right to own fire arms.

**Questions**

11. What is the constitution according to the passage?
- A. Principals and rules that govern a party, organization or association.
  - B. Written letters that tell us what to do
  - C. Written document used as a learning resource.
  - D. Rules that govern members of the family
12. When the principles are written down in a single document or set of legal documents they are said to embody
- A. a written constitution
  - B. the fundamental rights
  - C. the rule of law
  - D. the legislative council.
13. \_\_\_\_\_ that establishes an international organization is also its constitution.
- A. Truce
  - B. Name

**CLOZE TEST**

**For questions 16-25, choose the correct word from the choices given to fill in the blank space.**

Pollution \_\_\_\_16\_\_\_\_rivers has \_\_\_\_17\_\_\_\_ such a major problem to the point \_\_\_\_18\_\_\_\_it is no longer safe to use water \_\_\_\_19\_\_\_\_the rivers for domestic use. The water is so full of chemicals \_\_\_\_20\_\_\_\_heavy metals \_\_\_\_21\_\_\_\_ can cause serious \_\_\_\_22\_\_\_\_and defects. This \_\_\_\_23\_\_\_\_ should be \_\_\_\_24\_\_\_\_ as soon \_\_\_\_25\_\_\_\_ possible.

	A	B	C	D
16.	with	of	on	by
17.	be	become	is	will
18.	that	then	so	such
19.	on	from	for	in
20.	with	but	and	by
21.	which	they	by	who
22.	diseases	issues	problems	matter



23.	problem	issue	subject	matter
24.	resolved	solved	looked at	addressed
25.	as	is	it	at

**Choose the correct word to complete the sentences**

26. I \_\_\_\_\_ working on a big problem.  
A. am  
B. are  
C. is  
D. were
27. You \_\_\_\_\_ finish your homework or get punished.  
A. neither.  
B. nor  
C. either  
D. none
28. \_\_\_\_\_ of my friends did not attend my graduation  
A. Less  
B. Many  
C. Any  
D. None
29. Mary bought an \_\_\_\_\_ dress.  
A. expensive, cotton, black  
B. cotton, black, expensive  
C. expensive, black, cotton  
D. cotton, expensive, black
30. The bride \_\_\_\_\_ walked down the aisle.  
A. majestically  
B. automatically  
C. hurriedly  
D. tearfully





**KENYA PRIMARY SCHOOL EDUCATION ASSESMENT**  
**KPSEA 2023 EXAMINER SUPER PREDICTION**

**KISWAHILI**

**MUDA: Saa 1 dak 40**

**SOMA KWA MAKINI MAAGIZO YAFUATAYO.**

1. Umepewa kijitabu hiki cha maswali na karatasi ya kujibia. Kijitabu hiki kina maswali 30.
2. Ikiwa utataka kuandika chochote si jibu andika katika kijitabu hiki.
3. Ukisha chaguajibu lako ionyeshe katika KARATASIYAMAJIBU na wala sio katika kijitabu hiki cha maswali.

**JINSI YA KUTTIMIÁ KARATASI YA MAJIBU.**

4. Tumia penseli ya kawaida. 5. Hakikisha ya kwamba yafuatayo yameandikwa katika karatsi ya majibu.

**NAMBARIYAKO YA MTIHANI**

**JINA LAKO**

**JINA LA SHULE SHULE YAKO**

6. Kwa kuchora kistari katika visanduku vyenye namba zinazokuhusu, onyesha namba ako kamili ya mtihani yaani namba ya shule, na zile namba tatu za mtahiniwa) katika sehemu iliyotengwamwanzo wa karatasi ya majibu.
7. Usitie alama zozote nje ya visanduku,,
8. Iweke safi karatasi yako ya maibu.
9. Kwakila swali 1-30 umepewamajibu manne. Majibu'ha o yameonyeshwakwä herufi A, B,D naD. Ni jibu **MOJA** tu kati ya hayo manne ambalo ni sahihi. Chagua jibu hilisi
10. Kwenye karatasi ya majibu,jibu sahihi lionyeshe kwakuchora kistari katika kisanduku chenye herufi uliyochagua kuwa ndilojibu.
11. Chora kistari chako vizuri. Kistari chako kiwe cheusi na kisijitokeze nje ya kisanduku.
12. Kwakila swali, chora kistari katika kisanduku kimoja tu kati ya visanduku ulivyopewa.





Swali la 1 hadi 5. soma mazungumzo haya kisha ujibu maswali.



**Mbula:** Shikamoo mama?

**Mama:** Marahaba mwanangu. Umeamkaje?

**Mbula:** Vyema. Mbona leo umerauka mapema hivyo?

**Mama:** (Akimwonyesha kalenda) Umesahau leo ni Madaraka Dei?

**Mbula:** Nilidhani kuwa ni kesho Jumapili!

**Mama:** Ni muhimu kila mzalendo kushiriki katika sherehe za kitaifa.

**Mbula:** Asante kwa kunipasha. Sherehe za leo zinaongozwa na nani?

**Mama:** Zitaongozwa na kiongozi wa kaunti. Unafahamu jina la cheo chake?

**Mbula:** Naam, Gavana.

**Mama:** Vizuri sana mwanangu. Ungetaka kuandamana nami?

**Mbula:** Bila shaka. Sitabaki nyuma.

**Mama:** Jiandae haraka kwa vile chelewa chelewa utampata mwana si wako.

**Mbula:** Sawa mama (Anaondoka)

1. Kwa nini mama aliamka mapema siku hiyo?
  - A. Ni mazoea yake
  - B. Ili kujiandaa kuenda kanisani
  - C. Ili kujiandaa kuenda siku ya Madaraka
  - D. Ili kutayarisha kiamsha kinywa



2. Hatua ya mama na Mbula kuamua kuenda kuhudhuria sikukuu ya Madaraka inaonyesha kuwa wana
  - A. uzalengo
  - B. bidii
  - C. heshima
  - D. hekima.
3. Mazungumzo haya yalifanywa siku ya gani?
  - A. Jumanne
  - B. Ijumaa
  - C. Jumapili
  - D. Jumamosi
4. Chelewa chelewa utampata mwana si wako ni aina ya
  - A. tashbihi
  - B. Nahau
  - C. methali
  - D. tanakali
5. Kiongozi wa nchi huitwa
  - A. Gavana
  - B. Rais
  - C. Seneta
  - D. Chifu

**Swali la 6 - 12. soma shairi lifuatalo kisha ujibu maswali**

Ni makosa kudhulumu, binadamu duniani  
Ni hatia kuhukumu, kwa udhalimu kortini  
Ni vyema unapodumu, u mzuri duniani  
Tenda wema nenda zako, Jalali atakulipa

Maisha yawe magumu, usiwe mwongo moyoni,  
Jikuzeni humu humu, ukinge umaskini,  
Ni busara kuhudumu, kwa nia safi mtimani,  
Tenda mema nenda zako, Jalali atakulipa.

6. Shairi hili ni la aina gani?
  - A. Tathlitha
  - B. Tarbia
  - C. Tathnia
  - D. Takhmisa
7. Kila mshororo wa shairi hili una mizani ngapi?
  - A. 16
  - B. 8
  - C. 32
  - D. 64

8. Ujumbe wa shairi hili ni kuhusu
  - A. kuwa na bidii pekee
  - B. kuwa mnafikiki
  - C. kuwa na utu
  - D. kuwa na heshima pekee
9. Neno jingine lenye maana sawa na Jalali ni
  - A. rafiki
  - B. ndugu
  - C. jirani
  - D. Mungu
10. Mshororo wa pili katika kila ubeti huitwa
  - A. mwanzo
  - B. mloto
  - C. mleo
  - D. Kibwagizo
11. Shairi hili lina beti ngapi?
  - A. Mbili
  - B. Tatu
  - C. Nne
  - D. Moja
12. Andiku ukwipi wu nishur uro wu pili ubeti wa kwanza
  - A. Ni vyema unapodumu
  - B. Jikazeni humu humu
  - C. Ni hatia kuhukumu
  - D. Kwa udhalimu kortini



**Swali la 13 hadi 15. Soma kifungu hiki kisha ujibu maswali**



Kimeu, Ngina, Mwende na Misha walimtembelea mwulimu wuo majilisini. Mwalimu Mumo alikuwa na kazi nyingi ya kuandaa somo. Alikuwa akichora chati kuhusu misimu tofauti. Wanafunzi hao walimsaidia mwalimu wao katika shughuli hiyo. Kimeu Misha na Nginn walijaza kalamu rangi. Kimeu na Mwende walisaidia kuchora chati. Wote isipokuwa Ngina walisaidia kupaka rangi. Kimeu alisaidia kusafisha eneo la kufanyia kazi nao wasichana wute wakasaidia kuanika chati ukutani.

13. Mwalimu alikuwa akifanyia kazi wapi?

- A. Darasani  
B. Majilisini  
C. Uwanjani  
D. Ofisini
14. Ni mwanafunzi yupi hakuanika chati ukutani?  
A. Ngina  
B. Mwende  
C. Misha  
D. Kimeu
15. Mwende alifanya kazi ngapi kwa jumla?  
A. Tatu  
B. Mbili  
C. Nne  
D. Moja

**Swali la 16 hadi 20. soma fungu kate na ulaze natasi kwa ibu sahihi**

Wakazi wa kijiji \_\_\_\_\_ 16 \_\_\_\_\_ wana uhusiano \_\_\_\_\_ 17 \_\_\_\_\_.  
Wana bidii kama \_\_\_\_\_ 18 \_\_\_\_\_ kazini. Wamepanda miti \_\_\_\_\_ 19 \_\_\_\_\_  
\_\_\_\_\_ ili kuyatunza mazingira. Katika msimu wa \_\_\_\_\_ 20 \_\_\_\_\_ wao huwa  
hawahisi jua kali sana kama ilivyokuwa zamani kabla ya kupanda miti hiyo.

16.  
A. wetu  
B. yetu  
C. letu  
D. chetu
17.  
A. mzuri  
B. zuri  
C. wazuri  
D. uzuri
18.  
A. kunguru  
B. kondoo  
C. mchwa  
D. njiwa
19.  
A. mingi  
B. mengi  
C. wingi  
D. nyingi
20.  
A. masika  
B. kiangazi

- C. vuli
- D. choo

**Chagua jibu sahihi kujibu maswali**

21. Kinyume cha neno 'tamu' ni
- A. chungu
  - B. kali
  - C. mbaya
  - D. chachu
22. Mtu anayetunga mashairi huitwa
- A. manju
  - B. malenya
  - C. mwandishi
  - D. mtunzi
23. Chagua neno lililo katika ngeli ya YA-YA.
- A. magonjwa
  - B. mazingira
  - C. matunda
  - D. ukuta
24. Chagua jibu linaloonyesha wingi wa 'uso wangu umeoshwa'
- A. Nyuso zangu zimeoshwa
  - B. Nyuso zao zimeoshwa
  - C. Nyuso zetu zimeoshwa
  - D. Uso yetu umeoshwa
25. Chagua jibu lenye visawe
- A. Furaha - huzuni
  - B. Hongo - rushwa
  - C. Mshindi - mshinde
  - D. Mtu - jibu
26. Chagua sentensi iliyoakifishwa vizuri
- A. Ala nimeona jitu kubwa sana.
  - B. Mama: alinunua embe tomoko na chungwa
  - C. Je, Leo ni siku gani
  - D. Hoyee! Tumeshinda mbio hizo.
27. Neno 'mtoto katika ukubwa ni
- A. jitoto
  - B. kitoto
  - C. toto
  - D. litoto
28. Chagua methali inayoonyehsa ushirikiano
- A. Mtaka cha mvunguni sharti ainame
  - B. Jifya moja haliinjiki chungu
  - C. Mchagua jembe si mkulima

- D. Mtoto umleavyo ndivyo akuavyo
29. Ni pambo lipi huvaliwa shingoni?
- A. Mkufu
  - B. Pete
  - C. Herini
  - D. Kipini
30. Tumia kivumishi kirejeshi amba-kukamilisha sentensi:  
Mpira \_\_\_\_\_ ulinunuliwa umepasuka
- A. ambao
  - B. ambayo
  - C. ambacho
  - D. ambalo





KENYA PRIMARY SCHOOL EDUCATION ASSESMENT

**KPSEA 2023 EXAMINER SUPER PREDICTION**

**KISWAHILI INSHA**

**MUDA: dakik 40**

**KUANDIKA INSHA**

**Andika insha kuhusu:**

Andikia mwalimu mkuu wa shule yako barua rasmi ukiomba ruhusa kujiunga na kikundi cha wanaskauti shuleni:



A series of horizontal dashed lines provided for writing the response.



A series of horizontal dashed lines for writing, spanning the width of the page.





Lined area for marking schemes with horizontal dashed lines.





KENYA PRIMARY SCHOOL EDUCATION ASSESMENT

**KPSEA 2023 EXAMINER SUPER PREDICTION**

## MATHEMATICS

**Time: 2 hours**

**READ THESE INSTRUCTIONS CAREFULLY.**

1. You have been given this question booklet and a separate answer sheet. The question bookier contains 30 questions.
2. Do any necessary rough work in this booklet.
3. When you have chosen your answer, mark it on the **ANSWER SHET**, not in the question paper.

**HOW TO USE THE ANSWER SHEET.**

4. Use an ordinary pencil only.
5. Make sure that you have written on the answer sheet.

**YOUR INDEX NUMBER**

**YOUR NAME**

**NAME OF YOUR SCHOOL**

6. By drawing a **dark line** inside the correct numbered boxes mark your full index number (i.e. school code Number and the three -figure candidate's Number) in the grid near the top of the answer sheet.
7. Do not make any marks outside the boxes.
8. Keep your answer sheet as clean as possible and Do not fold it."
9. For each question 1-30 four answers are given. The answers are lettered A, B, C, D. In each case Only One of the four answers is correct. Chose the correct answer.
10. On the answer sheet show the correct answer by drawing a dark line inside the box in which the letter you have chosen is written.
11. Your dark line Must be within the box. Make your line as dark as possible.
12. For each question **Only One box** is to be marked in each set of four boxes.

*Candidates should check the question papers to ensure that all questions are printed.*



1. In an Agricultural Exhibition, there were 324 867 participants. What is the place value of digit 2 in this number?
  - A. Hundreds.
  - B. Tens of thousands.
  - C. Thousands.
  - D. Hundreds of thousands.
2. In a wedding ceremony, Grade six learners carried 2 342 chairs. They later went for 1 009 more chairs. Out of these, 1 810 were used. How many were not used?
  - A. 1 641
  - B. 1 541
  - C. 1 531
  - D. 1 631
3. Work out the LCM of 8 and 12.
  - A. 2
  - B. 12
  - C. 32
  - D. 24
4. Round off 43 866 to the nearest hundred.
  - A. 43 900
  - B. 43 860
  - C. 44 000
  - D. 43 800
5. A sub county had a population of eighty nine thousand four hundred and sixty five people. What is this number in symbols?
  - A. 89 645
  - B. 98 465
  - C. 89 465
  - D. 98 645
6. Calculate the length of one side of a square whose area is  $289\text{cm}^2$ 
  - A. 27cm
  - B. 14cm
  - C. 17cm
  - D. 16cm
7. Petrol in a **40** litres **800**ml container was emptied to fill **8** equal containers. What was the capacity of each container?
  - A. 50 litres 10ml
  - B. 5 litres 100ml
  - C. 5 litres 10ml
  - D. 50 litres 100mi
8. Petrol in a **40** litres **800**ml container was emptied to fill **8** equal containers. What was the capacity of each container?



- A. 50 litres 10ml  
B. 5 litres 100ml  
C. 5 litres 10ml  
D. 50 litres 100ml
9. A. boy stood in the field facing south. How should the boy turn in order to face east?  
Make a  
A. quarter turn to his left.  
B. quarter turn to his right.  
C. full turn to his left.  
D. half turn to his right.
10. In the first attempt, an athlete finished a marathon race in 3. 45 hours. In the second attempt, he reduced the time by 1.09 hours. What time did he take in the second attempt?  
A. 1. 36 hours  
B. 2. 36 hours  
C. 4. 54 hours  
D. 3.54 hourS
11. Fractions,  $\frac{3}{10}$ ,  $\frac{7}{10}$ ,  $\frac{5}{10}$  and  $\frac{9}{10}$  were to be arranged from the smallest to the largest which of the following would be the correct arrangement?  
A.  $\frac{9}{10}$ ,  $\frac{7}{10}$ ,  $\frac{5}{10}$ ,  $\frac{3}{10}$   
B.  $\frac{3}{10}$ ,  $\frac{5}{10}$ ,  $\frac{7}{10}$ ,  $\frac{9}{10}$ ,  
C.  $\frac{9}{10}$ ,  $\frac{5}{10}$ ,  $\frac{7}{10}$ ,  $\frac{3}{10}$   
D.  $\frac{3}{10}$ ,  $\frac{7}{10}$ ,  $\frac{5}{10}$ ,  $\frac{9}{10}$
12. Work out:  
361 x 18  
A. 6 488  
B. 6 398  
C. 5 488  
D. 6 498
13. One hundred and eight seedlings were to be shared equally among twelve farmers. How many seedlings would each farmer get?  
A. 19  
B. 1 111  
C. 1 296  
D. 9.
14. Out of 12 864 chickens in a school, 6 028 were cocks and the rest were hens. How many hens were there?  
A. 18 892  
B. 18 792  
C. 6 836  
D. 6736
15. The distance between town X and town Y is 2 700m. How many kilometres and metres are between the two towns?  
A. 2km 700m  
B. 27km 00m



- C. 2km 700m  
D. 270km 00m
16. Mwendu has a square piece of cloth whose side is **18cm**. What is the area of the piece of cloth?  
A.  $36\text{cm}^2$   
B.  $360\text{cm}^2$   
C.  $324\text{cm}^2$   
D.  $334\text{cm}^2$
17. Kilo carried **29kg** of maize while Kaloki carried **33kg** of sorghum. What was the total mass carried by the two?  
A. 957kg  
B. 602kg  
C. 952kg  
D. 62kg
18. How many  $\frac{1}{4}\text{kg}$  packets can be obtained from **9kg**?  
A. 36  
B. 18  
C. 4  
D. 24
19. A tuktuk covered **16km 61m** while a motorbike covered **18km 95m**. What was the total distance covered?  
A. 34km 156m  
B. 35km 56m  
C. 34km 56m  
D. 35km 156m
20. Work out:
- | hrs   | mins |
|-------|------|
| 5     | 16   |
| x     | 7    |
| <hr/> |      |
- A. 35hrs 52mins  
B. 36hrs 112mins  
C. 35hrs 112mins  
D. 36hrs 52mins
21. A boy stood in the field facing south. How should the boy turn in order to face east?  
Make a  
A. quarter turn to his left.  
B. quarter turn to his right.  
C. full turn to his left.  
D. half turn to his right.
22. Which of the following statements does **not** describe a rectangle? It has



- A. four equal sides.  
B. four equal angles.  
C. two pairs of equal sides.  
D. each of its angles measuring 90 Degrees
23. Mariarosa received  $x$  beads after their teacher divided **125** beads equally among **5** of them. How many beads did Mariarose get?
- A. 25  
B. 35  
C. 15  
D. 45
22. Which of the following statements does **not** describe a rectangle? It has
- A. four equal sides.  
B. four equal angles.  
C. two pairs of equal sides.  
D. each of its angles measuring  $90^\circ$
23. A father bought  $\ell$  hens. A mother bought **16** more hens. In total, **25** hens were bought. How many hens did the father buy?
- A. 19  
B. 9  
C. 41  
D. 8
24. Mariarosa received  $x$  beads after their teacher divided **125** beads equally among **5** of them. How many beads did Mariarose get?
- A. 25  
B. 35  
C. 15  
D. 45
25. A carpenter made **32** cupboards, **18** tables and  $y$  stools. If the total number of furniture was **63**, how many stools were made?
- A. 23  
B. 13  
C. 50  
D. 53

**The table below shows the sale of milk in Mwanda's farm for a period of five days. Use it to answer the following questions.**

Day	Amount sold in litres
-----	-----------------------



<b>Monday</b>	146
<b>Tuesday</b>	230
<b>Wednesday</b>	180
<b>Thursday</b>	290
<b>Friday</b>	410

28. How many less litres of milk were on Wednesday than on Friday?
- A. 590ℓ
  - B. 130ℓ
  - C. 230ℓ
  - D. 490ℓ
29. Which two consecutive days recorded the **lowest** sale of milk?
- A. Monday and Tuesday.
  - B. Tuesday and Wednesday.
  - C. Wednesday and Thursday.
  - D. Thursday and Friday.
30. How much milk was sold on Monday, Tuesday and Thursday?
- A. 1 256ℓ
  - B. 1 246ℓ
  - C. 656ℓ
  - D. 666ℓ







KENYA PRIMARY SCHOOL EDUCATION ASSESMENT  
**KPSEA 2023 EXAMINER SUPER PREDICTION**

**INTEGRATED SCIENCE**

**Time: 1 hour 40 Minutes**

**READ THESE INSTRUCTIONS CAREFULLY.**

1. You have been given this question booklet and a separate answer sheet. The question bookier contains 50 questions.
2. Do any necessary rough work in this booklet.
3. When you have chosen your answer, mark it on the **ANSWER SHET**, not in the question paper.

**HOW TO USE THE ANSWER SHEET.**

4. Use an ordinary pencil only.
5. Make sure that you have written on the answer sheet.

**YOUR INDEX NUMBER**

**YOUR NAME**

**NAME OF YOUR SCHOOL**

6. By drawing a **dark line** inside the correct numbered boxes mark your full index number (i.e. school code Number and the three -figure candidate's Number) in the grid near the top of the answer sheet.
7. Do not make any marks outside the boxes.
8. Keep your answer sheet as clean as possible and Do not fold it."
9. For each question 1-30 four answers are given. The answers are lettered A, B, C, D. In each case Only One of the four answers is correct. Chose the correct answer.
10. On the answer sheet show the correct answer by drawing a dark line inside the box in which the letter you have chosen is written.
11. Your dark line Must be within the box. Make your line as dark as possible.
12. For each question **Only One box** is to be marked in each set of four boxes.

*Candidates should check the question papers to ensure that all questions are printed.*

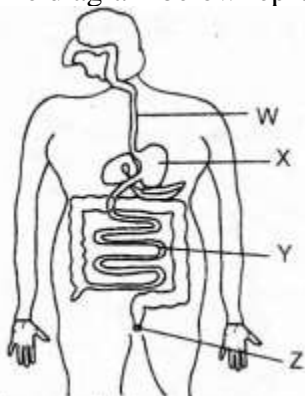


**SECTION A:****SCIENCE & TECHNOLOGY. (15mks)**

1. Which of the following types of teeth is **correctly** matched with its function?

	Teeth	Function
A.	Molar	Cutting food
B.	Incisor	Biting food
C.	Canine	Chewing food
D.	Premolar	Tearing food

2. The diagram below represents the human digestive system



Talam eats bread, in which part will the bread be absorbed into the body?

- A. W  
B. Z  
C. Y  
D. X
3. Grade four learners went for nature study to study the characteristics of plants growing around their school. They should take the following safety precautions **except**
- A. wash their hands after handling plants  
B. wear gloves on their hands  
C. wear dust coats  
D. walk bare footed
4. The teacher asked four learners to bring each an invertebrate for Science lesson.
- Andori** - brought caterpillar  
**Pauline** - brought lizard  
**Zeddy** - brought ladybird  
**Tina** - brought milipede  
Who did not bring an invertebrate?

- A. Zeddy
- B. Pauline
- C. Andori
- D. Tina

5. Grade four learners brought the following materials for Science lesson.

- i. plastic bottle top
- ii. nail
- iii. metal bottle top
- iv. razor blade
- v. dry pieces of stick

The material that floated in water but can be made to sink by crushing is

- A. razor blade
- B. plastic bottle top
- C. metal bottle top
- D. nail

Roba went to a petrol station and noticed the coded language below



6. The code warned people that there is

- A. no smoking
- B. no driving
- C. no parking
- D. no U-turn

7. A river near a school has been polluted. What would happen to the living things living in the water?

- A. They will have good health
- B. They will enjoy living in the river
- C. They would die
- D. They would flourish

8. A grade five learner had the following signs and symptoms of a certain water borne disease

- i. rashes on the skin

- ii. *headache*
- iii. *fever*  
The disease is likely to be

- A. cholera
- B. dysentery
- C. bilharzia
- D. typhoid

9. Caleb came across a material which was slippery when touched and have bitter taste. The material is **unlikely** to be during Science nature walk.

- A. table salt
- B. orange juice
- C. soap solution
- D. baking soda

10. Which of the phases of the moon appears on the 14<sup>th</sup> day after the new moon?

- A. Gibbous moon
- B. Quarter moon
- C. Crescent moon
- D. Full moon

11. Tarar cooled a certain gas and it changed directly into solid. The process the gas changed to solid is called

- A. deposition
- B. freezing
- C. sublimation
- D. condensation

12. Which of the following sounds produced is a soft sound?

- A. Fire alarm
- B. Whispering to your friend
- C. Beating drum hard
- D. Hitting a metal with a hammer



13. Below are pictures of a certain component of blood



What is the function of the component of blood in the body?

- A. Kill germs
- B. Clotting of blood
- C. Transport oxygen
- D. Transport food

14. Mary drew a certain invertebrate she collected during Science nature walk



Which one of the following is not an example of the invertebrate drawn?

- A. Wasp
- B. Tick
- C. Scorpion
- D. Spider

15. The two main functions of the fruits are

- A. protecting seeds and supporting plant
- B. making food and storage of food
- C. storing food and breathing
- D. protecting seeds and storing food

**SECTION B:****HOME SCIENCE (10mks)**

16. Grade five learners discussed about how they should care for cleaning materials at home and this what they said;

**Wandera:** Store brushes with bristles facing down

**Okoth:** Keep plastic basins in a shade


**Chacha:** Fold floor clothes and store them on a shelf


**Ahmed:** Heap all the dusters in one corner of the house


**Munene:** Clean all the cleaning materials before storing them


Who among the learners did not give the correct information?

- A. Chacha
  - B. Ahmed
  - C. Munene
  - D. Okoth
17. Choose a group that consists of energy giving foods only

A. 

B. 

C. 

D. 

18. The process of planning how to spend money that you have is known as

- A. shopping list
  - B. advertisement
  - C. planning
  - D. budgeting
19. The following are changes that take place during adolescence:
- A. Production of sex cells.
  - B. Broadening of hips.
  - C. Deepening of voice.
  - D. Increase in weight and height

- E. Menstruation.  
Which of the changes above take place in both adolescent boys and girls?
- A. ii, v
  - B. i, iv
  - C. iii, iv
  - D. ii, iv
20. Vivian is an adolescent girl, recently she started menstruating. She should observe all the following **except**
- A. eat little food to avoid adding weight
  - B. eat foods rich in iron
  - C. drink safe water regularly
  - D. eat a balanced diet
21. During the December holidays, Moses visited his grandparents. He forgot to pack his toothbrush. What can he use to improvise a toothbrush?
- A. Soft grass
  - B. A twig from an herbal plant
  - C. A piece of firewood
  - D. Charcoal
22. Makori and his mother are discussing about safety precautions to observe when laundering different clothes at home. Which one is **false**?
- A. Before you start washing check if there are any sharp objects in the pockets
  - B. Use salt for clothes whose dyes run
  - C. Iron clothes on the wrong side
  - D. Wash your underwear together with other clothes
23. The best cloth to wear when going to sleep is
- A. casual wear
  - B. official wear
  - C. pajama
  - D. party dress
24. Cheptum's family have guests tomorrow. They have decided to serve maandazi as snacks during ten o'clock tea. The maandazi will be cooked using \_\_\_\_\_ method.
- A. dry fat frying
  - B. shallow frying
  - C. deep frying
  - D. stewing
25. Why should we close windows when sweeping a house?
- A. To keep away insects
  - B. To prevent wind from blowing back the dust





- C. To prevent dirt from spreading
- D. To prevent bad smell

**SECTION C:****AGRICULTURE (10mks)**

26. During an Agriculture lesson tour to the neighbouring farm, grade 6 learners observed a type of soil erosion with the following signs;

- i. *roots of plants are exposed*
- ii. *stones below the top soil exposed*
- iii. *eroded soil and crop remains are deposited at the lower areas of the slope*

The type of soil erosion is likely to be

- A. gully erosion
  - B. splash erosion.
  - C. sheet erosion
  - D. rill erosion
27. Theophilo, a farmer in a dry area was advised to use sunken beds. This is because sunken beds

- A. produce more yield
- B. conserve most moisture
- C. easy to make
- D. contains a lot of nutrients



28. Anderi constructed an electric fence around her farm. Which of the following wild animals cannot be deterred by the fence?

- A. Weaver birds
- B. Gazelles
- C. Elephants
- D. Wildbeest

The removal and carrying away of soil by rain or wind is called:-

- A. soil conservation
- B. soil erosion
- C. sedimentation
- D. soil formation

29. A learner searched for fruits which are harvested when still green on the outside part. The fruits are



- A. oranges
- B. passion fruits
- C. pawpaws
- D. watermelons

30. We get manure from all the following **except**:-

- A. chicken
- B. cows
- C. sheep
- D. dogs

Which one below is **not** a neatening stitch?

- A. Blanket stitches
- B. Overcasting stitches
- C. hemming stitches
- D. chain stitches

Bonaya has a pumpkin farm. The following care and management practices can be carried out in the farm **except**

- A. weeding
- B. watering
- C. mulching
- D. top dressing

The following are advantages of using a shopping list. Which one is **not**?

- A. It saves time
- B. It reduces waste
- C. It helps us to buy what we need most
- D. It enables us buy a lot of items

Which of the following small wild animals destroys crops that have been harvested and stored?

- A. Moles
- B. Squirrels
- C. Monkeys

D. Rats

**SECTION D:**

**PHYSICAL & HEALTH EDUCATION (15mks)**

Name one quality of a good qualified player:

- A. not flexible
- B. slow in running
- C. weak body posture
- D. ability to drop the ball

The following are points to remember when performing one-handed catch in frisbee. Which one is **not**?

- A. Aim to catch the disc with one hand
- B. Catch the disc between your thumb and fingers
- C. Stand with your feet together
- D. Watch and time the oncoming disc carefully as it flies towards you

What is the first step to follow when improvising a soccer ball?

- A. Fold the papers into a ball
- B. Tie the bag
- C. Wrap the papers in a bag
- D. Put together the required materials

All the following are outfield players in softball except the

- A. right fielder.
- B. left fielder.
- C. first baseman.
- D. center fielder.

The third step when performing long jump technique is

- A. landing
- B. flight
- C. take-off
- D. approach

An area Member of Parliament organised a soccer tournament in his constituency. The best team was awarded a trophy and a token. The best team must have won by scoring

- A. runs
- B. try
- C. goals
- D. shots

Three of the following equipment are used in rugby except

- A. a tag belt.
- B. training cones.
- C. a rugby ball
- D. discs.

The only player in netball that is allowed to play in all the three sections of a netball field is

- A. wing attack
- B. goal shooter
- C. center
- D. wing defender

Learners are encouraged to participate in running activities. Which one is **not** one of the reasons?

- A. Makes bones stronger
- B. Leads to breathing problems
- C. Helps relax the body
- D. Improves mental health

During an outdoor activity learners should ensure they use the correct method of food preservation. This is because wrong preservation of food may lead to

- A. food contamination
- B. good health
- C. saving of money
- D. increased flavour



Godi developed a sprain injury while playing. The first aider used "RICE" procedure to manage the injury. Letter 'E' in the RICE means

- A. End
- B. Extend
- C. Elevate
- D. Engage

A good pass in handball should have the following elements **except**

- A. Should be accurate
- B. should be fast
- C. cannot be intercepted by opponent
- D. should give receiver hard time to catch

Which one of the following is not a fault in volleyball game?

- A. Hitting the ball twice in a row
- B. Serving the ball over the net
- C. Stepping on or over the line on a serve
- D. Reaching under the net and crossing the line

A game of soccer is about to start. How many players in total should be in the field of play during the start?

- A. 22
- B. 11
- C. 7
- D. 6

Nora and Nelly want to practice partner activity in rope skipping. They used the techniques below **except**

- A. side by side technique
- B. back to back technique
- C. face to face technique
- D. wounded duck technique



**KENYA PRIMARY SCHOOL EDUCATION ASSESMENT**  
**KPSEA 2023 EXAMINER SUPER PREDICTION**  
**SOCIAL STUDIES, CREATIVE ARTS & RELIGIOUS EDUCATION**

**Time: 2 hours**

**READ THESE INSTRUCTIONS CAREFULLY.**

1. You have been given this question booklet and a separate answer sheet. The question bookier contains 30 questions.
2. Do any necessary rough work in this booklet.
3. When you have chosen your answer, mark it on the **ANSWER SHET**, not in the question paper.

**HOW TO USE THE ANSWER SHEET.**

4. Use an ordinary pencil only.
5. Make sure that you have written on the answer sheet.

**YOUR INDEX NUMBER**

**YOUR NAME**

**NAME OF YOUR SCHOOL**


6. By drawing a **dark line** inside the correct numbered boxes mark your full index number (i.e. school code Number and the three -figure candidate's Number) in the grid near the top of the answer sheet.
7. Do not make any marks outside the boxes.
8. Keep your answer sheet as clean as possible and Do not fold it."
9. For each question 1-30 four answers are given. The answers are lettered A, B, C, D. In each case Only One of the four answers is correct. Chose the correct answer.
10. On the answer sheet show the correct answer by drawing a dark line inside the box in which the letter you have chosen is written.
11. Your dark line Must be within the box. Make your line as dark as possible.
12. For each question **Only One box** is to be marked in each set of four boxes.

*Candidates should check the question papers to ensure that all questions are printed.*



**ART AND CRAFT**

1. The picture below shows a drawing done by a grade 6 learner. How was the rough texture created?



- A. By stippling the dots far from each other  
B. By stippling the dots close to each other  
C. By making the dots darker  
D. By making the dots lighter
2. What is the use of a mould while making wax crayon?  
A. It is used to hold the slab  
B. It is used to melt the wax  
C. It is used to regulate heat  
D. It is used to shape the wax crayon
3. Joram is creating light tones by mixing different colours with a white colour. What is he doing?  
A. Tinting  
B. Shading  
C. Painting  
D. Smudging
4. Salome pasted pictures cut from old magazines as shown below. Which picture making technique did she use?



- A. Painting  
B. Collage  
C. Mosaic  
D. Montage



5. The following are clay decorating techniques that require use of a tool to make marks on the pot. Which one is not?
  - A. Embedding
  - B. Inlaying
  - C. Scratching
  - D. Stamping
6. The type of weaving where two sets of wefs are twined around the warp is known as
  - A. plain weave
  - B. twill weave
  - C. twine weave
  - D. coil weave
7. The following are painting surfaces that can be when creating an image using paint. Which used one is not?
  - A. Canvas
  - B. Spatula
  - C. Wall
  - D. Stone
8. A grade six learner was drawing her friend from observation. What paper layout was appropriate for the drawing?
  - A. Portrait format
  - B. Landscape format
  - C. Overlapping format
  - D. Balance format
9. Give the meaning of a secondary colour.
  - A. It is a colour that can be obtained by mixing two primary colours
  - B. It is a pure colour
  - C. It is a colour obtained by mixing two primary colours in equal proportions
  - D. It is a colour obtained by mixing many primary colours
10. What is the best way that can be used to attach beads for decoration on a pencil pouch?
  - A. By using thongs
  - B. By stitching the beads using a thread
  - C. By sticking using modelling clay
  - D. By sticking using pins

## **MUSIC**



11. Which of the following is the correct name given the tone shown below and the French rhythm. given to it?



- A. Semibreve-Taa aa aa
  - B. Minim-Taaaa
  - C. Semibreve - Taaa
  - D. Minim-Taaaaaa
12. Which of the following countries does not officially sing the East African anthem?
- A. Uganda
  - B. Tanzania
  - C. Kenya
  - D. Somalia
13. A melodic percussion is an instrument that
- A. produces sound by using a string
  - B. is played by hitting and can produce a tune
  - C. is played by blowing and is melodious
  - D. can produce a melody when blown passionately
14. Which of these lines of the East African anthem asks members of the East African Community to protect it?
- A. Jumuiya yetu sote tuilinde
  - B. Umoja wetu ni nguzo yetu
  - C. Tuwezeshe kuishi kwa amani
  - D. Tufanye kazi sote kwa makini
15. A grade 6 learner decided to compose a song that would be used to calm a baby down and get them to sleep. What do you think they composed?
- A. A story song
  - B. A lullaby song
  - C. A patriotic song
  - D. A sacred song



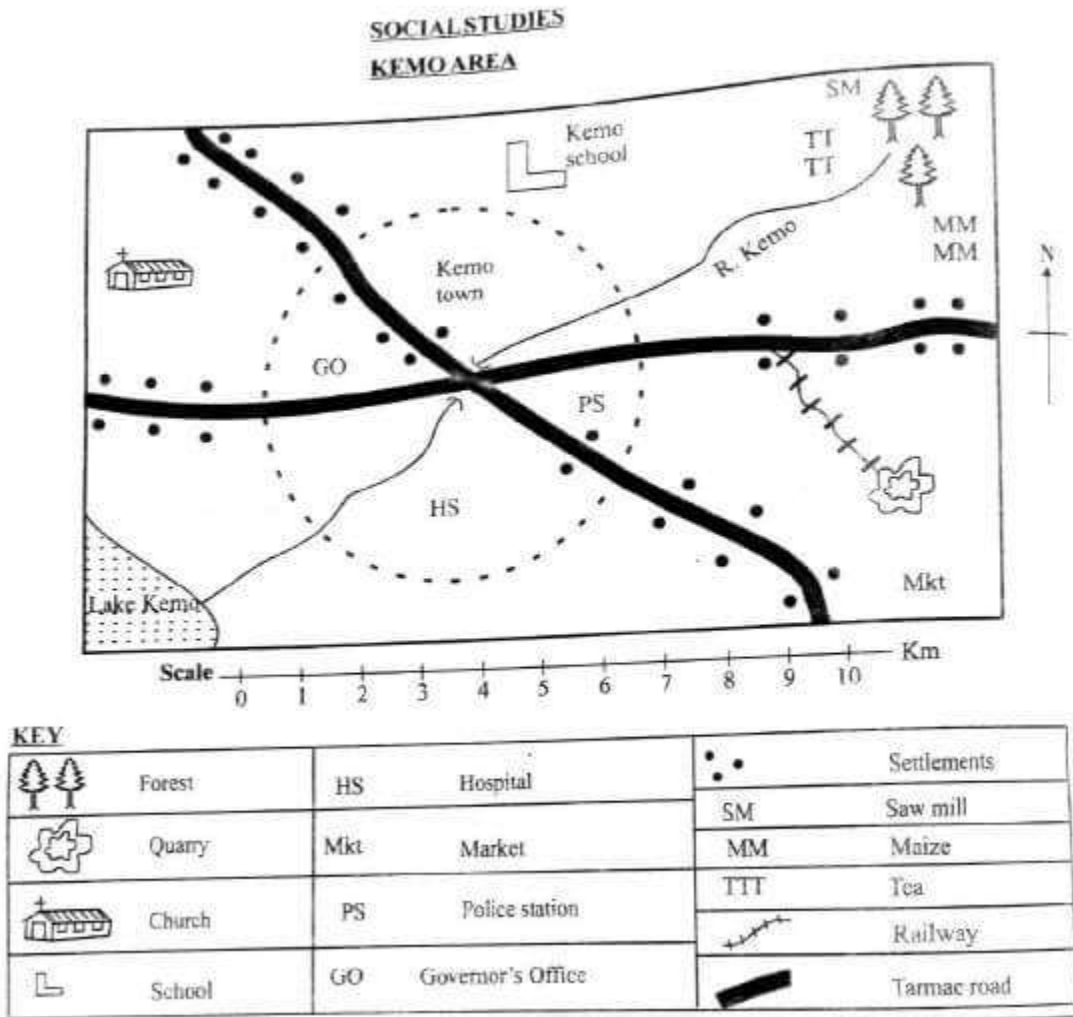
16. A learner played the note shown below on his descant recorder. What note was played?



- A. G
  - B. D
  - C. F
  - D. B
17. Which sound follows "doh" on the sol-fa ladder as you ascend?
- A. soh
  - B. fah
  - C. mih
  - D. reh
18. During the performance of a folk song, participants commonly wear a type of clothing called
- A. props
  - B. costumes
  - C. accompaniments
  - D. shoes
19. A person doing a performance alone on a stage is known as a
- A. solo performer
  - B. trio performer
  - C. quartet performer
  - D. duct performer
20. The following should be done by performers to ensure there is a good voice blend. Which one is not?
- A. Singing at the same time
  - B. Singing confidently
  - C. Starting and stopping at different times when singing in a group
  - D. Singing the same pitch with others

**Study the map of Kemo area and answer questions 21-25.**





21. Children from Kemo school travelled to lake Kemo. Which direction was the lake from the school?
- South West
  - North West
  - South East
  - North East
22. What evidence shows that Kemo area has enough security?
- Presence of school
  - Presence of Governor's office
  - Presence of police station
  - Presence of hospital
23. The main means of transport in Kemo area is
- road

- B. railway  
C. air  
D. water
24. Three of the following economic activities are practised in Kemo area. Which one is not?  
A. Lumbering  
B. Farming  
C. Mining  
D. Fishing
25. Kemo area is likely to be a  
A. County  
B. Sub-county  
C. Location  
D. Ward
26. Which one of the following is an historical built environment?  
A. Fort Jesus  
B. State house  
C. Thika Highway  
D. Your school
27. Identify the type of climate described below
- High temperatures during the day
  - Cloudless skies
  - Experiences rainfall of less than 250mm per year
- The climate described above is
- Equatorial
  - Mountain climate
  - Desert climate
  - Semi-desert climate
28. Grade six teacher asked learners to name the plain Nilotes in Eastern Africa. Who among them gave the correct answer?
- Karamojong, Maasai, Iteso
  - Nandi, Keiyo, Tugen
  - Oromo, Somali, Borana
  - Abaluhya, Abagusii, Abakuria
29. The largest country in Eastern Africa is



- A. South Sudan
- B. Ethiopia
- C. Sudan
- D. Somalia

30. Which one of the following is not a way in which the school collaborates with the community?

- A. The community donating books to the school
- B. The community holding functions in the school
- C. The community donating land to the school
- D. Learners disrespecting the community leaders

31. The following are members of the County Executive Committee. Who is not?

- A. Governor
- B. Speaker of the County assembly
- C. Deputy governor
- D. Members appointed by the governor

32. Which country borders Kenya to the North West?

- A. Ethiopia
- B. Uganda
- C. South Sudan
- D. Tanzania

33. Which one of the following is NOT an element of weather?

- A. Temperature
- B. Wind
- C. Rain gauge
- D. Sunshine

34. Grade 6 learners were asked to identify capital cities of the countries of Eastern Africa. Who did not correctly identify?

- A. Mueni Somalia - Mogadishu
- B. Hamisi Tanzania - Dar es Salaam



- C. Mogaka: Ethiopia-Addis Ababa
- D. Nyaga: Uganda-Kampala

35. Grade 6 learners of Miwa primary school were asked to name people who are elected during a general election in Kenya. Which one of the following answers they gave is not correct?

- E. Governor
- F. President
- G. Senator
- H. County Commissioner

**SECTION A:**

**CHRISTIAN RELIGIOUS EDUCATION**

36. According to Genesis stories of creation, what was created on the fifth day?
- A. Vegetation
  - B. Sun, moon and stars
  - C. Land and animals
  - D. Sea creatures and birds
37. Why did the mother of Moses hide him in the river?
- A. He was sick
  - B. It was the tradition of the Jews
  - C. Pharaoh had ordered the killing of all male children
  - D. She did not want him
38. Prophet Elijah challenged the prophets of Baal in order to
- A. show how powerful he was
  - B. prove that Yahweh was the true God
  - C. scare Jazebel
  - D. end drought
39. Grade six learners were asked to identify talents that God has given to different people. Which one is not correct?
- A. Singing
  - B. Dancing
  - C. Drawing
  - D. Conning
40. The commandment that teaches Christians to have respect for life is
- A. Do not commit murder



- B. Do not commit adultery  
C. Do not steal  
D. Do not covet
41. Which one of the following is not a fruit of the Holy spirit?  
A. Wisdom  
B. Humility  
C. Love  
D. Faithfulness
42. During a C.R.E lesson in grade six the teacher asked the learners to name books of the Old Testament in the Bible. Which one is not?  
A. Genesis  
B. Exodus  
C. Numbers  
D. Revelation
43. Which one of the following miracles was performed by prophet Elisha?  
A. Calming the storm  
B. Calling for fire from heaven  
C. Raising the son of the woman from Shunem  
D. Changing water into wine
44. Below are characteristics of a type of marriage.  
i. Conducted in the office of the registrar of marriages  
ii. Conducted by a government's officer or magistrate  
iii. A marriage certificate is issued  
This type of marriage is called  
A. civil marriage  
B. Christian marriage  
C. customary marriage  
D. Hindu marriage
45. Which one of the following is not the right way of spending leisure?  
A. Playing football  
B. Gossiping  
C. Visiting the sick  
D. Listening to gospel songs
46. Which rite of passage marked a change from childhood to adulthood?  
A. Initiation





- B. Birth
- C. Death
- D. Marriage

47. Dennis a grade six boy found a mobile phone in the school field. As a Christian what action should he take?

- A. Keep it for his own use
- B. Take it to the police
- C. Give it to the teacher
- D. Take it to his parents

48. The first of the four disciples of Jesus were called while

- A. preaching
- B. fishing
- C. trading
- D. collecting tax

49. Boys and girls undergo a lot of changes during adolescence. Which one is found only in girls?

- A. Experiencing menstruation
- B. Attraction to opposite sex
- C. Change of moods
- D. Increase in body size

50. "Happy are those who mourn, for they shall be..."

- A. humbled
- B. comforted
- C. called God's children
- D. see God

**SECTION A:**  
**ISLAMIC RELIGIOUS EDUCATION**

36. Grade 6 learners were asked to name the prophet of Allah who was given the Taurat. Who among them was right?



- A. Juma - Ibrahim  
B. Ruqaya - Muhammad  
C. Zahida- Daud  
D. Zuwainah-Musa
37. Which one of the following is an example of Najasaatul Mutawasita?  
A. Urine of a baby boy below 2 years  
B. Urine of a pig  
C. Pus  
D. Vomit of a dog
38. Marjan was seen wiping his face and hands with sand in preparation for swalat. This form of cleaning is known as  
A. tayammum  
B. wudhu  
C. najasaat  
D. twahara
39. Which pillar of Islam encourages generosity?  
A. Saum  
B. Swalat  
C. Shahada  
D. Zakat
40. Which swalat has three rakaat?  
A. Asr  
B. Maghrib
41. A sunnal performed after a fardh prayer is known as  
A. Baadiyah  
B. Qabliyah  
C. Witr  
D. Tarawch
42. If a Muslim performs all the five daily prayers in a day, what will be the total number of rakaat?  
A. 19  
B. 25  
C. 17  
D. 12
43. A person who leads prayers in the mosque is known as  
A. Muadhin  
B. Imam  
C. Sheikh

- D. Kadhi
44. According to the hadith of the prophet, a Muslim should speak the truth even though it is
- A. good
  - B. better
  - C. bitter
  - D. sweet
45. The best place to perform swalat is
- A. at home
  - B. in the hall
  - C. in the field
  - D. in the mosque
46. Who was the father of prophet Muhammad (SAW)?
- A. Abdul Mutalib
  - B. Abdullahi
  - C. Abu Talib
  - D. Abu Sufyan
47. Which was the first battle to be fought in the history of Islam?
- A. Badr
  - B. Uhud
  - C. Khandaq
  - D. Hunain
48. Which city was prophet Muhammad born?
- A. Makkah
  - B. Madina
  - C. Taif
  - D. Yemen
49. Which is the shortest prayer?
- A. Dhuhur
  - B. Asr
  - C. Subh
  - D. Maghrib
50. Muslims fast during the month of
- A. Shaban
  - B. Muharram
  - C. Rajab
  - D. Ramadhan